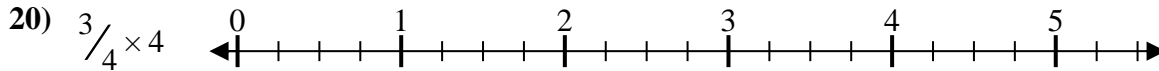
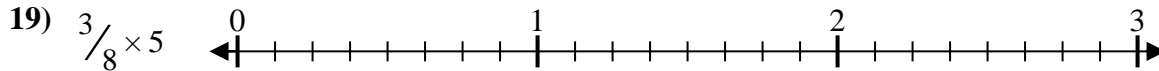
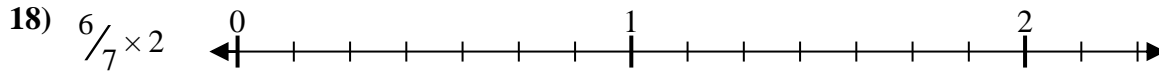
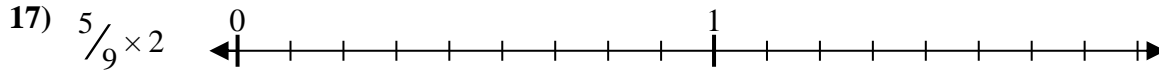
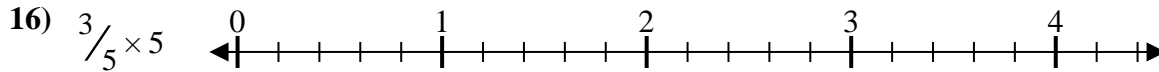
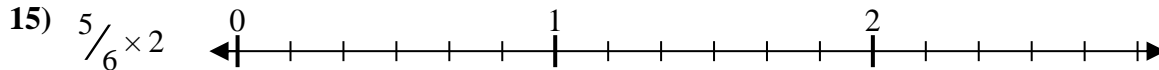
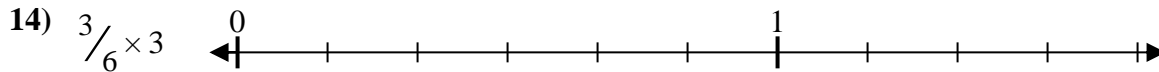
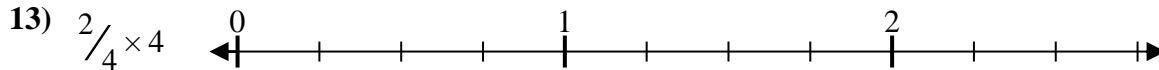
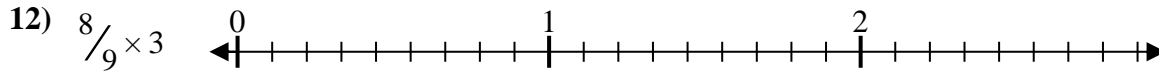

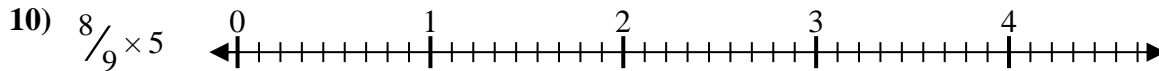
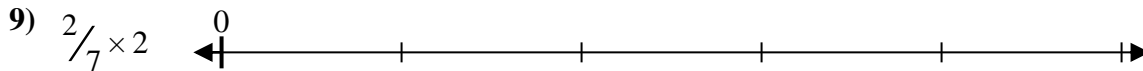
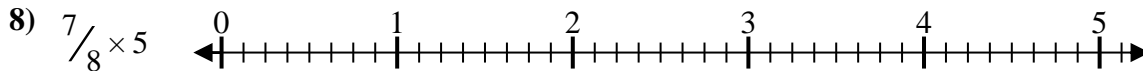
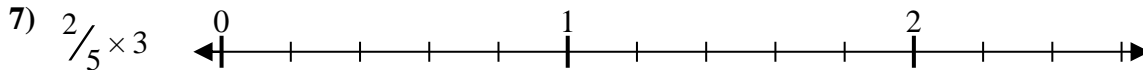
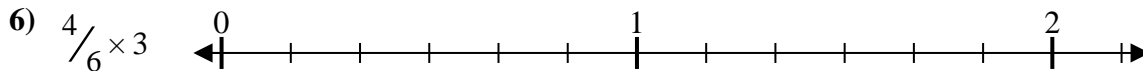
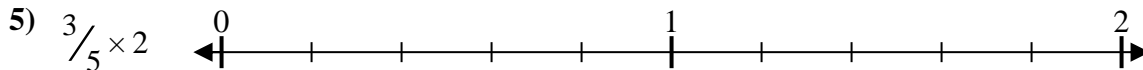
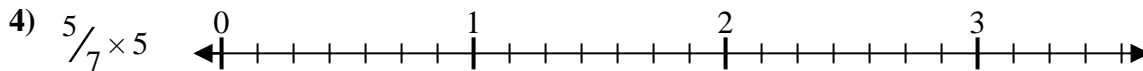
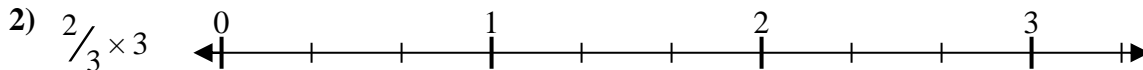
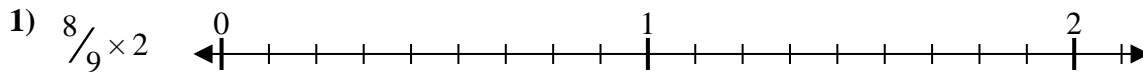




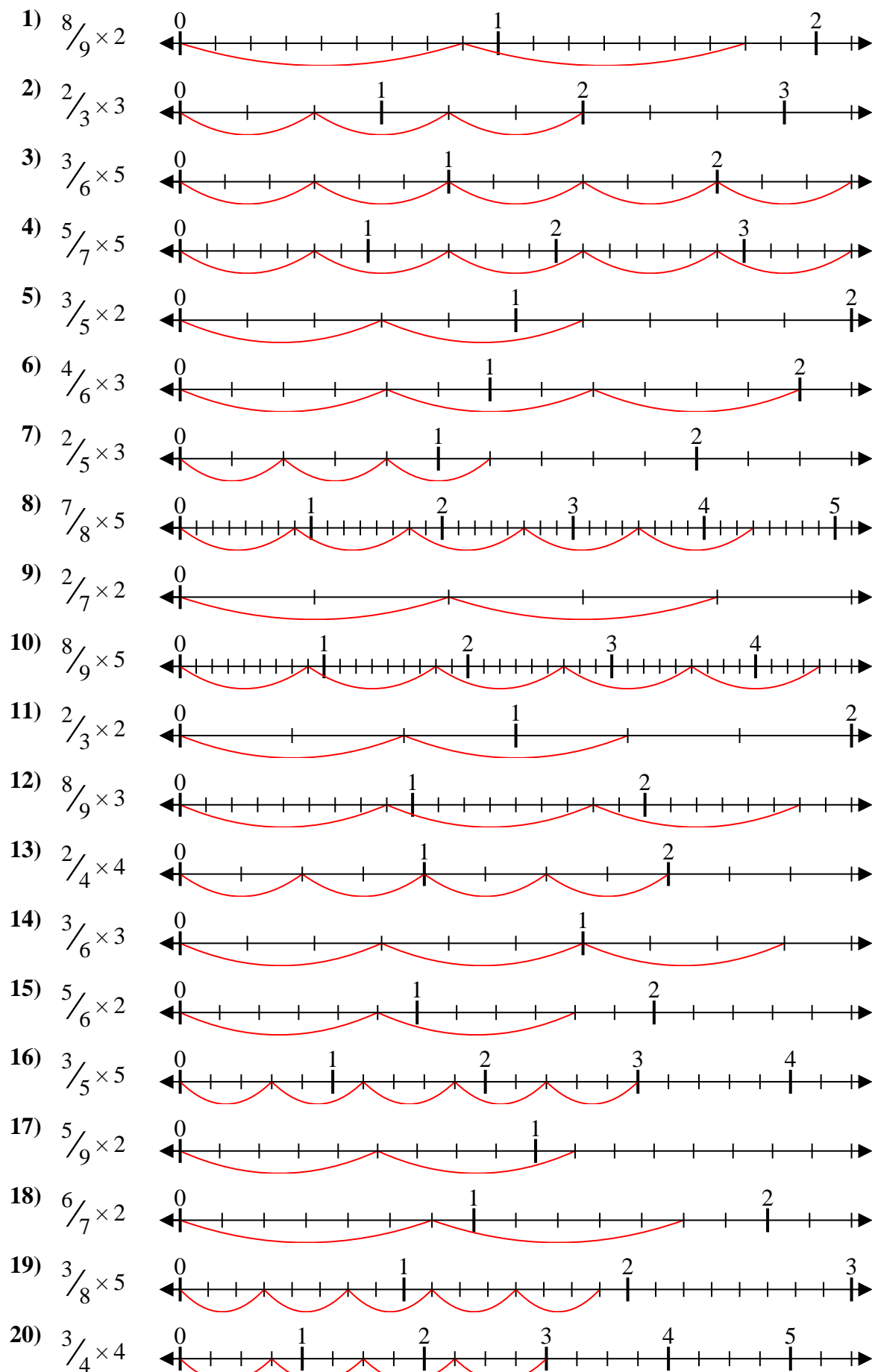
Solve each problem.

**Answers**


1. \_\_\_\_\_
2. \_\_\_\_\_
3. \_\_\_\_\_
4. \_\_\_\_\_
5. \_\_\_\_\_
6. \_\_\_\_\_
7. \_\_\_\_\_
8. \_\_\_\_\_
9. \_\_\_\_\_
10. \_\_\_\_\_
11. \_\_\_\_\_
12. \_\_\_\_\_
13. \_\_\_\_\_
14. \_\_\_\_\_
15. \_\_\_\_\_
16. \_\_\_\_\_
17. \_\_\_\_\_
18. \_\_\_\_\_
19. \_\_\_\_\_
20. \_\_\_\_\_



Solve each problem.



**Answers**

1.  $\frac{16}{9} = 1\frac{7}{9}$
2.  $\frac{6}{3} = 2$
3.  $\frac{15}{6} = 2\frac{1}{2}$
4.  $\frac{25}{7} = 3\frac{4}{7}$
5.  $\frac{6}{5} = 1\frac{1}{5}$
6.  $\frac{12}{6} = 2$
7.  $\frac{6}{5} = 1\frac{1}{5}$
8.  $\frac{35}{8} = 4\frac{3}{8}$
9.  $\frac{4}{7} = \frac{4}{7}$
10.  $\frac{40}{9} = 4\frac{4}{9}$
11.  $\frac{4}{3} = 1\frac{1}{3}$
12.  $\frac{24}{9} = 2\frac{2}{3}$
13.  $\frac{8}{4} = 2$
14.  $\frac{9}{6} = 1\frac{1}{2}$
15.  $\frac{10}{6} = 1\frac{2}{3}$
16.  $\frac{15}{5} = 3$
17.  $\frac{10}{9} = 1\frac{1}{9}$
18.  $\frac{12}{7} = 1\frac{5}{7}$
19.  $\frac{15}{8} = 1\frac{7}{8}$
20.  $\frac{12}{4} = 3$