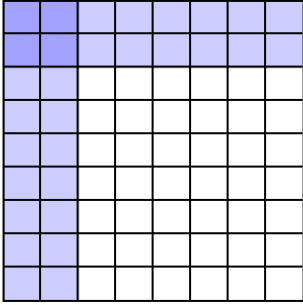


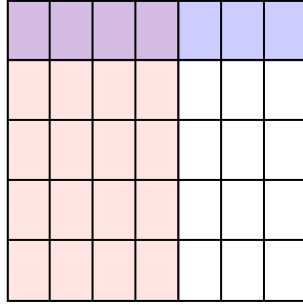


Use the box provided to show a visual example of how to multiply two fractions.

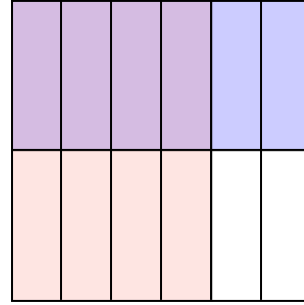
Ex) $\frac{2}{8} \times \frac{2}{9} =$



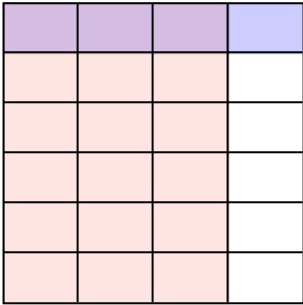
1) $\frac{4}{7} \times \frac{1}{5} =$



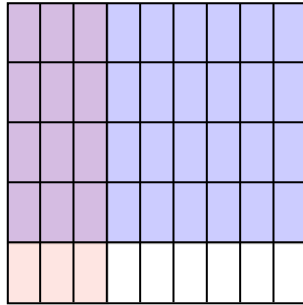
2) $\frac{4}{6} \times \frac{1}{2} =$



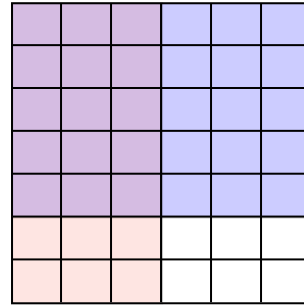
3) $\frac{3}{4} \times \frac{1}{6} =$




4) $\frac{3}{9} \times \frac{4}{5} =$



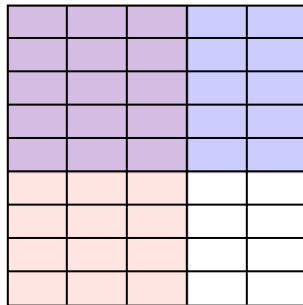
5) $\frac{3}{6} \times \frac{5}{7} =$



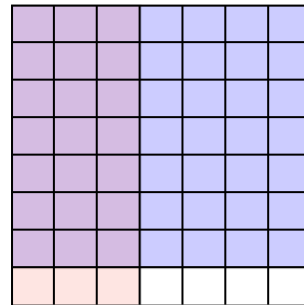
6) $\frac{1}{3} \times \frac{2}{3} =$



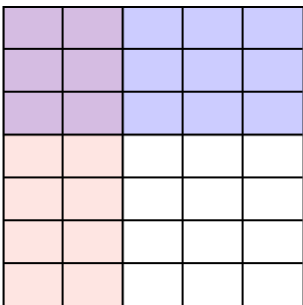
7) $\frac{3}{5} \times \frac{5}{9} =$



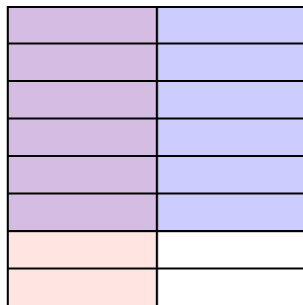
8) $\frac{3}{7} \times \frac{7}{8} =$



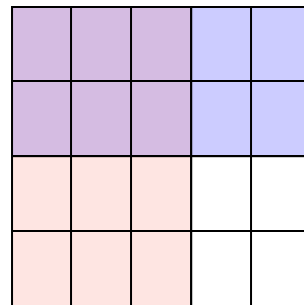
9) $\frac{2}{5} \times \frac{3}{7} =$



10) $\frac{1}{2} \times \frac{6}{8} =$



11) $\frac{3}{5} \times \frac{2}{4} =$



Answers

Ex. $\frac{4}{72}$

1. $\frac{4}{35}$

2. $\frac{4}{12}$

3. $\frac{3}{24}$

4. $\frac{12}{45}$

5. $\frac{15}{42}$

6. $\frac{2}{9}$

7. $\frac{15}{45}$

8. $\frac{21}{56}$

9. $\frac{6}{35}$

10. $\frac{6}{16}$

11. $\frac{6}{20}$