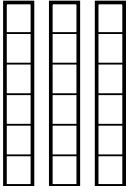


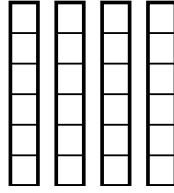


Use the visual models to solve.

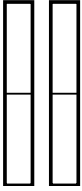
1) $\frac{5}{6} \times 3 =$



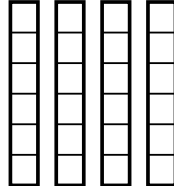
2) $\frac{5}{6} \times 4 =$



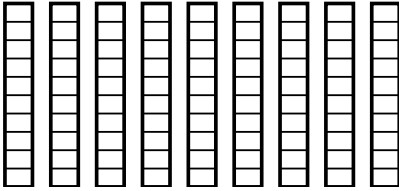
3) $\frac{1}{2} \times 2 =$



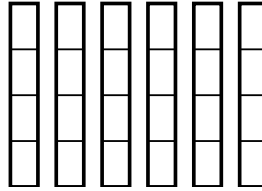
4) $\frac{4}{6} \times 4 =$



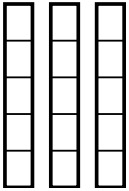
5) $\frac{7}{10} \times 9 =$



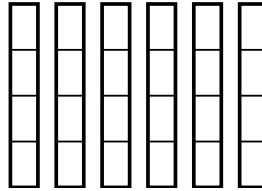
6) $\frac{2}{4} \times 6 =$



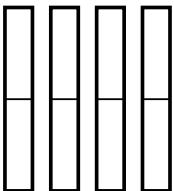
7) $\frac{2}{5} \times 3 =$



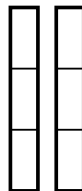
8) $\frac{3}{4} \times 6 =$



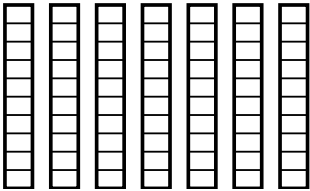
9) $\frac{1}{2} \times 4 =$



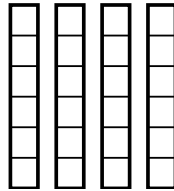
10) $\frac{2}{3} \times 2 =$



11) $\frac{8}{10} \times 7 =$



12) $\frac{3}{6} \times 4 =$



Answers

1. _____

2. _____

3. _____

4. _____

5. _____

6. _____

7. _____

8. _____

9. _____

10. _____

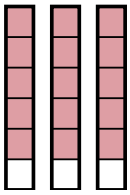
11. _____

12. _____

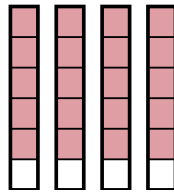


Use the visual models to solve.

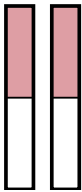
1) $\frac{5}{6} \times 3 =$



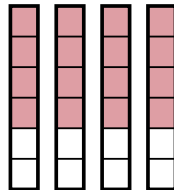
2) $\frac{5}{6} \times 4 =$



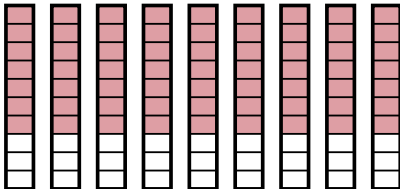
3) $\frac{1}{2} \times 2 =$



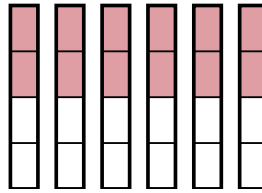
4) $\frac{4}{6} \times 4 =$



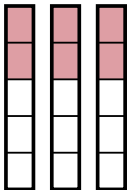
5) $\frac{7}{10} \times 9 =$



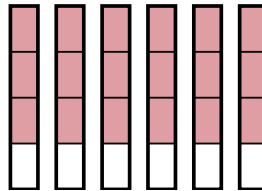
6) $\frac{2}{4} \times 6 =$



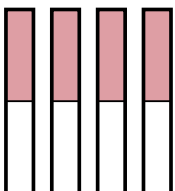
7) $\frac{2}{5} \times 3 =$



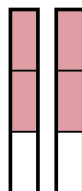
8) $\frac{3}{4} \times 6 =$



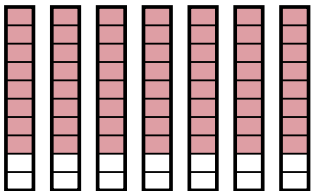
9) $\frac{1}{2} \times 4 =$



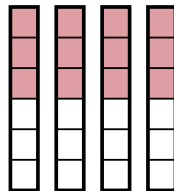
10) $\frac{2}{3} \times 2 =$



11) $\frac{8}{10} \times 7 =$



12) $\frac{3}{6} \times 4 =$



Answers

1. $\frac{15}{6}$

2. $\frac{20}{6}$

3. $\frac{2}{2}$

4. $\frac{16}{6}$

5. $\frac{63}{10}$

6. $\frac{12}{4}$

7. $\frac{6}{5}$

8. $\frac{18}{4}$

9. $\frac{4}{2}$

10. $\frac{4}{3}$

11. $\frac{56}{10}$

12. $\frac{12}{6}$