



**Determine which letter best describes the shaded portion.****Answers**

1)




- A. four-quarters
B. two-halves
C. three-quarters

2)



- A. one-half
B. three-quarters
C. two-quarters

3)



- A. two-halves
B. one-half
C. two-quarters

1. _____

2. _____

3. _____

4. _____

5. _____

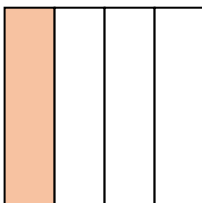
6. _____

7. _____

8. _____

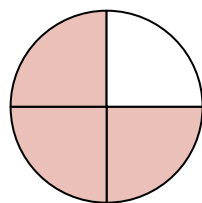
9. _____

4)




- A. one-fourth
B. one-half
C. two-fourths

5)



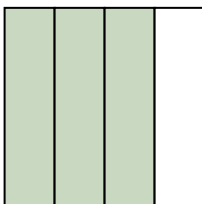
- A. two-fourths
B. three-fourths
C. two-halves

6)



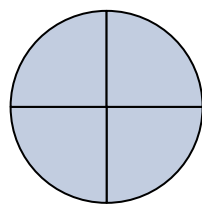
- A. three-fourths
B. two-halves
C. four-quarters

7)



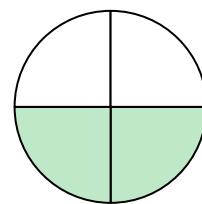
- A. three-fourths
B. four-fourths
C. two-quarters

8)



- A. two-quarters
B. two-halves
C. four-quarters

9)




- A. three-quarters
B. two-halves
C. two-fourths



Determine which letter best describes the shaded portion.


Answers

1)




- A. four-quarters
B. two-halves
C. three-quarters

2)



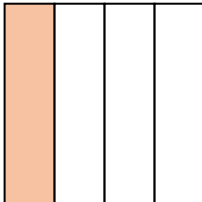
- A. one-half
B. three-quarters
C. two-quarters

3)



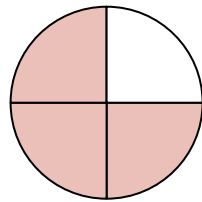
- A. two-halves
B. one-half
C. two-quarters

4)




- A. one-fourth
B. one-half
C. two-fourths

5)



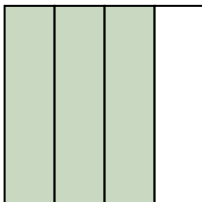
- A. two-fourths
B. three-fourths
C. two-halves

6)



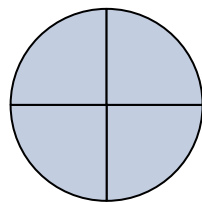
- A. three-fourths
B. two-halves
C. four-quarters

7)



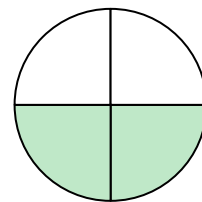
- A. three-fourths
B. four-fourths
C. two-quarters

8)



- A. two-quarters
B. two-halves
C. four-quarters

9)



- A. three-quarters
B. two-halves
C. two-fourths

1. **B**2. **A**3. **B**4. **A**5. **B**6. **B**7. **A**8. **C**9. **C**