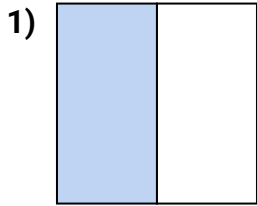
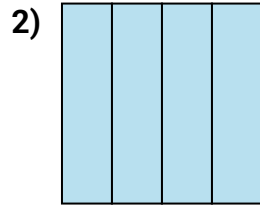




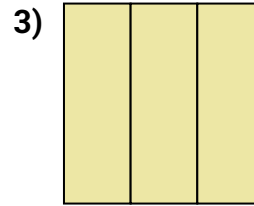
Determine which letter best describes the shaded portion.

Answers

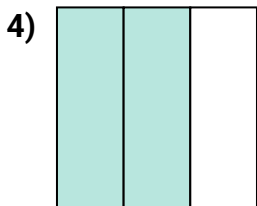
- A. two-halves
B. one-half
C. one-quarter




- A. four-quarters
B. two-halves
C. three-fourths



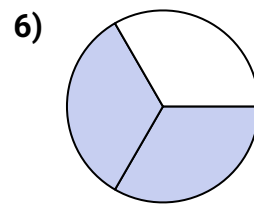
- A. two-halves
B. three-thirds
C. three-fourths



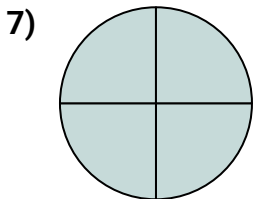
- A. two-quarters
B. two-thirds
C. three-quarters



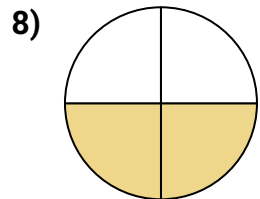
- A. two-halves
B. four-fourths
C. one-half



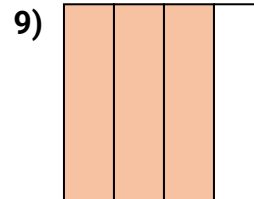
- A. three-quarters
B. two-thirds
C. one-half



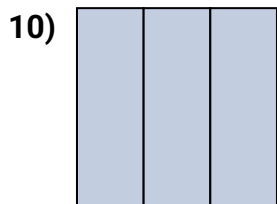
- A. one-fourth
B. two-fourths
C. four-fourths



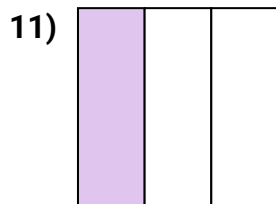
- A. one-fourth
B. two-halves
C. two-quarters




- A. one-quarter
B. two-halves
C. three-quarters



- A. two-halves
B. three-thirds
C. three-fourths



- A. one-third
B. two-fourths
C. four-quarters



- A. one-quarter
B. four-fourths
C. one-half

1. _____

2. _____

3. _____

4. _____

5. _____

6. _____

7. _____

8. _____

9. _____

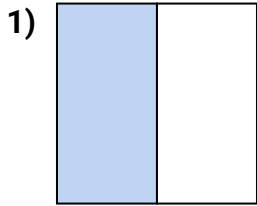
10. _____

11. _____

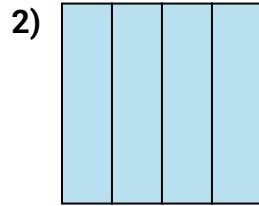
12. _____



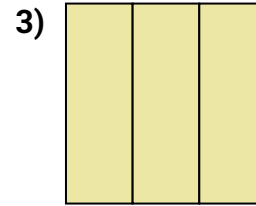
Determine which letter best describes the shaded portion.

Answers

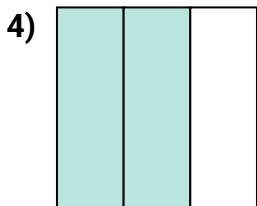
- A. two-halves
B. one-half
C. one-quarter




- A. four-quarters
B. two-halves
C. three-fourths



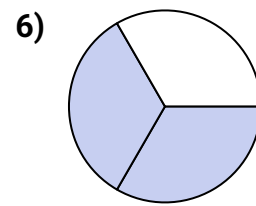
- A. two-halves
B. three-thirds
C. three-fourths



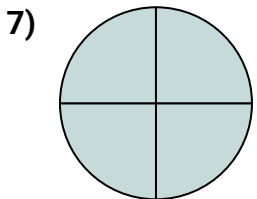
- A. two-quarters
B. two-thirds
C. three-quarters



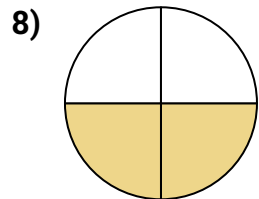
- A. two-halves
B. four-fourths
C. one-half



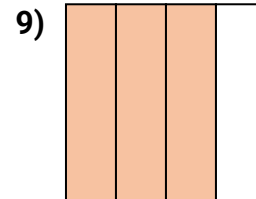
- A. three-quarters
B. two-thirds
C. one-half



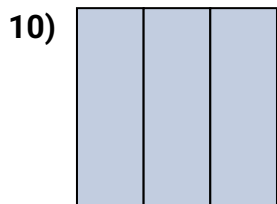
- A. one-fourth
B. two-fourths
C. four-fourths



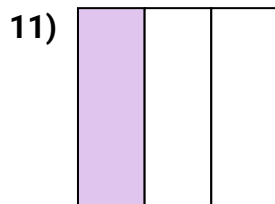
- A. one-fourth
B. two-halves
C. two-quarters



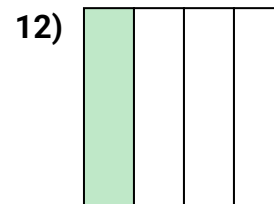
- A. one-quarter
B. two-halves
C. three-quarters



- A. two-halves
B. three-thirds
C. three-fourths



- A. one-third
B. two-fourths
C. four-quarters



- A. one-quarter
B. four-fourths
C. one-half

1. **B**2. **A**3. **B**4. **B**5. **C**6. **B**7. **C**8. **C**9. **C**10. **B**11. **A**12. **A**