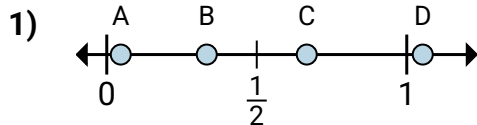
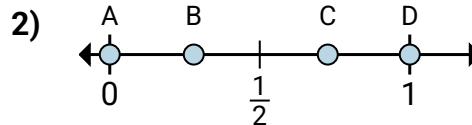




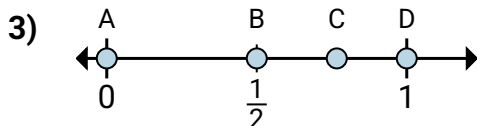
Determine which letter best shows the location of the fraction.

Answers

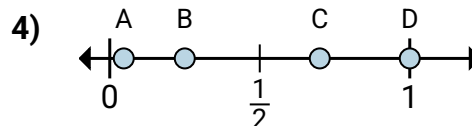
- a. Which letter best shows $\frac{1}{3}$?
b. Which letter best shows $\frac{2}{3}$?



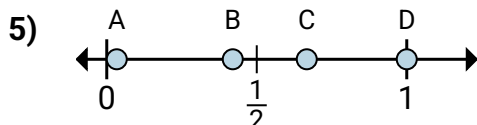
- a. Which letter best shows $\frac{0}{4}$?
b. Which letter best shows $\frac{4}{4}$?



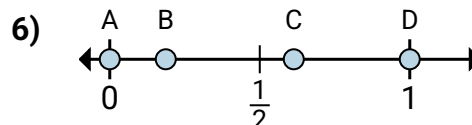
- a. Which letter best shows $\frac{0}{2}$?
b. Which letter best shows $\frac{2}{2}$?



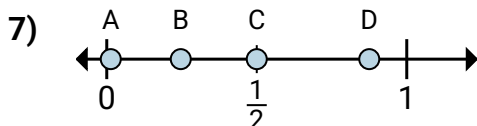
- a. Which letter best shows $\frac{2}{8}$?
b. Which letter best shows $\frac{8}{8}$?



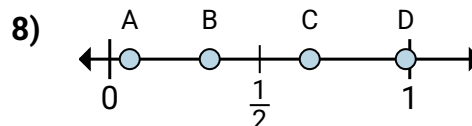
- a. Which letter best shows $\frac{6}{6}$?
b. Which letter best shows $\frac{4}{6}$?



- a. Which letter best shows $\frac{0}{2}$?
b. Which letter best shows $\frac{2}{2}$?



- a. Which letter best shows $\frac{7}{8}$?
b. Which letter best shows $\frac{4}{8}$?



- a. Which letter best shows $\frac{2}{3}$?
b. Which letter best shows $\frac{1}{3}$?

1. _____

2. _____

3. _____

4. _____

5. _____

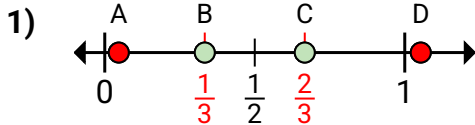
6. _____

7. _____

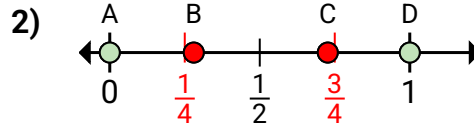
8. _____



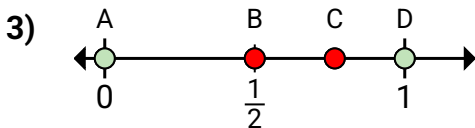
Determine which letter best shows the location of the fraction.

Answers

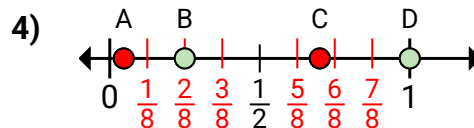
- a. Which letter best shows $\frac{1}{3}$?
b. Which letter best shows $\frac{2}{3}$?



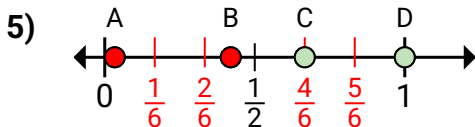
- a. Which letter best shows $\frac{0}{4}$?
b. Which letter best shows $\frac{4}{4}$?



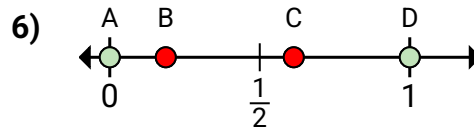
- a. Which letter best shows $\frac{0}{2}$?
b. Which letter best shows $\frac{2}{2}$?



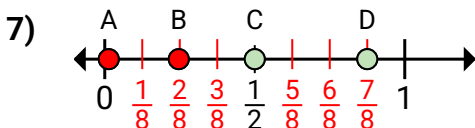
- a. Which letter best shows $\frac{2}{8}$?
b. Which letter best shows $\frac{8}{8}$?



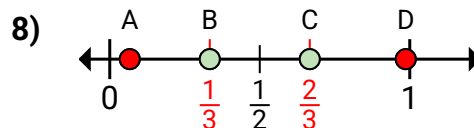
- a. Which letter best shows $\frac{6}{6}$?
b. Which letter best shows $\frac{4}{6}$?



- a. Which letter best shows $\frac{0}{2}$?
b. Which letter best shows $\frac{2}{2}$?



- a. Which letter best shows $\frac{7}{8}$?
b. Which letter best shows $\frac{4}{8}$?



- a. Which letter best shows $\frac{2}{3}$?
b. Which letter best shows $\frac{1}{3}$?

1. **B** **C**
2. **A** **D**
3. **A** **D**
4. **B** **D**
5. **D** **C**
6. **A** **D**
7. **D** **C**
8. **C** **B**