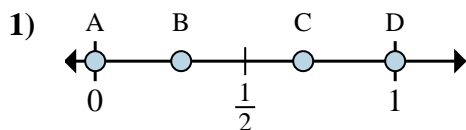


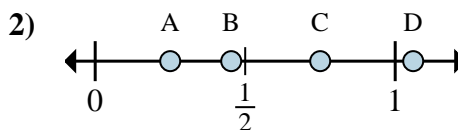


Determine which letter best shows the location of the fraction.

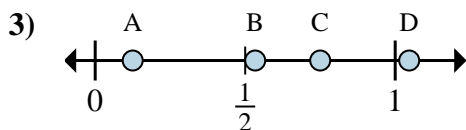
**Answers**



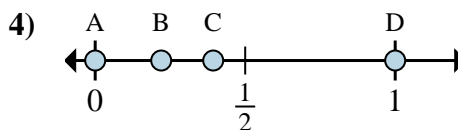
- a. Which letter best shows  $\frac{0}{2}$ ?
- b. Which letter best shows  $\frac{2}{2}$ ?



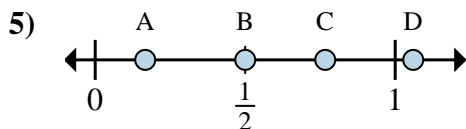
- a. Which letter best shows  $\frac{1}{4}$ ?
- b. Which letter best shows  $\frac{3}{4}$ ?



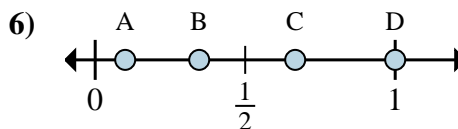
- a. Which letter best shows  $\frac{6}{8}$ ?
- b. Which letter best shows  $\frac{1}{8}$ ?



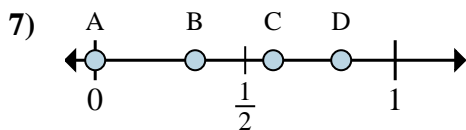
- a. Which letter best shows  $\frac{0}{2}$ ?
- b. Which letter best shows  $\frac{2}{2}$ ?



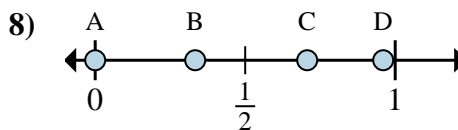
- a. Which letter best shows  $\frac{3}{6}$ ?
- b. Which letter best shows  $\frac{1}{6}$ ?



- a. Which letter best shows  $\frac{2}{3}$ ?
- b. Which letter best shows  $\frac{3}{3}$ ?



- a. Which letter best shows  $\frac{0}{3}$ ?
- b. Which letter best shows  $\frac{1}{3}$ ?



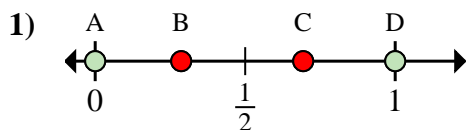
- a. Which letter best shows  $\frac{0}{6}$ ?
- b. Which letter best shows  $\frac{2}{6}$ ?

- 1. \_\_\_\_\_
- 2. \_\_\_\_\_
- 3. \_\_\_\_\_
- 4. \_\_\_\_\_
- 5. \_\_\_\_\_
- 6. \_\_\_\_\_
- 7. \_\_\_\_\_
- 8. \_\_\_\_\_

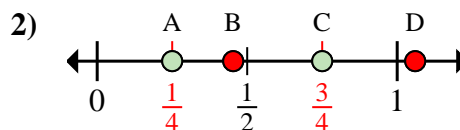


Determine which letter best shows the location of the fraction.

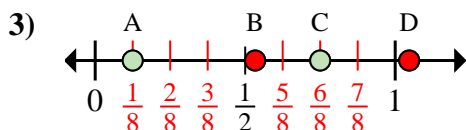
**Answers**



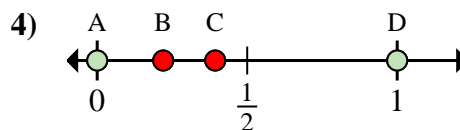
- a. Which letter best shows  $\frac{0}{2}$ ?  
 b. Which letter best shows  $\frac{2}{2}$ ?



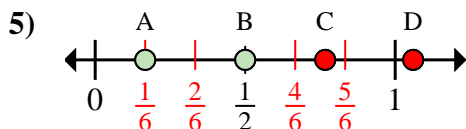
- a. Which letter best shows  $\frac{1}{4}$ ?  
 b. Which letter best shows  $\frac{3}{4}$ ?



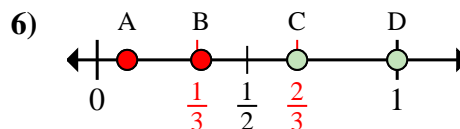
- a. Which letter best shows  $\frac{6}{8}$ ?  
 b. Which letter best shows  $\frac{1}{8}$ ?



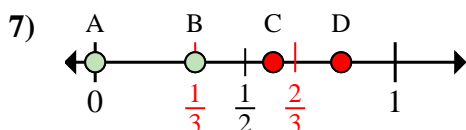
- a. Which letter best shows  $\frac{0}{2}$ ?  
 b. Which letter best shows  $\frac{2}{2}$ ?



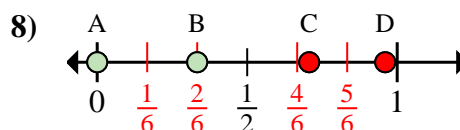
- a. Which letter best shows  $\frac{3}{6}$ ?  
 b. Which letter best shows  $\frac{1}{6}$ ?



- a. Which letter best shows  $\frac{2}{3}$ ?  
 b. Which letter best shows  $\frac{3}{3}$ ?



- a. Which letter best shows  $\frac{0}{3}$ ?  
 b. Which letter best shows  $\frac{1}{3}$ ?



- a. Which letter best shows  $\frac{0}{6}$ ?  
 b. Which letter best shows  $\frac{2}{6}$ ?

1.   A     D    
 2.   A     C    
 3.   C     A    
 4.   A     D    
 5.   B     A    
 6.   C     D    
 7.   A     B    
 8.   A     B