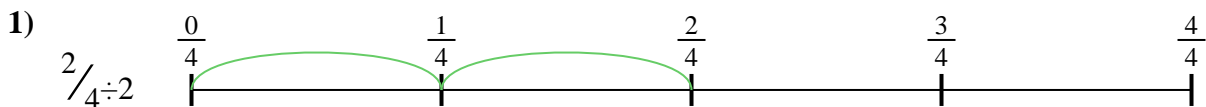


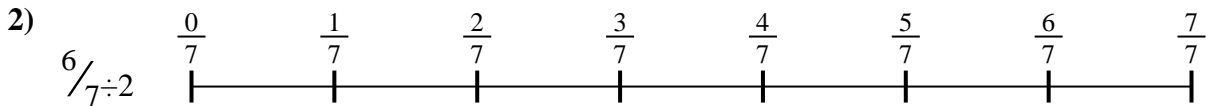


Use the numberline to solve each problem. The first is marked for you.

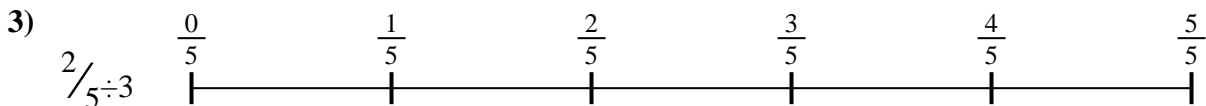
Answers




1. _____



2. _____



3. _____




4. _____



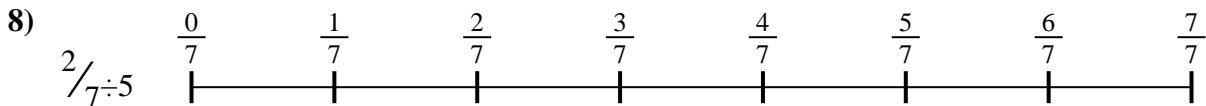
5. _____



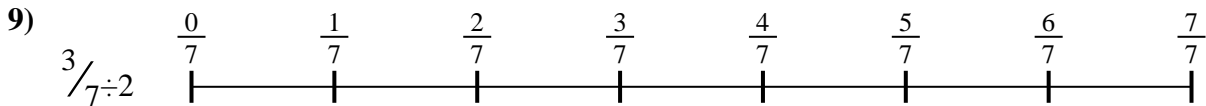
6. _____



7. _____



8. _____

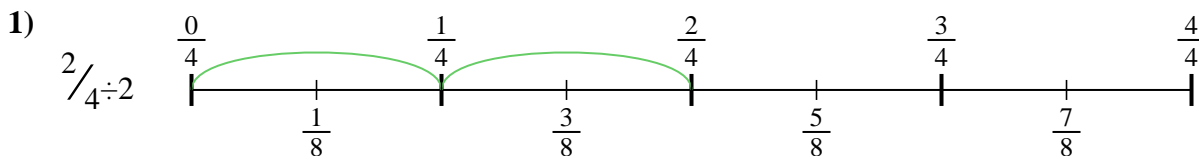


9. _____

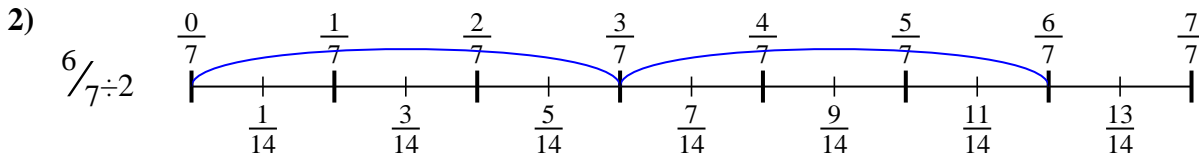


Use the numberline to solve each problem. The first is marked for you.

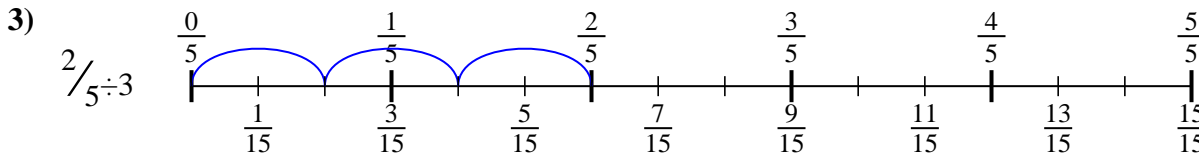
Answers



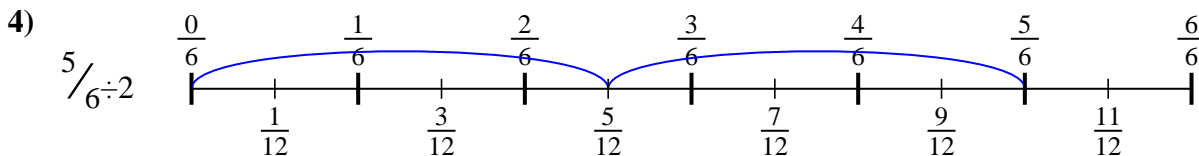
1. $\frac{2}{8}$



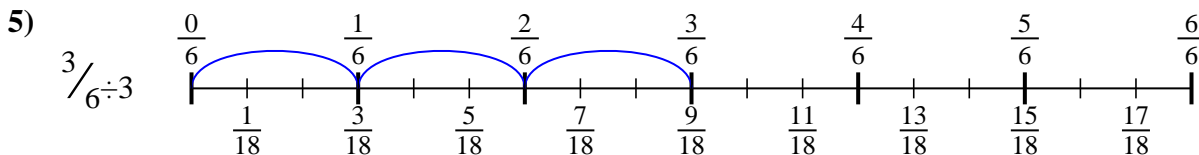
2. $\frac{6}{14}$



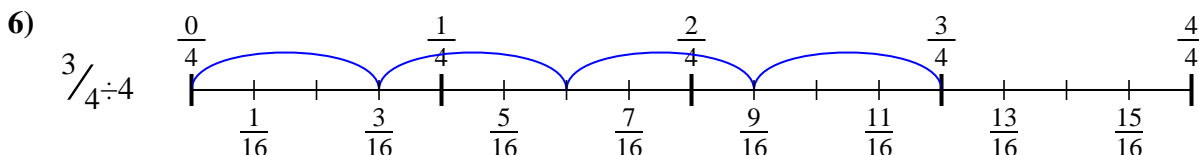
3. $\frac{2}{15}$



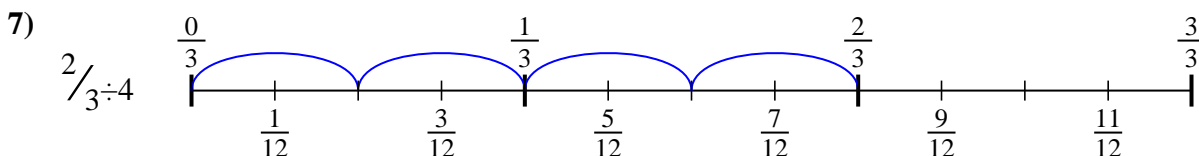
4. $\frac{5}{12}$



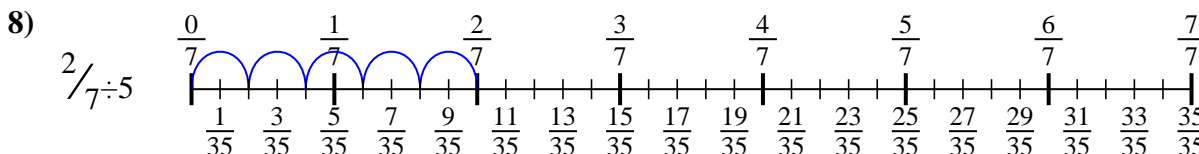
5. $\frac{3}{18}$



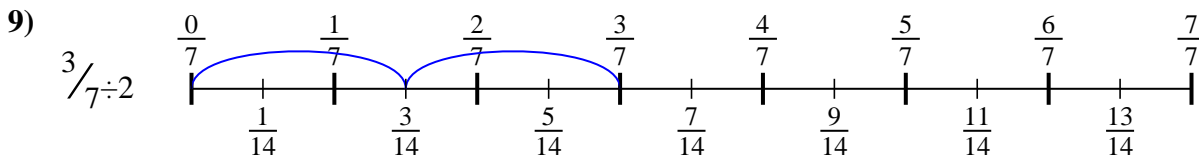
6. $\frac{3}{16}$



7. $\frac{2}{12}$



8. $\frac{2}{35}$



9. $\frac{3}{14}$



Use the numberline to solve each problem. The first is marked for you.

Answers

$\frac{2}{15}$

$\frac{2}{8}$

$\frac{2}{35}$

$\frac{5}{12}$

$\frac{2}{12}$

$\frac{3}{18}$

$\frac{6}{14}$

$\frac{3}{14}$

$\frac{3}{16}$

1. _____
2. _____
3. _____
4. _____
5. _____
6. _____
7. _____
8. _____
9. _____

