




Use the numberline to solve each problem. The first is marked for you.


Answers



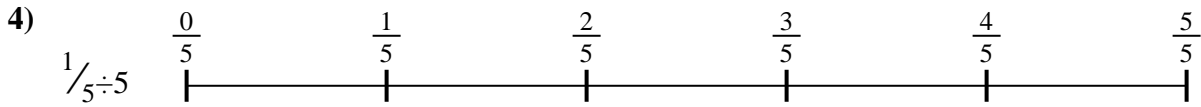
1. _____



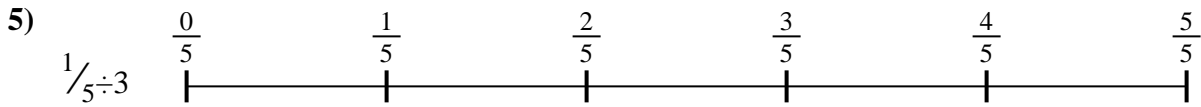
2. _____



3. _____



4. _____



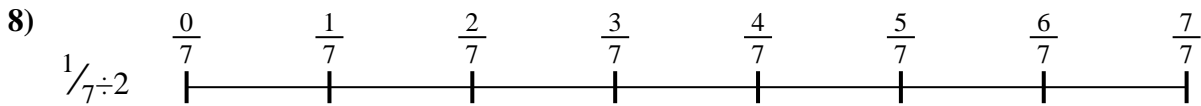
5. _____



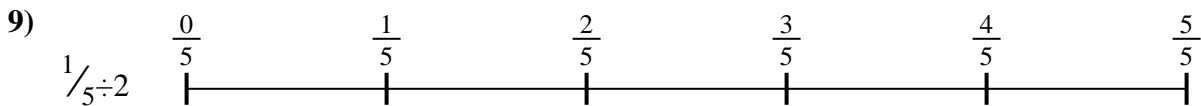
6. _____



7. _____



8. _____

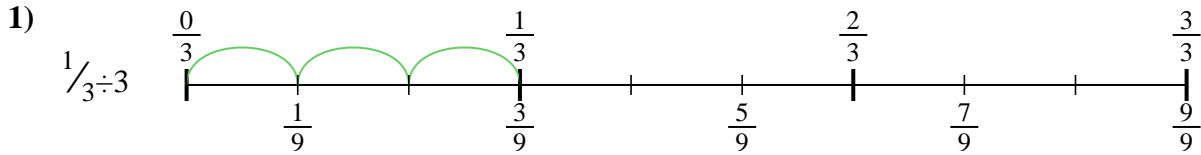


9. _____

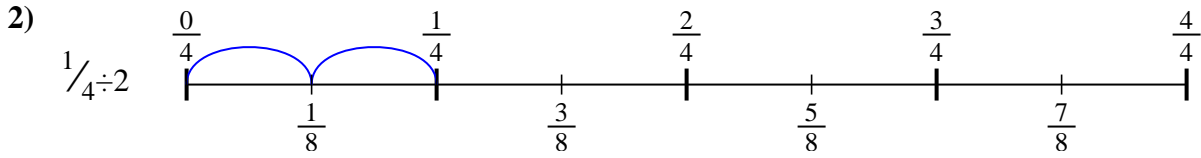


Use the numberline to solve each problem. The first is marked for you.

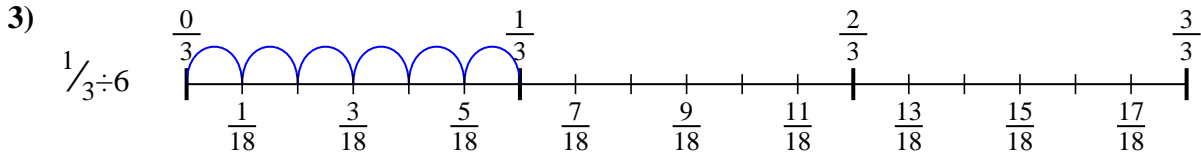
Answers



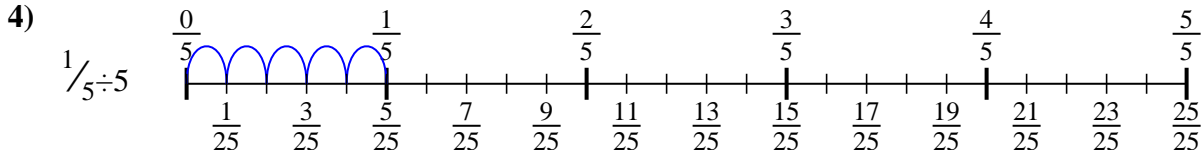
1. $\frac{1}{9}$



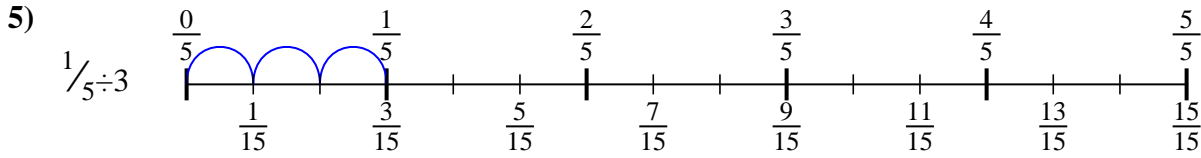
2. $\frac{1}{8}$



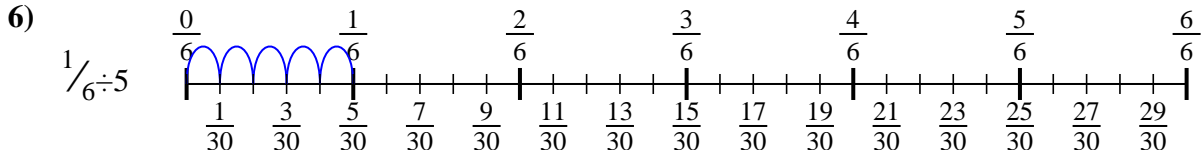
3. $\frac{1}{18}$



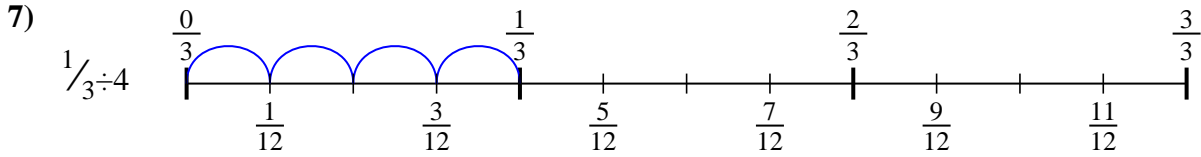
4. $\frac{1}{25}$



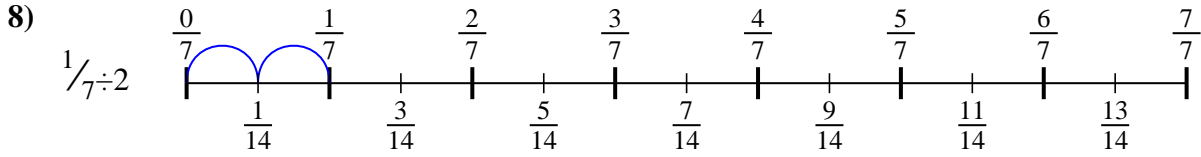
5. $\frac{1}{15}$



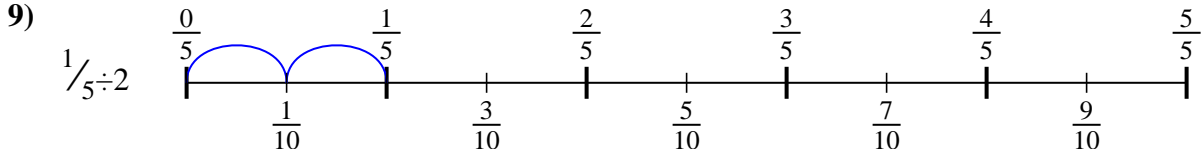
6. $\frac{1}{30}$



7. $\frac{1}{12}$



8. $\frac{1}{14}$



9. $\frac{1}{10}$



Use the numberline to solve each problem. The first is marked for you.

Answers

$\frac{1}{14}$

$\frac{1}{9}$

$\frac{1}{30}$

$\frac{1}{10}$

$\frac{1}{18}$

$\frac{1}{8}$

$\frac{1}{25}$

$\frac{1}{15}$

$\frac{1}{12}$

1. _____
2. _____
3. _____
4. _____
5. _____
6. _____
7. _____
8. _____
9. _____

