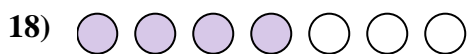

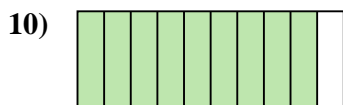
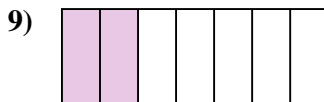
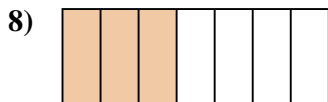
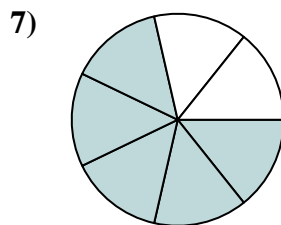
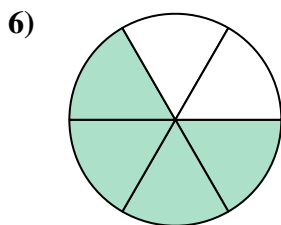
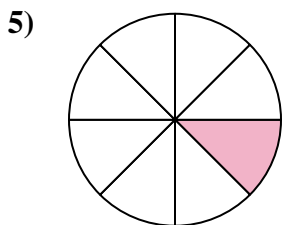
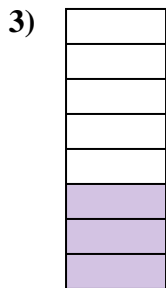






Determine if the shaded amount is 'more', 'less' or 'equal' to half.

Answers



1. \_\_\_\_\_

2. \_\_\_\_\_

3. \_\_\_\_\_

4. \_\_\_\_\_

5. \_\_\_\_\_

6. \_\_\_\_\_

7. \_\_\_\_\_

8. \_\_\_\_\_

9. \_\_\_\_\_

10. \_\_\_\_\_

11. \_\_\_\_\_

12. \_\_\_\_\_

13. \_\_\_\_\_

14. \_\_\_\_\_

15. \_\_\_\_\_

16. \_\_\_\_\_

17. \_\_\_\_\_


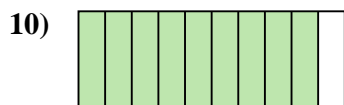
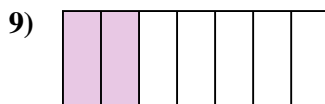
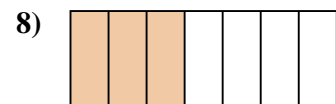
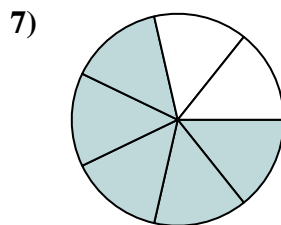
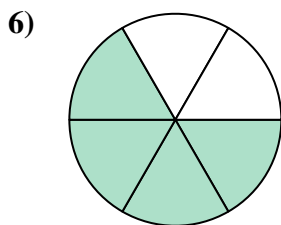
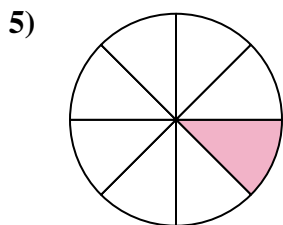
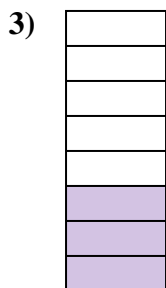


18. \_\_\_\_\_

19. \_\_\_\_\_

20. \_\_\_\_\_



Determine if the shaded amount is 'more', 'less' or 'equal' to half.



Answers

1. more

2. equal

3. less

4. less

5. less

6. more

7. more

8. less

9. less

10. more

11. equal

12. more

13. less

14. less

15. less

16. more

17. less

18. more

19. more

20. equal