



Use the visual model to solve each problem.

$4 \frac{3}{5} - 2 \frac{4}{5} = ?$

To solve a fraction subtraction problem one strategy is to shade in the starting amount first

( $4 \frac{3}{5}$ )



Next mark off the wholes (2).



Finally mark off the fraction  $\frac{4}{5}$ .



Now we can see that  $4 \frac{3}{5} - 2 \frac{4}{5} = 1 \frac{4}{5}$

Answers

1. \_\_\_\_\_
2. \_\_\_\_\_
3. \_\_\_\_\_
4. \_\_\_\_\_
5. \_\_\_\_\_
6. \_\_\_\_\_
7. \_\_\_\_\_
8. \_\_\_\_\_
9. \_\_\_\_\_
10. \_\_\_\_\_

1)  $6 \frac{1}{6} - 3 \frac{5}{6} =$

2)  $4 \frac{1}{4} - 2 \frac{2}{4} =$

3)  $6 \frac{1}{5} - 2 \frac{2}{5} =$

4)  $5 \frac{2}{4} - 1 \frac{3}{4} =$

5)  $7 \frac{7}{10} - 5 \frac{3}{10} =$

6)  $7 \frac{11}{12} - 3 \frac{5}{12} =$

7)  $6 \frac{1}{8} - 3 \frac{3}{8} =$

8)  $6 \frac{3}{4} - 3 \frac{3}{4} =$

9)  $6 \frac{2}{4} - 1 \frac{1}{4} =$

10)  $6 \frac{2}{12} - 4 \frac{5}{12} =$



Use the visual model to solve each problem.

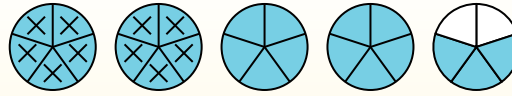
$$4 \frac{3}{5} - 2 \frac{4}{5} = ?$$

To solve a fraction subtraction problem one strategy is to shade in the starting amount first

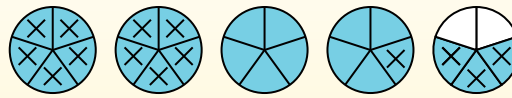
( $4 \frac{3}{5}$ )



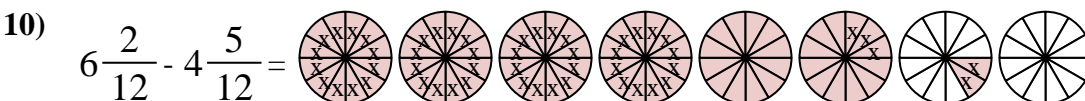
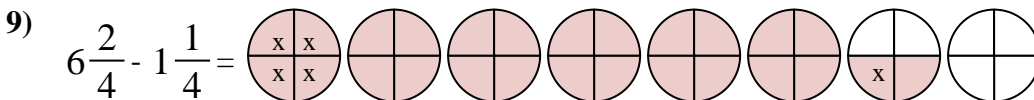
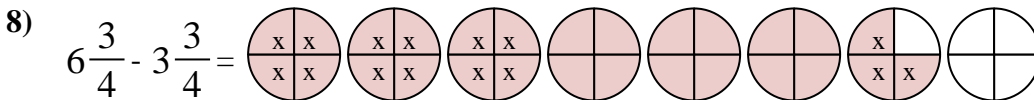
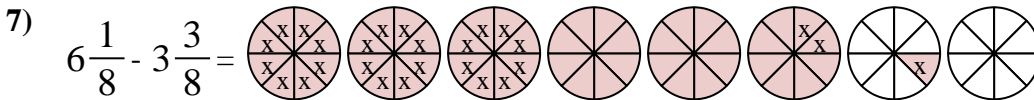
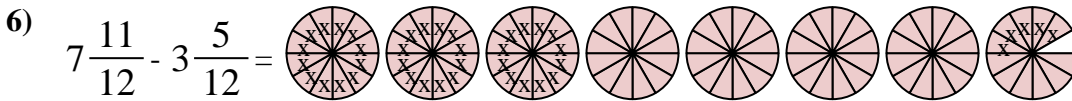
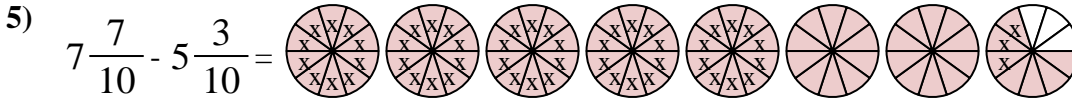
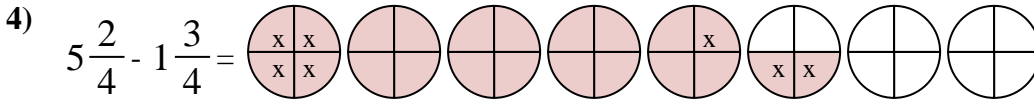
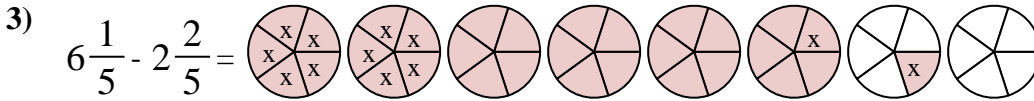
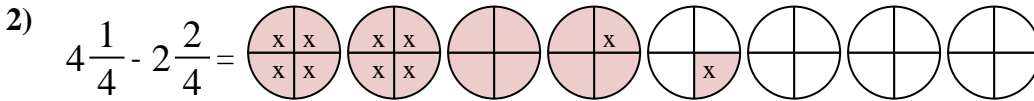
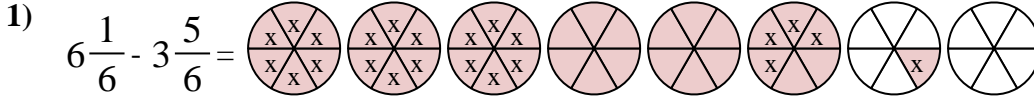
Next mark off the wholes (2).



Finally mark off the fraction  $\frac{4}{5}$ .



Now we can see that  $4 \frac{3}{5} - 2 \frac{4}{5} = 1 \frac{1}{5}$



## Answers

1.            $2 \frac{2}{6}$           

2.            $1 \frac{3}{4}$           

3.            $3 \frac{4}{5}$           

4.            $3 \frac{3}{4}$           

5.            $2 \frac{4}{10}$           

6.            $4 \frac{6}{12}$           

7.            $2 \frac{6}{8}$           

8.            $3 \frac{0}{4}$           

9.            $5 \frac{1}{4}$           

10.            $1 \frac{9}{12}$