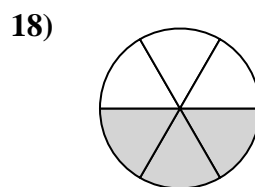
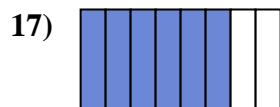
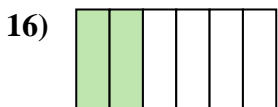
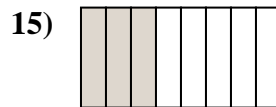
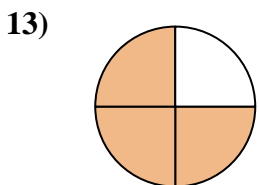
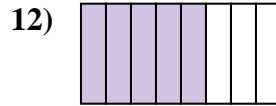
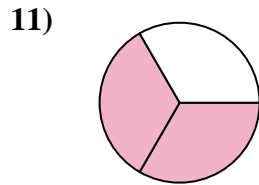
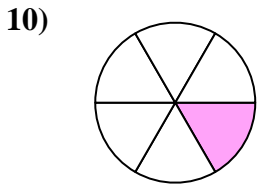
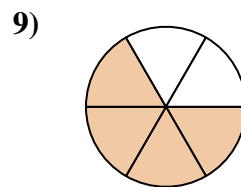
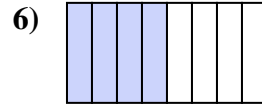
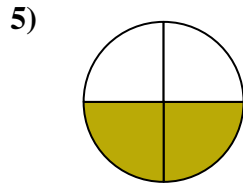
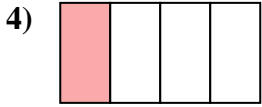
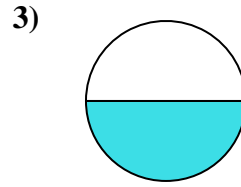
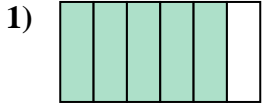




Write the shaded amount as a fraction of the whole amount.



Answers

1. \_\_\_\_\_

2. \_\_\_\_\_

3. \_\_\_\_\_

4. \_\_\_\_\_

5. \_\_\_\_\_

6. \_\_\_\_\_

7. \_\_\_\_\_

8. \_\_\_\_\_

9. \_\_\_\_\_

10. \_\_\_\_\_

11. \_\_\_\_\_

12. \_\_\_\_\_

13. \_\_\_\_\_

14. \_\_\_\_\_

15. \_\_\_\_\_

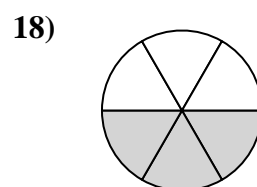
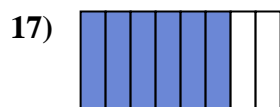
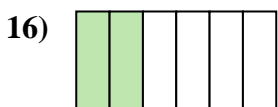
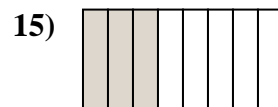
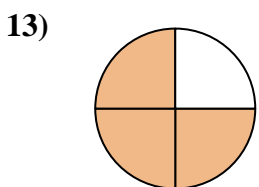
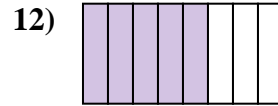
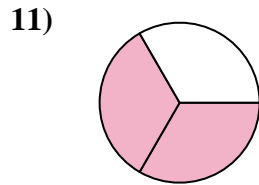
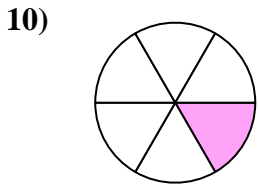
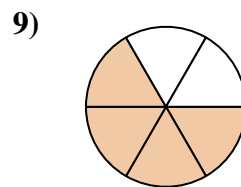
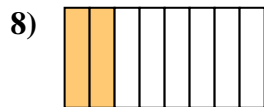
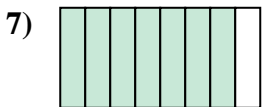
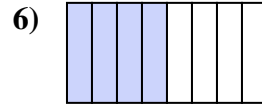
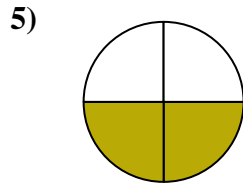
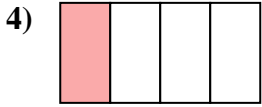
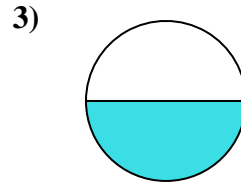
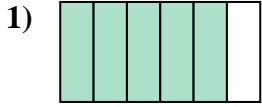
16. \_\_\_\_\_

17. \_\_\_\_\_

18. \_\_\_\_\_



Write the shaded amount as a fraction of the whole amount.



Answers

1.  $\frac{5}{6}$

2.  $\frac{1}{3}$

3.  $\frac{1}{2}$

4.  $\frac{1}{4}$

5.  $\frac{2}{4}$

6.  $\frac{4}{8}$

7.  $\frac{7}{8}$

8.  $\frac{2}{8}$

9.  $\frac{4}{6}$

10.  $\frac{1}{6}$

11.  $\frac{2}{3}$

12.  $\frac{5}{8}$

13.  $\frac{3}{4}$

14.  $\frac{1}{8}$

15.  $\frac{3}{8}$

16.  $\frac{2}{6}$

17.  $\frac{6}{8}$

18.  $\frac{3}{6}$