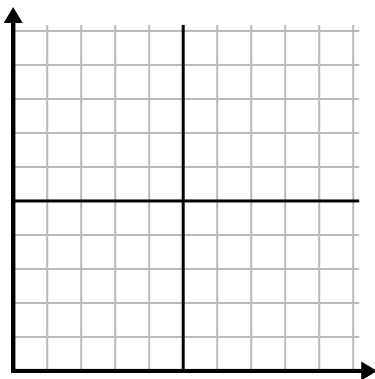




Fill in the grid using the chart.

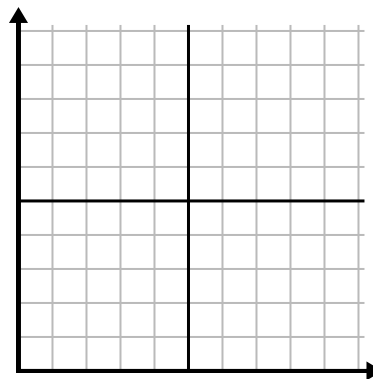
1)

Week	1	2	3	4	5	6	7
Hours of TV watched	50	25	45	10	15	30	35



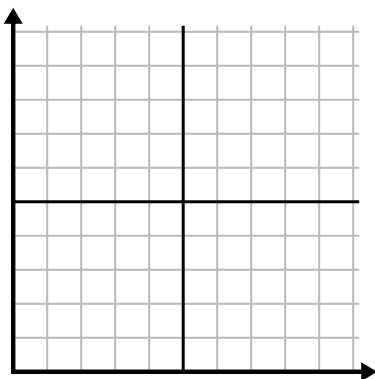
2)

Day	1	2	3	4	5	6
Texts Sent	20	5	50	30	10	15



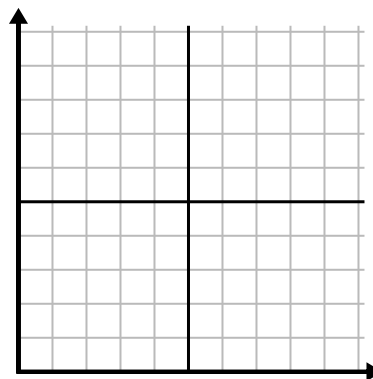
3)

Day	1	2	3	4	5	6
Youtube Videos Watched	300	240	60	210	180	270



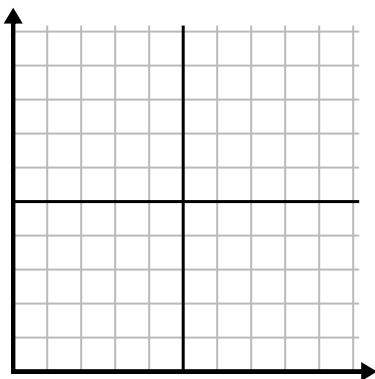
4)

Day	1	2	3	4	5
Money Spent	5	6	7	10	3



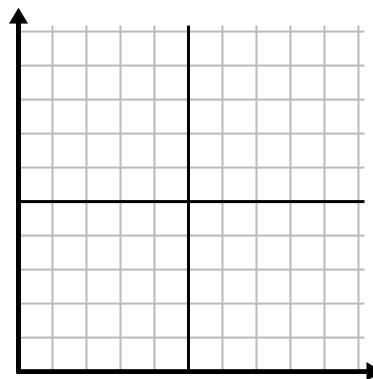
5)

Hour	1	2	3	4	5	6	7
Amount Sold	8	1	6	10	3	7	4



6)

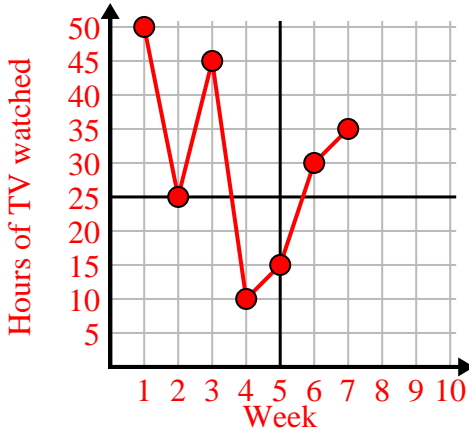
Month	1	2	3	4	5
Electric Bill Price	125	200	150	25	75



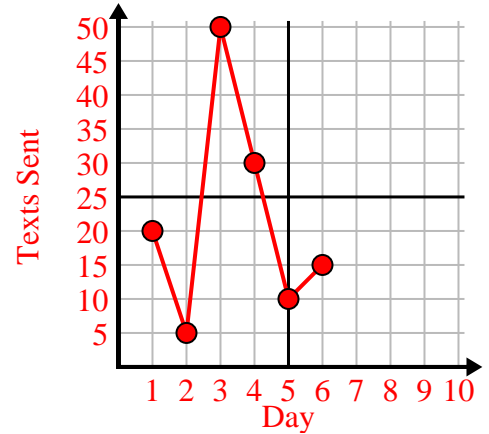


Fill in the grid using the chart.

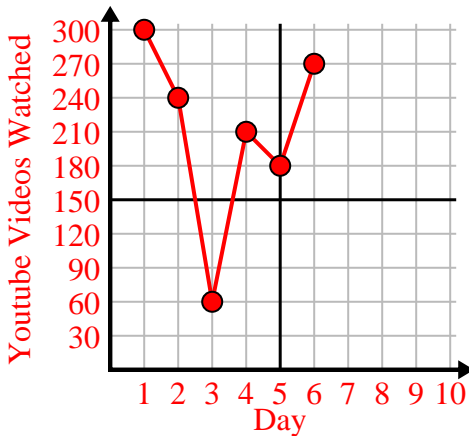
Week	1	2	3	4	5	6	7
Hours of TV watched	50	25	45	10	15	30	35



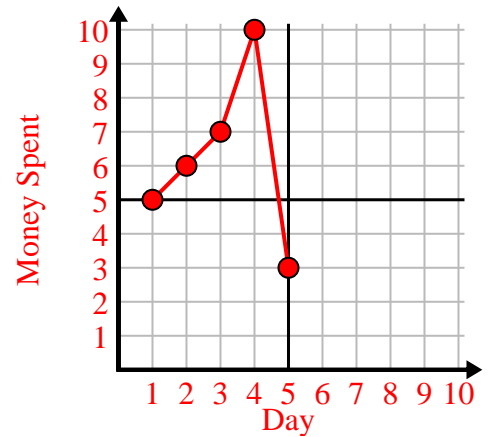
Day	1	2	3	4	5	6
Texts Sent	20	5	50	30	10	15



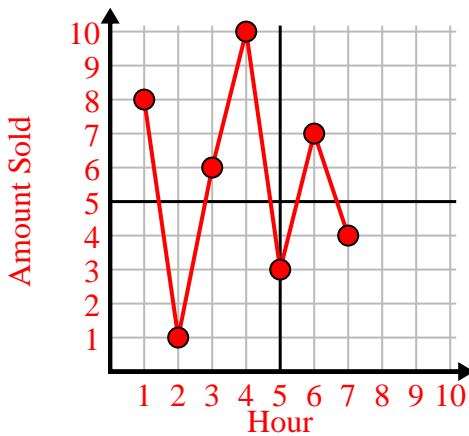
Day	1	2	3	4	5	6
Youtube Videos Watched	300	240	60	210	180	270



Day	1	2	3	4	5
Money Spent	5	6	7	10	3



Hour	1	2	3	4	5	6	7
Amount Sold	8	1	6	10	3	7	4



Month	1	2	3	4	5
Electric Bill Price	125	200	150	25	75

