



Fill in the grid using the chart.

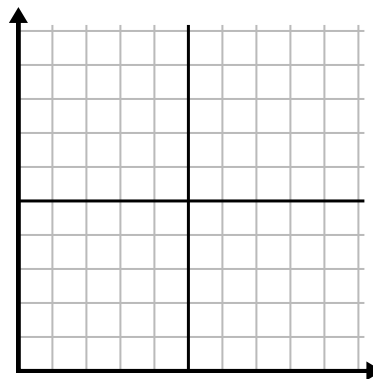
1)

| Month | 1 | 2 | 3 | 4 | 5 | 6 |
|---------------------|-----|----|-----|-----|-----|-----|
| Electric Bill Price | 175 | 50 | 250 | 200 | 100 | 150 |



2)

| Day | 1 | 2 | 3 | 4 | 5 |
|------------|-----|-----|-----|-------|-----|
| Meals Sold | 900 | 300 | 600 | 1,000 | 400 |



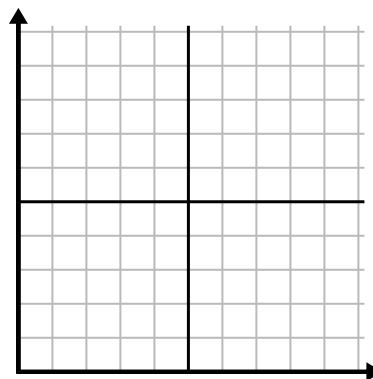
3)

| Week | 1 | 2 | 3 | 4 | 5 | 6 | 7 |
|---------------------|----|----|----|----|----|----|----|
| Hours of TV watched | 15 | 30 | 50 | 35 | 10 | 25 | 45 |



4)

| Hour | 1 | 2 | 3 | 4 | 5 |
|-------------|---|---|---|---|---|
| Amount Sold | 2 | 3 | 8 | 1 | 4 |



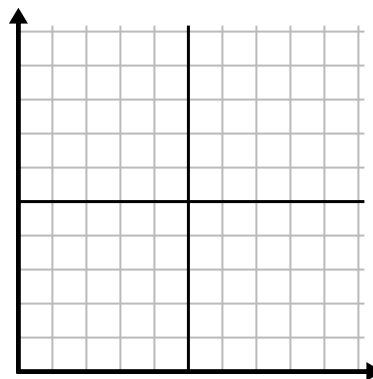
5)

| Day | 1 | 2 | 3 | 4 | 5 |
|-----------------|-----|-----|----|----|-----|
| Calories Burned | 200 | 180 | 40 | 80 | 120 |



6)

| Year | 1 | 2 | 3 | 4 | 5 | 6 |
|---------------------|----|----|----|----|----|---|
| Ink Cartridges Used | 18 | 20 | 14 | 16 | 12 | 8 |

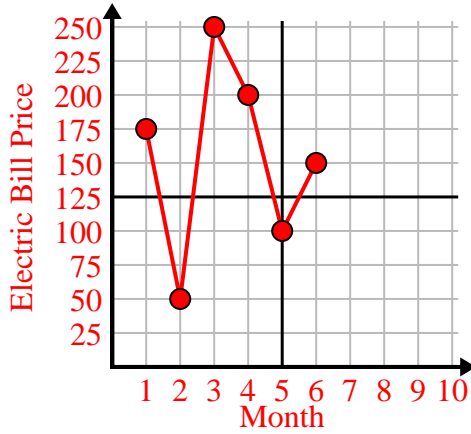




Fill in the grid using the chart.

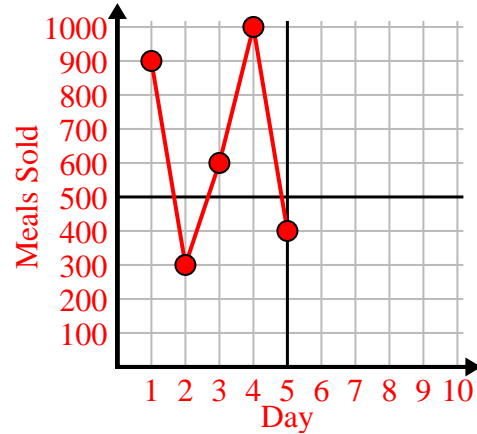
1)

| Month | 1 | 2 | 3 | 4 | 5 | 6 |
|---------------------|-----|----|-----|-----|-----|-----|
| Electric Bill Price | 175 | 50 | 250 | 200 | 100 | 150 |



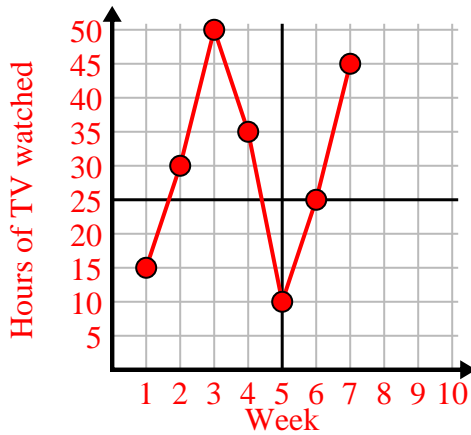
2)

| Day | 1 | 2 | 3 | 4 | 5 |
|------------|-----|-----|-----|-------|-----|
| Meals Sold | 900 | 300 | 600 | 1,000 | 400 |



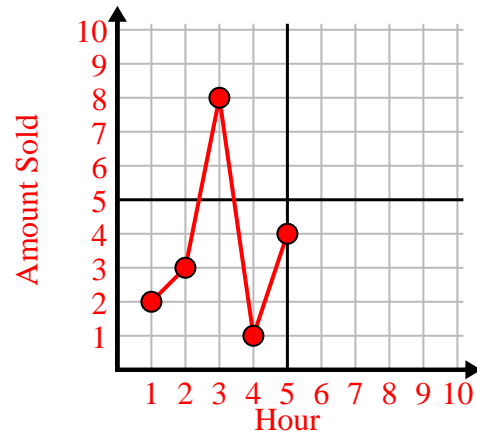
3)

| Week | 1 | 2 | 3 | 4 | 5 | 6 | 7 |
|---------------------|----|----|----|----|----|----|----|
| Hours of TV watched | 15 | 30 | 50 | 35 | 10 | 25 | 45 |



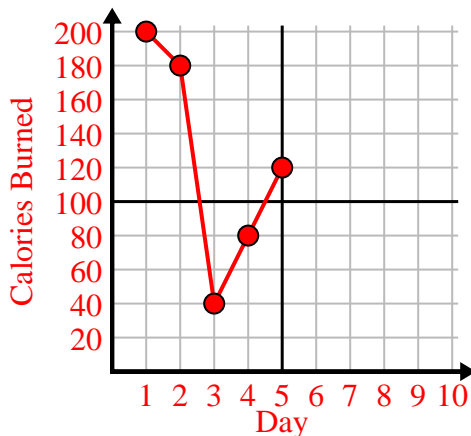
4)

| Hour | 1 | 2 | 3 | 4 | 5 |
|-------------|---|---|---|---|---|
| Amount Sold | 2 | 3 | 8 | 1 | 4 |



5)

| Day | 1 | 2 | 3 | 4 | 5 |
|-----------------|-----|-----|----|----|-----|
| Calories Burned | 200 | 180 | 40 | 80 | 120 |



6)

| Year | 1 | 2 | 3 | 4 | 5 | 6 |
|---------------------|----|----|----|----|----|---|
| Ink Cartridges Used | 18 | 20 | 14 | 16 | 12 | 8 |

