



Fill in the grid using the chart.

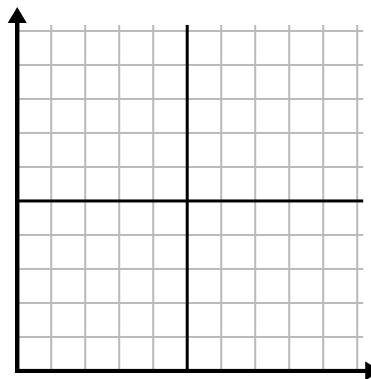
1) 

Hour	1	2	3	4	5	6	7
Amount Sold	10	6	5	4	1	8	9



2) 

Week	1	2	3	4	5	6	7
Water Used (gallons)	30	50	40	100	80	10	20



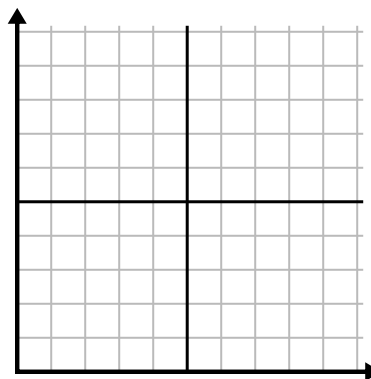
3) 

Year	1	2	3	4	5	6	7
Ink Cartridges Used	8	18	6	20	16	10	14



4) 

Day	1	2	3	4	5	6	7
Meals Sold	900	400	700	500	1,000	600	100



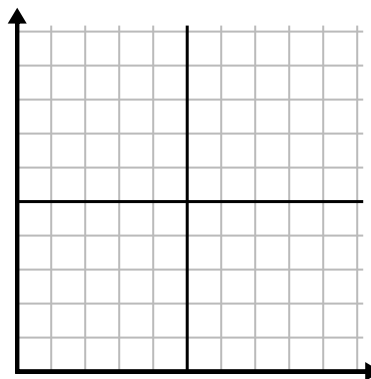
5) 

Day	1	2	3	4	5	6
Texts Sent	40	35	30	50	10	20



6) 

Month	1	2	3	4	5	6
Electric Bill Price	25	150	175	250	200	50

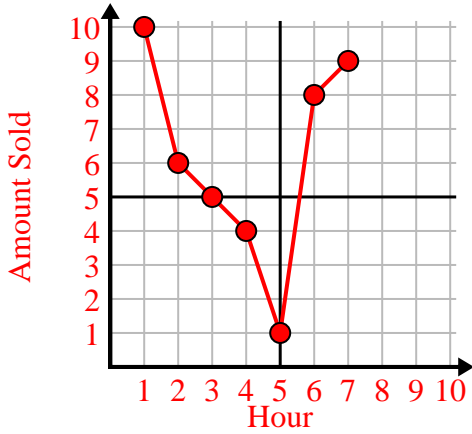




Fill in the grid using the chart.

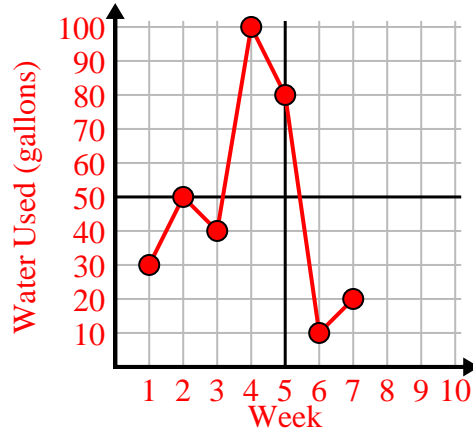
1)

Hour	1	2	3	4	5	6	7
Amount Sold	10	6	5	4	1	8	9



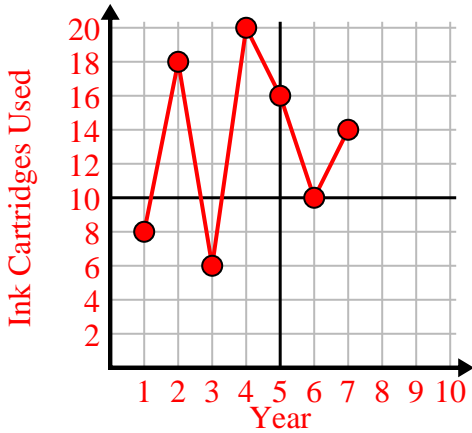
2)

Week	1	2	3	4	5	6	7
Water Used (gallons)	30	50	40	100	80	10	20



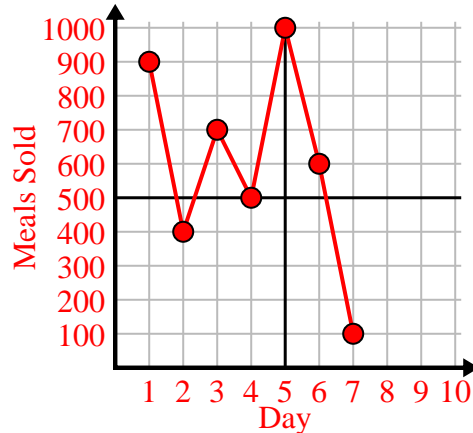
3)

Year	1	2	3	4	5	6	7
Ink Cartridges Used	8	18	6	20	16	10	14



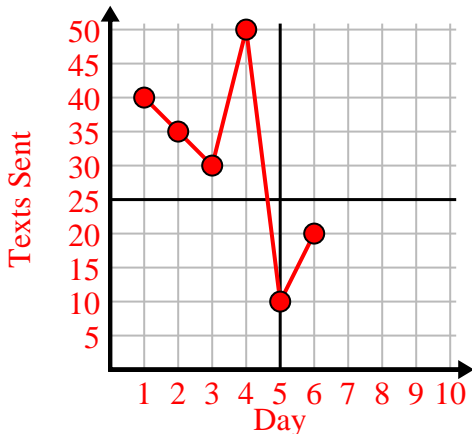
4)

Day	1	2	3	4	5	6	7
Meals Sold	900	400	700	500	1,000	600	100



5)

Day	1	2	3	4	5	6
Texts Sent	40	35	30	50	10	20



6)

Month	1	2	3	4	5	6
Electric Bill Price	25	150	175	250	200	50

