



Fill in the grid using the chart.

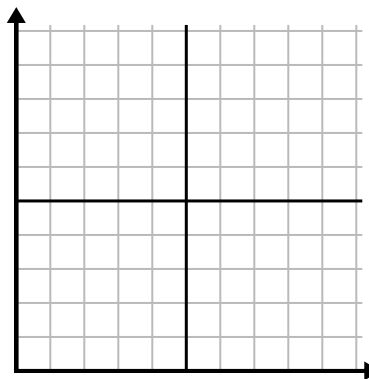
1) 

| Year               | 1  | 2 | 3 | 4 | 5 | 6 |
|--------------------|----|---|---|---|---|---|
| Boxes of Pens Used | 10 | 1 | 6 | 2 | 7 | 8 |



2) 

| Day        | 1  | 2  | 3  | 4  | 5 |
|------------|----|----|----|----|---|
| Texts Sent | 25 | 35 | 40 | 15 | 5 |



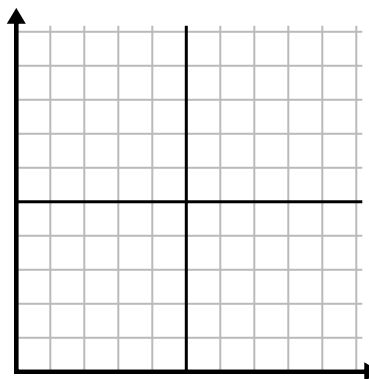
3) 

| Year                | 1  | 2 | 3  | 4 | 5  |
|---------------------|----|---|----|---|----|
| Ink Cartridges Used | 10 | 4 | 12 | 2 | 14 |



4) 

| Day                    | 1   | 2  | 3   | 4   | 5  |
|------------------------|-----|----|-----|-----|----|
| Youtube Videos Watched | 120 | 60 | 300 | 150 | 30 |



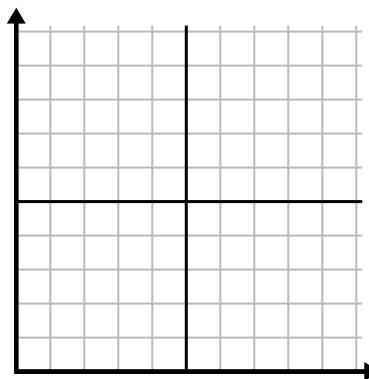
5) 

| Week                 | 1   | 2  | 3  | 4  | 5  | 6  | 7  |
|----------------------|-----|----|----|----|----|----|----|
| Water Used (gallons) | 100 | 50 | 90 | 10 | 60 | 80 | 40 |



6) 

| Day         | 1 | 2 | 3 | 4 | 5 | 6 | 7 |
|-------------|---|---|---|---|---|---|---|
| Money Spent | 1 | 7 | 3 | 4 | 5 | 6 | 8 |

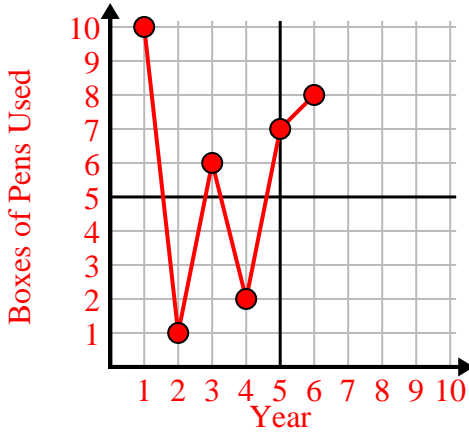




Fill in the grid using the chart.

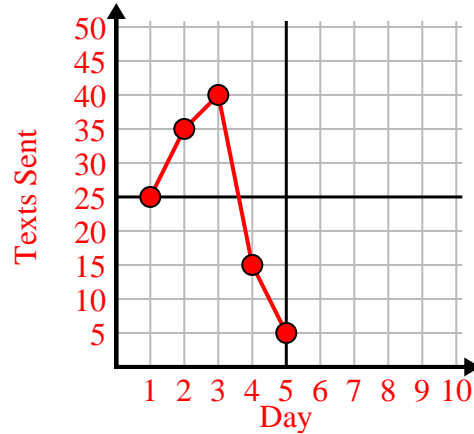
1)

| Year               | 1  | 2 | 3 | 4 | 5 | 6 |
|--------------------|----|---|---|---|---|---|
| Boxes of Pens Used | 10 | 1 | 6 | 2 | 7 | 8 |



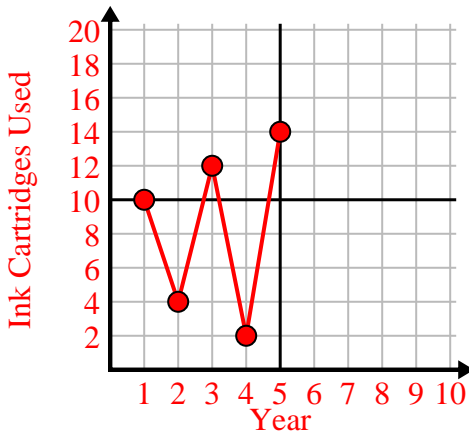
2)

| Day        | 1  | 2  | 3  | 4  | 5 |
|------------|----|----|----|----|---|
| Texts Sent | 25 | 35 | 40 | 15 | 5 |



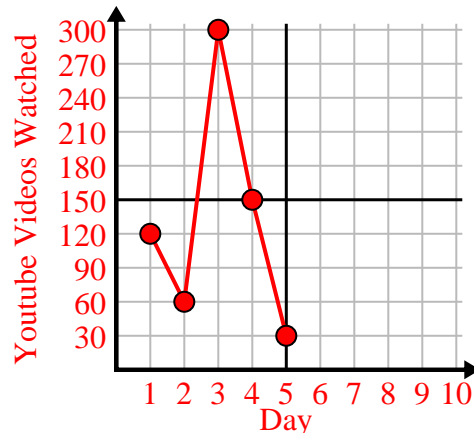
3)

| Year                | 1  | 2 | 3  | 4 | 5  |
|---------------------|----|---|----|---|----|
| Ink Cartridges Used | 10 | 4 | 12 | 2 | 14 |



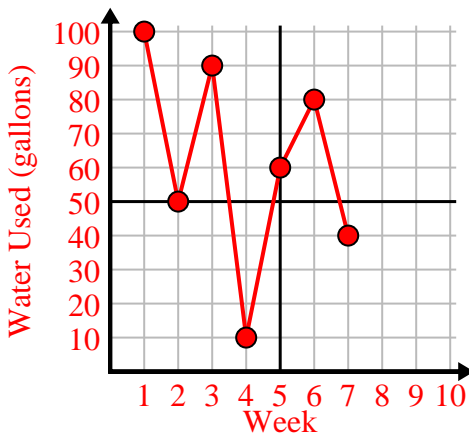
4)

| Day                    | 1   | 2  | 3   | 4   | 5  |
|------------------------|-----|----|-----|-----|----|
| Youtube Videos Watched | 120 | 60 | 300 | 150 | 30 |



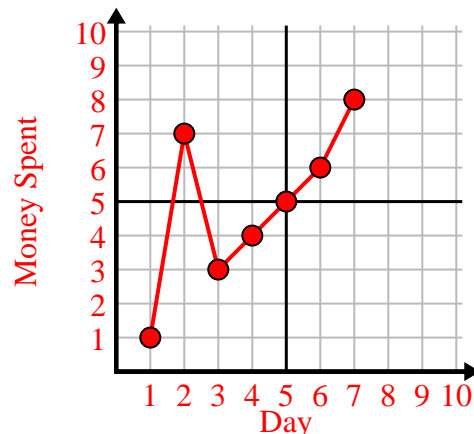
5)

| Week                 | 1   | 2  | 3  | 4  | 5  | 6  | 7  |
|----------------------|-----|----|----|----|----|----|----|
| Water Used (gallons) | 100 | 50 | 90 | 10 | 60 | 80 | 40 |



6)

| Day         | 1 | 2 | 3 | 4 | 5 | 6 | 7 |
|-------------|---|---|---|---|---|---|---|
| Money Spent | 1 | 7 | 3 | 4 | 5 | 6 | 8 |

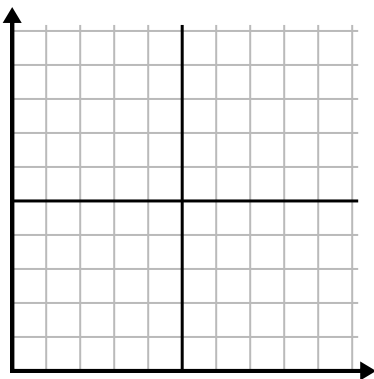




Fill in the grid using the chart.

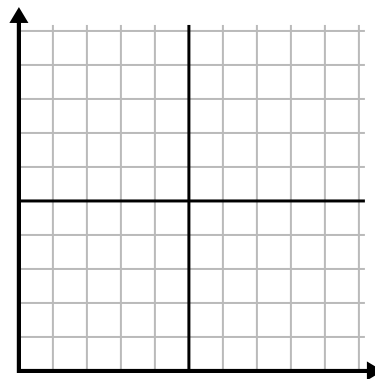
1)

| Day                    | 1  | 2   | 3   | 4   | 5  | 6  | 7   |
|------------------------|----|-----|-----|-----|----|----|-----|
| Youtube Videos Watched | 30 | 180 | 270 | 150 | 60 | 90 | 240 |



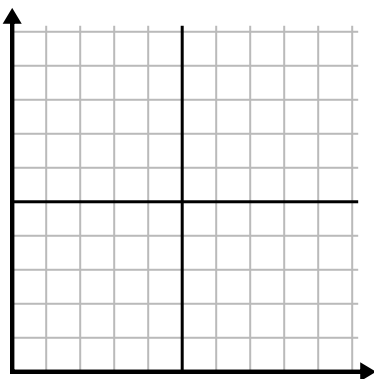
2)

| Month               | 1   | 2   | 3  | 4   | 5  |
|---------------------|-----|-----|----|-----|----|
| Electric Bill Price | 225 | 150 | 75 | 125 | 50 |



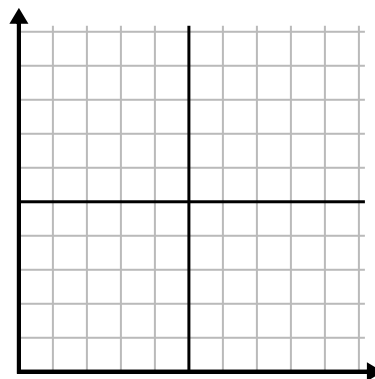
3)

| Year                | 1  | 2 | 3  | 4  | 5 |
|---------------------|----|---|----|----|---|
| Ink Cartridges Used | 16 | 2 | 10 | 12 | 8 |



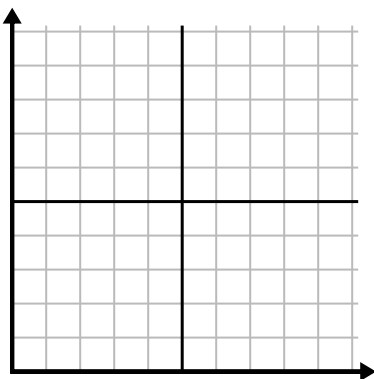
4)

| Day         | 1 | 2 | 3 | 4 | 5 | 6 |
|-------------|---|---|---|---|---|---|
| Money Spent | 2 | 7 | 9 | 8 | 5 | 1 |



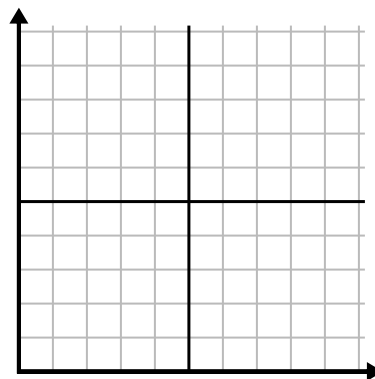
5)

| Hour        | 1 | 2 | 3 | 4 | 5 | 6 | 7 |
|-------------|---|---|---|---|---|---|---|
| Amount Sold | 5 | 4 | 2 | 9 | 7 | 6 | 8 |



6)

| Day        | 1   | 2   | 3   | 4   | 5   | 6   |
|------------|-----|-----|-----|-----|-----|-----|
| Meals Sold | 600 | 900 | 700 | 500 | 100 | 400 |

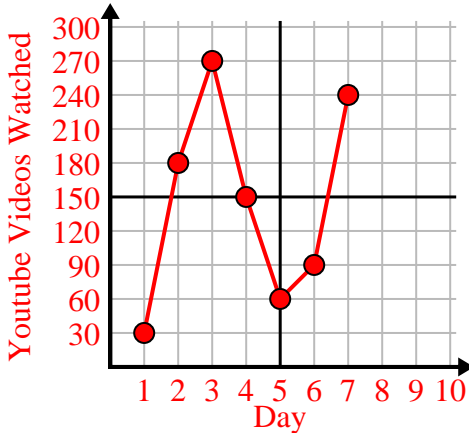




Fill in the grid using the chart.

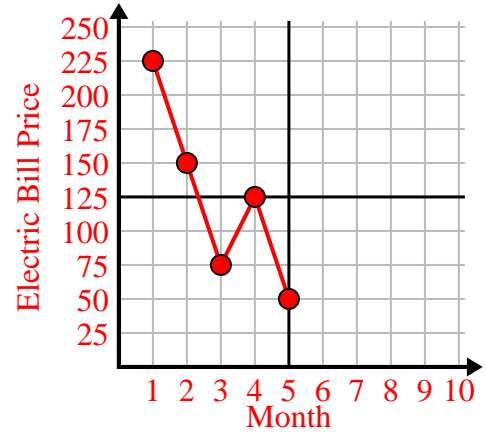
1)

| Day                    | 1  | 2   | 3   | 4   | 5  | 6  | 7   |
|------------------------|----|-----|-----|-----|----|----|-----|
| Youtube Videos Watched | 30 | 180 | 270 | 150 | 60 | 90 | 240 |



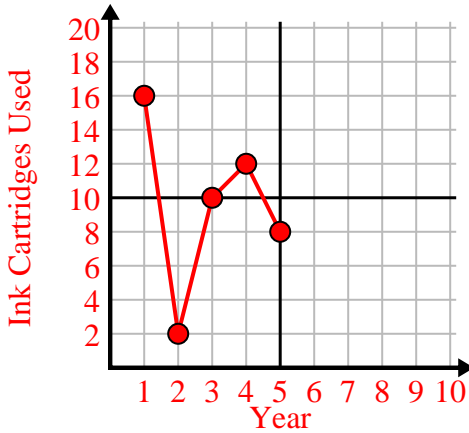
2)

| Month               | 1   | 2   | 3  | 4   | 5  |
|---------------------|-----|-----|----|-----|----|
| Electric Bill Price | 225 | 150 | 75 | 125 | 50 |



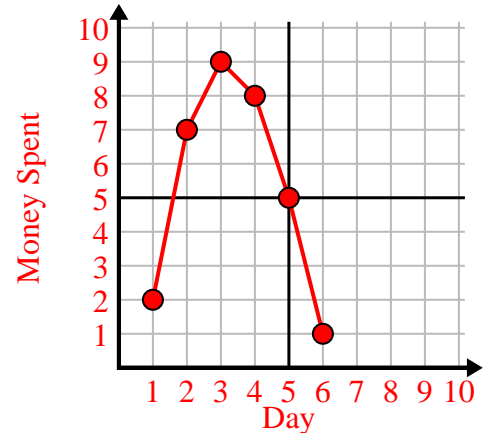
3)

| Year                | 1  | 2 | 3  | 4  | 5 |
|---------------------|----|---|----|----|---|
| Ink Cartridges Used | 16 | 2 | 10 | 12 | 8 |



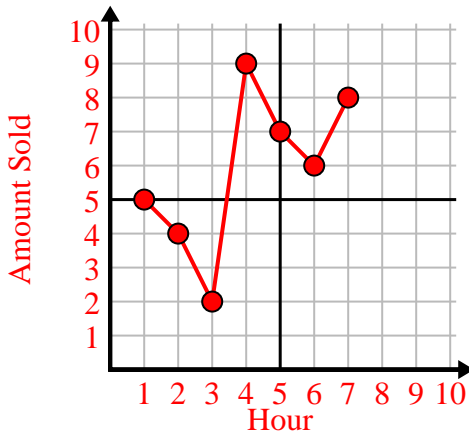
4)

| Day         | 1 | 2 | 3 | 4 | 5 | 6 |
|-------------|---|---|---|---|---|---|
| Money Spent | 2 | 7 | 9 | 8 | 5 | 1 |



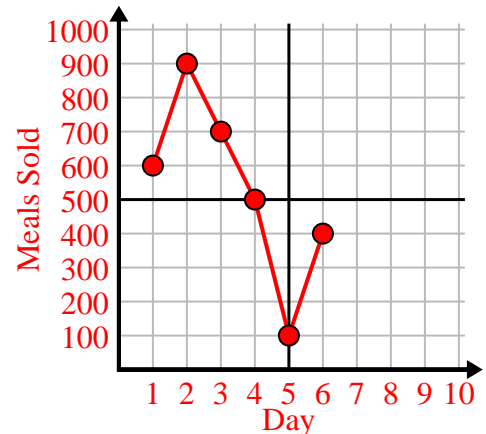
5)

| Hour        | 1 | 2 | 3 | 4 | 5 | 6 | 7 |
|-------------|---|---|---|---|---|---|---|
| Amount Sold | 5 | 4 | 2 | 9 | 7 | 6 | 8 |



6)

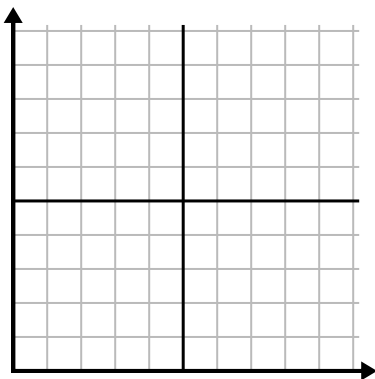
| Day        | 1   | 2   | 3   | 4   | 5   | 6   |
|------------|-----|-----|-----|-----|-----|-----|
| Meals Sold | 600 | 900 | 700 | 500 | 100 | 400 |



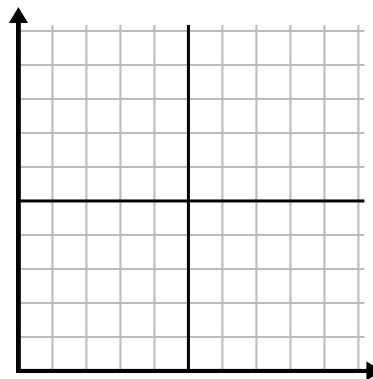


Fill in the grid using the chart.

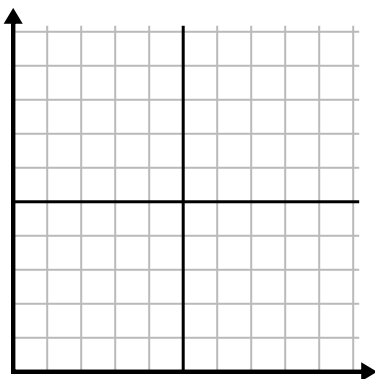
|    |                     |     |    |     |     |     |     |
|----|---------------------|-----|----|-----|-----|-----|-----|
| 1) | Month               | 1   | 2  | 3   | 4   | 5   | 6   |
|    | Electric Bill Price | 175 | 50 | 250 | 200 | 100 | 150 |



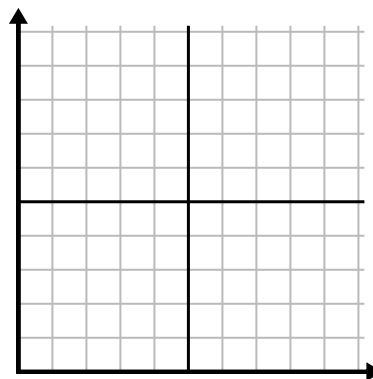
|    |            |     |     |     |       |     |
|----|------------|-----|-----|-----|-------|-----|
| 2) | Day        | 1   | 2   | 3   | 4     | 5   |
|    | Meals Sold | 900 | 300 | 600 | 1,000 | 400 |



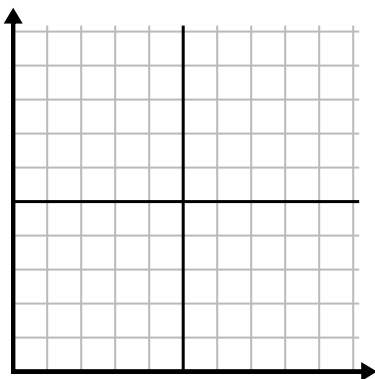
|    |                     |    |    |    |    |    |    |    |
|----|---------------------|----|----|----|----|----|----|----|
| 3) | Week                | 1  | 2  | 3  | 4  | 5  | 6  | 7  |
|    | Hours of TV watched | 15 | 30 | 50 | 35 | 10 | 25 | 45 |



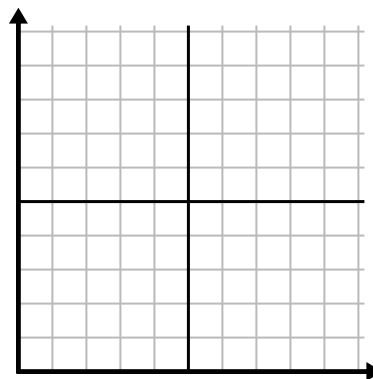
|    |             |   |   |   |   |   |
|----|-------------|---|---|---|---|---|
| 4) | Hour        | 1 | 2 | 3 | 4 | 5 |
|    | Amount Sold | 2 | 3 | 8 | 1 | 4 |



|    |                 |     |     |    |    |     |
|----|-----------------|-----|-----|----|----|-----|
| 5) | Day             | 1   | 2   | 3  | 4  | 5   |
|    | Calories Burned | 200 | 180 | 40 | 80 | 120 |



|    |                     |    |    |    |    |    |   |
|----|---------------------|----|----|----|----|----|---|
| 6) | Year                | 1  | 2  | 3  | 4  | 5  | 6 |
|    | Ink Cartridges Used | 18 | 20 | 14 | 16 | 12 | 8 |

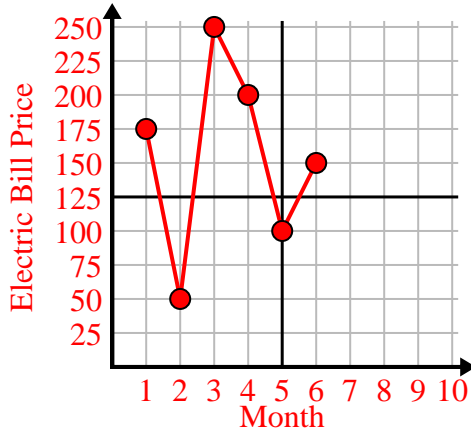




Fill in the grid using the chart.

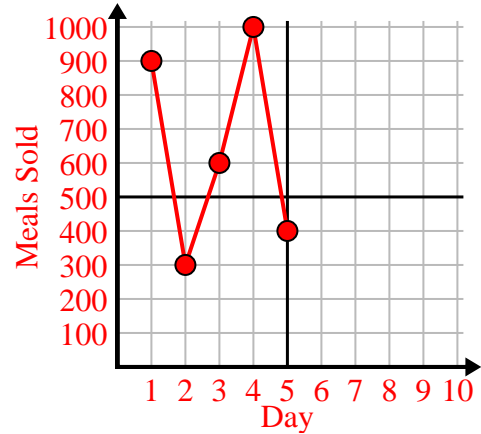
1)

| Month               | 1   | 2  | 3   | 4   | 5   | 6   |
|---------------------|-----|----|-----|-----|-----|-----|
| Electric Bill Price | 175 | 50 | 250 | 200 | 100 | 150 |



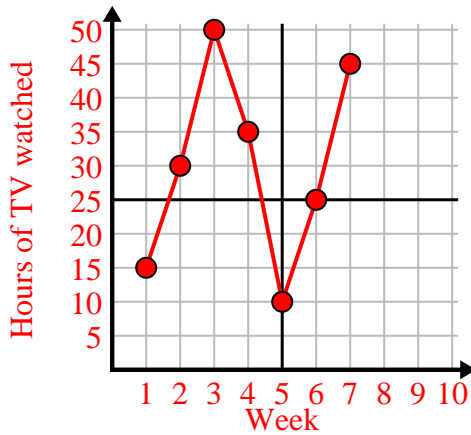
2)

| Day        | 1   | 2   | 3   | 4     | 5   |
|------------|-----|-----|-----|-------|-----|
| Meals Sold | 900 | 300 | 600 | 1,000 | 400 |



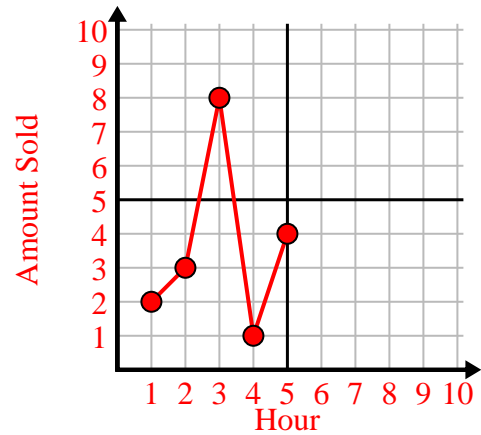
3)

| Week                | 1  | 2  | 3  | 4  | 5  | 6  | 7  |
|---------------------|----|----|----|----|----|----|----|
| Hours of TV watched | 15 | 30 | 50 | 35 | 10 | 25 | 45 |



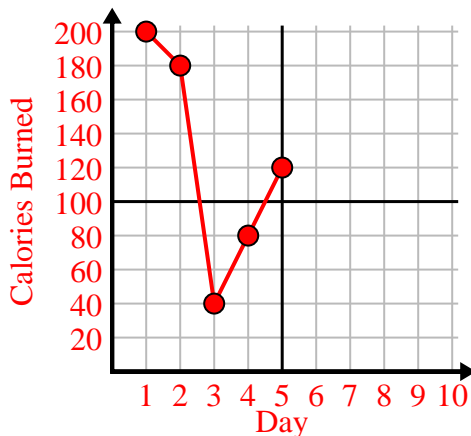
4)

| Hour        | 1 | 2 | 3 | 4 | 5 |
|-------------|---|---|---|---|---|
| Amount Sold | 2 | 3 | 8 | 1 | 4 |



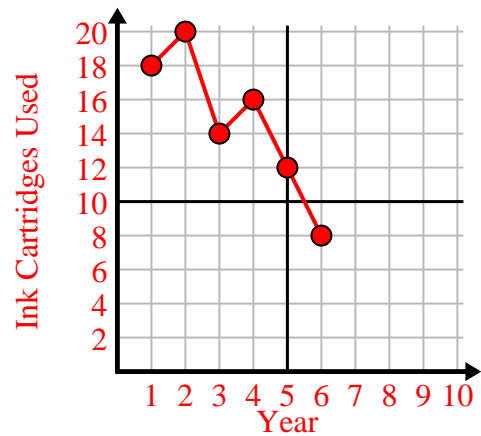
5)

| Day             | 1   | 2   | 3  | 4  | 5   |
|-----------------|-----|-----|----|----|-----|
| Calories Burned | 200 | 180 | 40 | 80 | 120 |



6)

| Year                | 1  | 2  | 3  | 4  | 5  | 6 |
|---------------------|----|----|----|----|----|---|
| Ink Cartridges Used | 18 | 20 | 14 | 16 | 12 | 8 |

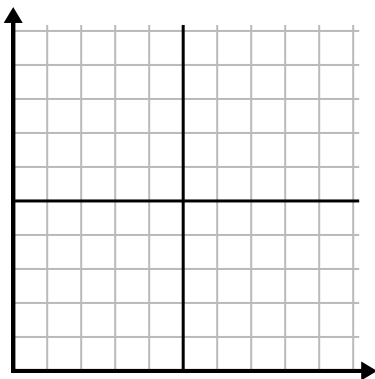




Fill in the grid using the chart.

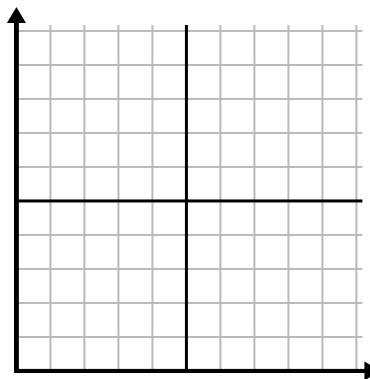
1)

| Day        | 1 | 2  | 3  | 4  | 5  | 6  | 7  |
|------------|---|----|----|----|----|----|----|
| Texts Sent | 5 | 30 | 25 | 50 | 35 | 15 | 10 |



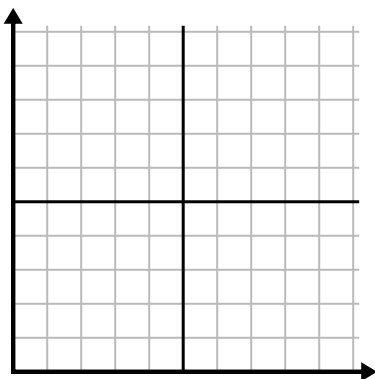
2)

| Day         | 1 | 2 | 3 | 4 | 5  | 6 | 7 |
|-------------|---|---|---|---|----|---|---|
| Money Spent | 1 | 5 | 4 | 6 | 10 | 2 | 3 |



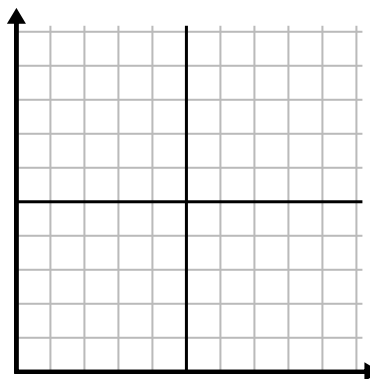
3)

| Week                 | 1  | 2  | 3   | 4  | 5  |
|----------------------|----|----|-----|----|----|
| Water Used (gallons) | 20 | 60 | 100 | 90 | 70 |



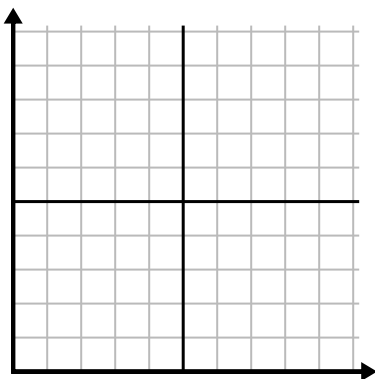
4)

| Day             | 1  | 2   | 3  | 4  | 5   | 6   |
|-----------------|----|-----|----|----|-----|-----|
| Calories Burned | 80 | 180 | 40 | 20 | 100 | 200 |



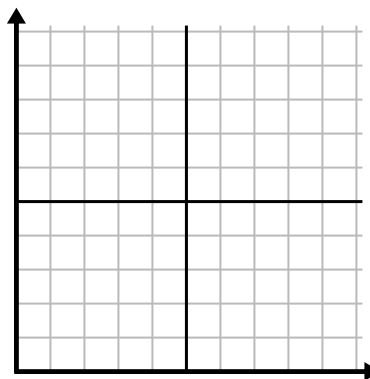
5)

| Month               | 1   | 2   | 3   | 4   | 5  |
|---------------------|-----|-----|-----|-----|----|
| Electric Bill Price | 150 | 175 | 125 | 200 | 25 |



6)

| Hour        | 1 | 2 | 3 | 4  | 5 | 6 |
|-------------|---|---|---|----|---|---|
| Amount Sold | 4 | 9 | 7 | 10 | 3 | 6 |

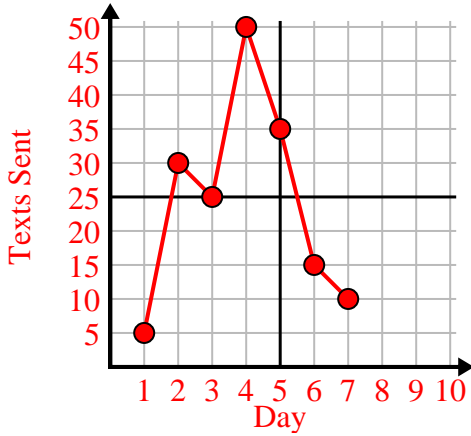




Fill in the grid using the chart.

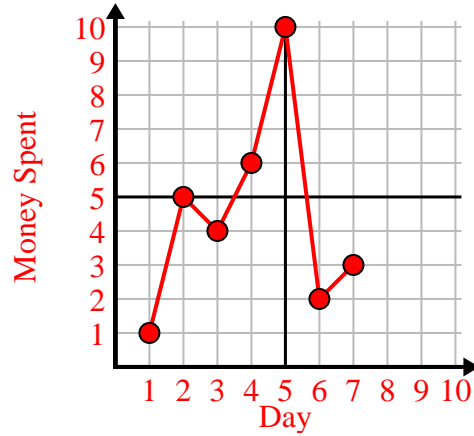
1)

| Day        | 1 | 2  | 3  | 4  | 5  | 6  | 7  |
|------------|---|----|----|----|----|----|----|
| Texts Sent | 5 | 30 | 25 | 50 | 35 | 15 | 10 |



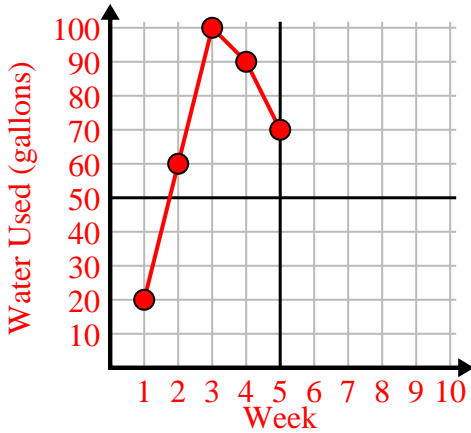
2)

| Day         | 1 | 2 | 3 | 4 | 5  | 6 | 7 |
|-------------|---|---|---|---|----|---|---|
| Money Spent | 1 | 5 | 4 | 6 | 10 | 2 | 3 |



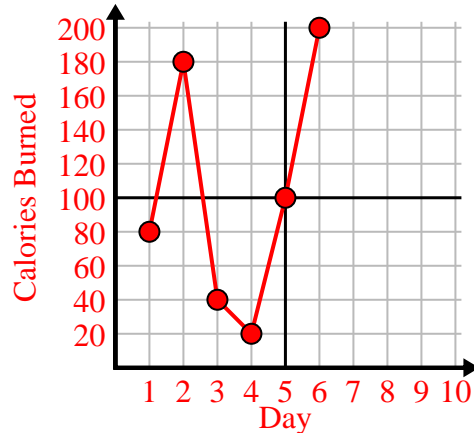
3)

| Week                 | 1  | 2  | 3   | 4  | 5  |
|----------------------|----|----|-----|----|----|
| Water Used (gallons) | 20 | 60 | 100 | 90 | 70 |



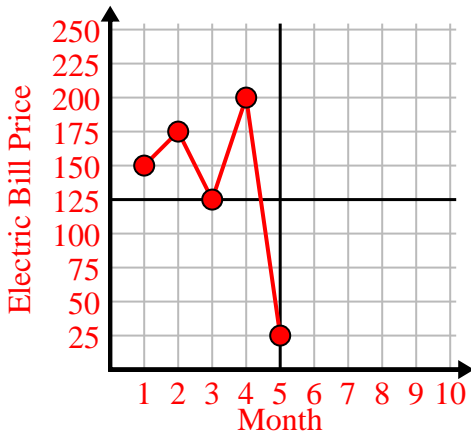
4)

| Day             | 1  | 2   | 3  | 4  | 5   | 6   |
|-----------------|----|-----|----|----|-----|-----|
| Calories Burned | 80 | 180 | 40 | 20 | 100 | 200 |



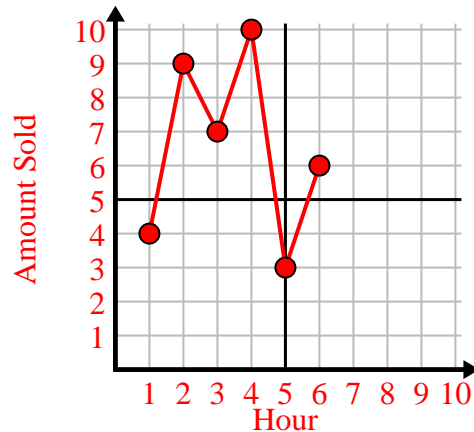
5)

| Month               | 1   | 2   | 3   | 4   | 5  |
|---------------------|-----|-----|-----|-----|----|
| Electric Bill Price | 150 | 175 | 125 | 200 | 25 |



6)

| Hour        | 1 | 2 | 3 | 4  | 5 | 6 |
|-------------|---|---|---|----|---|---|
| Amount Sold | 4 | 9 | 7 | 10 | 3 | 6 |







Fill in the grid using the chart.

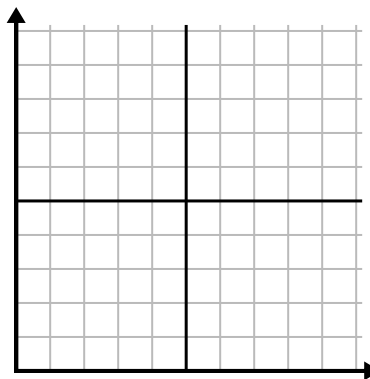
1) 

| Day             | 1   | 2  | 3   | 4  | 5   |
|-----------------|-----|----|-----|----|-----|
| Calories Burned | 160 | 40 | 100 | 20 | 180 |



2) 

| Year               | 1 | 2 | 3 | 4 | 5  |
|--------------------|---|---|---|---|----|
| Boxes of Pens Used | 9 | 2 | 8 | 6 | 10 |



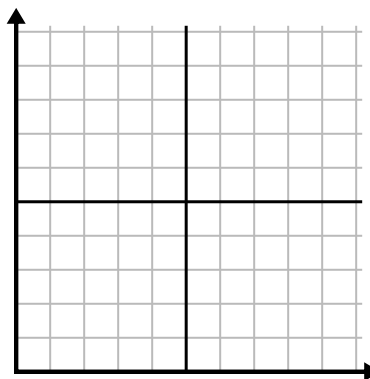
3) 

| Day        | 1  | 2  | 3  | 4 | 5  |
|------------|----|----|----|---|----|
| Texts Sent | 40 | 25 | 45 | 5 | 30 |



4) 

| Day        | 1   | 2   | 3   | 4     | 5   | 6   | 7   |
|------------|-----|-----|-----|-------|-----|-----|-----|
| Meals Sold | 600 | 900 | 200 | 1,000 | 500 | 400 | 700 |



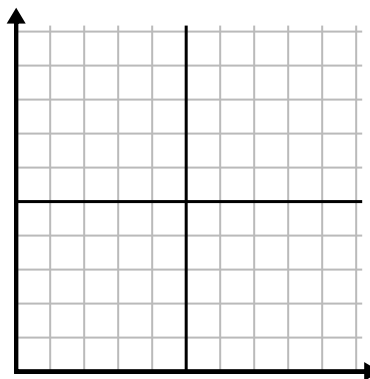
5) 

| Hour        | 1 | 2 | 3  | 4 | 5 |
|-------------|---|---|----|---|---|
| Amount Sold | 8 | 5 | 10 | 3 | 9 |



6) 

| Week                 | 1  | 2  | 3  | 4  | 5   |
|----------------------|----|----|----|----|-----|
| Water Used (gallons) | 70 | 80 | 10 | 40 | 100 |

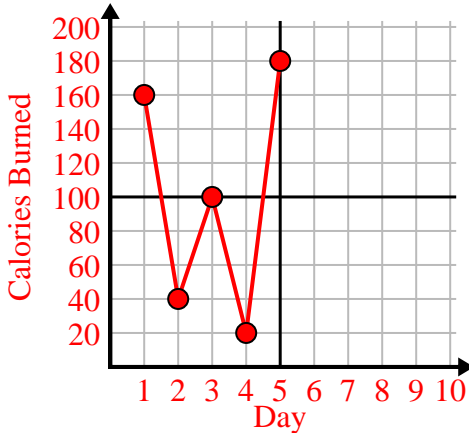




Fill in the grid using the chart.

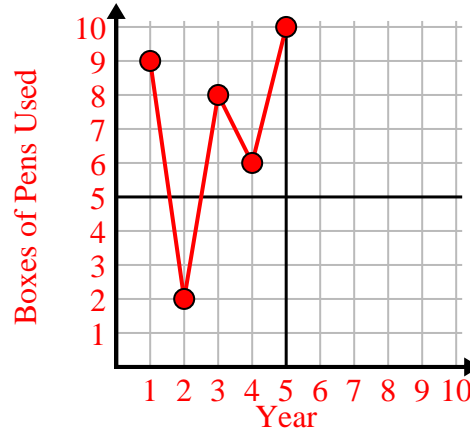
1)

| Day             | 1   | 2  | 3   | 4  | 5   |
|-----------------|-----|----|-----|----|-----|
| Calories Burned | 160 | 40 | 100 | 20 | 180 |



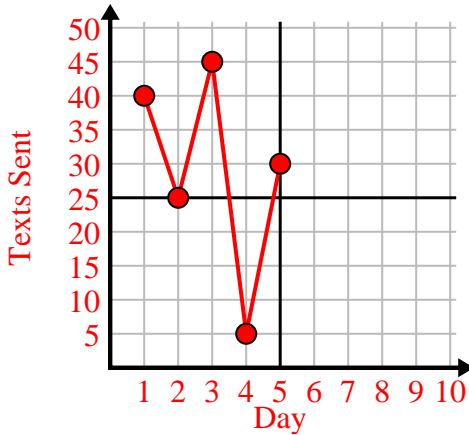
2)

| Year               | 1 | 2 | 3 | 4 | 5  |
|--------------------|---|---|---|---|----|
| Boxes of Pens Used | 9 | 2 | 8 | 6 | 10 |



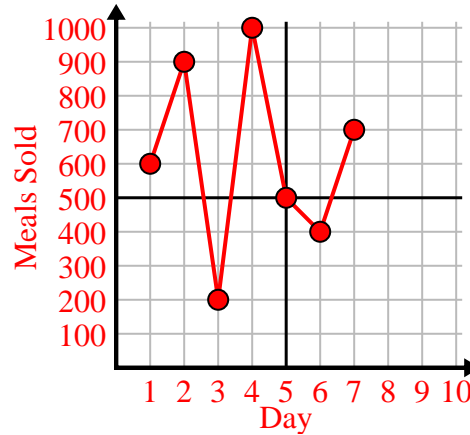
3)

| Day        | 1  | 2  | 3  | 4 | 5  |
|------------|----|----|----|---|----|
| Texts Sent | 40 | 25 | 45 | 5 | 30 |



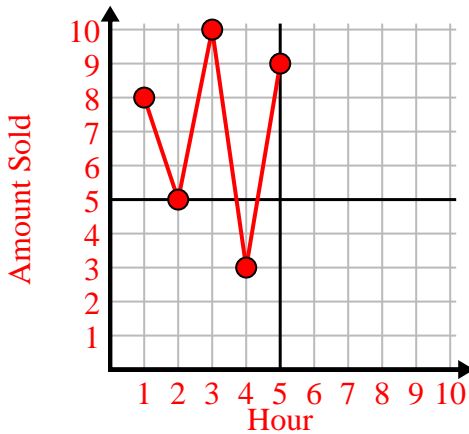
4)

| Day        | 1   | 2   | 3   | 4     | 5   | 6   | 7   |
|------------|-----|-----|-----|-------|-----|-----|-----|
| Meals Sold | 600 | 900 | 200 | 1,000 | 500 | 400 | 700 |



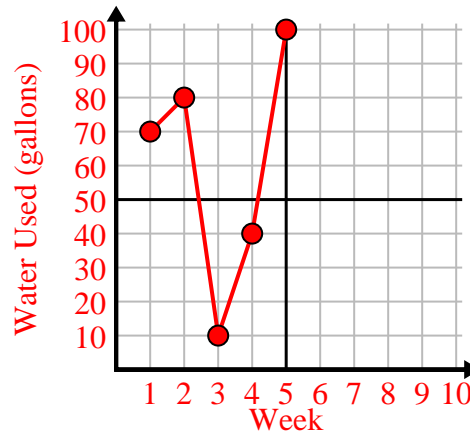
5)

| Hour        | 1 | 2 | 3  | 4 | 5 |
|-------------|---|---|----|---|---|
| Amount Sold | 8 | 5 | 10 | 3 | 9 |



6)

| Week                 | 1  | 2  | 3  | 4  | 5   |
|----------------------|----|----|----|----|-----|
| Water Used (gallons) | 70 | 80 | 10 | 40 | 100 |

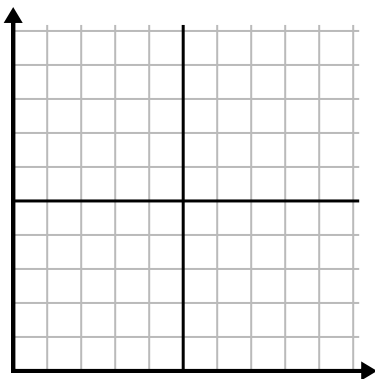




Fill in the grid using the chart.

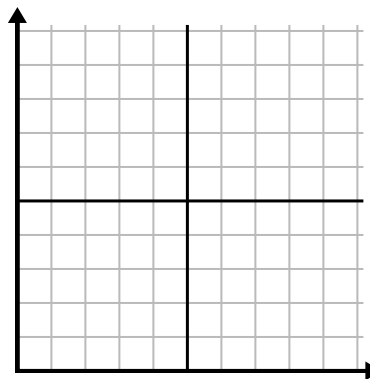
1) 

| Day             | 1  | 2  | 3   | 4   | 5  | 6   |
|-----------------|----|----|-----|-----|----|-----|
| Calories Burned | 80 | 60 | 140 | 100 | 40 | 180 |



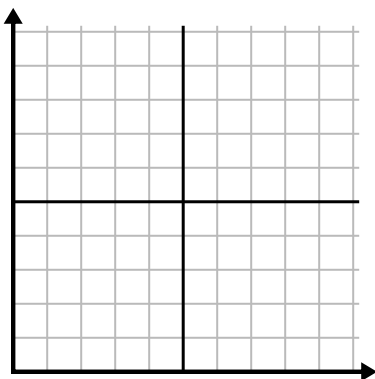
2) 

| Month               | 1   | 2   | 3   | 4   | 5  |
|---------------------|-----|-----|-----|-----|----|
| Electric Bill Price | 225 | 250 | 175 | 150 | 75 |



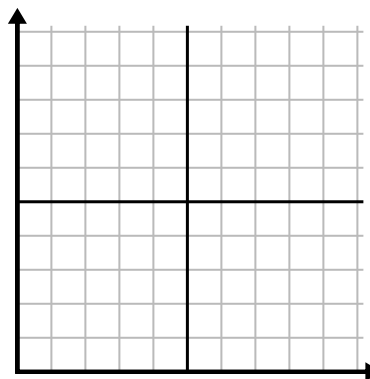
3) 

| Hour        | 1 | 2 | 3 | 4 | 5 |
|-------------|---|---|---|---|---|
| Amount Sold | 1 | 9 | 2 | 6 | 5 |



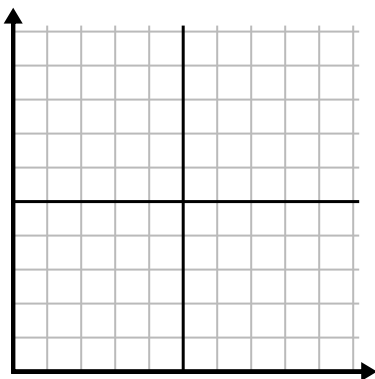
4) 

| Day        | 1 | 2  | 3  | 4  | 5  | 6  | 7  |
|------------|---|----|----|----|----|----|----|
| Texts Sent | 5 | 10 | 50 | 30 | 20 | 15 | 25 |



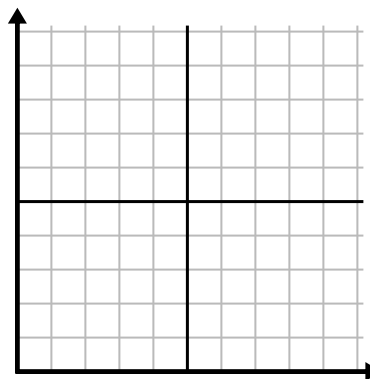
5) 

| Week                 | 1  | 2  | 3  | 4   | 5  | 6  | 7  |
|----------------------|----|----|----|-----|----|----|----|
| Water Used (gallons) | 90 | 10 | 80 | 100 | 50 | 20 | 70 |



6) 

| Day         | 1 | 2 | 3 | 4 | 5 | 6 | 7  |
|-------------|---|---|---|---|---|---|----|
| Money Spent | 8 | 7 | 6 | 5 | 4 | 3 | 10 |

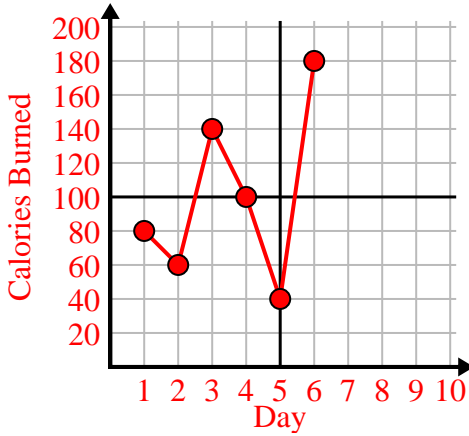




Fill in the grid using the chart.

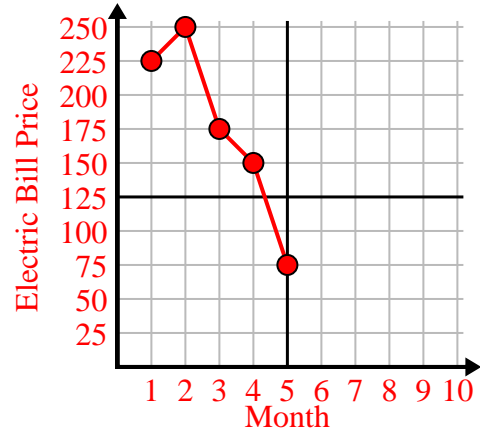
1)

| Day             | 1  | 2  | 3   | 4   | 5  | 6   |
|-----------------|----|----|-----|-----|----|-----|
| Calories Burned | 80 | 60 | 140 | 100 | 40 | 180 |



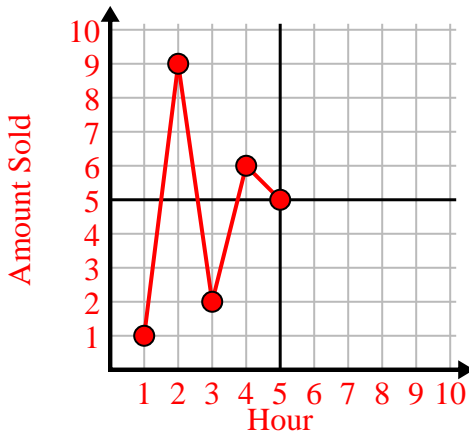
2)

| Month               | 1   | 2   | 3   | 4   | 5  |
|---------------------|-----|-----|-----|-----|----|
| Electric Bill Price | 225 | 250 | 175 | 150 | 75 |



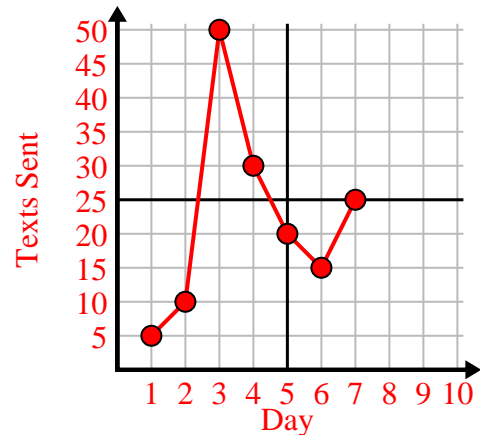
3)

| Hour        | 1 | 2 | 3 | 4 | 5 |
|-------------|---|---|---|---|---|
| Amount Sold | 1 | 9 | 2 | 6 | 5 |



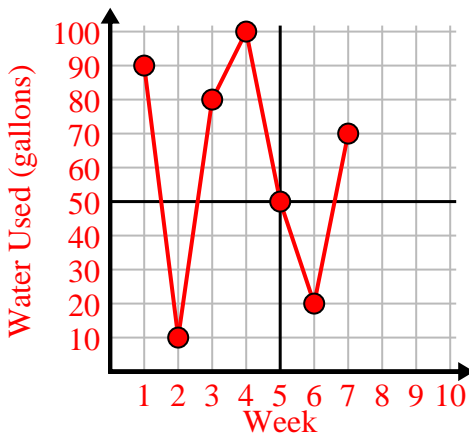
4)

| Day        | 1 | 2  | 3  | 4  | 5  | 6  | 7  |
|------------|---|----|----|----|----|----|----|
| Texts Sent | 5 | 10 | 50 | 30 | 20 | 15 | 25 |



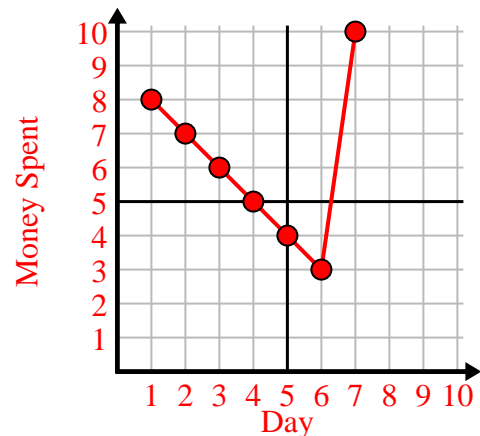
5)

| Week                 | 1  | 2  | 3  | 4   | 5  | 6  | 7  |
|----------------------|----|----|----|-----|----|----|----|
| Water Used (gallons) | 90 | 10 | 80 | 100 | 50 | 20 | 70 |



6)

| Day         | 1 | 2 | 3 | 4 | 5 | 6 | 7  |
|-------------|---|---|---|---|---|---|----|
| Money Spent | 8 | 7 | 6 | 5 | 4 | 3 | 10 |

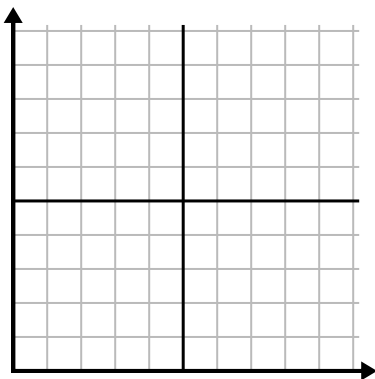




Fill in the grid using the chart.

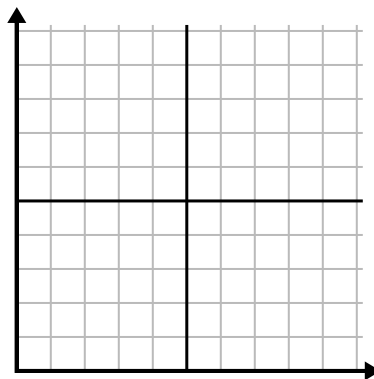
1)

| Day        | 1     | 2   | 3   | 4   | 5   |
|------------|-------|-----|-----|-----|-----|
| Meals Sold | 1,000 | 300 | 900 | 100 | 700 |



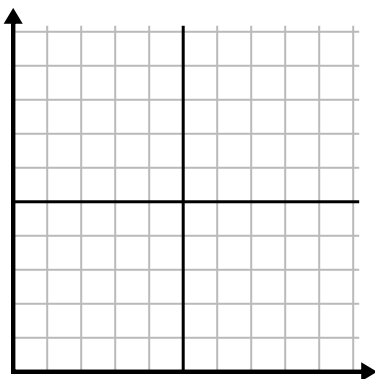
2)

| Day        | 1  | 2  | 3  | 4  | 5  | 6  |
|------------|----|----|----|----|----|----|
| Texts Sent | 40 | 30 | 50 | 15 | 25 | 10 |



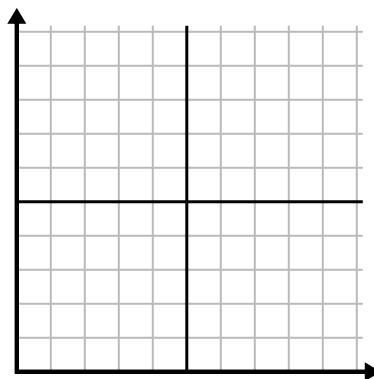
3)

| Year               | 1  | 2 | 3 | 4 | 5 | 6 |
|--------------------|----|---|---|---|---|---|
| Boxes of Pens Used | 10 | 3 | 9 | 1 | 2 | 6 |



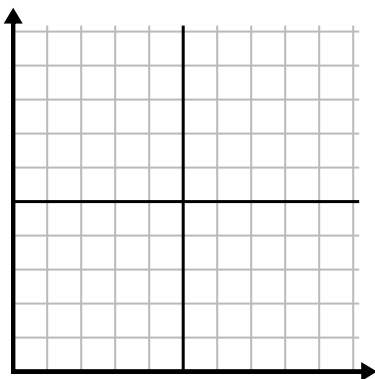
4)

| Year                | 1 | 2  | 3 | 4  | 5  |
|---------------------|---|----|---|----|----|
| Ink Cartridges Used | 2 | 18 | 4 | 20 | 12 |



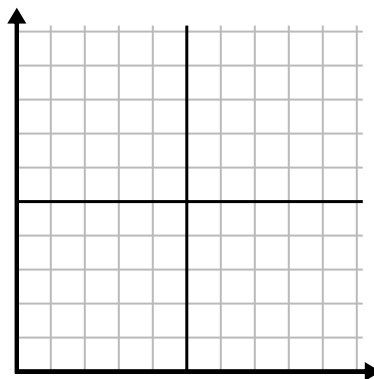
5)

| Hour        | 1 | 2 | 3 | 4 | 5 | 6 |
|-------------|---|---|---|---|---|---|
| Amount Sold | 6 | 5 | 3 | 4 | 7 | 9 |



6)

| Week                 | 1  | 2  | 3  | 4  | 5  | 6  |
|----------------------|----|----|----|----|----|----|
| Water Used (gallons) | 10 | 60 | 80 | 70 | 20 | 40 |

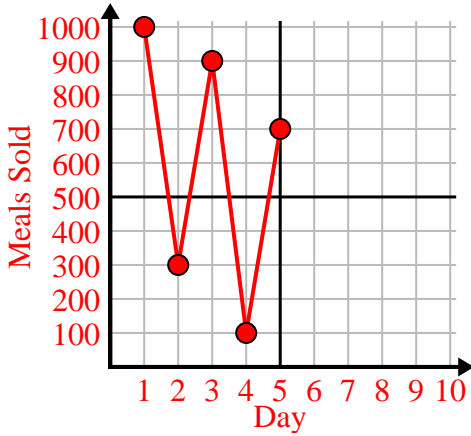




Fill in the grid using the chart.

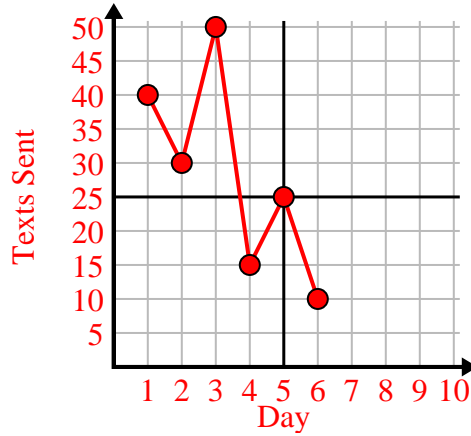
1)

| Day        | 1     | 2   | 3   | 4   | 5   |
|------------|-------|-----|-----|-----|-----|
| Meals Sold | 1,000 | 300 | 900 | 100 | 700 |



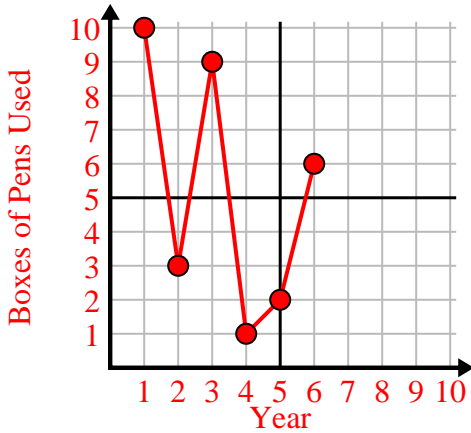
2)

| Day        | 1  | 2  | 3  | 4  | 5  | 6  |
|------------|----|----|----|----|----|----|
| Texts Sent | 40 | 30 | 50 | 15 | 25 | 10 |



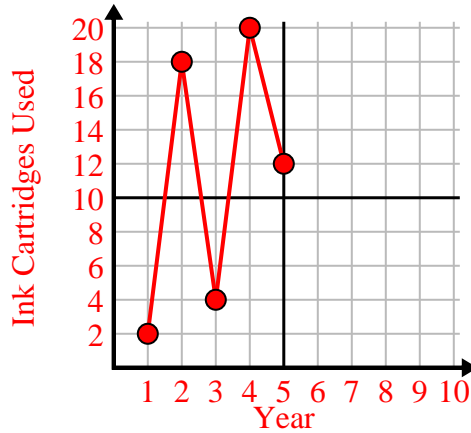
3)

| Year               | 1  | 2 | 3 | 4 | 5 | 6 |
|--------------------|----|---|---|---|---|---|
| Boxes of Pens Used | 10 | 3 | 9 | 1 | 2 | 6 |



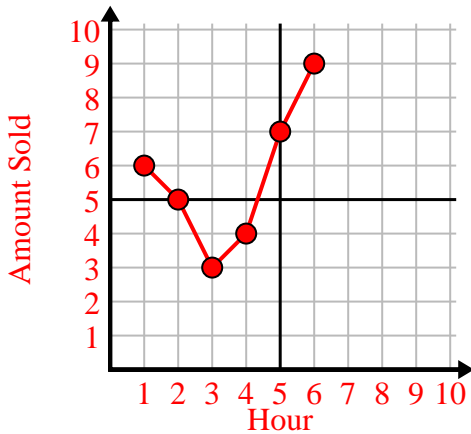
4)

| Year                | 1 | 2  | 3 | 4  | 5  |
|---------------------|---|----|---|----|----|
| Ink Cartridges Used | 2 | 18 | 4 | 20 | 12 |



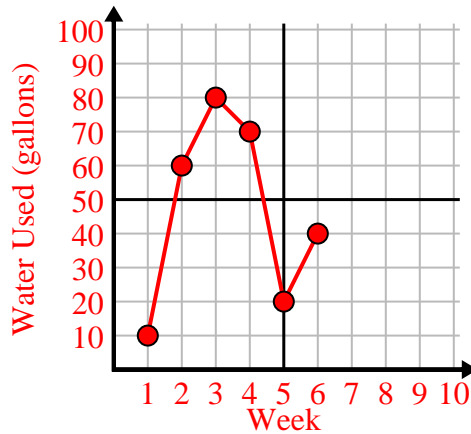
5)

| Hour        | 1 | 2 | 3 | 4 | 5 | 6 |
|-------------|---|---|---|---|---|---|
| Amount Sold | 6 | 5 | 3 | 4 | 7 | 9 |



6)

| Week                 | 1  | 2  | 3  | 4  | 5  | 6  |
|----------------------|----|----|----|----|----|----|
| Water Used (gallons) | 10 | 60 | 80 | 70 | 20 | 40 |

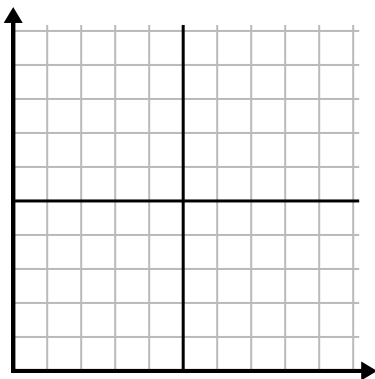




Fill in the grid using the chart.

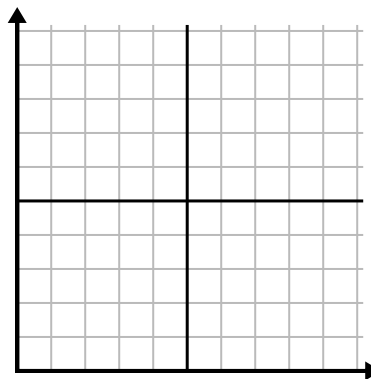
1)

| Hour        | 1  | 2 | 3 | 4 | 5 | 6 | 7 |
|-------------|----|---|---|---|---|---|---|
| Amount Sold | 10 | 6 | 5 | 4 | 1 | 8 | 9 |



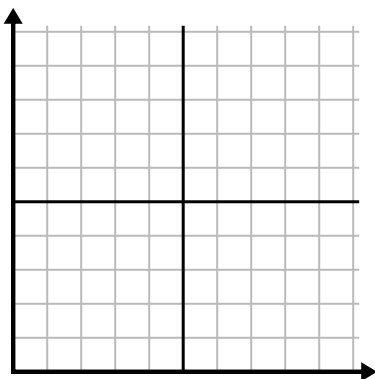
2)

| Week                 | 1  | 2  | 3  | 4   | 5  | 6  | 7  |
|----------------------|----|----|----|-----|----|----|----|
| Water Used (gallons) | 30 | 50 | 40 | 100 | 80 | 10 | 20 |



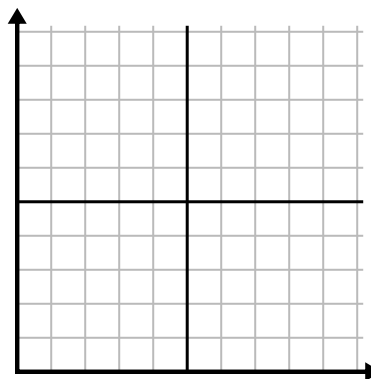
3)

| Year                | 1 | 2  | 3 | 4  | 5  | 6  | 7  |
|---------------------|---|----|---|----|----|----|----|
| Ink Cartridges Used | 8 | 18 | 6 | 20 | 16 | 10 | 14 |



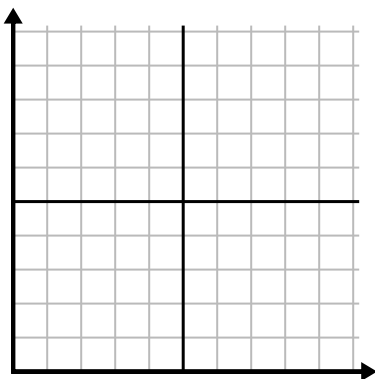
4)

| Day        | 1   | 2   | 3   | 4   | 5     | 6   | 7   |
|------------|-----|-----|-----|-----|-------|-----|-----|
| Meals Sold | 900 | 400 | 700 | 500 | 1,000 | 600 | 100 |



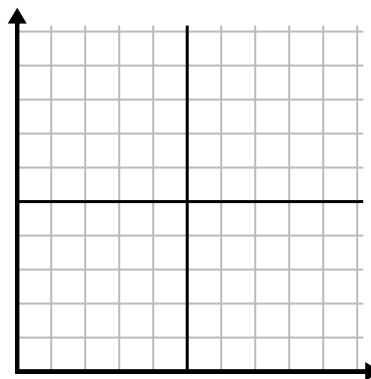
5)

| Day        | 1  | 2  | 3  | 4  | 5  | 6  |
|------------|----|----|----|----|----|----|
| Texts Sent | 40 | 35 | 30 | 50 | 10 | 20 |



6)

| Month               | 1  | 2   | 3   | 4   | 5   | 6  |
|---------------------|----|-----|-----|-----|-----|----|
| Electric Bill Price | 25 | 150 | 175 | 250 | 200 | 50 |

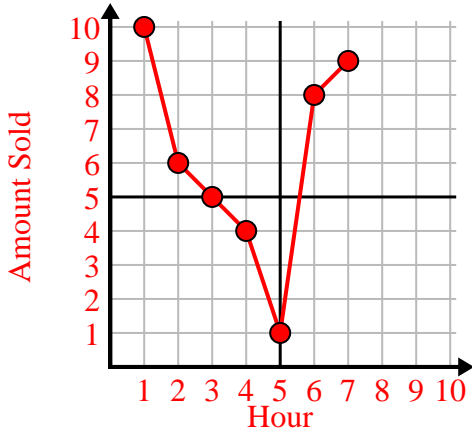




Fill in the grid using the chart.

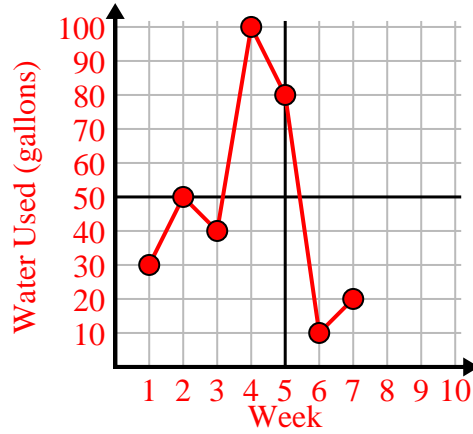
1)

| Hour        | 1  | 2 | 3 | 4 | 5 | 6 | 7 |
|-------------|----|---|---|---|---|---|---|
| Amount Sold | 10 | 6 | 5 | 4 | 1 | 8 | 9 |



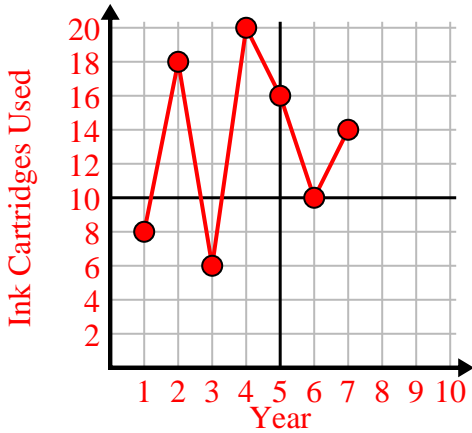
2)

| Week                 | 1  | 2  | 3  | 4   | 5  | 6  | 7  |
|----------------------|----|----|----|-----|----|----|----|
| Water Used (gallons) | 30 | 50 | 40 | 100 | 80 | 10 | 20 |



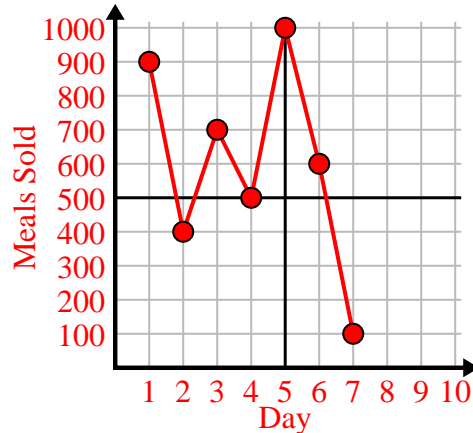
3)

| Year                | 1 | 2  | 3 | 4  | 5  | 6  | 7  |
|---------------------|---|----|---|----|----|----|----|
| Ink Cartridges Used | 8 | 18 | 6 | 20 | 16 | 10 | 14 |



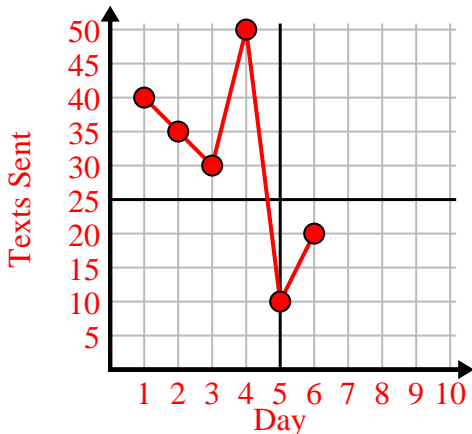
4)

| Day        | 1   | 2   | 3   | 4   | 5     | 6   | 7   |
|------------|-----|-----|-----|-----|-------|-----|-----|
| Meals Sold | 900 | 400 | 700 | 500 | 1,000 | 600 | 100 |



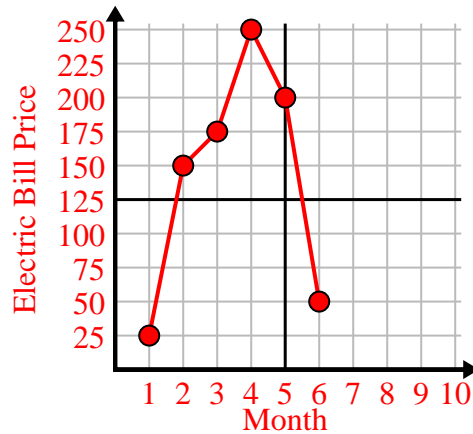
5)

| Day        | 1  | 2  | 3  | 4  | 5  | 6  |
|------------|----|----|----|----|----|----|
| Texts Sent | 40 | 35 | 30 | 50 | 10 | 20 |



6)

| Month               | 1  | 2   | 3   | 4   | 5   | 6  |
|---------------------|----|-----|-----|-----|-----|----|
| Electric Bill Price | 25 | 150 | 175 | 250 | 200 | 50 |







Fill in the grid using the chart.

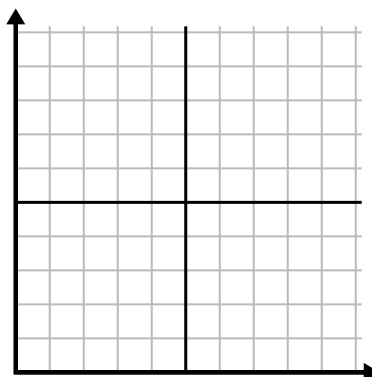
1) 

| Month               | 1  | 2  | 3   | 4   | 5   | 6  |
|---------------------|----|----|-----|-----|-----|----|
| Electric Bill Price | 50 | 75 | 250 | 150 | 175 | 25 |



2) 

| Day                    | 1  | 2   | 3   | 4   | 5  | 6  | 7   |
|------------------------|----|-----|-----|-----|----|----|-----|
| Youtube Videos Watched | 90 | 210 | 120 | 150 | 60 | 30 | 300 |



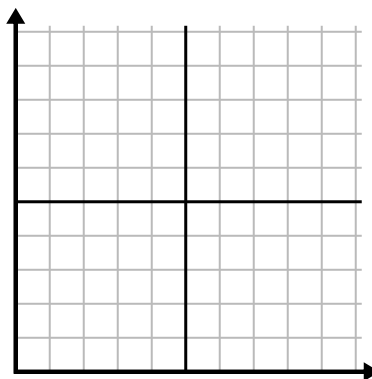
3) 

| Week                | 1  | 2  | 3  | 4  | 5  | 6  |
|---------------------|----|----|----|----|----|----|
| Hours of TV watched | 25 | 30 | 15 | 10 | 20 | 50 |



4) 

| Day        | 1   | 2   | 3   | 4   | 5   | 6   | 7   |
|------------|-----|-----|-----|-----|-----|-----|-----|
| Meals Sold | 900 | 400 | 200 | 800 | 100 | 500 | 300 |



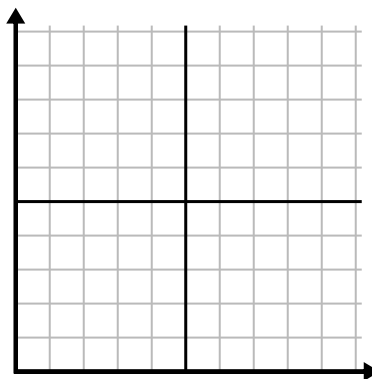
5) 

| Week                 | 1  | 2  | 3  | 4  | 5  |
|----------------------|----|----|----|----|----|
| Water Used (gallons) | 60 | 80 | 10 | 30 | 20 |



6) 

| Day             | 1   | 2   | 3   | 4   | 5   |
|-----------------|-----|-----|-----|-----|-----|
| Calories Burned | 140 | 120 | 180 | 200 | 160 |

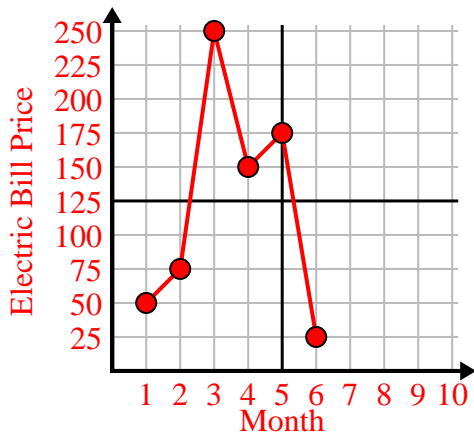




Fill in the grid using the chart.

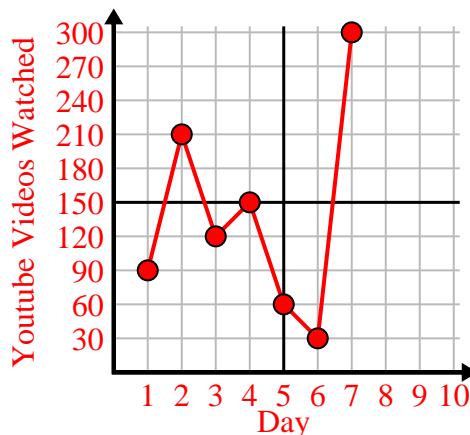
1) 

| Month               | 1  | 2  | 3   | 4   | 5   | 6  |
|---------------------|----|----|-----|-----|-----|----|
| Electric Bill Price | 50 | 75 | 250 | 150 | 175 | 25 |



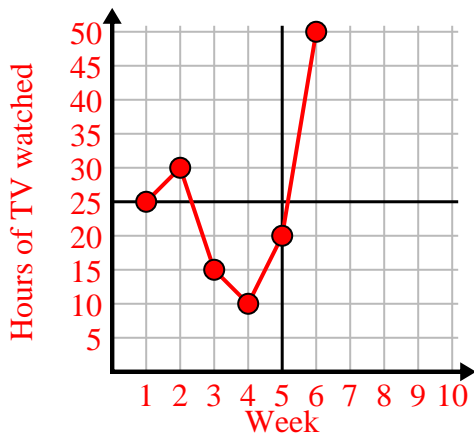
2) 

| Day                    | 1  | 2   | 3   | 4   | 5  | 6  | 7   |
|------------------------|----|-----|-----|-----|----|----|-----|
| Youtube Videos Watched | 90 | 210 | 120 | 150 | 60 | 30 | 300 |



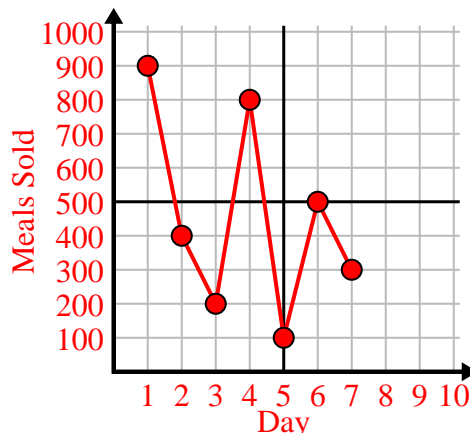
3) 

| Week                | 1  | 2  | 3  | 4  | 5  | 6  |
|---------------------|----|----|----|----|----|----|
| Hours of TV watched | 25 | 30 | 15 | 10 | 20 | 50 |



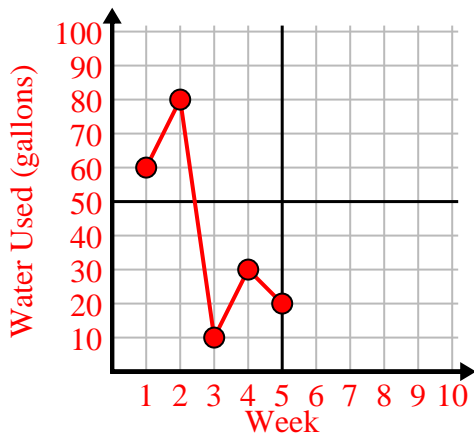
4) 

| Day        | 1   | 2   | 3   | 4   | 5   | 6   | 7   |
|------------|-----|-----|-----|-----|-----|-----|-----|
| Meals Sold | 900 | 400 | 200 | 800 | 100 | 500 | 300 |



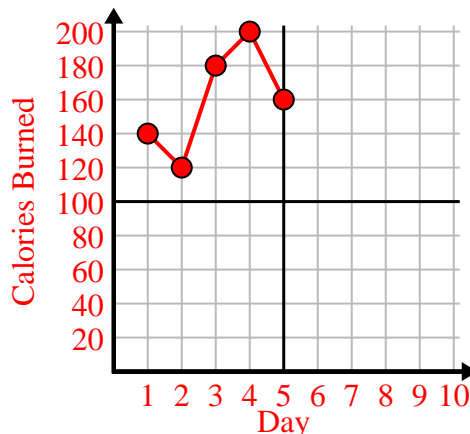
5) 

| Week                 | 1  | 2  | 3  | 4  | 5  |
|----------------------|----|----|----|----|----|
| Water Used (gallons) | 60 | 80 | 10 | 30 | 20 |



6) 

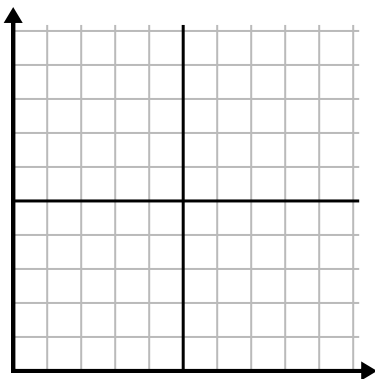
| Day             | 1   | 2   | 3   | 4   | 5   |
|-----------------|-----|-----|-----|-----|-----|
| Calories Burned | 140 | 120 | 180 | 200 | 160 |



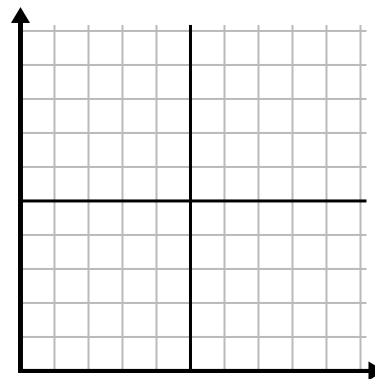


Fill in the grid using the chart.

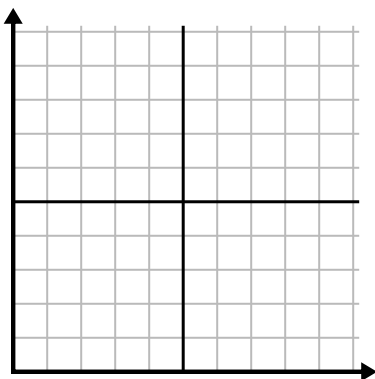
|    |                     |    |    |    |    |    |    |    |
|----|---------------------|----|----|----|----|----|----|----|
| 1) | Week                | 1  | 2  | 3  | 4  | 5  | 6  | 7  |
|    | Hours of TV watched | 50 | 25 | 45 | 10 | 15 | 30 | 35 |



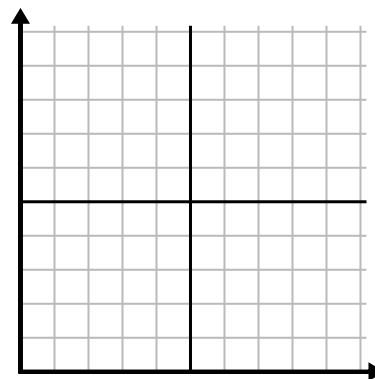
|    |            |    |   |    |    |    |    |
|----|------------|----|---|----|----|----|----|
| 2) | Day        | 1  | 2 | 3  | 4  | 5  | 6  |
|    | Texts Sent | 20 | 5 | 50 | 30 | 10 | 15 |



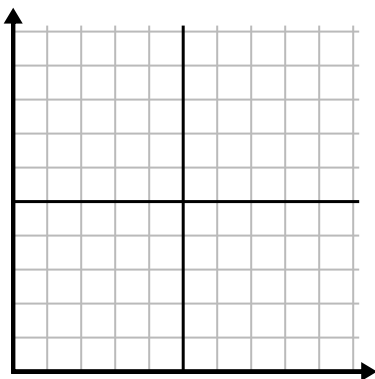
|    |                        |     |     |    |     |     |     |
|----|------------------------|-----|-----|----|-----|-----|-----|
| 3) | Day                    | 1   | 2   | 3  | 4   | 5   | 6   |
|    | Youtube Videos Watched | 300 | 240 | 60 | 210 | 180 | 270 |



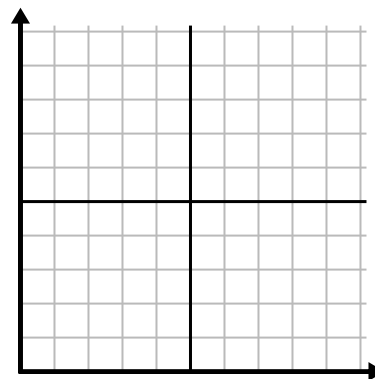
|    |             |   |   |   |    |   |
|----|-------------|---|---|---|----|---|
| 4) | Day         | 1 | 2 | 3 | 4  | 5 |
|    | Money Spent | 5 | 6 | 7 | 10 | 3 |



|    |             |   |   |   |    |   |   |   |
|----|-------------|---|---|---|----|---|---|---|
| 5) | Hour        | 1 | 2 | 3 | 4  | 5 | 6 | 7 |
|    | Amount Sold | 8 | 1 | 6 | 10 | 3 | 7 | 4 |



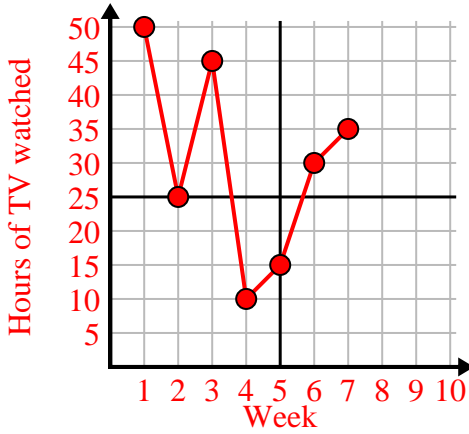
|    |                     |     |     |     |    |    |
|----|---------------------|-----|-----|-----|----|----|
| 6) | Month               | 1   | 2   | 3   | 4  | 5  |
|    | Electric Bill Price | 125 | 200 | 150 | 25 | 75 |



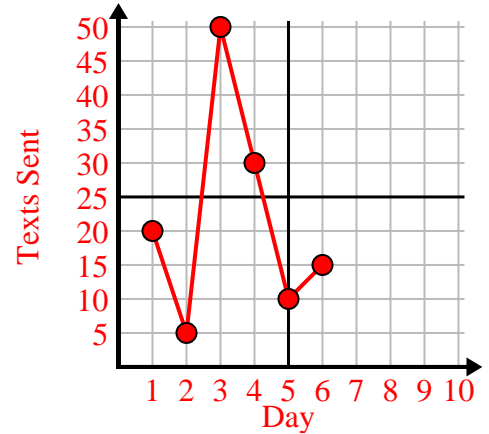


Fill in the grid using the chart.

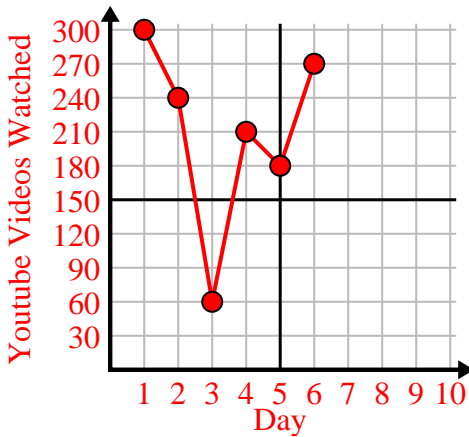
| Week                | 1  | 2  | 3  | 4  | 5  | 6  | 7  |
|---------------------|----|----|----|----|----|----|----|
| Hours of TV watched | 50 | 25 | 45 | 10 | 15 | 30 | 35 |



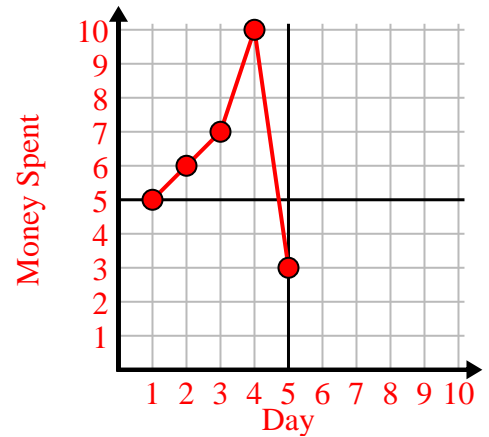
| Day        | 1  | 2 | 3  | 4  | 5  | 6  |
|------------|----|---|----|----|----|----|
| Texts Sent | 20 | 5 | 50 | 30 | 10 | 15 |



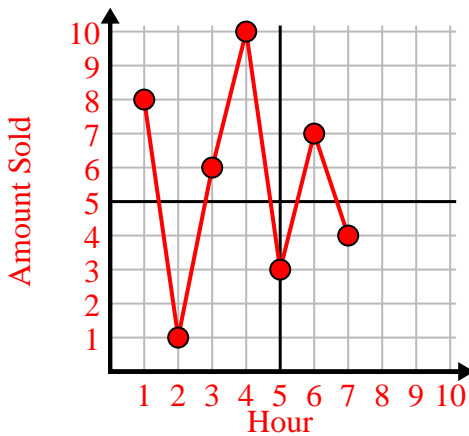
| Day                    | 1   | 2   | 3  | 4   | 5   | 6   |
|------------------------|-----|-----|----|-----|-----|-----|
| Youtube Videos Watched | 300 | 240 | 60 | 210 | 180 | 270 |



| Day         | 1 | 2 | 3 | 4  | 5 |
|-------------|---|---|---|----|---|
| Money Spent | 5 | 6 | 7 | 10 | 3 |



| Hour        | 1 | 2 | 3 | 4  | 5 | 6 | 7 |
|-------------|---|---|---|----|---|---|---|
| Amount Sold | 8 | 1 | 6 | 10 | 3 | 7 | 4 |



| Month               | 1   | 2   | 3   | 4  | 5  |
|---------------------|-----|-----|-----|----|----|
| Electric Bill Price | 125 | 200 | 150 | 25 | 75 |

