



Fill in the grid using the chart.

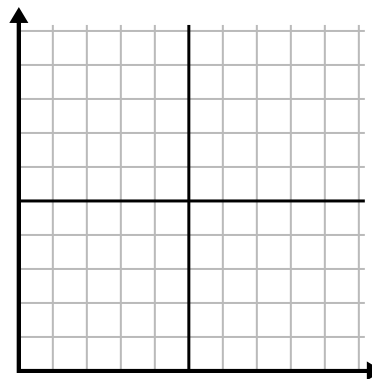
1)

Year	1	2	3	4	5
Ink Cartridges Used	8	2	4	12	14



2)

Day	1	2	3	4	5	6	7
Texts Sent	40	15	30	20	10	35	45



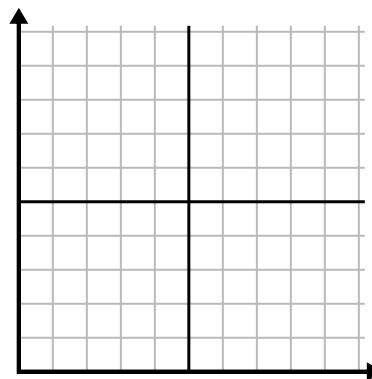
3)

Week	1	2	3	4	5
Hours of TV watched	35	50	40	10	5



4)

Year	1	2	3	4	5	6	7
Boxes of Pens Used	6	3	7	8	2	1	10



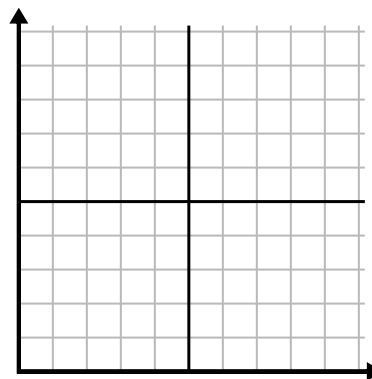
5)

Month	1	2	3	4	5
Electric Bill Price	200	75	25	225	50



6)

Hour	1	2	3	4	5
Amount Sold	8	4	2	10	3

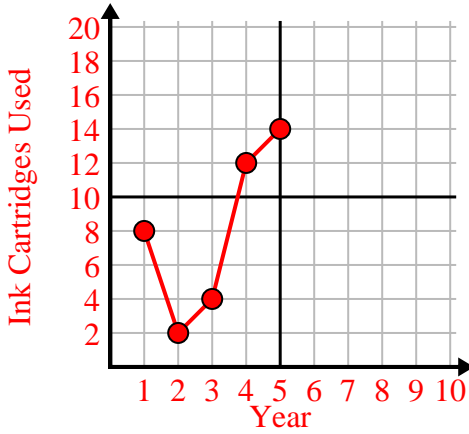




Fill in the grid using the chart.

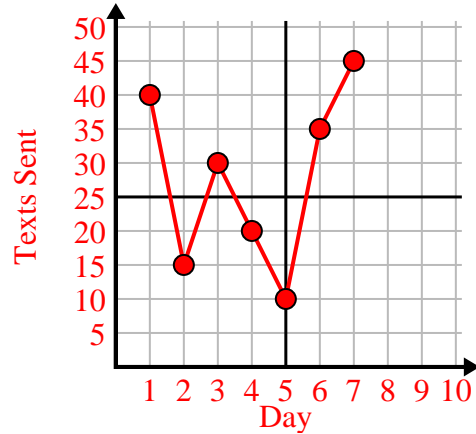
1)

Year	1	2	3	4	5
Ink Cartridges Used	8	2	4	12	14



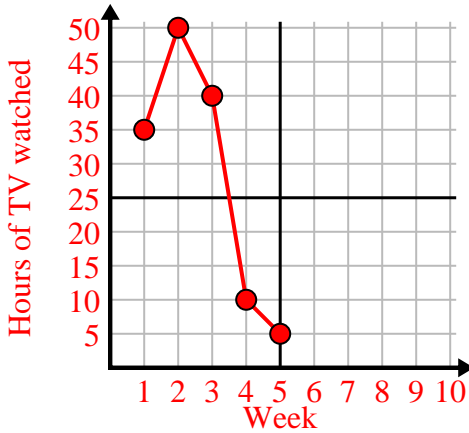
2)

Day	1	2	3	4	5	6	7
Texts Sent	40	15	30	20	10	35	45



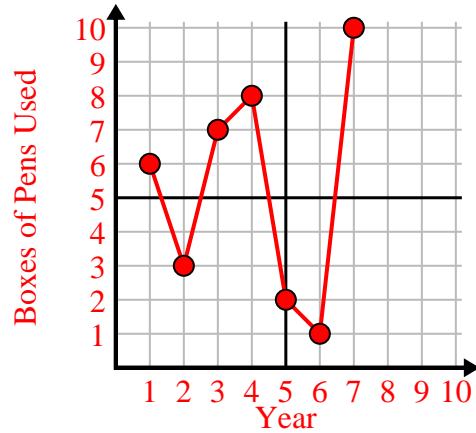
3)

Week	1	2	3	4	5
Hours of TV watched	35	50	40	10	5



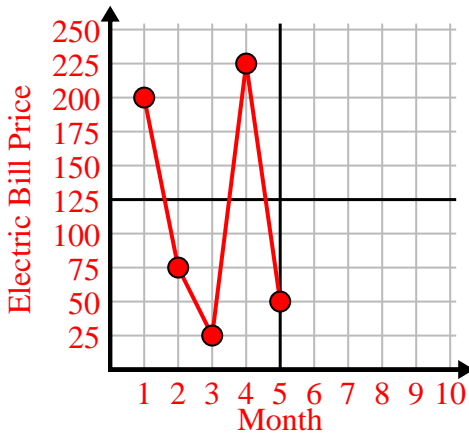
4)

Year	1	2	3	4	5	6	7
Boxes of Pens Used	6	3	7	8	2	1	10



5)

Month	1	2	3	4	5
Electric Bill Price	200	75	25	225	50



6)

Hour	1	2	3	4	5
Amount Sold	8	4	2	10	3

