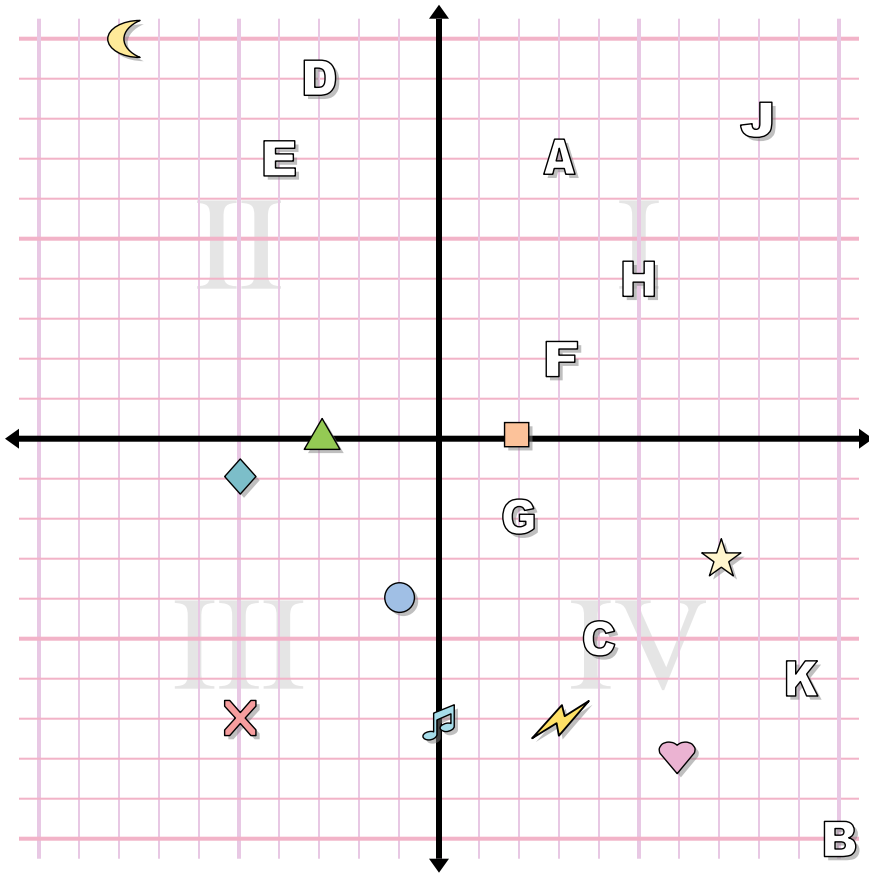




Answers



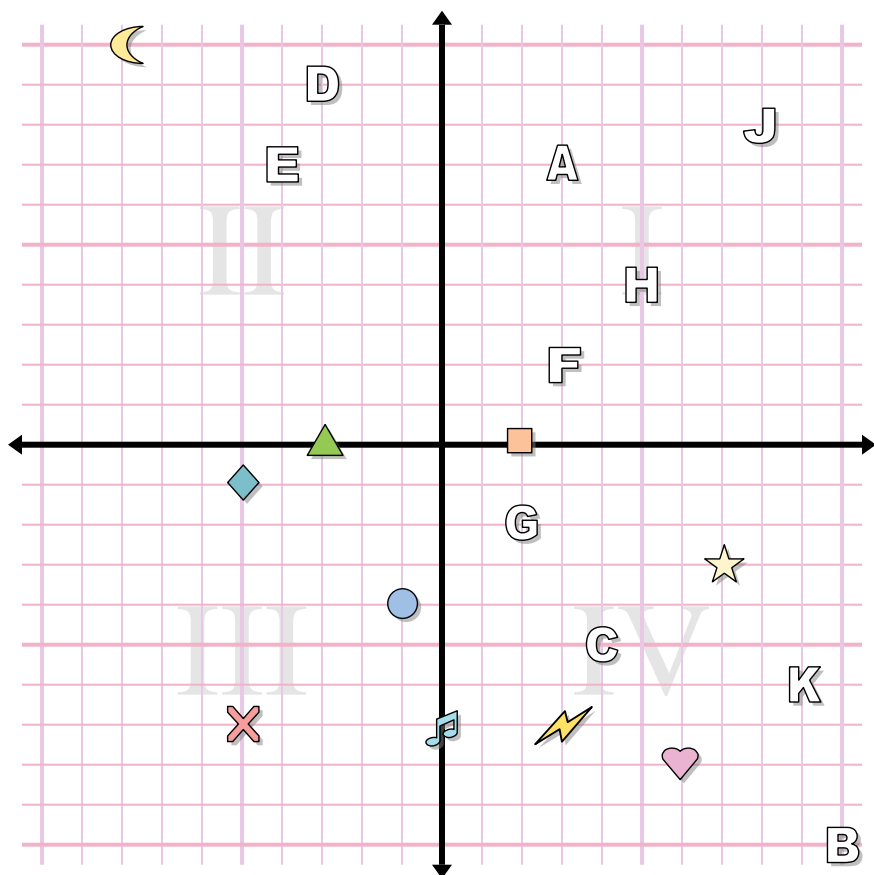
Determine the coordinates of each figure.

- 1) music note
- 2) circle
- 3) lightning
- 4) cross
- 5) moon
- 6) diamond
- 7) star
- 8) heart
- 9) square
- 10) triangle

Determine which letter is at each coordinate.

- 11) (-4 , 7)
- 12) (2 , -2)
- 13) (-3 , 9)
- 14) (5 , 4)
- 15) (8 , 8)
- 16) (3 , 7)
- 17) (4 , -5)
- 18) (10 , -10)
- 19) (9 , -6)
- 20) (3 , 2)

1. _____
2. _____
3. _____
4. _____
5. _____
6. _____
7. _____
8. _____
9. _____
10. _____
11. _____
12. _____
13. _____
14. _____
15. _____
16. _____
17. _____
18. _____
19. _____
20. _____



Answers

1. **(0, -7)**
2. **(-1, -4)**
3. **(3, -7)**
4. **(-5, -7)**
5. **(-8, 10)**
6. **(-5, -1)**
7. **(7, -3)**
8. **(6, -8)**
9. **(2, 0)**
10. **(-3, 0)**
11. **E**
12. **G**
13. **D**
14. **H**
15. **J**
16. **A**
17. **C**
18. **B**
19. **K**
20. **F**

Determine the coordinates of each figure.

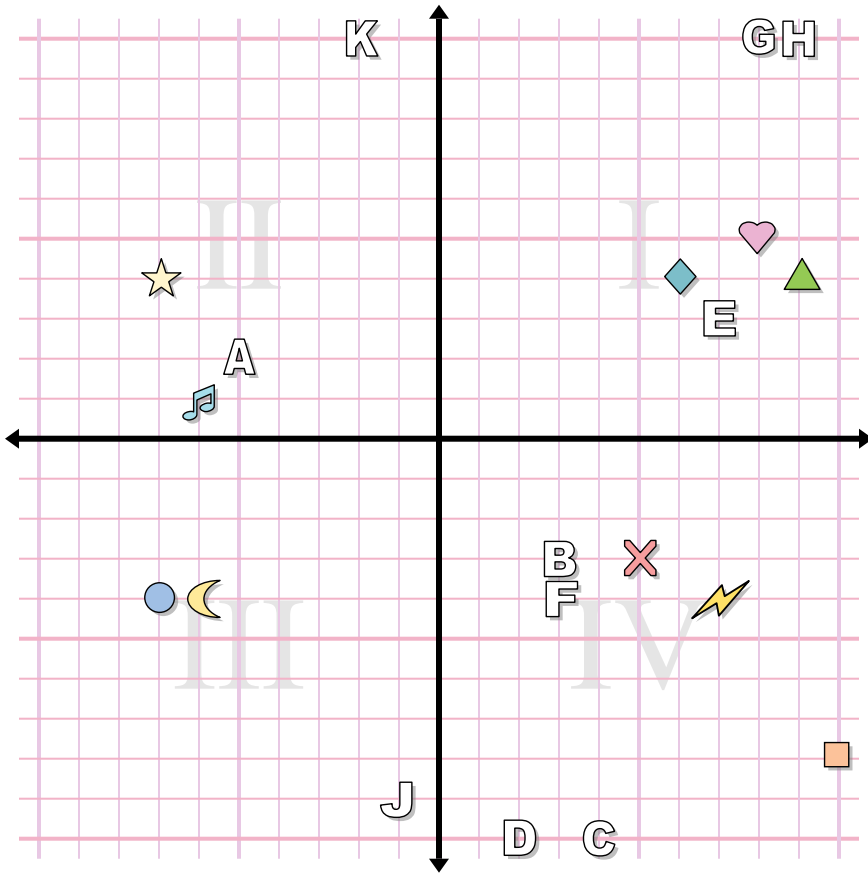
- | | |
|---------------|--------------|
| 1) music note | 2) circle |
| 3) lightning | 4) cross |
| 5) moon | 6) diamond |
| 7) star | 8) heart |
| 9) square | 10) triangle |

Determine which letter is at each coordinate.

- | | |
|-------------|---------------|
| 11) (-4, 7) | 12) (2, -2) |
| 13) (-3, 9) | 14) (5, 4) |
| 15) (8, 8) | 16) (3, 7) |
| 17) (4, -5) | 18) (10, -10) |
| 19) (9, -6) | 20) (3, 2) |



Answers



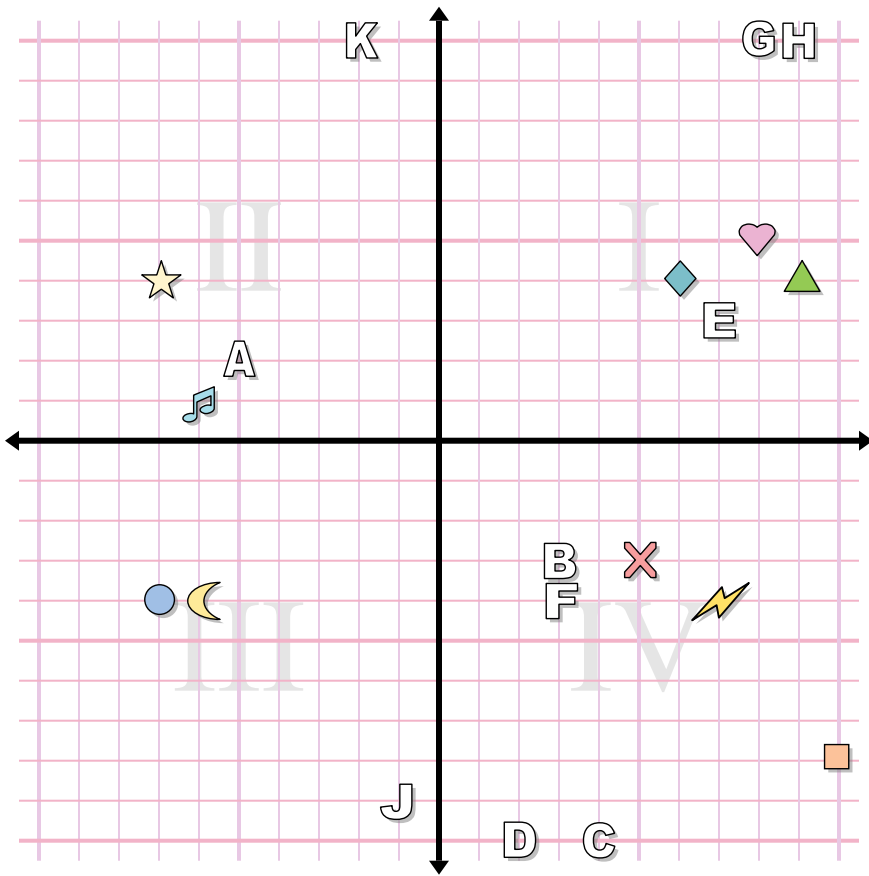
1. _____
2. _____
3. _____
4. _____
5. _____
6. _____
7. _____
8. _____
9. _____
10. _____
11. _____
12. _____
13. _____
14. _____
15. _____
16. _____
17. _____
18. _____
19. _____
20. _____

Determine the coordinates of each figure.

- | | |
|---------------|------------|
| 1) circle | 2) diamond |
| 3) square | 4) heart |
| 5) music note | 6) cross |
| 7) lightning | 8) moon |
| 9) triangle | 10) star |

Determine which letter is at each coordinate.

- | | |
|---------------|---------------|
| 11) (2 , -10) | 12) (9 , 10) |
| 13) (7 , 3) | 14) (4 , -10) |
| 15) (3 , -3) | 16) (-2 , 10) |
| 17) (-5 , 2) | 18) (8 , 10) |
| 19) (-1 , -9) | 20) (3 , -4) |



Answers

1. **(-7 , -4)**
2. **(6 , 4)**
3. **(10 , -8)**
4. **(8 , 5)**
5. **(-6 , 1)**
6. **(5 , -3)**
7. **(7 , -4)**
8. **(-6 , -4)**
9. **(9 , 4)**
10. **(-7 , 4)**
11. **D**
12. **H**
13. **E**
14. **C**
15. **B**
16. **K**
17. **A**
18. **G**
19. **J**
20. **F**

Determine the coordinates of each figure.

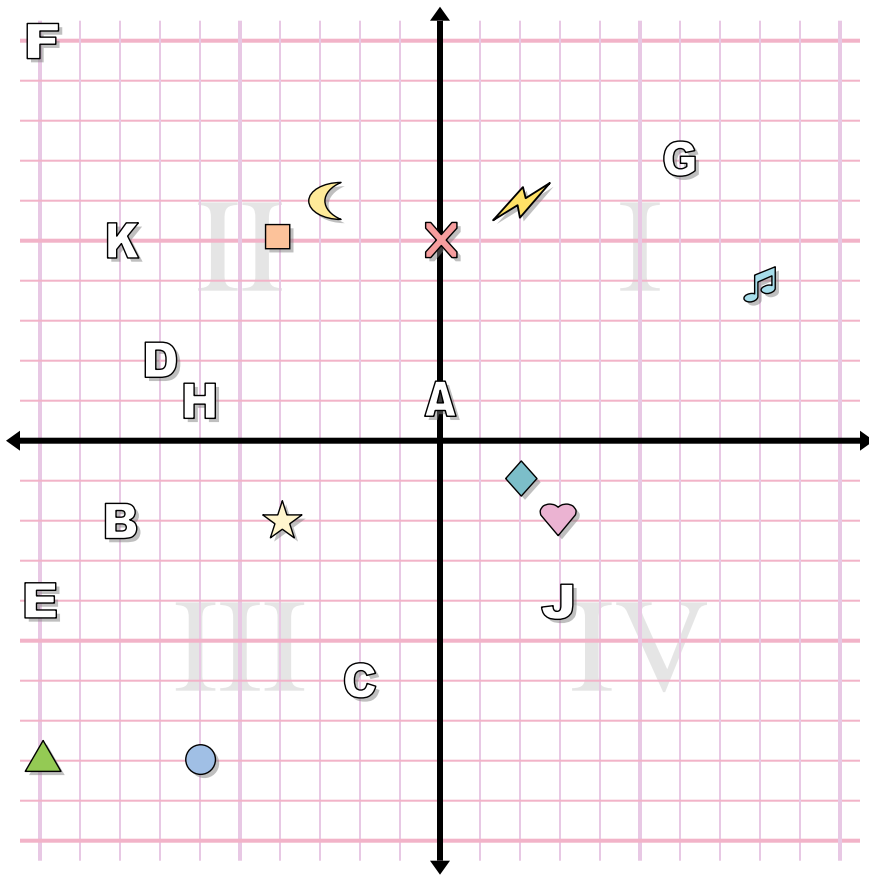
- | | |
|---------------|------------|
| 1) circle | 2) diamond |
| 3) square | 4) heart |
| 5) music note | 6) cross |
| 7) lightning | 8) moon |
| 9) triangle | 10) star |

Determine which letter is at each coordinate.

- | | |
|----------------|----------------|
| 11) (2 , -10) | 12) (9 , 10) |
| 13) (7 , 3) | 14) (4 , -10) |
| 15) (3 , -3) | 16) (-2 , 10) |
| 17) (-5 , 2) | 18) (8 , 10) |
| 19) (-1 , -9) | 20) (3 , -4) |



Answers



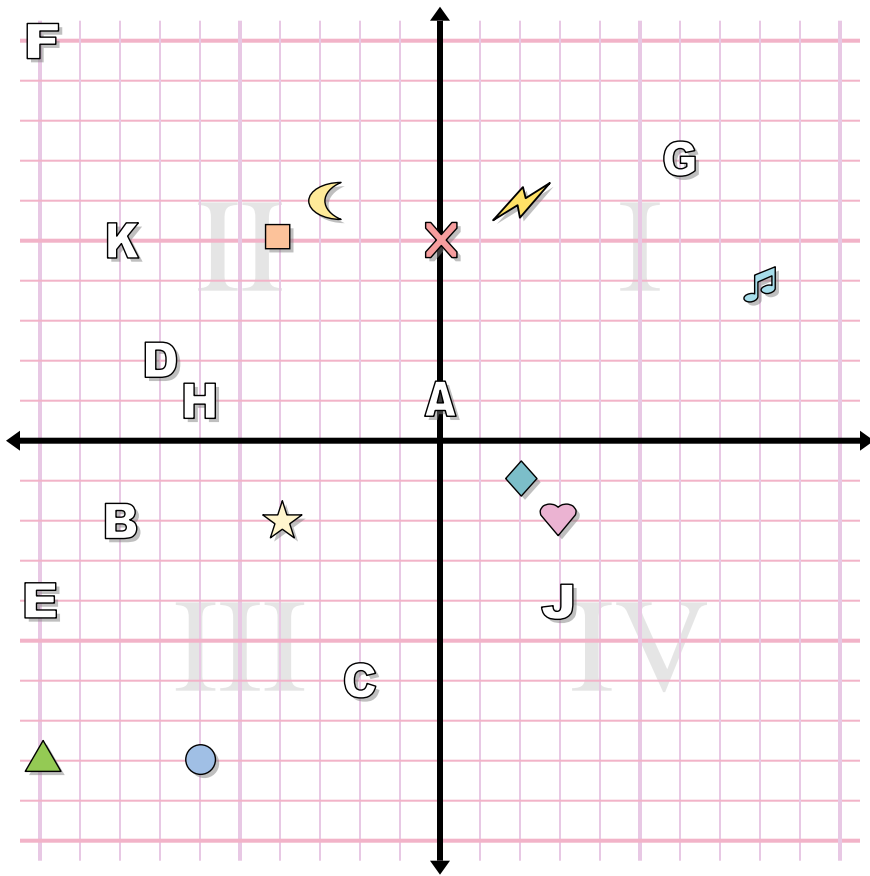
Determine the coordinates of each figure.

- 1) triangle
- 2) moon
- 3) square
- 4) heart
- 5) star
- 6) circle
- 7) music note
- 8) lightning
- 9) cross
- 10) diamond

Determine which letter is at each coordinate.

- 11) (3, -4)
- 12) (-6, 1)
- 13) (-2, -6)
- 14) (-8, 5)
- 15) (0, 1)
- 16) (-10, 10)
- 17) (6, 7)
- 18) (-7, 2)
- 19) (-8, -2)
- 20) (-10, -4)

1. _____
2. _____
3. _____
4. _____
5. _____
6. _____
7. _____
8. _____
9. _____
10. _____
11. _____
12. _____
13. _____
14. _____
15. _____
16. _____
17. _____
18. _____
19. _____
20. _____



Determine the coordinates of each figure.

- 1) triangle
- 2) moon
- 3) square
- 4) heart
- 5) star
- 6) circle
- 7) music note
- 8) lightning
- 9) cross
- 10) diamond

Determine which letter is at each coordinate.

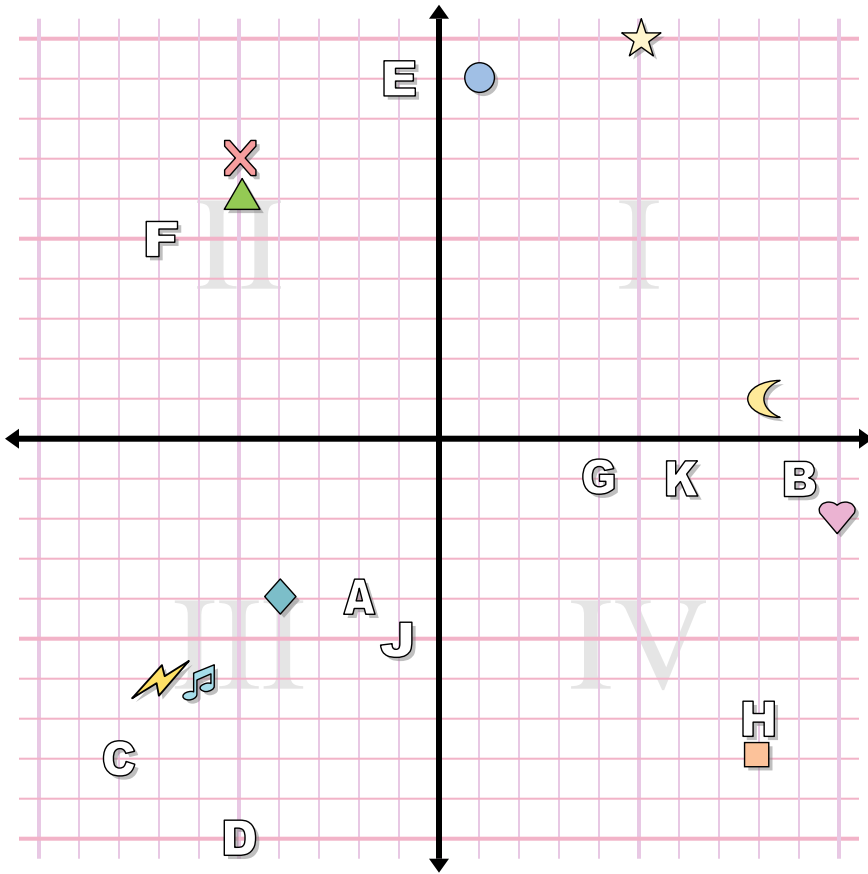
- 11) (3, -4)
- 12) (-6, 1)
- 13) (-2, -6)
- 14) (-8, 5)
- 15) (0, 1)
- 16) (-10, 10)
- 17) (6, 7)
- 18) (-7, 2)
- 19) (-8, -2)
- 20) (-10, -4)

Answers

- 1. **(-10, -8)**
- 2. **(-3, 6)**
- 3. **(-4, 5)**
- 4. **(3, -2)**
- 5. **(-4, -2)**
- 6. **(-6, -8)**
- 7. **(8, 4)**
- 8. **(2, 6)**
- 9. **(0, 5)**
- 10. **(2, -1)**
- 11. **J**
- 12. **H**
- 13. **C**
- 14. **K**
- 15. **A**
- 16. **F**
- 17. **G**
- 18. **D**
- 19. **B**
- 20. **E**



Answers



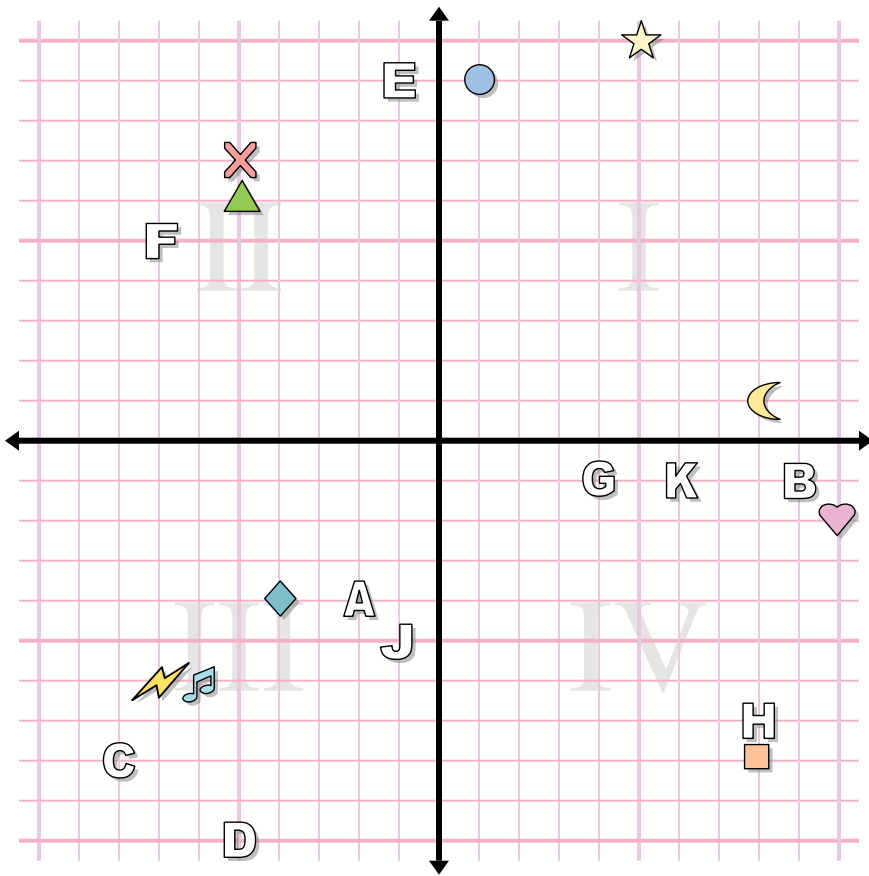
1. _____
2. _____
3. _____
4. _____
5. _____
6. _____
7. _____
8. _____
9. _____
10. _____
11. _____
12. _____
13. _____
14. _____
15. _____
16. _____
17. _____
18. _____
19. _____
20. _____

Determine the coordinates of each figure.

- | | |
|------------|---------------|
| 1) cross | 2) music note |
| 3) star | 4) circle |
| 5) square | 6) heart |
| 7) diamond | 8) lightning |
| 9) moon | 10) triangle |

Determine which letter is at each coordinate.

- | | |
|--------------|---------------|
| 11) (-2, -4) | 12) (-1, -5) |
| 13) (8, -7) | 14) (-1, 9) |
| 15) (6, -1) | 16) (-8, -8) |
| 17) (9, -1) | 18) (4, -1) |
| 19) (-7, 5) | 20) (-5, -10) |



Answers

1. **(-5 , 7)**
2. **(-6 , -6)**
3. **(5 , 10)**
4. **(1 , 9)**
5. **(8 , -8)**
6. **(10 , -2)**
7. **(-4 , -4)**
8. **(-7 , -6)**
9. **(8 , 1)**
10. **(-5 , 6)**
11. **A**
12. **J**
13. **H**
14. **E**
15. **K**
16. **C**
17. **B**
18. **G**
19. **F**
20. **D**

Determine the coordinates of each figure.

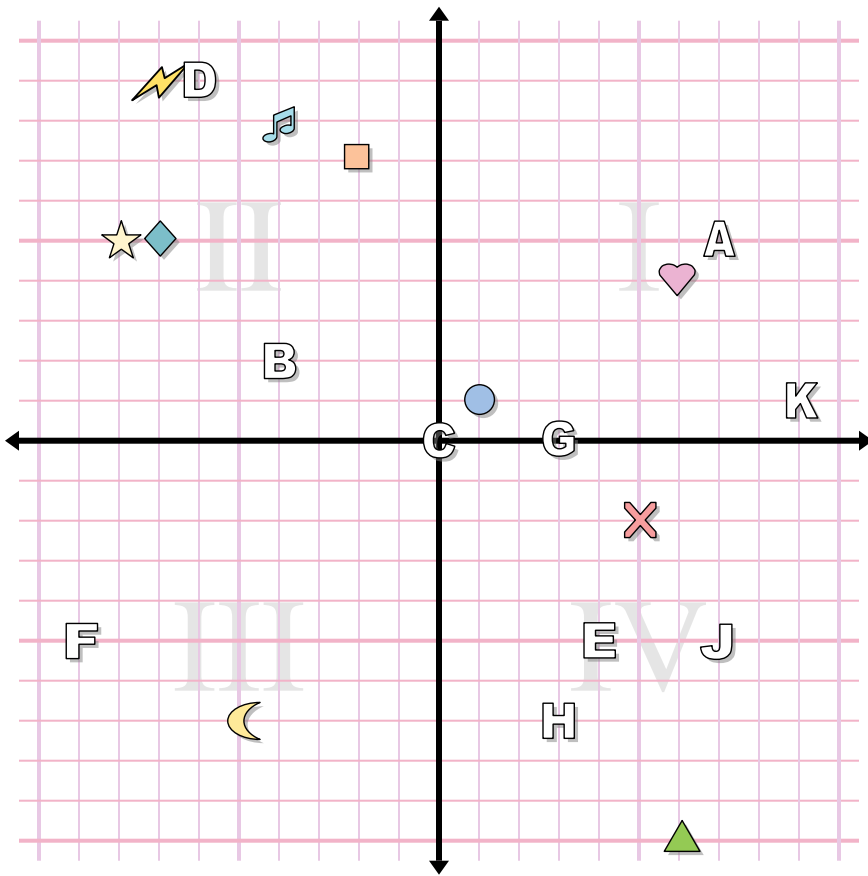
- | | |
|------------|---------------|
| 1) cross | 2) music note |
| 3) star | 4) circle |
| 5) square | 6) heart |
| 7) diamond | 8) lightning |
| 9) moon | 10) triangle |

Determine which letter is at each coordinate.

- | | |
|---------------|----------------|
| 11) (-2 , -4) | 12) (-1 , -5) |
| 13) (8 , -7) | 14) (-1 , 9) |
| 15) (6 , -1) | 16) (-8 , -8) |
| 17) (9 , -1) | 18) (4 , -1) |
| 19) (-7 , 5) | 20) (-5 , -10) |



Answers



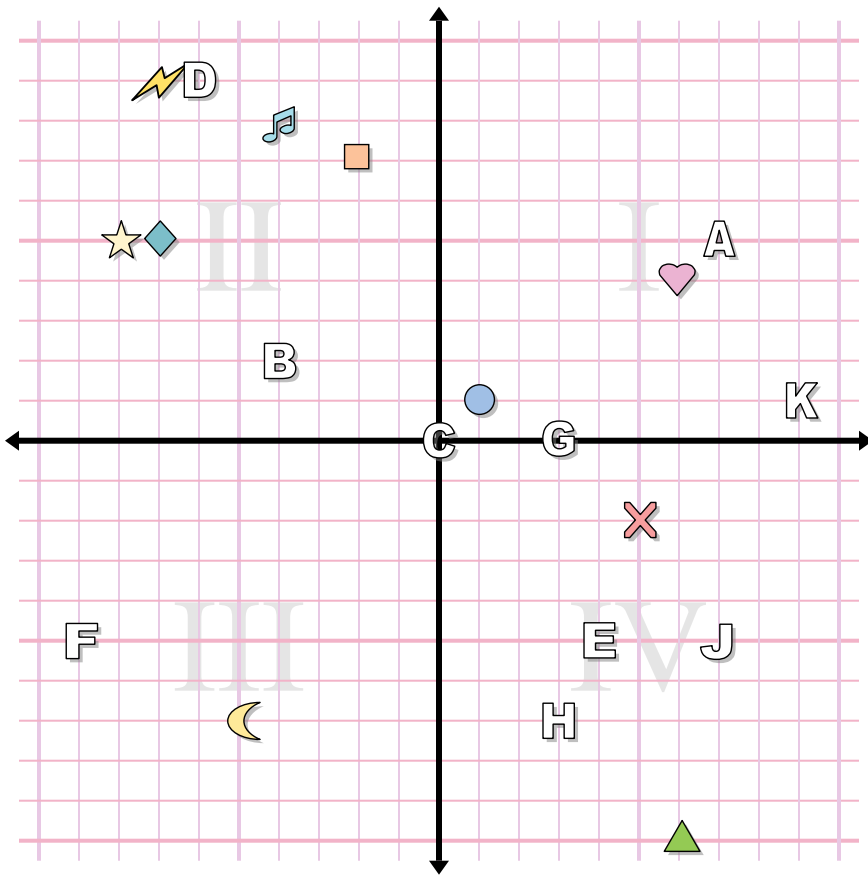
1. _____
2. _____
3. _____
4. _____
5. _____
6. _____
7. _____
8. _____
9. _____
10. _____
11. _____
12. _____
13. _____
14. _____
15. _____
16. _____
17. _____
18. _____
19. _____
20. _____

Determine the coordinates of each figure.

- | | |
|---------------|--------------|
| 1) cross | 2) square |
| 3) music note | 4) moon |
| 5) circle | 6) heart |
| 7) triangle | 8) lightning |
| 9) diamond | 10) star |

Determine which letter is at each coordinate.

- | | |
|---------------|--------------|
| 11) (-4 , 2) | 12) (7 , -5) |
| 13) (0 , 0) | 14) (3 , 0) |
| 15) (3 , -7) | 16) (4 , -5) |
| 17) (7 , 5) | 18) (-6 , 9) |
| 19) (-9 , -5) | 20) (9 , 1) |



Answers

1. **(5, -2)**
2. **(-2, 7)**
3. **(-4, 8)**
4. **(-5, -7)**
5. **(1, 1)**
6. **(6, 4)**
7. **(6, -10)**
8. **(-7, 9)**
9. **(-7, 5)**
10. **(-8, 5)**
11. **B**
12. **J**
13. **C**
14. **G**
15. **H**
16. **E**
17. **A**
18. **D**
19. **F**
20. **K**

Determine the coordinates of each figure.

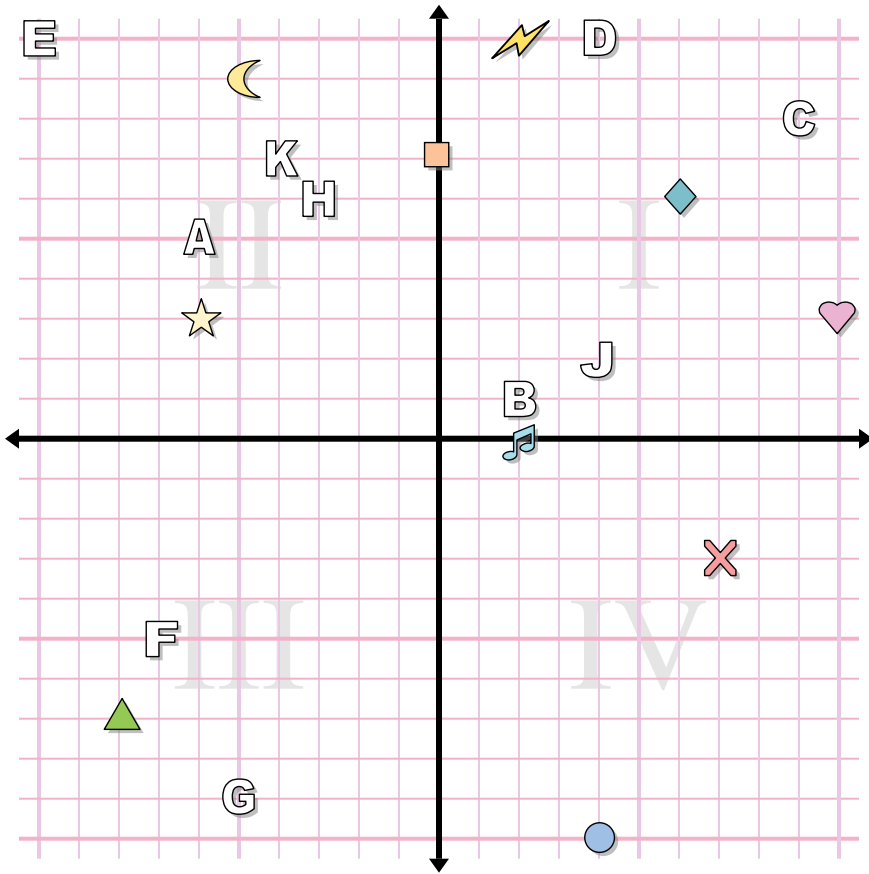
- | | |
|---------------|--------------|
| 1) cross | 2) square |
| 3) music note | 4) moon |
| 5) circle | 6) heart |
| 7) triangle | 8) lightning |
| 9) diamond | 10) star |

Determine which letter is at each coordinate.

- | | |
|--------------|-------------|
| 11) (-4, 2) | 12) (7, -5) |
| 13) (0, 0) | 14) (3, 0) |
| 15) (3, -7) | 16) (4, -5) |
| 17) (7, 5) | 18) (-6, 9) |
| 19) (-9, -5) | 20) (9, 1) |



Answers



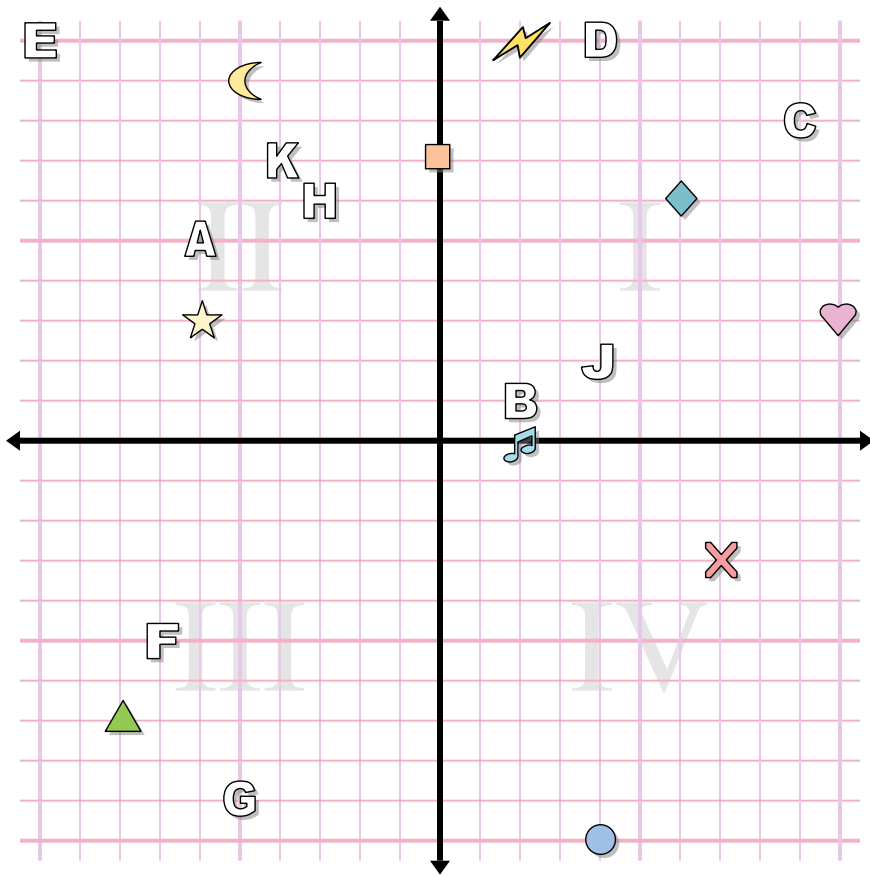
1. _____
2. _____
3. _____
4. _____
5. _____
6. _____
7. _____
8. _____
9. _____
10. _____
11. _____
12. _____
13. _____
14. _____
15. _____
16. _____
17. _____
18. _____
19. _____
20. _____

Determine the coordinates of each figure.

- | | |
|--------------|---------------|
| 1) star | 2) moon |
| 3) heart | 4) diamond |
| 5) lightning | 6) triangle |
| 7) circle | 8) music note |
| 9) square | 10) cross |

Determine which letter is at each coordinate.

- | | |
|---------------|----------------|
| 11) (-3 , 6) | 12) (-4 , 7) |
| 13) (-5 , -9) | 14) (-7 , -5) |
| 15) (-6 , 5) | 16) (9 , 8) |
| 17) (4 , 10) | 18) (4 , 2) |
| 19) (2 , 1) | 20) (-10 , 10) |



Answers

1. **(-6 , 3)**
2. **(-5 , 9)**
3. **(10 , 3)**
4. **(6 , 6)**
5. **(2 , 10)**
6. **(-8 , -7)**
7. **(4 , -10)**
8. **(2 , 0)**
9. **(0 , 7)**
10. **(7 , -3)**
11. **H**
12. **K**
13. **G**
14. **F**
15. **A**
16. **C**
17. **D**
18. **J**
19. **B**
20. **E**

Determine the coordinates of each figure.

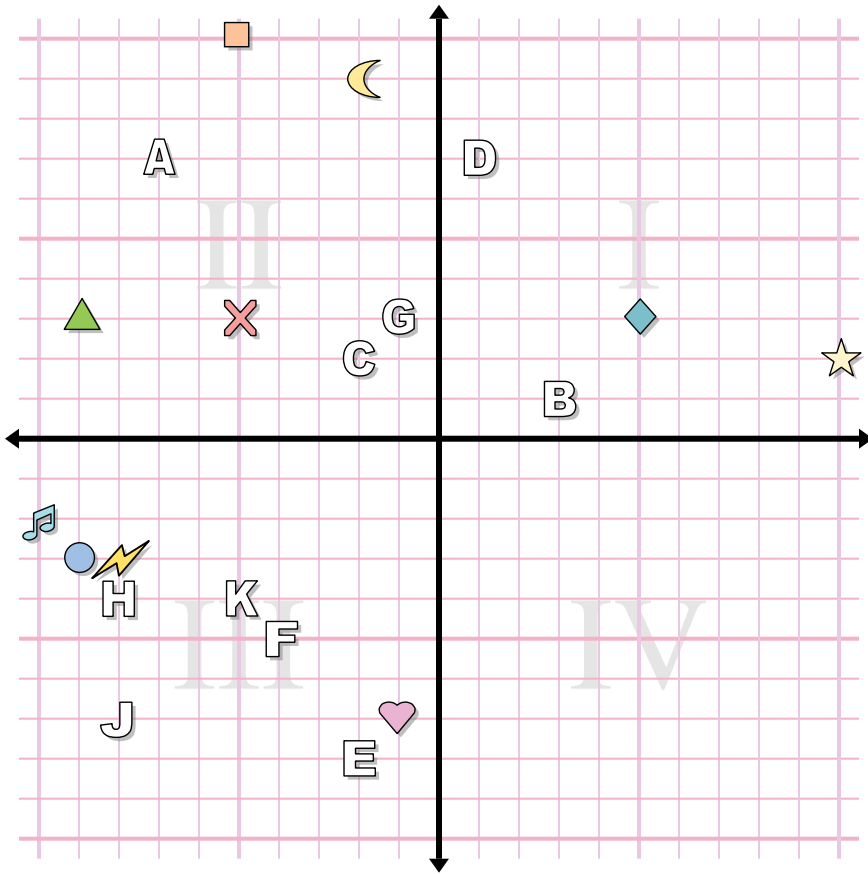
- | | |
|--------------|---------------|
| 1) star | 2) moon |
| 3) heart | 4) diamond |
| 5) lightning | 6) triangle |
| 7) circle | 8) music note |
| 9) square | 10) cross |

Determine which letter is at each coordinate.

- | | |
|---------------|----------------|
| 11) (-3 , 6) | 12) (-4 , 7) |
| 13) (-5 , -9) | 14) (-7 , -5) |
| 15) (-6 , 5) | 16) (9 , 8) |
| 17) (4 , 10) | 18) (4 , 2) |
| 19) (2 , 1) | 20) (-10 , 10) |



Answers



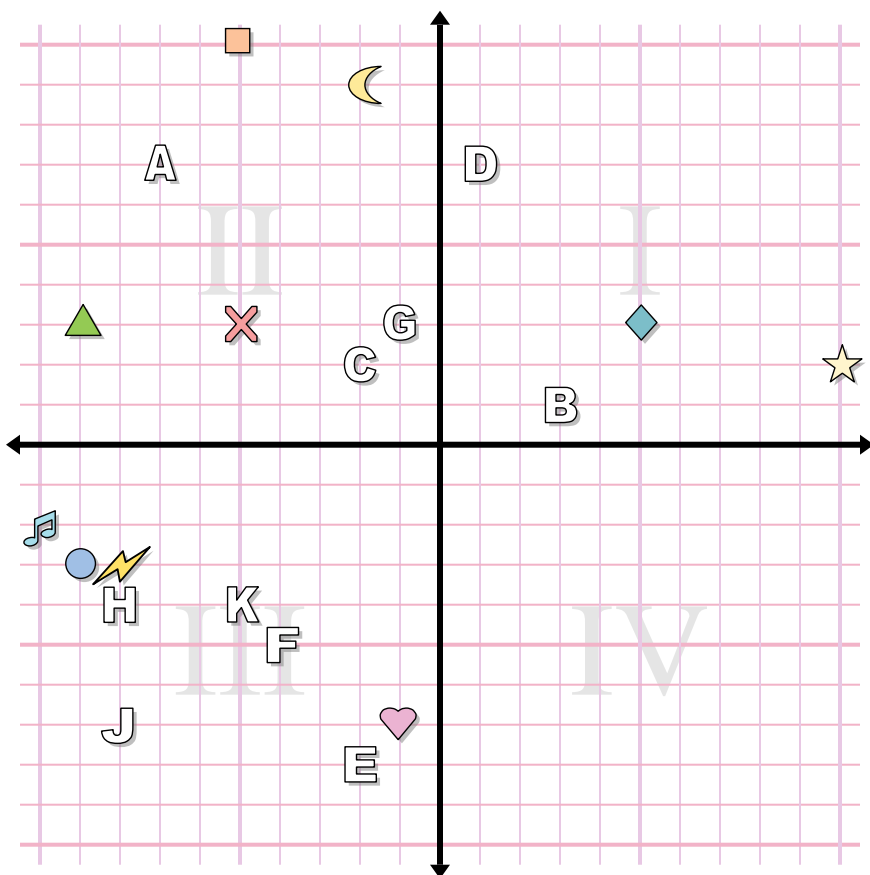
1. _____
2. _____
3. _____
4. _____
5. _____
6. _____
7. _____
8. _____
9. _____
10. _____
11. _____
12. _____
13. _____
14. _____
15. _____
16. _____
17. _____
18. _____
19. _____
20. _____

Determine the coordinates of each figure.

- | | |
|---------------|--------------|
| 1) diamond | 2) star |
| 3) triangle | 4) moon |
| 5) music note | 6) lightning |
| 7) square | 8) heart |
| 9) circle | 10) cross |

Determine which letter is at each coordinate.

- | | |
|--------------|--------------|
| 11) (-7, 7) | 12) (-4, -5) |
| 13) (-8, -4) | 14) (-2, -8) |
| 15) (-8, -7) | 16) (-1, 3) |
| 17) (-5, -4) | 18) (3, 1) |
| 19) (-2, 2) | 20) (1, 7) |



Answers

1. (5, 3)
2. (10, 2)
3. (-9, 3)
4. (-2, 9)
5. (-10, -2)
6. (-8, -3)
7. (-5, 10)
8. (-1, -7)
9. (-9, -3)
10. (-5, 3)
11. A
12. F
13. H
14. E
15. J
16. G
17. K
18. B
19. C
20. D

Determine the coordinates of each figure.

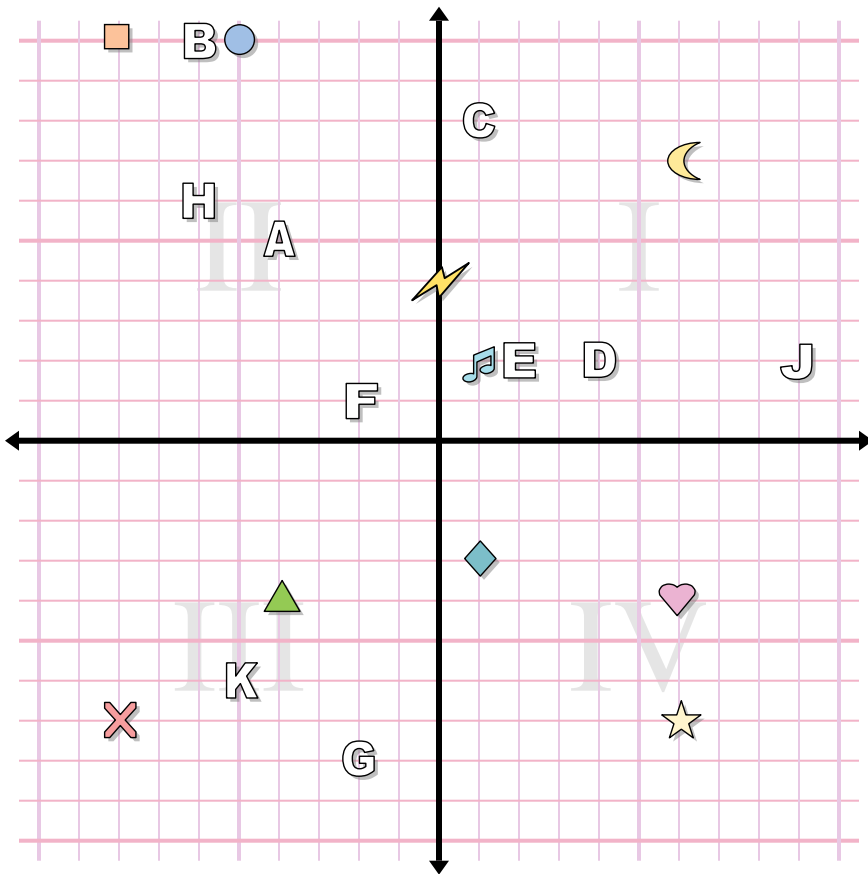
- | | |
|---------------|--------------|
| 1) diamond | 2) star |
| 3) triangle | 4) moon |
| 5) music note | 6) lightning |
| 7) square | 8) heart |
| 9) circle | 10) cross |

Determine which letter is at each coordinate.

- | | |
|--------------|--------------|
| 11) (-7, 7) | 12) (-4, -5) |
| 13) (-8, -4) | 14) (-2, -8) |
| 15) (-8, -7) | 16) (-1, 3) |
| 17) (-5, -4) | 18) (3, 1) |
| 19) (-2, 2) | 20) (1, 7) |



Answers



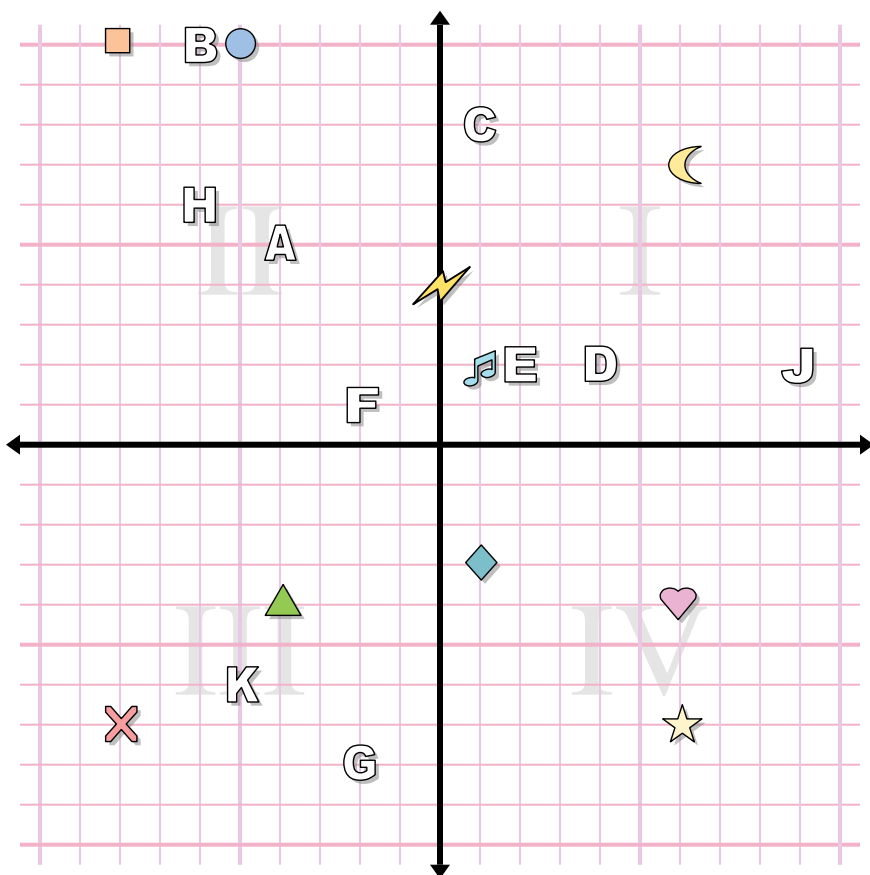
1. _____
2. _____
3. _____
4. _____
5. _____
6. _____
7. _____
8. _____
9. _____
10. _____
11. _____
12. _____
13. _____
14. _____
15. _____
16. _____
17. _____
18. _____
19. _____
20. _____

Determine the coordinates of each figure.

- | | |
|---------------|-------------|
| 1) star | 2) cross |
| 3) music note | 4) square |
| 5) lightning | 6) moon |
| 7) circle | 8) heart |
| 9) triangle | 10) diamond |

Determine which letter is at each coordinate.

- | | |
|---------------|---------------|
| 11) (-4 , 5) | 12) (-2 , 1) |
| 13) (-5 , -6) | 14) (-6 , 6) |
| 15) (9 , 2) | 16) (4 , 2) |
| 17) (1 , 8) | 18) (-6 , 10) |
| 19) (2 , 2) | 20) (-2 , -8) |



Answers

1. (6, -7)
2. (-8, -7)
3. (1, 2)
4. (-8, 10)
5. (0, 4)
6. (6, 7)
7. (-5, 10)
8. (6, -4)
9. (-4, -4)
10. (1, -3)
11. A
12. F
13. K
14. H
15. J
16. D
17. C
18. B
19. E
20. G

Determine the coordinates of each figure.

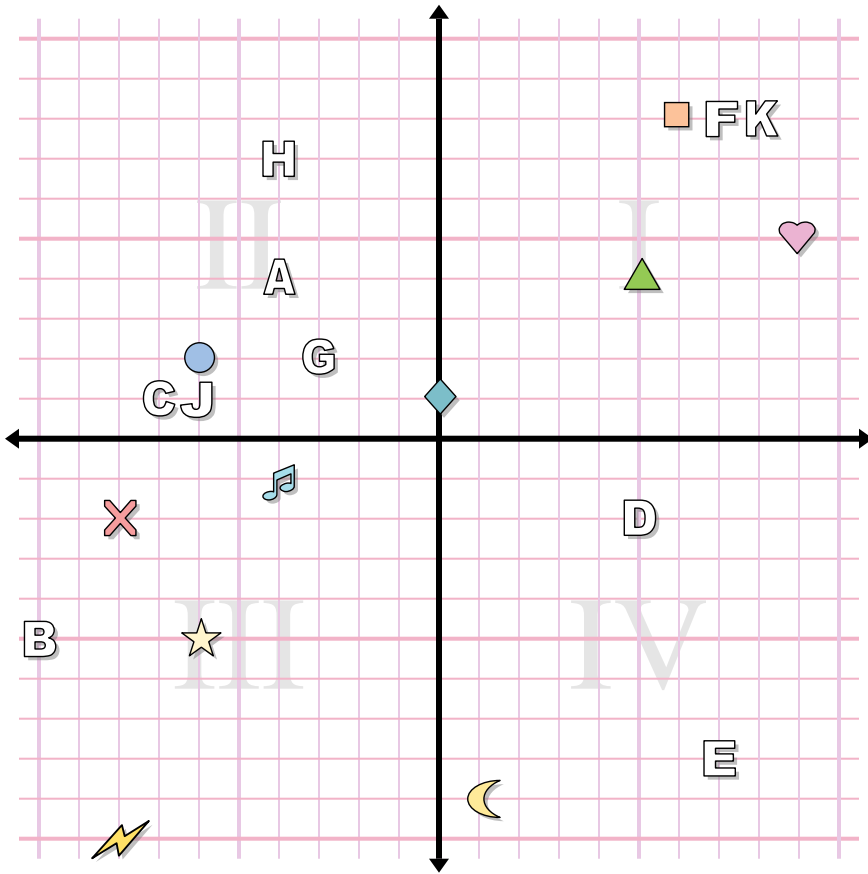
- | | |
|---------------|-------------|
| 1) star | 2) cross |
| 3) music note | 4) square |
| 5) lightning | 6) moon |
| 7) circle | 8) heart |
| 9) triangle | 10) diamond |

Determine which letter is at each coordinate.

- | | |
|--------------|--------------|
| 11) (-4, 5) | 12) (-2, 1) |
| 13) (-5, -6) | 14) (-6, 6) |
| 15) (9, 2) | 16) (4, 2) |
| 17) (1, 8) | 18) (-6, 10) |
| 19) (2, 2) | 20) (-2, -8) |



Answers



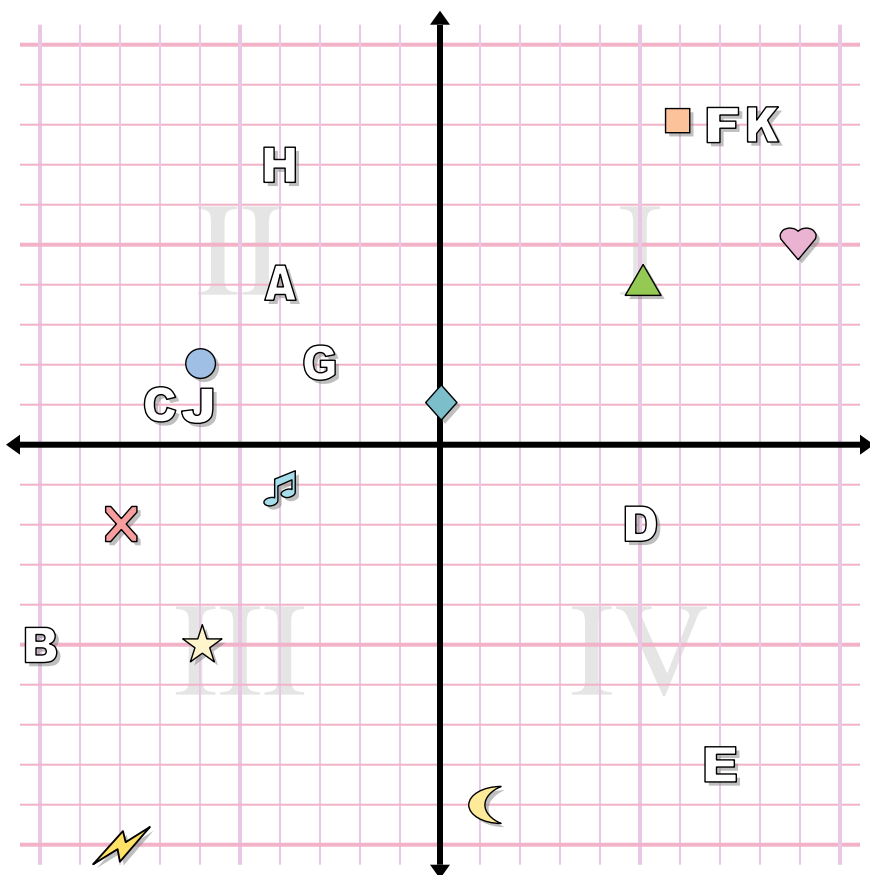
1. _____
2. _____
3. _____
4. _____
5. _____
6. _____
7. _____
8. _____
9. _____
10. _____
11. _____
12. _____
13. _____
14. _____
15. _____
16. _____
17. _____
18. _____
19. _____
20. _____

Determine the coordinates of each figure.

- | | |
|---------------|-------------|
| 1) music note | 2) triangle |
| 3) cross | 4) heart |
| 5) lightning | 6) square |
| 7) circle | 8) diamond |
| 9) moon | 10) star |

Determine which letter is at each coordinate.

- | | |
|----------------|--------------|
| 11) (-3 , 2) | 12) (8 , 8) |
| 13) (-6 , 1) | 14) (7 , -8) |
| 15) (5 , -2) | 16) (-4 , 4) |
| 17) (-10 , -5) | 18) (-7 , 1) |
| 19) (7 , 8) | 20) (-4 , 7) |



Determine the coordinates of each figure.

- 1) music note
- 2) triangle
- 3) cross
- 4) heart
- 5) lightning
- 6) square
- 7) circle
- 8) diamond
- 9) moon
- 10) star

Determine which letter is at each coordinate.

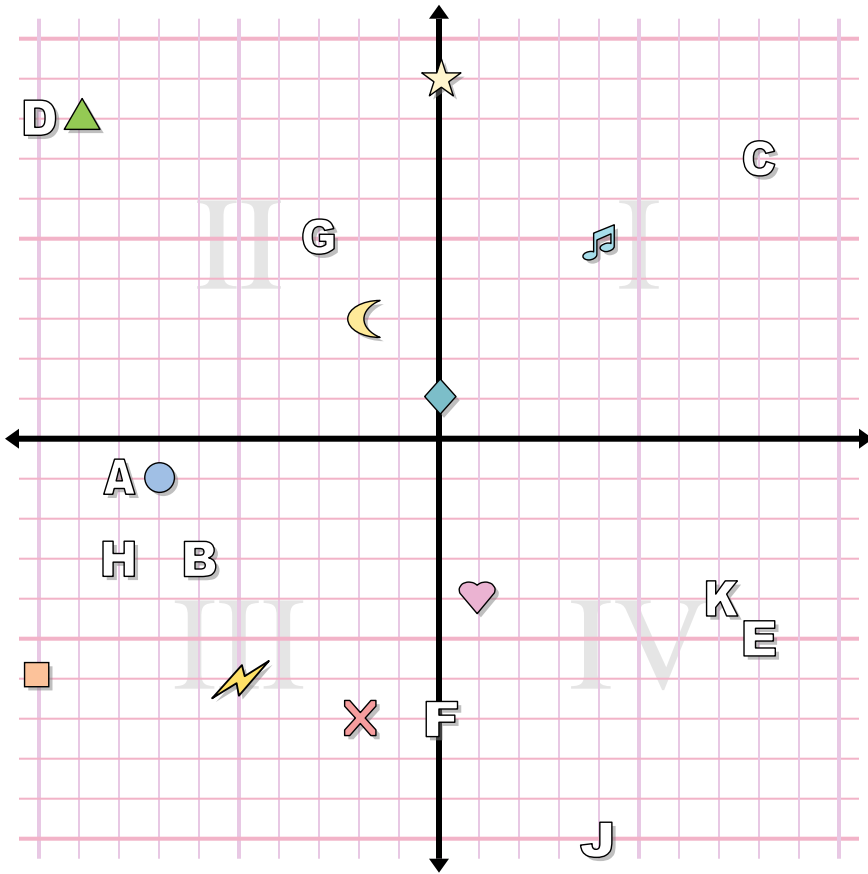
- 11) (-3, 2)
- 12) (8, 8)
- 13) (-6, 1)
- 14) (7, -8)
- 15) (5, -2)
- 16) (-4, 4)
- 17) (-10, -5)
- 18) (-7, 1)
- 19) (7, 8)
- 20) (-4, 7)

Answers

- 1. **(-4, -1)**
- 2. **(5, 4)**
- 3. **(-8, -2)**
- 4. **(9, 5)**
- 5. **(-8, -10)**
- 6. **(6, 8)**
- 7. **(-6, 2)**
- 8. **(0, 1)**
- 9. **(1, -9)**
- 10. **(-6, -5)**
- 11. **G**
- 12. **K**
- 13. **J**
- 14. **E**
- 15. **D**
- 16. **A**
- 17. **B**
- 18. **C**
- 19. **F**
- 20. **H**



Answers



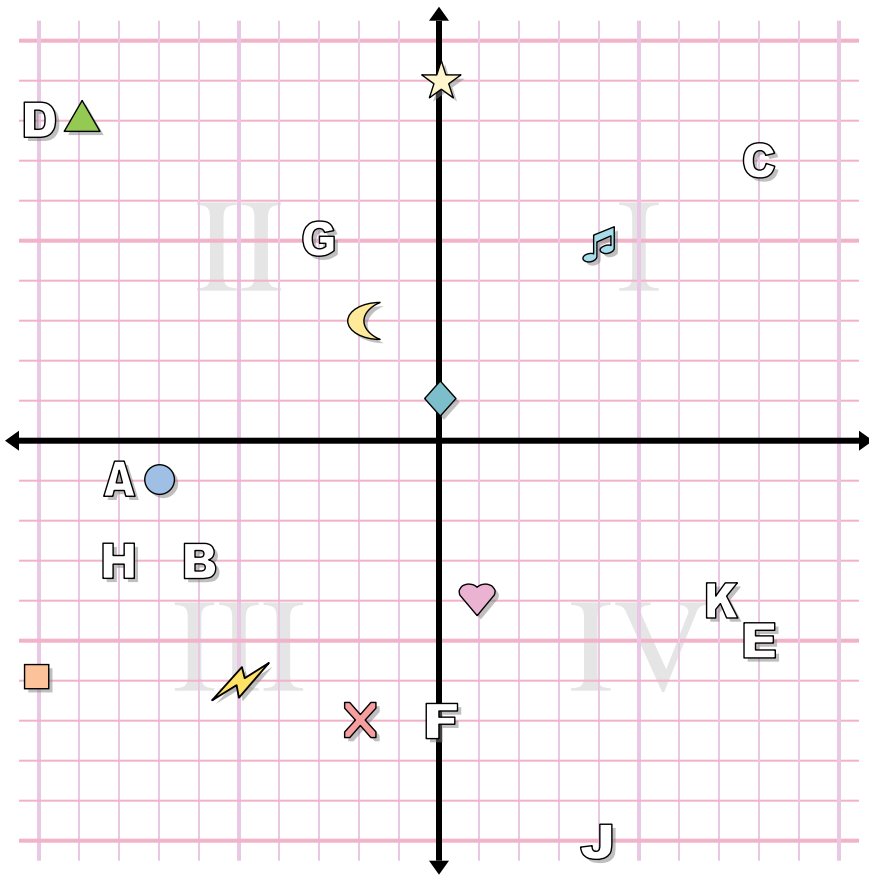
1. _____
2. _____
3. _____
4. _____
5. _____
6. _____
7. _____
8. _____
9. _____
10. _____
11. _____
12. _____
13. _____
14. _____
15. _____
16. _____
17. _____
18. _____
19. _____
20. _____

Determine the coordinates of each figure.

- | | |
|-------------|---------------|
| 1) moon | 2) music note |
| 3) triangle | 4) square |
| 5) circle | 6) cross |
| 7) heart | 8) diamond |
| 9) star | 10) lightning |

Determine which letter is at each coordinate.

- | | |
|--------------|--------------|
| 11) (-6, -3) | 12) (-10, 8) |
| 13) (8, -5) | 14) (4, -10) |
| 15) (-3, 5) | 16) (-8, -3) |
| 17) (0, -7) | 18) (7, -4) |
| 19) (-8, -1) | 20) (8, 7) |



Answers

1. **(-2 , 3)**
2. **(4 , 5)**
3. **(-9 , 8)**
4. **(-10 , -6)**
5. **(-7 , -1)**
6. **(-2 , -7)**
7. **(1 , -4)**
8. **(0 , 1)**
9. **(0 , 9)**
10. **(-5 , -6)**
11. **B**
12. **D**
13. **E**
14. **J**
15. **G**
16. **H**
17. **F**
18. **K**
19. **A**
20. **C**

Determine the coordinates of each figure.

- | | |
|-------------|---------------|
| 1) moon | 2) music note |
| 3) triangle | 4) square |
| 5) circle | 6) cross |
| 7) heart | 8) diamond |
| 9) star | 10) lightning |

Determine which letter is at each coordinate.

- | | |
|---------------|---------------|
| 11) (-6 , -3) | 12) (-10 , 8) |
| 13) (8 , -5) | 14) (4 , -10) |
| 15) (-3 , 5) | 16) (-8 , -3) |
| 17) (0 , -7) | 18) (7 , -4) |
| 19) (-8 , -1) | 20) (8 , 7) |