


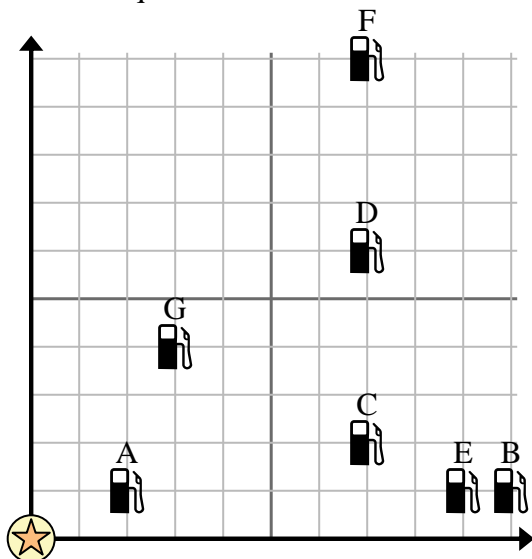




Use the grid to solve each problem.

-  = Gas Station
-  = Mall
-  = 1 Square Mile






- 1) Investors wanted to build a new gas station, but wanted to make sure it was at least 2 miles from a pre-existing station. Should they build a gas station 5 miles east and 3 miles north of the mall?
- 2) Which gas station is closest to the mall?
- 3) Which gas station is furthest from the mall?
- 4) Which gas station is further west? Station C or Station E?
- 5) If you were to go 7 miles east and 10 miles north from the mall which gas station would you end up at?

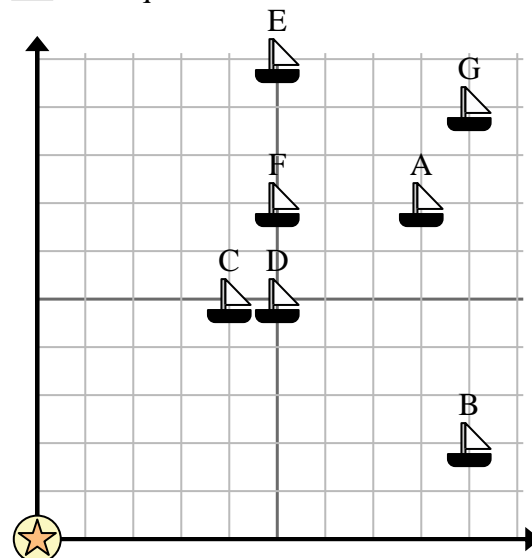
Answers

1. _____
2. _____
3. _____
4. _____
5. _____
6. _____
7. _____
8. _____
9. _____
10. _____

- 6) A new ship wanted to fish, but the captain wanted to make sure they were at least 2 miles from another ship. If he sailed 5 miles east and 8 miles north would that spot suit him?

-  = Ship
-  = Buoy
-  = 1 Square Mile

- 7) Which ship is closest to the buoy?
- 8) Which ship is furthest from the buoy?
- 9) Which ship is further east? Ship D or ship A?
- 10) Which ship is 5 miles east and 7 miles north from the buoy?



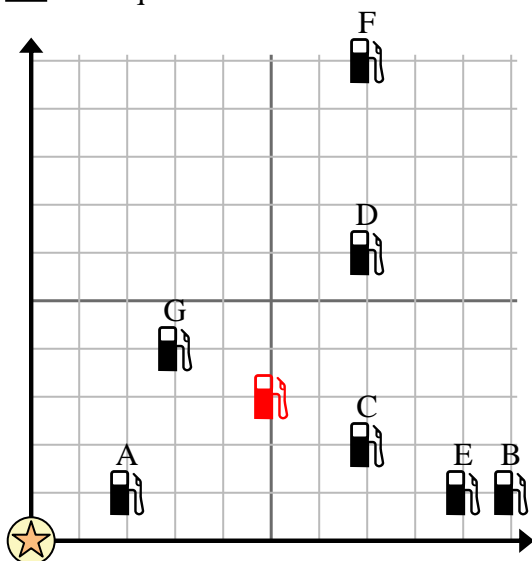


Use the grid to solve each problem.

= Gas Station

= Mall

= 1 Square Mile



- 1) Investors wanted to build a new gas station, but wanted to make sure it was at least 2 miles from a pre-existing station. Should they build a gas station 5 miles east and 3 miles north of the mall?
- 2) Which gas station is closest to the mall?
- 3) Which gas station is furthest from the mall?
- 4) Which gas station is further west? Station C or Station E?
- 5) If you were to go 7 miles east and 10 miles north from the mall which gas station would you end up at?

Answers

1. yes
2. A
3. F
4. C
5. F
6. no
7. C
8. G
9. A
10. F

- 6) A new ship wanted to fish, but the captain wanted to make sure they were at least 2 miles from another ship. If he sailed 5 miles east and 8 miles north would that spot suit him?

= Ship

= Buoy

= 1 Square Mile

- 7) Which ship is closest to the buoy?
- 8) Which ship is furthest from the buoy?
- 9) Which ship is further east? Ship D or ship A?
- 10) Which ship is 5 miles east and 7 miles north from the buoy?

