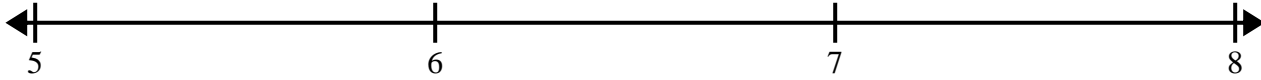





Create and label the line plot using the set of numbers provided.


- 1)  $7$      $6\frac{2}{8}$      $7\frac{1}{8}$      $7\frac{2}{8}$      $7\frac{3}{8}$      $7\frac{5}{8}$      $7\frac{2}{8}$      $5\frac{4}{8}$   
 $5\frac{5}{8}$      $5\frac{6}{8}$      $7\frac{4}{8}$      $5\frac{1}{8}$      $7\frac{3}{8}$      $7\frac{3}{8}$      $7\frac{7}{8}$      $5\frac{7}{8}$




- 2)  $9\frac{1}{4}$      $7\frac{1}{4}$      $7\frac{2}{4}$      $7\frac{2}{4}$      $9\frac{3}{4}$      $9\frac{3}{4}$      $9\frac{3}{4}$      $9\frac{1}{4}$   
 $8$      $7\frac{2}{4}$      $8\frac{1}{4}$      $7\frac{3}{4}$      $8$      $7\frac{3}{4}$      $9\frac{1}{4}$      $8\frac{3}{4}$



- 3)  $7\frac{1}{2}$      $8\frac{1}{2}$      $6\frac{1}{2}$      $6\frac{1}{2}$      $6$      $7$      $6$      $8\frac{1}{2}$   
 $7\frac{1}{2}$      $8$      $6\frac{1}{2}$      $7$      $7$      $8$      $8\frac{1}{2}$      $7\frac{1}{2}$



- 4)  $3\frac{3}{4}$      $3$      $5\frac{3}{4}$      $5$      $5\frac{1}{4}$      $3$      $4\frac{1}{4}$      $4\frac{3}{4}$   
 $5$      $4\frac{3}{4}$      $4\frac{2}{4}$      $4\frac{2}{4}$      $5\frac{2}{4}$      $5\frac{3}{4}$      $4\frac{2}{4}$      $5\frac{2}{4}$



- 5)  $3$      $4\frac{2}{8}$      $2\frac{3}{8}$      $4\frac{1}{8}$      $2\frac{2}{8}$      $2\frac{6}{8}$      $4\frac{6}{8}$      $3\frac{5}{8}$   
 $3\frac{3}{8}$      $3\frac{6}{8}$      $2\frac{4}{8}$      $2$      $4$      $4\frac{2}{8}$      $2\frac{1}{8}$      $2\frac{2}{8}$

