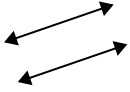




Use 'parallel', 'perp'(perpendicular) or 'inter'(intersecting) to describe the lines.

Answers

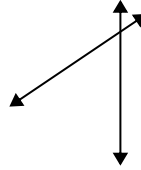
1)



2)



3)



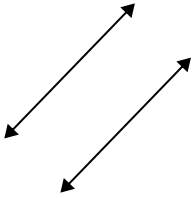
1. _____

2. _____

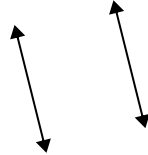
3. _____

4. _____

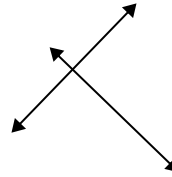
4)



5)



6)



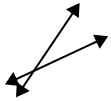
5. _____

6. _____

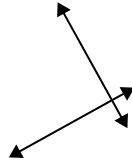
7. _____

8. _____

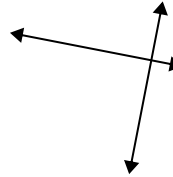
7)



8)



9)



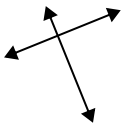
9. _____

10. _____

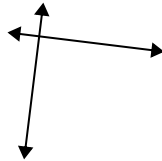
11. _____

12. _____

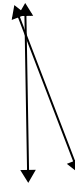
10)



11)



12)

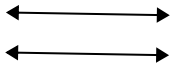


13. _____

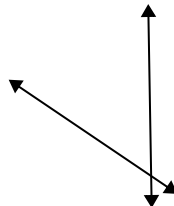
14. _____

15. _____

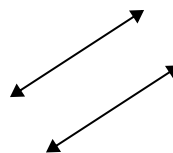
13)



14)



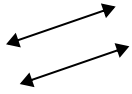
15)





Use 'parallel', 'perp'(perpendicular) or 'inter'(intersecting) to describe the lines.

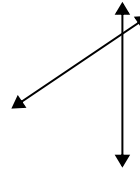
1)



2)



3)

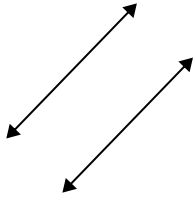


1. parallel

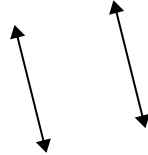
2. inter

3. inter

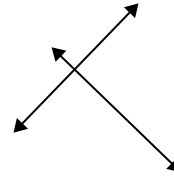
4)



5)



6)

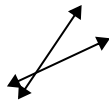


4. parallel

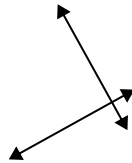
5. parallel

6. perp & inter

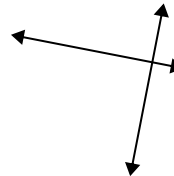
7)



8)



9)



7. inter

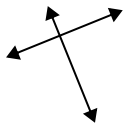
8. perp & inter

9. perp & inter

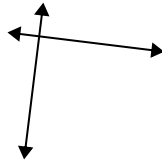
10. perp & inter

11. perp & inter

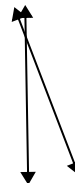
10)



11)



12)



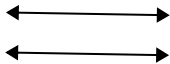
12. inter

13. parallel

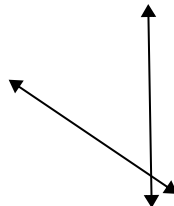
14. inter

15. parallel

13)



14)



15)

