



Match the description on the top with the visual image on the bottom.

Answers

1) \overleftrightarrow{AE} intersecting \overleftrightarrow{DB}

2) Acute $\angle BDE$

3) D as the midpoint of \overleftrightarrow{CE}

4) \overleftrightarrow{BD} intersecting \overleftrightarrow{CE}

5) $\angle DEC$ intersected by \overleftrightarrow{AC}

6) \overleftrightarrow{BE} intersecting \overleftrightarrow{CD}

7) Right $\angle ADE$

8) \overleftrightarrow{AC} intersected by \overleftrightarrow{BD}

9) \overleftrightarrow{AB} intersecting \overleftrightarrow{AD}

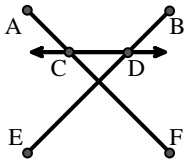
10) $\angle BAC$ creating an obtuse angle

11) \overleftrightarrow{BC} intersecting $\angle ACD$

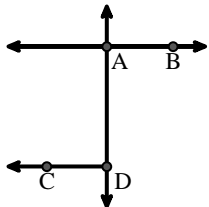
12) \overleftrightarrow{BA} intersecting \overleftrightarrow{AD}

1. _____
2. _____
3. _____
4. _____
5. _____
6. _____
7. _____
8. _____
9. _____
10. _____
11. _____
12. _____

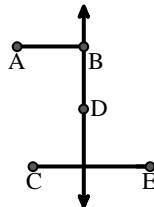
A.



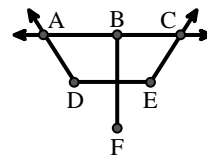
B.



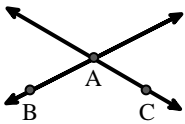
C.



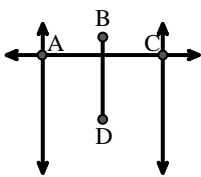
D.



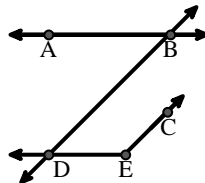
E.



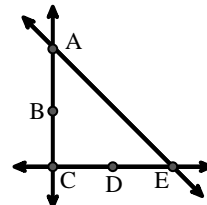
F.



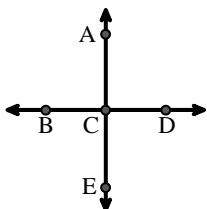
G.



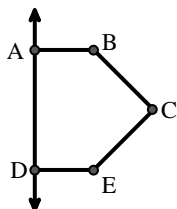
H.



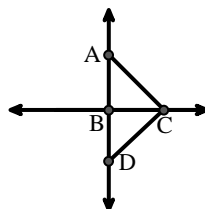
I.



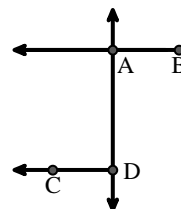
J.



K.



L.





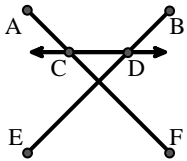
Match the description on the top with the visual image on the bottom.

Answers

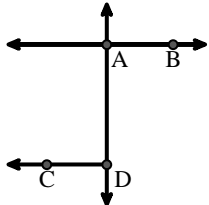
- 1) \overleftrightarrow{AE} intersecting \overleftrightarrow{DB}
- 2) Acute $\angle BDE$
- 3) D as the midpoint of \overleftrightarrow{CE}
- 4) \overleftrightarrow{BD} intersecting \overline{CE}
- 5) $\angle DEC$ intersected by \overleftrightarrow{AC}
- 6) \overline{BE} intersecting \overleftrightarrow{CD}
- 7) Right $\angle ADE$
- 8) \overleftrightarrow{AC} intersected by \overline{BD}
- 9) \overleftrightarrow{AB} intersecting \overleftrightarrow{AD}
- 10) $\angle BAC$ creating an obtuse angle
- 11) \overleftrightarrow{BC} intersecting $\angle ACD$
- 12) \overleftrightarrow{BA} intersecting \overleftrightarrow{AD}

1. **I**
2. **G**
3. **H**
4. **C**
5. **D**
6. **A**
7. **J**
8. **F**
9. **B**
10. **E**
11. **K**
12. **L**

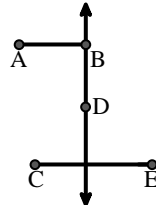
A.



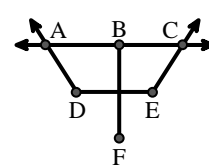
B.



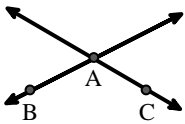
C.



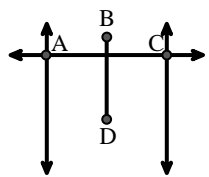
D.



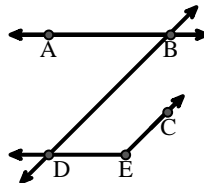
E.



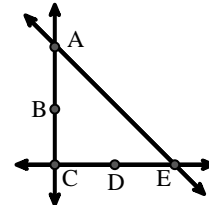
F.



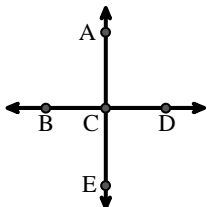
G.



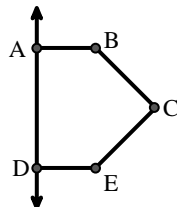
H.



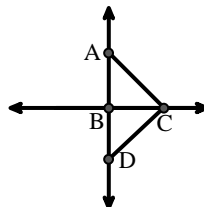
I.



J.



K.



L.

