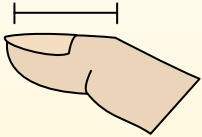
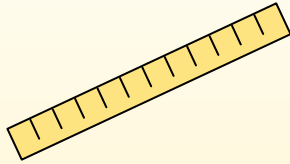


**Determine which letter best represents the length / height.****Answers****Inch (in)**

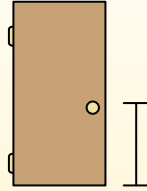
An inch is about the distance of the last joint of your finger.

**Foot (ft)**

A foot is 12 inches. The length of a ruler.

**Yard (yd)**

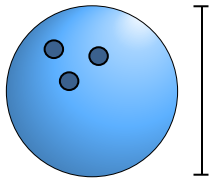
1 yard is the same as 3 feet. From the floor to a door knob is about 1 yard.

**Mile (mi)**

A mile is 5,280 feet. Most major roads are at least a mile long.

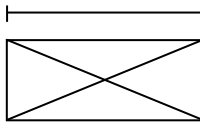


1)

**Bowling Ball Height**


- A. 10 feet
- B. 1 yard
- C. 4 inches
- D. 10 inches

2)

**Envelope**

- A. 7 inches
- B. 1 foot
- C. 1 inch
- D. 3 inches

3)

**Hammer**

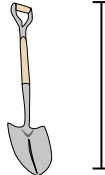
- A. 1 inch
- B. 1 yard
- C. 4 inches
- D. 16 inches

4)

**Strawberry**

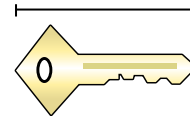
- A. 6 inches
- B. 2 inches
- C. 1 yard
- D. 10 inches

5)

**Shovel**

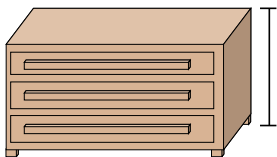
- A. 3 yards
- B. 4 feet
- C. 11 inches
- D. 2 feet

6)

**Key**

- A. 6 inches
- B. 2 inches
- C. 5 feet
- D. 2 yards

7)

**Dresser**

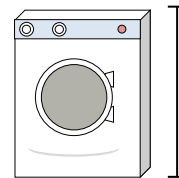
- A. 18 inches
- B. 3 feet
- C. 12 inches
- D. 3 yards

8)

**Gallon of Milk**

- A. 6 inches
- B. 3 inches
- C. 9 inches
- D. 11 feet

9)

**Washing Machine**

- A. 1 foot
- B. 3 feet
- C. 4 inches
- D. 2 yards

1. _____

2. _____

3. _____

4. _____

5. _____

6. _____

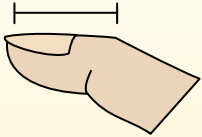
7. _____

8. _____

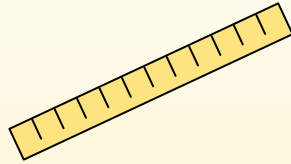
9. _____

**Determine which letter best represents the length / height.****Answers****Inch (in)**

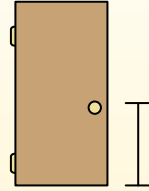
An inch is about the distance of the last joint of your finger.

**Foot (ft)**

A foot is 12 inches. The length of a ruler.

**Yard (yd)**

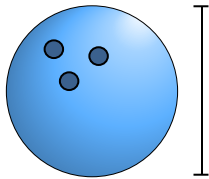
1 yard is the same as 3 feet. From the floor to a door knob is about 1 yard.

**Mile (mi)**

A mile is 5,280 feet. Most major roads are at least a mile long.

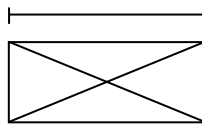


1)

**Bowling Ball Height**


- A. 10 feet
- B. 1 yard
- C. 4 inches
- D. 10 inches

2)

**Envelope**

- A. 7 inches
- B. 1 foot
- C. 1 inch
- D. 3 inches

3)

**Hammer**

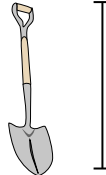
- A. 1 inch
- B. 1 yard
- C. 4 inches
- D. 16 inches

4)

**Strawberry**

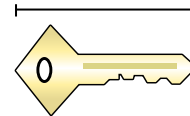
- A. 6 inches
- B. 2 inches
- C. 1 yard
- D. 10 inches

5)

**Shovel**

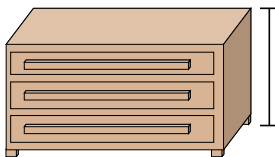
- A. 3 yards
- B. 4 feet
- C. 11 inches
- D. 2 feet

6)

**Key**


- A. 6 inches
- B. 2 inches
- C. 5 feet
- D. 2 yards

7)

**Dresser**

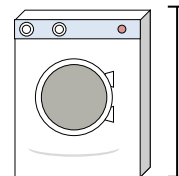
- A. 18 inches
- B. 3 feet
- C. 12 inches
- D. 3 yards

8)

**Gallon of Milk**

- A. 6 inches
- B. 3 inches
- C. 9 inches
- D. 11 feet

9)

**Washing Machine**

- A. 1 foot
- B. 3 feet
- C. 4 inches
- D. 2 yards

1. **D**2. **A**3. **D**4. **B**5. **B**6. **B**7. **B**8. **C**9. **B**