




Measure the width of each block in inches and in centimeters.



Answers

Ex. 2 1/2 6 - 7

1. \_\_\_\_\_

2. \_\_\_\_\_

3. \_\_\_\_\_

4. \_\_\_\_\_

5. \_\_\_\_\_

6. \_\_\_\_\_

7. \_\_\_\_\_

8. \_\_\_\_\_

9. \_\_\_\_\_



Measure the width of each block in inches and in centimeters.

Ex)



Answers


Ex. 2 1/2 6 - 7

1)



1. 4 1/2 11 - 12

2)



2. 3 7 - 8

3)



3. 5 12 - 13

4)



4. 2 5 - 6

5)




5. 3 1/2 8 - 9

6)



6. 5 1/2 13 - 14

7)



7. 0 1/2 1 - 2

8)



8. 1 2 - 3

9)




9. 4 10 - 11



Measure the width of each block in inches and in centimeters.

Ex)



**Answers**

Ex. 1 2-3

1)



1. \_\_\_\_\_

2. \_\_\_\_\_

2)



3. \_\_\_\_\_

4. \_\_\_\_\_


3)



5. \_\_\_\_\_

6. \_\_\_\_\_

4)



7. \_\_\_\_\_

8. \_\_\_\_\_

5)



9. \_\_\_\_\_

6)



7)



8)



9)





Measure the width of each block in inches and in centimeters.



**Answers**

Ex. 1   2 - 3

1. 1 1/2   3 - 4

2. 5   12 - 13

3. 5 1/2   13 - 14

4. 0 1/2   1 - 2

5. 3   7 - 8

6. 2   5 - 6

7. 4   10 - 11

8. 4 1/2   11 - 12

9. 3 1/2   8 - 9



Measure the width of each block in inches and in centimeters.

Ex)



**Answers**

Ex. 4 1/2 11 - 12

1)



1. \_\_\_\_\_

2. \_\_\_\_\_

2)



3. \_\_\_\_\_

4. \_\_\_\_\_


3)



5. \_\_\_\_\_

6. \_\_\_\_\_

4)



7. \_\_\_\_\_

8. \_\_\_\_\_

5)



9. \_\_\_\_\_


6)



7)



8)



9)





Measure the width of each block in inches and in centimeters.



**Answers**

Ex. 4 1/2 11 - 12

1. 5 1/2 13 - 14

2. 1 2 - 3

3. 1 1/2 3 - 4

4. 4 10 - 11

5. 2 5 - 6

6. 2 1/2 6 - 7

7. 3 7 - 8

8. 0 1/2 1 - 2

9. 5 12 - 13



Measure the width of each block in inches and in centimeters.

Ex)



**Answers**

Ex. 3 7-8

1)




1. \_\_\_\_\_

2)



2. \_\_\_\_\_

3)



3. \_\_\_\_\_

4)



4. \_\_\_\_\_

5)



5. \_\_\_\_\_

6)



6. \_\_\_\_\_

7)



7. \_\_\_\_\_

8)



8. \_\_\_\_\_


9)



9. \_\_\_\_\_



Measure the width of each block in inches and in centimeters.



**Answers**

Ex. 3    7 - 8

1. 5    12 - 13

2. 1 1/2    3 - 4

3. 0 1/2    1 - 2

4. 4 1/2    11 - 12

5. 3 1/2    8 - 9

6. 2 1/2    6 - 7

7. 5 1/2    13 - 14

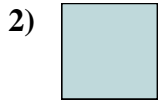
8. 2    5 - 6

9. 4    10 - 11





Measure the width of each block in inches and in centimeters.



Answers

Ex. 3 7-8

1. \_\_\_\_\_

2. \_\_\_\_\_

3. \_\_\_\_\_

4. \_\_\_\_\_

5. \_\_\_\_\_

6. \_\_\_\_\_

7. \_\_\_\_\_

8. \_\_\_\_\_

9. \_\_\_\_\_



Measure the width of each block in inches and in centimeters.



**Answers**

Ex. 3    7 - 8

1. 1 1/2    3 - 4

2. 0 1/2    1 - 2

3. 5 1/2    13 - 14

4. 1    2 - 3

5. 4 1/2    11 - 12

6. 4    10 - 11

7. 5    12 - 13

8. 2    5 - 6

9. 2 1/2    6 - 7




Measure the width of each block in inches and in centimeters.



Ex. 5 1/2 13 - 14




1. \_\_\_\_\_



2. \_\_\_\_\_




3. \_\_\_\_\_



4. \_\_\_\_\_



5. \_\_\_\_\_



6. \_\_\_\_\_



7. \_\_\_\_\_



8. \_\_\_\_\_





9. \_\_\_\_\_


**Answers**





Measure the width of each block in inches and in centimeters.


Ex) 


1) 


2) 


3) 


4) 

5) 

6) 

7) 

8) 

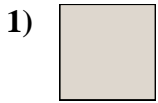
9) 

**Answers**

- Ex. 5 1/2 13 - 14
1. 3 1/2 8 - 9
2. 4 10 - 11
3. 5 12 - 13
4. 1 2 - 3
5. 3 7 - 8
6. 0 1/2 1 - 2
7. 1 1/2 3 - 4
8. 2 5 - 6
9. 4 1/2 11 - 12



Measure the width of each block in inches and in centimeters.



Answers

Ex. 4 10 - 11

1. \_\_\_\_\_

2. \_\_\_\_\_

3. \_\_\_\_\_

4. \_\_\_\_\_

5. \_\_\_\_\_

6. \_\_\_\_\_

7. \_\_\_\_\_

8. \_\_\_\_\_

9. \_\_\_\_\_



Measure the width of each block in inches and in centimeters.



**Answers**

Ex. 4   10 - 11

1. 0 1/2   1 - 2

2. 1 1/2   3 - 4

3. 5 1/2   13 - 14

4. 3   7 - 8

5. 2 1/2   6 - 7

6. 1   2 - 3


7. 2   5 - 6

8. 4 1/2   11 - 12

9. 3 1/2   8 - 9



Measure the width of each block in inches and in centimeters.



**Answers**

Ex. 3 1/2 8 - 9

1. \_\_\_\_\_

2. \_\_\_\_\_

3. \_\_\_\_\_

4. \_\_\_\_\_

5. \_\_\_\_\_

6. \_\_\_\_\_

7. \_\_\_\_\_

8. \_\_\_\_\_

9. \_\_\_\_\_



Measure the width of each block in inches and in centimeters.

Ex)



**Answers**

Ex. 3 1/2 8 - 9

1)



1. 1 2 - 3

2)



2. 1 1/2 3 - 4

3)



3. 5 1/2 13 - 14

4)



4. 5 12 - 13

5)



5. 2 5 - 6

6)



6. 3 7 - 8

7)




7. 4 1/2 11 - 12

8)



8. 2 1/2 6 - 7

9)



9. 0 1/2 1 - 2





Measure the width of each block in inches and in centimeters.



Answers

Ex. 4 10 - 11

1. \_\_\_\_\_

2. \_\_\_\_\_

3. \_\_\_\_\_

4. \_\_\_\_\_

5. \_\_\_\_\_

6. \_\_\_\_\_

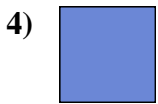
7. \_\_\_\_\_

8. \_\_\_\_\_

9. \_\_\_\_\_



Measure the width of each block in inches and in centimeters.






**Answers**

- Ex. 4    10 - 11
1. 2    5 - 6
2. 3    7 - 8
3. 3 1/2    8 - 9
4. 0 1/2    1 - 2
5. 1 1/2    3 - 4
6. 2 1/2    6 - 7
7. 5    12 - 13
8. 4 1/2    11 - 12
9. 5 1/2    13 - 14



Measure the width of each block in inches and in centimeters.



Answers

Ex. 1 2-3

1. \_\_\_\_\_

2. \_\_\_\_\_

3. \_\_\_\_\_

4. \_\_\_\_\_

5. \_\_\_\_\_

6. \_\_\_\_\_




7. \_\_\_\_\_

8. \_\_\_\_\_

9. \_\_\_\_\_



Measure the width of each block in inches and in centimeters.



Answers

Ex. 1    2 - 3

1. 3 1/2    8 - 9

2. 5 1/2    13 - 14

3. 5    12 - 13

4. 4 1/2    11 - 12

5. 1 1/2    3 - 4

6. 4    10 - 11

7. 2    5 - 6

8. 3    7 - 8

9. 0 1/2    1 - 2