




Measure the width and height of each block in inches and in centimeters.


Ex)




1)



2)



3)



4)



## Answers

Ex. 4 1 10.2 2.5

1. \_\_\_\_\_

2. \_\_\_\_\_


3. \_\_\_\_\_

4. \_\_\_\_\_



Measure the width and height of each block in inches and in centimeters.

Ex) 

1) 

2) 

3) 

4) 

**Answers**

- Ex. 4 1 10.2 2.5
1. 1 1 2.5 2.5
2. 4 1/2 1 1/2 11.4 3.8
3. 1 1/2 1 3.8 2.5
4. 2 1/2 0 1/2 6.4 1.3