




Measure the width and height of each block in inches and in centimeters.

Answers

Ex)



Ex. 2 1/2 1 1/2 6.4 3.8

1. _____

2. _____

3. _____

4. _____


1)



2)



3)



4)





Measure the width and height of each block in inches and in centimeters.

Ex)




Ex. 2 1/2 1 1/2 6.4 3.8

1)



1. 2 0 1/2 5.1 1.3

2)




2. 4 1 1/2 10.2 3.8

3)



3. 0 1/2 1 1.3 2.5

4)



4. 3 1/2 1 8.9 2.5

Answers