



Determine which letter best represents the length / height.

Answers

Millimeter (mm)

Centimeter (cm)

Meter (m)


Kilometer (km)

A millimeter is about the thickness of a credit card.


10 mm = 1 cm.
The metal portion of a pencil is about 1 cm. A ruler is about 30 centimeters.

100 cm = 1 m
From the floor to a door knob is about 1 meter.

1,000 m = 1 km
Most major roads are at least a kilometer long.



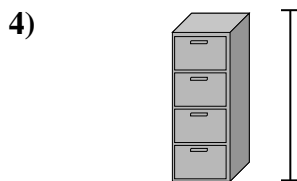
- Notebook Paper
A. 15 centimeters
B. 25 centimeters
C. 60 centimeters
D. 1 meter




- Mountain
A. 9 meters
B. 3 kilometers
C. 60 centimeters
D. 700 millimeters



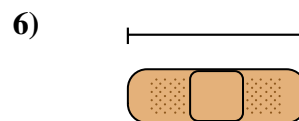
- Pen
A. 5 meters
B. 30 millimeters
C. 12 centimeters
D. 30 centimeters




- File Cabinet
A. 30 millimeters
B. 60 centimeters
C. 1.5 millimeters
D. 30 centimeters



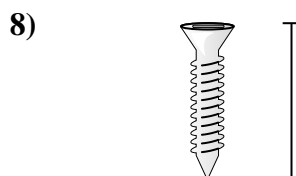
- Frog
A. 4 millimeters
B. 60 centimeters
C. 8 centimeters
D. 20 centimeters



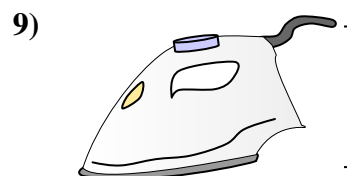
- Bandage
A. 9 centimeters
B. 3 kilometers
C. 60 centimeters
D. 1 meter



- Bug
A. 30 centimeters
B. 7 millimeters
C. 5 centimeters
D. 10 centimeters



- Screw
A. 3 centimeters
B. 25 centimeters
C. 20 centimeters
D. 1 meter


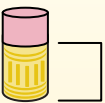
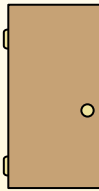



- Clothes Iron
A. 40 centimeters
B. 15 centimeters
C. 60 centimeters
D. 240 centimeters


- 1. _____
- 2. _____
- 3. _____
- 4. _____
- 5. _____
- 6. _____
- 7. _____
- 8. _____
- 9. _____




Determine which letter best represents the length / height.

Millimeter (mm)	Centimeter (cm)	Meter (m)	Kilometer (km)
A millimeter is about the thickness of a credit card.	10 mm = 1 cm. The metal portion of a pencil is about 1 cm. A ruler is about 30 centimeters.	100 cm = 1 m From the floor to a door knob is about 1 meter.	1,000 m = 1 km Most major roads are at least a kilometer long.
			

Answers



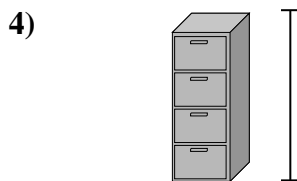
- Notebook Paper
 A. 15 centimeters
 B. 25 centimeters
 C. 60 centimeters
 D. 1 meter




- Mountain
 A. 9 meters
 B. 3 kilometers
 C. 60 centimeters
 D. 700 millimeters



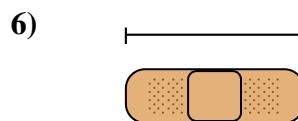
- Pen
 A. 5 meters
 B. 30 millimeters
 C. 12 centimeters
 D. 30 centimeters



- File Cabinet
 A. 30 millimeters
 B. 60 centimeters
 C. 1.5 millimeters
 D. 30 centimeters



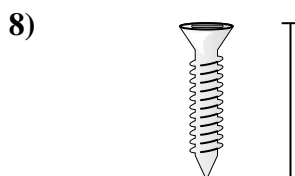
- Frog
 A. 4 millimeters
 B. 60 centimeters
 C. 8 centimeters
 D. 20 centimeters



- Bandage
 A. 9 centimeters
 B. 3 kilometers
 C. 60 centimeters
 D. 1 meter



- Bug
 A. 30 centimeters
 B. 7 millimeters
 C. 5 centimeters
 D. 10 centimeters



- Screw
 A. 3 centimeters
 B. 25 centimeters
 C. 20 centimeters
 D. 1 meter



- Clothes Iron
 A. 40 centimeters
 B. 15 centimeters
 C. 60 centimeters
 D. 240 centimeters

1. **B**
 2. **B**
 3. **C**
 4. **C**
 5. **C**
 6. **A**
 7. **B**
 8. **A**
 9. **B**