



Determine which letter best represents the length / height.

Answers

Millimeter (mm)

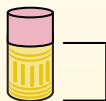
A millimeter is about the thickness of a credit card.



Centimeter (cm)

10 mm = 1 cm.

The metal portion of a pencil is about 1 cm. A ruler is about 30 centimeters.



Meter (m)

100 cm = 1 m

From the floor to a door knob is about 1 meter.



Kilometer (km)

1,000 m = 1 km

Most major roads are at least a kilometer long.



1. _____
2. _____
3. _____
4. _____
5. _____
6. _____
7. _____
8. _____
9. _____


1)



Popcorn

- A. 3 centimeters
- B. 90 centimeters
- C. 2 kilometers
- D. 3 millimeters

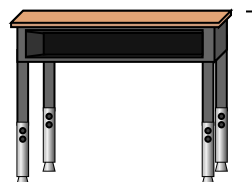
2)



Lollipop

- A. 2 kilometers
- B. 30 millimeters
- C. 10 centimeters
- D. 30 centimeters


3)



Desk

- A. 2 meters
- B. 70 centimeters
- C. 30 centimeters
- D. 15 centimeters

4)



Ferris Wheel

- A. 30 centimeters
- B. 50 kilometers
- C. 23 meters
- D. 5 meters


5)



Toothbrush

- A. 10 centimeters
- B. 3 meters
- C. 17 centimeters
- D. 1 meter

6)



Can of Soda

- A. 1 meter
- B. 10 centimeters
- C. 30 centimeters
- D. 3 centimeters

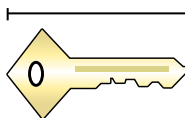
7)



Frog

- A. 60 centimeters
- B. 4 millimeters
- C. 8 centimeters
- D. 20 centimeters

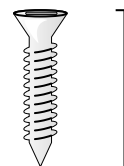
8)



Key

- A. 2 meters
- B. 5 centimeters
- C. 15 centimeters
- D. 150 centimeters

9)



Screw

- A. 1 meter
- B. 25 centimeters
- C. 20 centimeters
- D. 3 centimeters



Determine which letter best represents the length / height.

Millimeter (mm)

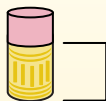
A millimeter is about the thickness of a credit card.



Centimeter (cm)

10 mm = 1 cm.

The metal portion of a pencil is about 1 cm. A ruler is about 30 centimeters.



Meter (m)

100 cm = 1 m

From the floor to a door knob is about 1 meter.



Kilometer (km)

1,000 m = 1 km

Most major roads are at least a kilometer long.



Answers

1. **A**

2. **C**

3. **B**

4. **C**

5. **C**

6. **B**

7. **C**

8. **B**

9. **D**


1)



Popcorn

- A. 3 centimeters
- B. 90 centimeters
- C. 2 kilometers
- D. 3 millimeters

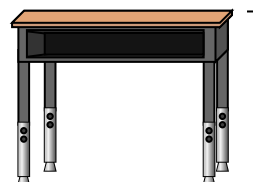
2)



Lollipop

- A. 2 kilometers
- B. 30 millimeters
- C. 10 centimeters
- D. 30 centimeters


3)



Desk

- A. 2 meters
- B. 70 centimeters
- C. 30 centimeters
- D. 15 centimeters

4)



Ferris Wheel

- A. 30 centimeters
- B. 50 kilometers
- C. 23 meters
- D. 5 meters


5)



Toothbrush

- A. 10 centimeters
- B. 3 meters
- C. 17 centimeters
- D. 1 meter

6)



Can of Soda

- A. 1 meter
- B. 10 centimeters
- C. 30 centimeters
- D. 3 centimeters

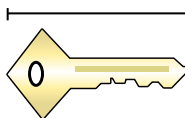
7)



Frog

- A. 60 centimeters
- B. 4 millimeters
- C. 8 centimeters
- D. 20 centimeters

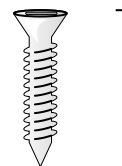
8)



Key

- A. 2 meters
- B. 5 centimeters
- C. 15 centimeters
- D. 150 centimeters

9)



Screw

- A. 1 meter
- B. 25 centimeters
- C. 20 centimeters
- D. 3 centimeters



Determine which letter best represents the length / height.

Answers

Millimeter (mm)

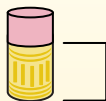
A millimeter is about the thickness of a credit card.



Centimeter (cm)

10 mm = 1 cm.

The metal portion of a pencil is about 1 cm. A ruler is about 30 centimeters.



Meter (m)

100 cm = 1 m

From the floor to a door knob is about 1 meter.



Kilometer (km)


1,000 m = 1 km

Most major roads are at least a kilometer long.



1. _____
2. _____
3. _____
4. _____
5. _____
6. _____
7. _____
8. _____
9. _____

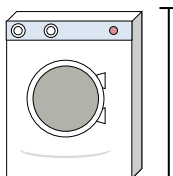
1)



Can of Beans

- A. 2 meters
- B. 2 kilometers
- C. 10 centimeters
- D. 120 centimeters

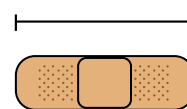
2)



Washing Machine

- A. 30 centimeters
- B. 10 centimeters
- C. 2 meters
- D. 1 meter


3)



Bandage

- A. 60 centimeters
- B. 3 kilometers
- C. 9 centimeters
- D. 1 meter


4)



Mountain

- A. 700 millimeters
- B. 9 meters
- C. 3 kilometers
- D. 60 centimeters


5)



Slice of Bread

- A. 10 centimeters
- B. 120 centimeters
- C. 2 meters
- D. 25 centimeters


6)



Elephant

- A. 150 millimeters
- B. 4 meters
- C. 2 kilometers
- D. 45 centimeters


7)



Dog

- A. 4 meters
- B. 60 centimeters
- C. 2 meters
- D. 10 centimeters

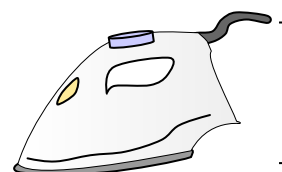
8)



Notebook Paper

- A. 25 centimeters
- B. 1 meter
- C. 15 centimeters
- D. 60 centimeters

9)


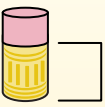
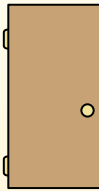



Clothes Iron

- A. 240 centimeters
- B. 60 centimeters
- C. 40 centimeters
- D. 15 centimeters



Determine which letter best represents the length / height.

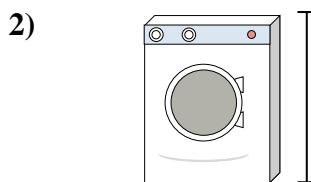
Millimeter (mm)	Centimeter (cm)	Meter (m)	Kilometer (km)
A millimeter is about the thickness of a credit card.	10 mm = 1 cm. The metal portion of a pencil is about 1 cm. A ruler is about 30 centimeters.	100 cm = 1 m From the floor to a door knob is about 1 meter.	1,000 m = 1 km Most major roads are at least a kilometer long.
			

Answers

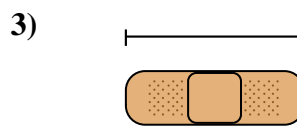
1. **C**
2. **D**
3. **C**
4. **C**
5. **A**
6. **B**
7. **B**
8. **A**
9. **D**




- Can of Beans
- A. 2 meters
 - B. 2 kilometers
 - C. 10 centimeters
 - D. 120 centimeters




- Washing Machine
- A. 30 centimeters
 - B. 10 centimeters
 - C. 2 meters
 - D. 1 meter




- Bandage
- A. 60 centimeters
 - B. 3 kilometers
 - C. 9 centimeters
 - D. 1 meter




- Mountain
- A. 700 millimeters
 - B. 9 meters
 - C. 3 kilometers
 - D. 60 centimeters




- Slice of Bread
- A. 10 centimeters
 - B. 120 centimeters
 - C. 2 meters
 - D. 25 centimeters



- Elephant
- A. 150 millimeters
 - B. 4 meters
 - C. 2 kilometers
 - D. 45 centimeters



- Dog
- A. 4 meters
 - B. 60 centimeters
 - C. 2 meters
 - D. 10 centimeters



- Notebook Paper
- A. 25 centimeters
 - B. 1 meter
 - C. 15 centimeters
 - D. 60 centimeters



- Clothes Iron
- A. 240 centimeters
 - B. 60 centimeters
 - C. 40 centimeters
 - D. 15 centimeters



Determine which letter best represents the length / height.

Answers

Millimeter (mm)

Centimeter (cm)

Meter (m)

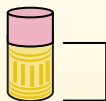
Kilometer (km)

A millimeter is about the thickness of a credit card.

10 mm = 1 cm.
The metal portion of a pencil is about 1 cm. A ruler is about 30 centimeters.

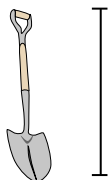
100 cm = 1 m
From the floor to a door knob is about 1 meter.

1,000 m = 1 km
Most major roads are at least a kilometer long.



1. _____
2. _____
3. _____
4. _____
5. _____
6. _____
7. _____
8. _____
9. _____

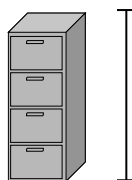
1)



Shovel

- A. 1 meter
- B. 60 centimeters
- C. 3 meters
- D. 30 centimeters


2)



File Cabinet

- A. 30 centimeters
- B. 60 centimeters
- C. 1.5 millimeters
- D. 30 millimeters


3)



Mountain

- A. 700 millimeters
- B. 3 kilometers
- C. 9 meters
- D. 60 centimeters

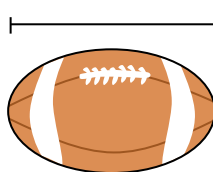
4)



Notebook Paper

- A. 1 meter
- B. 25 centimeters
- C. 15 centimeters
- D. 60 centimeters

5)



Football

- A. 25 centimeters
- B. 3 centimeters
- C. 60 centimeters
- D. 1 meter

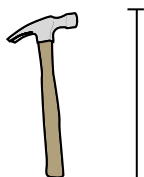
6)



Pen

- A. 12 centimeters
- B. 30 centimeters
- C. 30 millimeters
- D. 5 meters

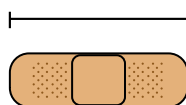
7)



Hammer

- A. 40 centimeters
- B. 1 meter
- C. 10 centimeters
- D. 3 centimeters

8)



Bandage

- A. 9 centimeters
- B. 1 meter
- C. 60 centimeters
- D. 3 kilometers

9)



Popcorn

- A. 3 centimeters
- B. 2 kilometers
- C. 3 millimeters
- D. 90 centimeters



Determine which letter best represents the length / height.

Answers

Millimeter (mm)

Centimeter (cm)

Meter (m)

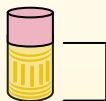
Kilometer (km)

A millimeter is about the thickness of a credit card.

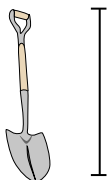
10 mm = 1 cm.
The metal portion of a pencil is about 1 cm. A ruler is about 30 centimeters.

100 cm = 1 m
From the floor to a door knob is about 1 meter.

1,000 m = 1 km
Most major roads are at least a kilometer long.



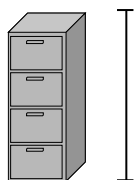
1)



Shovel

- A. 1 meter
- B. 60 centimeters
- C. 3 meters
- D. 30 centimeters


2)



File Cabinet

- A. 30 centimeters
- B. 60 centimeters
- C. 1.5 millimeters
- D. 30 millimeters


3)



Mountain

- A. 700 millimeters
- B. 3 kilometers
- C. 9 meters
- D. 60 centimeters

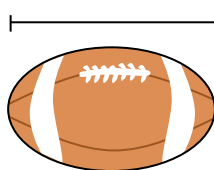
4)



Notebook Paper

- A. 1 meter
- B. 25 centimeters
- C. 15 centimeters
- D. 60 centimeters

5)



Football

- A. 25 centimeters
- B. 3 centimeters
- C. 60 centimeters
- D. 1 meter

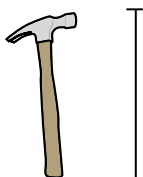
6)



Pen

- A. 12 centimeters
- B. 30 centimeters
- C. 30 millimeters
- D. 5 meters

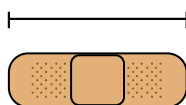
7)



Hammer

- A. 40 centimeters
- B. 1 meter
- C. 10 centimeters
- D. 3 centimeters

8)



Bandage

- A. 9 centimeters
- B. 1 meter
- C. 60 centimeters
- D. 3 kilometers

9)



Popcorn

- A. 3 centimeters
- B. 2 kilometers
- C. 3 millimeters
- D. 90 centimeters

- 1. **A**
- 2. **C**
- 3. **B**
- 4. **B**
- 5. **A**
- 6. **A**
- 7. **A**
- 8. **A**
- 9. **A**



Determine which letter best represents the length / height.

Answers

Millimeter (mm)

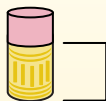
A millimeter is about the thickness of a credit card.



Centimeter (cm)

10 mm = 1 cm.

The metal portion of a pencil is about 1 cm. A ruler is about 30 centimeters.



Meter (m)

100 cm = 1 m

From the floor to a door knob is about 1 meter.



Kilometer (km)


1,000 m = 1 km

Most major roads are at least a kilometer long.



1. _____
2. _____
3. _____
4. _____
5. _____
6. _____
7. _____
8. _____
9. _____


1)



Notebook Paper

- A. 60 centimeters
- B. 15 centimeters
- C. 1 meter
- D. 25 centimeters

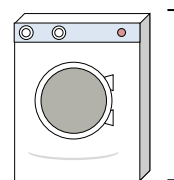
2)



Gallon of Milk

- A. 3 meters
- B. 20 centimeters
- C. 10 millimeters
- D. 8 centimeters

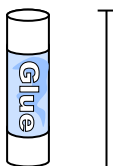
3)



Washing Machine

- A. 10 centimeters
- B. 30 centimeters
- C. 1 meter
- D. 2 meters


4)



Glue Stick

- A. 30 centimeters
- B. 10 centimeters
- C. 6 kilometers
- D. 25 centimeters

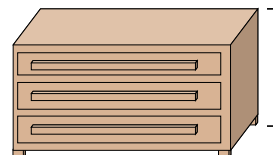
5)



Elephant

- A. 45 centimeters
- B. 4 meters
- C. 150 millimeters
- D. 2 kilometers

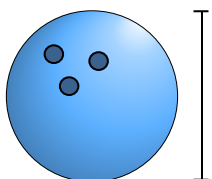
6)



Dresser

- A. 45 centimeters
- B. 30 centimeters
- C. 90 centimeters
- D. 3 meters

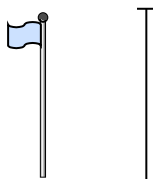
7)



Bowling Ball Height

- A. 10 centimeters
- B. 1 meter
- C. 25 centimeters
- D. 305 centimeters

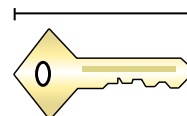
8)



Flag Pole

- A. 300 centimeters
- B. 9 meters
- C. 2 meters
- D. 2 kilometers

9)



Key

- A. 2 meters
- B. 5 centimeters
- C. 15 centimeters
- D. 150 centimeters



Determine which letter best represents the length / height.

Millimeter (mm)

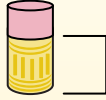
A millimeter is about the thickness of a credit card.



Centimeter (cm)

10 mm = 1 cm.

The metal portion of a pencil is about 1 cm. A ruler is about 30 centimeters.



Meter (m)

100 cm = 1 m

From the floor to a door knob is about 1 meter.



Kilometer (km)

1,000 m = 1 km

Most major roads are at least a kilometer long.



Answers

1. **D**

2. **B**

3. **C**

4. **B**

5. **B**

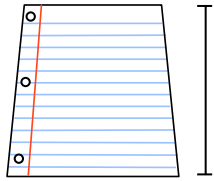
6. **C**

7. **C**

8. **B**

9. **B**


1)



Notebook Paper

- A. 60 centimeters
- B. 15 centimeters
- C. 1 meter
- D. 25 centimeters

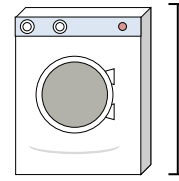
2)



Gallon of Milk

- A. 3 meters
- B. 20 centimeters
- C. 10 millimeters
- D. 8 centimeters

3)



Washing Machine

- A. 10 centimeters
- B. 30 centimeters
- C. 1 meter
- D. 2 meters


4)



Glue Stick

- A. 30 centimeters
- B. 10 centimeters
- C. 6 kilometers
- D. 25 centimeters

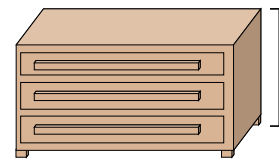
5)



Elephant

- A. 45 centimeters
- B. 4 meters
- C. 150 millimeters
- D. 2 kilometers

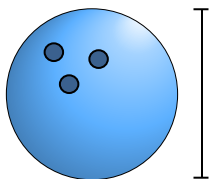
6)



Dresser

- A. 45 centimeters
- B. 30 centimeters
- C. 90 centimeters
- D. 3 meters

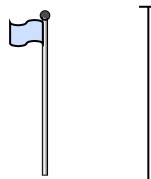
7)



Bowling Ball Height

- A. 10 centimeters
- B. 1 meter
- C. 25 centimeters
- D. 305 centimeters

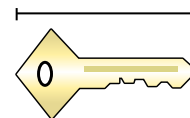
8)



Flag Pole

- A. 300 centimeters
- B. 9 meters
- C. 2 meters
- D. 2 kilometers

9)



Key

- A. 2 meters
- B. 5 centimeters
- C. 15 centimeters
- D. 150 centimeters



Determine which letter best represents the length / height.

Answers

Millimeter (mm)

Centimeter (cm)

Meter (m)


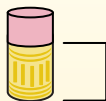
Kilometer (km)

A millimeter is about the thickness of a credit card.


10 mm = 1 cm.
The metal portion of a pencil is about 1 cm. A ruler is about 30 centimeters.

100 cm = 1 m
From the floor to a door knob is about 1 meter.

1,000 m = 1 km
Most major roads are at least a kilometer long.



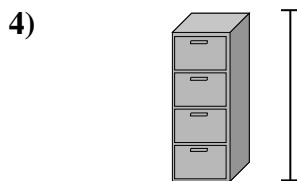
- Notebook Paper
A. 15 centimeters
B. 25 centimeters
C. 60 centimeters
D. 1 meter




- Mountain
A. 9 meters
B. 3 kilometers
C. 60 centimeters
D. 700 millimeters



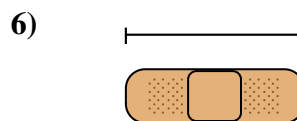
- Pen
A. 5 meters
B. 30 millimeters
C. 12 centimeters
D. 30 centimeters



- File Cabinet
A. 30 millimeters
B. 60 centimeters
C. 1.5 millimeters
D. 30 centimeters



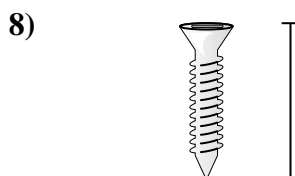
- Frog
A. 4 millimeters
B. 60 centimeters
C. 8 centimeters
D. 20 centimeters



- Bandage
A. 9 centimeters
B. 3 kilometers
C. 60 centimeters
D. 1 meter



- Bug
A. 30 centimeters
B. 7 millimeters
C. 5 centimeters
D. 10 centimeters



- Screw
A. 3 centimeters
B. 25 centimeters
C. 20 centimeters
D. 1 meter



- Clothes Iron
A. 40 centimeters
B. 15 centimeters
C. 60 centimeters
D. 240 centimeters

- 1. _____
- 2. _____
- 3. _____
- 4. _____
- 5. _____
- 6. _____
- 7. _____
- 8. _____
- 9. _____



Determine which letter best represents the length / height.

Millimeter (mm)

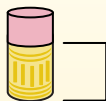
A millimeter is about the thickness of a credit card.



Centimeter (cm)

10 mm = 1 cm.

The metal portion of a pencil is about 1 cm. A ruler is about 30 centimeters.



Meter (m)

100 cm = 1 m

From the floor to a door knob is about 1 meter.



Kilometer (km)

1,000 m = 1 km

Most major roads are at least a kilometer long.



Answers

1. **B**

2. **B**

3. **C**

4. **C**


5. **C**

6. **A**

7. **B**


8. **A**

9. **B**



Notebook Paper

- A. 15 centimeters
- B. 25 centimeters
- C. 60 centimeters
- D. 1 meter



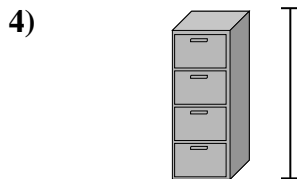
Mountain

- A. 9 meters
- B. 3 kilometers
- C. 60 centimeters
- D. 700 millimeters




Pen

- A. 5 meters
- B. 30 millimeters
- C. 12 centimeters
- D. 30 centimeters



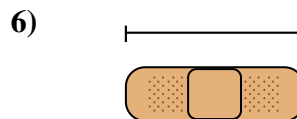
File Cabinet

- A. 30 millimeters
- B. 60 centimeters
- C. 1.5 millimeters
- D. 30 centimeters




Frog

- A. 4 millimeters
- B. 60 centimeters
- C. 8 centimeters
- D. 20 centimeters



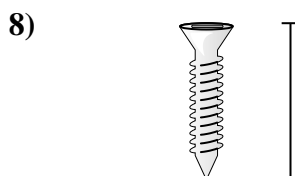
Bandage

- A. 9 centimeters
- B. 3 kilometers
- C. 60 centimeters
- D. 1 meter



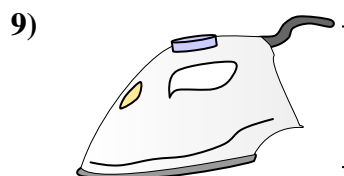
Bug

- A. 30 centimeters
- B. 7 millimeters
- C. 5 centimeters
- D. 10 centimeters



Screw

- A. 3 centimeters
- B. 25 centimeters
- C. 20 centimeters
- D. 1 meter



Clothes Iron

- A. 40 centimeters
- B. 15 centimeters
- C. 60 centimeters
- D. 240 centimeters



Determine which letter best represents the length / height.

Answers

Millimeter (mm)

Centimeter (cm)

Meter (m)

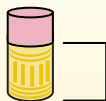
Kilometer (km)

A millimeter is about the thickness of a credit card.


10 mm = 1 cm.
The metal portion of a pencil is about 1 cm. A ruler is about 30 centimeters.

100 cm = 1 m
From the floor to a door knob is about 1 meter.

1,000 m = 1 km
Most major roads are at least a kilometer long.




1)



Cooking Pot

- A. 10 centimeters
- B. 3 centimeters
- C. 60 centimeters
- D. 25 centimeters

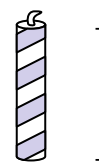
2)



Hammer

- A. 3 centimeters
- B. 40 centimeters
- C. 10 centimeters
- D. 1 meter

3)



Candle

- A. 20 centimeters
- B. 30 centimeters
- C. 5 centimeters
- D. 2 kilometers

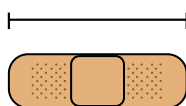
4)



Glue Stick

- A. 30 centimeters
- B. 6 kilometers
- C. 25 centimeters
- D. 10 centimeters

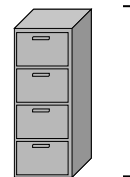
5)



Bandage

- A. 60 centimeters
- B. 3 kilometers
- C. 9 centimeters
- D. 1 meter

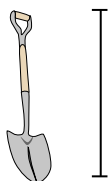
6)



File Cabinet

- A. 1.5 millimeters
- B. 30 millimeters
- C. 60 centimeters
- D. 30 centimeters

7)



Shovel

- A. 60 centimeters
- B. 1 meter
- C. 30 centimeters
- D. 3 meters

8)



Tree Height

- A. 2 kilometers
- B. 100 centimeters
- C. 5 meters
- D. 30 centimeters

9)

Flash Drive

- A. 60 centimeters
- B. 30 centimeters
- C. 15 centimeters
- D. 6 centimeters

- 1. _____
- 2. _____
- 3. _____
- 4. _____
- 5. _____
- 6. _____
- 7. _____
- 8. _____
- 9. _____



Determine which letter best represents the length / height.

Answers

Millimeter (mm)

Centimeter (cm)

Meter (m)

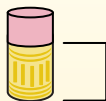
Kilometer (km)

A millimeter is about the thickness of a credit card.


10 mm = 1 cm.
The metal portion of a pencil is about 1 cm. A ruler is about 30 centimeters.

100 cm = 1 m
From the floor to a door knob is about 1 meter.

1,000 m = 1 km
Most major roads are at least a kilometer long.




1)



Cooking Pot

- A. 10 centimeters
- B. 3 centimeters
- C. 60 centimeters
- D. 25 centimeters

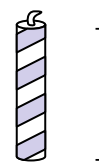
2)



Hammer

- A. 3 centimeters
- B. 40 centimeters
- C. 10 centimeters
- D. 1 meter

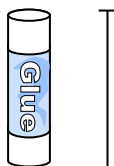
3)



Candle

- A. 20 centimeters
- B. 30 centimeters
- C. 5 centimeters
- D. 2 kilometers

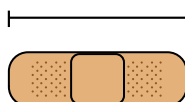
4)



Glue Stick

- A. 30 centimeters
- B. 6 kilometers
- C. 25 centimeters
- D. 10 centimeters

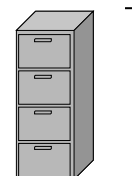
5)



Bandage

- A. 60 centimeters
- B. 3 kilometers
- C. 9 centimeters
- D. 1 meter

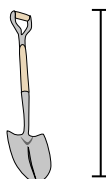
6)



File Cabinet

- A. 1.5 millimeters
- B. 30 millimeters
- C. 60 centimeters
- D. 30 centimeters

7)



Shovel

- A. 60 centimeters
- B. 1 meter
- C. 30 centimeters
- D. 3 meters

8)



Tree Height

- A. 2 kilometers
- B. 100 centimeters
- C. 5 meters
- D. 30 centimeters

9)

Flash Drive

- A. 60 centimeters
- B. 30 centimeters
- C. 15 centimeters
- D. 6 centimeters

1. **D**

2. **B**

3. **C**

4. **D**

5. **C**

6. **A**

7. **B**

8. **C**

9. **D**



Determine which letter best represents the length / height.

Answers

Millimeter (mm)

Centimeter (cm)

Meter (m)

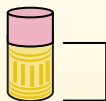
Kilometer (km)

A millimeter is about the thickness of a credit card.

10 mm = 1 cm.
The metal portion of a pencil is about 1 cm. A ruler is about 30 centimeters.

100 cm = 1 m
From the floor to a door knob is about 1 meter.

1,000 m = 1 km
Most major roads are at least a kilometer long.

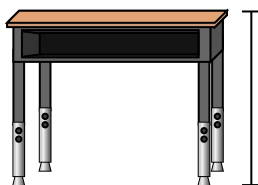


1)



- Pen
- A. 12 centimeters
 - B. 30 millimeters
 - C. 30 centimeters
 - D. 5 meters

2)



- Desk
- A. 15 centimeters
 - B. 2 meters
 - C. 70 centimeters
 - D. 30 centimeters

3)



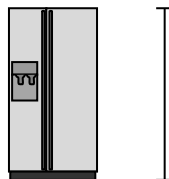
- Frog
- A. 20 centimeters
 - B. 8 centimeters
 - C. 4 millimeters
 - D. 60 centimeters

4)




- Bicycle
- A. 10 centimeters
 - B. 1 meter
 - C. 3 meters
 - D. 25 centimeters

5)



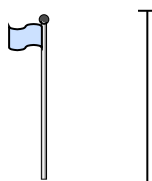
- Refrigerator
- A. 180 centimeters
 - B. 30 centimeters
 - C. 5 kilometers
 - D. 4 meters

6)




- Clothes Dryer
- A. 60 centimeters
 - B. 1 meter
 - C. 25 centimeters
 - D. 15 centimeters

7)



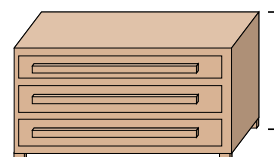
- Flag Pole
- A. 2 kilometers
 - B. 9 meters
 - C. 300 centimeters
 - D. 2 meters

8)



- Tennis Ball
- A. 3 millimeters
 - B. 25 centimeters
 - C. 8 centimeters
 - D. 60 centimeters

9)



- Dresser
- A. 45 centimeters
 - B. 90 centimeters
 - C. 3 meters
 - D. 30 centimeters

1. _____
2. _____
3. _____
4. _____
5. _____
6. _____
7. _____
8. _____
9. _____



Determine which letter best represents the length / height.

Millimeter (mm)

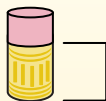
A millimeter is about the thickness of a credit card.



Centimeter (cm)

10 mm = 1 cm.

The metal portion of a pencil is about 1 cm. A ruler is about 30 centimeters.



Meter (m)

100 cm = 1 m

From the floor to a door knob is about 1 meter.



Kilometer (km)

1,000 m = 1 km

Most major roads are at least a kilometer long.



Answers

1. **A**

2. **C**

3. **B**

4. **B**

5. **A**

6. **B**

7. **B**

8. **C**

9. **B**

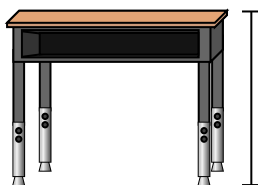
1)



Pen

- A. 12 centimeters
- B. 30 millimeters
- C. 30 centimeters
- D. 5 meters

2)



Desk

- A. 15 centimeters
- B. 2 meters
- C. 70 centimeters
- D. 30 centimeters

3)



Frog

- A. 20 centimeters
- B. 8 centimeters
- C. 4 millimeters
- D. 60 centimeters

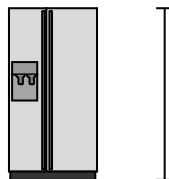
4)



Bicycle

- A. 10 centimeters
- B. 1 meter
- C. 3 meters
- D. 25 centimeters


5)



Refrigerator

- A. 180 centimeters
- B. 30 centimeters
- C. 5 kilometers
- D. 4 meters

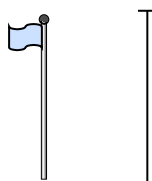
6)



Clothes Dryer

- A. 60 centimeters
- B. 1 meter
- C. 25 centimeters
- D. 15 centimeters


7)



Flag Pole

- A. 2 kilometers
- B. 9 meters
- C. 300 centimeters
- D. 2 meters

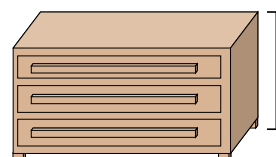
8)



Tennis Ball

- A. 3 millimeters
- B. 25 centimeters
- C. 8 centimeters
- D. 60 centimeters

9)



Dresser

- A. 45 centimeters
- B. 90 centimeters
- C. 3 meters
- D. 30 centimeters



Determine which letter best represents the length / height.

Answers

Millimeter (mm)

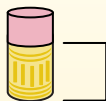
A millimeter is about the thickness of a credit card.



Centimeter (cm)

10 mm = 1 cm.

The metal portion of a pencil is about 1 cm. A ruler is about 30 centimeters.



Meter (m)

100 cm = 1 m

From the floor to a door knob is about 1 meter.



Kilometer (km)

1,000 m = 1 km

Most major roads are at least a kilometer long.



1. _____
2. _____
3. _____
4. _____
5. _____
6. _____
7. _____
8. _____
9. _____

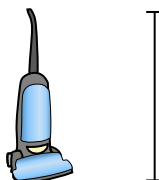
1)



Bicycle

- A. 10 centimeters
- B. 25 centimeters
- C. 1 meter
- D. 3 meters

2)



Vacuum

- A. 30 centimeters
- B. 120 centimeters
- C. 3 meters
- D. 35 centimeters


3)



Toothbrush

- A. 3 meters
- B. 10 centimeters
- C. 17 centimeters
- D. 1 meter


4)



Cereal Box Height

- A. 10 centimeters
- B. 60 centimeters
- C. 3 centimeters
- D. 30 centimeters


5)



Elephant

- A. 2 kilometers
- B. 150 millimeters
- C. 45 centimeters
- D. 4 meters

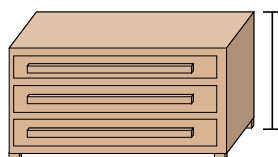
6)



Clothes Dryer

- A. 15 centimeters
- B. 60 centimeters
- C. 25 centimeters
- D. 1 meter

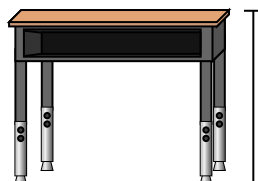
7)



Dresser

- A. 30 centimeters
- B. 3 meters
- C. 90 centimeters
- D. 45 centimeters

8)



Desk

- A. 15 centimeters
- B. 30 centimeters
- C. 70 centimeters
- D. 2 meters

9)



Bug

- A. 30 centimeters
- B. 10 centimeters
- C. 5 centimeters
- D. 7 millimeters



Determine which letter best represents the length / height.

Millimeter (mm)

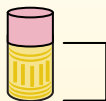
A millimeter is about the thickness of a credit card.



Centimeter (cm)

10 mm = 1 cm.

The metal portion of a pencil is about 1 cm. A ruler is about 30 centimeters.



Meter (m)

100 cm = 1 m

From the floor to a door knob is about 1 meter.



Kilometer (km)

1,000 m = 1 km

Most major roads are at least a kilometer long.



Answers

1. **C**

2. **B**

3. **C**

4. **D**

5. **D**

6. **D**

7. **C**

8. **C**

9. **D**




Bicycle

- A. 10 centimeters
- B. 25 centimeters
- C. 1 meter
- D. 3 meters



Vacuum

- A. 30 centimeters
- B. 120 centimeters
- C. 3 meters
- D. 35 centimeters




Toothbrush

- A. 3 meters
- B. 10 centimeters
- C. 17 centimeters
- D. 1 meter



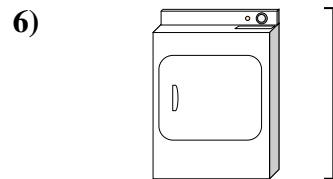
Cereal Box Height

- A. 10 centimeters
- B. 60 centimeters
- C. 3 centimeters
- D. 30 centimeters



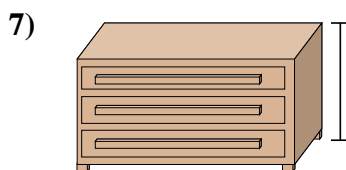
Elephant

- A. 2 kilometers
- B. 150 millimeters
- C. 45 centimeters
- D. 4 meters



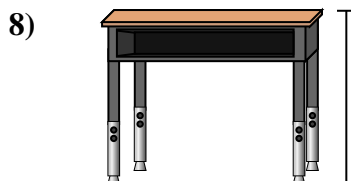
Clothes Dryer

- A. 15 centimeters
- B. 60 centimeters
- C. 25 centimeters
- D. 1 meter



Dresser

- A. 30 centimeters
- B. 3 meters
- C. 90 centimeters
- D. 45 centimeters



Desk

- A. 15 centimeters
- B. 30 centimeters
- C. 70 centimeters
- D. 2 meters



Bug

- A. 30 centimeters
- B. 10 centimeters
- C. 5 centimeters
- D. 7 millimeters



Determine which letter best represents the length / height.

Answers

Millimeter (mm)

Centimeter (cm)

Meter (m)

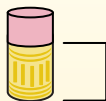
Kilometer (km)

A millimeter is about the thickness of a credit card.

10 mm = 1 cm.
The metal portion of a pencil is about 1 cm. A ruler is about 30 centimeters.

100 cm = 1 m
From the floor to a door knob is about 1 meter.

1,000 m = 1 km
Most major roads are at least a kilometer long.



1. _____
2. _____
3. _____
4. _____
5. _____
6. _____
7. _____
8. _____
9. _____


1)



Can of Soda

- A. 30 centimeters
- B. 3 centimeters
- C. 1 meter
- D. 10 centimeters


2)



Washing Machine

- A. 1 meter
- B. 30 centimeters
- C. 2 meters
- D. 10 centimeters

3)



Lollipop

- A. 30 millimeters
- B. 30 centimeters
- C. 2 kilometers
- D. 10 centimeters

4)



Bicycle

- A. 25 centimeters
- B. 10 centimeters
- C. 1 meter
- D. 3 meters

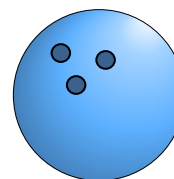
5)



Shovel

- A. 30 centimeters
- B. 60 centimeters
- C. 1 meter
- D. 3 meters

6)



Bowling Ball Height

- A. 25 centimeters
- B. 305 centimeters
- C. 1 meter
- D. 10 centimeters

7)



File Cabinet

- A. 30 centimeters
- B. 1.5 millimeters
- C. 30 millimeters
- D. 60 centimeters

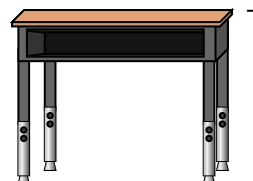
8)



Pencil

- A. 30 millimeters
- B. 20 centimeters
- C. 150 centimeters
- D. 1 meter

9)



Desk

- A. 2 meters
- B. 15 centimeters
- C. 30 centimeters
- D. 70 centimeters



Determine which letter best represents the length / height.

Millimeter (mm)

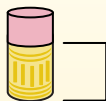
A millimeter is about the thickness of a credit card.



Centimeter (cm)

10 mm = 1 cm.

The metal portion of a pencil is about 1 cm. A ruler is about 30 centimeters.



Meter (m)

100 cm = 1 m

From the floor to a door knob is about 1 meter.



Kilometer (km)

1,000 m = 1 km

Most major roads are at least a kilometer long.



Answers

1. **D**

2. **A**

3. **D**

4. **C**

5. **C**


6. **A**

7. **B**

8. **B**

9. **D**


1)



Can of Soda

- A. 30 centimeters
- B. 3 centimeters
- C. 1 meter
- D. 10 centimeters


2)



Washing Machine

- A. 1 meter
- B. 30 centimeters
- C. 2 meters
- D. 10 centimeters

3)



Lollipop

- A. 30 millimeters
- B. 30 centimeters
- C. 2 kilometers
- D. 10 centimeters

4)



Bicycle

- A. 25 centimeters
- B. 10 centimeters
- C. 1 meter
- D. 3 meters

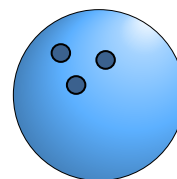
5)



Shovel

- A. 30 centimeters
- B. 60 centimeters
- C. 1 meter
- D. 3 meters

6)



Bowling Ball Height

- A. 25 centimeters
- B. 305 centimeters
- C. 1 meter
- D. 10 centimeters

7)



File Cabinet

- A. 30 centimeters
- B. 1.5 millimeters
- C. 30 millimeters
- D. 60 centimeters

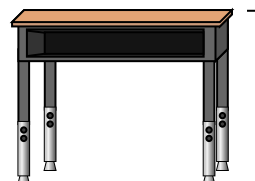
8)



Pencil

- A. 30 millimeters
- B. 20 centimeters
- C. 150 centimeters
- D. 1 meter

9)



Desk

- A. 2 meters
- B. 15 centimeters
- C. 30 centimeters
- D. 70 centimeters



Determine which letter best represents the length / height.

Answers

Millimeter (mm)

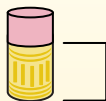
A millimeter is about the thickness of a credit card.



Centimeter (cm)

10 mm = 1 cm.

The metal portion of a pencil is about 1 cm. A ruler is about 30 centimeters.



Meter (m)

100 cm = 1 m

From the floor to a door knob is about 1 meter.



Kilometer (km)

1,000 m = 1 km

Most major roads are at least a kilometer long.




1. _____
2. _____
3. _____
4. _____
5. _____
6. _____
7. _____
8. _____
9. _____

1)

DVD

- A. 10 centimeters
- B. 1 meter
- C. 30 millimeters
- D. 30 centimeters


2)



Mountain

- A. 700 millimeters
- B. 3 kilometers
- C. 60 centimeters
- D. 9 meters

3)



Slice of Bread

- A. 120 centimeters
- B. 2 meters
- C. 10 centimeters
- D. 25 centimeters

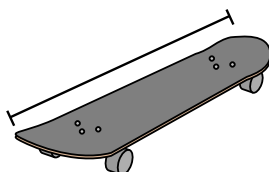
4)



Bicycle

- A. 3 meters
- B. 25 centimeters
- C. 10 centimeters
- D. 1 meter

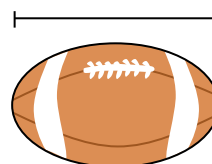
5)



Skateboard

- A. 80 centimeters
- B. 2 meters
- C. 30 centimeters
- D. 3 centimeters

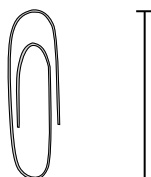
6)



Football

- A. 1 meter
- B. 25 centimeters
- C. 3 centimeters
- D. 60 centimeters

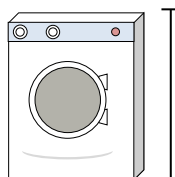
7)



Paperclip

- A. 3 centimeters
- B. 60 centimeters
- C. 10 centimeters
- D. 30 centimeters

8)



Washing Machine

- A. 30 centimeters
- B. 1 meter
- C. 2 meters
- D. 10 centimeters

9)



Glue Stick

- A. 10 centimeters
- B. 30 centimeters
- C. 25 centimeters
- D. 6 kilometers



Determine which letter best represents the length / height.

Millimeter (mm)

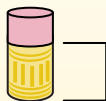
A millimeter is about the thickness of a credit card.



Centimeter (cm)

10 mm = 1 cm.

The metal portion of a pencil is about 1 cm. A ruler is about 30 centimeters.



Meter (m)

100 cm = 1 m

From the floor to a door knob is about 1 meter.



Kilometer (km)

1,000 m = 1 km

Most major roads are at least a kilometer long.



Answers

1. **A**

2. **B**

3. **C**

4. **D**

5. **A**

6. **B**

7. **A**

8. **B**


9. **A**

1)

DVD

- A. 10 centimeters
- B. 1 meter
- C. 30 millimeters
- D. 30 centimeters


2)



Mountain

- A. 700 millimeters
- B. 3 kilometers
- C. 60 centimeters
- D. 9 meters

3)



Slice of Bread

- A. 120 centimeters
- B. 2 meters
- C. 10 centimeters
- D. 25 centimeters

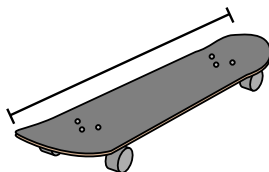
4)



Bicycle

- A. 3 meters
- B. 25 centimeters
- C. 10 centimeters
- D. 1 meter

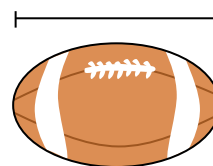
5)



Skateboard

- A. 80 centimeters
- B. 2 meters
- C. 30 centimeters
- D. 3 centimeters

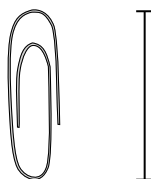
6)



Football

- A. 1 meter
- B. 25 centimeters
- C. 3 centimeters
- D. 60 centimeters

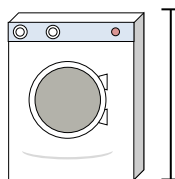
7)



Paperclip

- A. 3 centimeters
- B. 60 centimeters
- C. 10 centimeters
- D. 30 centimeters

8)



Washing Machine

- A. 30 centimeters
- B. 1 meter
- C. 2 meters
- D. 10 centimeters

9)



Glue Stick

- A. 10 centimeters
- B. 30 centimeters
- C. 25 centimeters
- D. 6 kilometers