



Counting Change (within a dollar)

Name: _____

Determine the amount of money shown.

Answers



1. _____




2. _____



3. _____



4. _____



5. _____



6. _____



7. _____



8. _____



9. _____



10. _____



Counting Change (within a dollar)

Name: **Answer Key**

Determine the amount of money shown.


Answers



1. **\$0.79**




2. **\$0.62**



3. **\$0.63**



4. **\$0.82**



5. **\$0.97**



6. **\$0.99**



7. **\$0.97**



8. **\$0.63**



9. **\$0.86**



10. **\$0.75**