



Solve each problem.

Answers

1) Paul spent \$12.91 buying some new toys. He bought them using a twenty dollar bill. How much change should he get back?




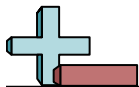
- 1. _____
- 2. _____
- 3. _____

2) At the book fair Jerry spent \$1.16 buying books. He gave the cashier a ten dollar bill. How much change should he get back?



3) Cody bought \$6.97 worth of groceries. He gave the cashier a twenty dollar bill. How much change should he get back?





Solve each problem.


1) Paul spent \$12.91 buying some new toys. He bought them using a twenty dollar bill. How much change should he get back?



2) At the book fair Jerry spent \$1.16 buying books. He gave the cashier a ten dollar bill. How much change should he get back?



3) Cody bought \$6.97 worth of groceries. He gave the cashier a twenty dollar bill. How much change should he get back?



Answers

1. **A**

2. **A**

3. **B**