



Determine which choice best describes the coins in the order shown.

Answers



- A. nickel, dime, quarter, penny
- B. penny, dime, quarter, nickel
- C. nickel, quarter, penny, dime
- D. nickel, quarter, dime, penny

1. _____


2. _____



- A. quarter, nickel, penny, dime
- B. dime, nickel, quarter, penny
- C. penny, nickel, quarter, dime
- D. nickel, penny, quarter, dime

3. _____

4. _____



- A. penny, dime, nickel, quarter
- B. quarter, dime, nickel, penny
- C. quarter, penny, nickel, dime
- D. penny, quarter, nickel, dime

5. _____

6. _____



- A. quarter, penny, dime, nickel
- B. penny, nickel, quarter, dime
- C. quarter, penny, nickel, dime
- D. nickel, penny, dime, quarter

7. _____

8. _____



- A. penny, dime, nickel, quarter
- B. dime, quarter, nickel, penny
- C. quarter, dime, penny, nickel
- D. penny, quarter, dime, nickel



- A. dime, penny, quarter, nickel
- B. dime, quarter, nickel, penny
- C. penny, nickel, quarter, dime
- D. quarter, dime, penny, nickel



- A. nickel, quarter, dime, penny
- B. quarter, penny, dime, nickel
- C. dime, nickel, quarter, penny
- D. dime, penny, nickel, quarter



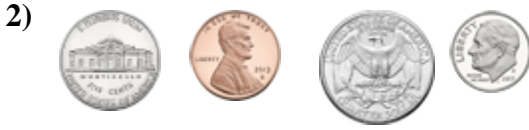
- A. penny, quarter, nickel, dime
- B. dime, nickel, quarter, penny
- C. quarter, nickel, penny, dime
- D. penny, nickel, quarter, dime




Determine which choice best describes the coins in the order shown.



- A. nickel, dime, quarter, penny
- B. penny, dime, quarter, nickel
- C. nickel, quarter, penny, dime
- D. nickel, quarter, dime, penny




- A. quarter, nickel, penny, dime
- B. dime, nickel, quarter, penny
- C. penny, nickel, quarter, dime
- D. nickel, penny, quarter, dime



- A. penny, dime, nickel, quarter
- B. quarter, dime, nickel, penny
- C. quarter, penny, nickel, dime
- D. penny, quarter, nickel, dime



- A. quarter, penny, dime, nickel
- B. penny, nickel, quarter, dime
- C. quarter, penny, nickel, dime
- D. nickel, penny, dime, quarter



- A. penny, dime, nickel, quarter
- B. dime, quarter, nickel, penny
- C. quarter, dime, penny, nickel
- D. penny, quarter, dime, nickel



- A. dime, penny, quarter, nickel
- B. dime, quarter, nickel, penny
- C. penny, nickel, quarter, dime
- D. quarter, dime, penny, nickel



- A. nickel, quarter, dime, penny
- B. quarter, penny, dime, nickel
- C. dime, nickel, quarter, penny
- D. dime, penny, nickel, quarter



- A. penny, quarter, nickel, dime
- B. dime, nickel, quarter, penny
- C. quarter, nickel, penny, dime
- D. penny, nickel, quarter, dime

Answers

1. **C**

2. **D**

3. **C**

4. **B**

5. **C**

6. **D**

7. **B**

8. **A**



Determine which choice best describes the coins in the order shown.

Answers



- A. penny, quarter, nickel, dime
- B. quarter, nickel, dime, penny
- C. dime, nickel, penny, quarter
- D. penny, nickel, quarter, dime

1. _____



- A. nickel, penny, quarter, dime
- B. nickel, quarter, dime, penny
- C. dime, nickel, quarter, penny
- D. dime, quarter, nickel, penny

2. _____



- A. nickel, quarter, penny, dime
- B. nickel, dime, penny, quarter
- C. penny, quarter, dime, nickel
- D. dime, nickel, penny, quarter

3. _____



- A. dime, nickel, quarter, penny
- B. penny, quarter, dime, nickel
- C. nickel, quarter, dime, penny
- D. quarter, nickel, penny, dime

4. _____



- A. quarter, penny, dime, nickel
- B. penny, quarter, dime, nickel
- C. nickel, quarter, dime, penny
- D. penny, dime, quarter, nickel

5. _____



- A. quarter, dime, penny, nickel
- B. dime, nickel, quarter, penny
- C. dime, quarter, nickel, penny
- D. penny, nickel, dime, quarter

6. _____



- A. quarter, penny, nickel, dime
- B. nickel, dime, penny, quarter
- C. nickel, penny, dime, quarter
- D. penny, nickel, quarter, dime

7. _____



- A. dime, nickel, penny, quarter
- B. penny, nickel, quarter, dime
- C. nickel, dime, penny, quarter
- D. penny, dime, nickel, quarter

8. _____



Determine which choice best describes the coins in the order shown.



- A. penny, quarter, nickel, dime
- B. quarter, nickel, dime, penny
- C. dime, nickel, penny, quarter
- D. penny, nickel, quarter, dime



- A. nickel, penny, quarter, dime
- B. nickel, quarter, dime, penny
- C. dime, nickel, quarter, penny
- D. dime, quarter, nickel, penny



- A. nickel, quarter, penny, dime
- B. nickel, dime, penny, quarter
- C. penny, quarter, dime, nickel
- D. dime, nickel, penny, quarter



- A. dime, nickel, quarter, penny
- B. penny, quarter, dime, nickel
- C. nickel, quarter, dime, penny
- D. quarter, nickel, penny, dime



- A. quarter, penny, dime, nickel
- B. penny, quarter, dime, nickel
- C. nickel, quarter, dime, penny
- D. penny, dime, quarter, nickel



- A. quarter, dime, penny, nickel
- B. dime, nickel, quarter, penny
- C. dime, quarter, nickel, penny
- D. penny, nickel, dime, quarter



- A. quarter, penny, nickel, dime
- B. nickel, dime, penny, quarter
- C. nickel, penny, dime, quarter
- D. penny, nickel, quarter, dime



- A. dime, nickel, penny, quarter
- B. penny, nickel, quarter, dime
- C. nickel, dime, penny, quarter
- D. penny, dime, nickel, quarter

Answers

1. **D**

2. **A**

3. **D**

4. **B**

5. **D**

6. **A**

7. **D**

8. **B**



Determine which choice best describes the coins in the order shown.

Answers



- A. dime, nickel, penny, quarter
- B. penny, quarter, nickel, dime
- C. dime, penny, quarter, nickel
- D. quarter, nickel, penny, dime

1. _____



- A. quarter, dime, penny, nickel
- B. nickel, dime, penny, quarter
- C. penny, nickel, quarter, dime
- D. nickel, quarter, dime, penny

2. _____



- A. penny, quarter, dime, nickel
- B. dime, nickel, penny, quarter
- C. nickel, penny, dime, quarter
- D. dime, quarter, nickel, penny

3. _____



- A. penny, dime, nickel, quarter
- B. quarter, dime, nickel, penny
- C. dime, nickel, quarter, penny
- D. dime, penny, quarter, nickel

4. _____



- A. penny, dime, quarter, nickel
- B. nickel, dime, penny, quarter
- C. penny, nickel, dime, quarter
- D. nickel, quarter, dime, penny

5. _____



- A. quarter, nickel, dime, penny
- B. dime, quarter, penny, nickel
- C. dime, nickel, penny, quarter
- D. penny, nickel, quarter, dime

6. _____



- A. nickel, dime, penny, quarter
- B. nickel, quarter, penny, dime
- C. nickel, penny, quarter, dime
- D. penny, dime, quarter, nickel

7. _____



- A. penny, dime, nickel, quarter
- B. quarter, penny, nickel, dime
- C. penny, quarter, dime, nickel
- D. penny, nickel, quarter, dime

8. _____



Determine which choice best describes the coins in the order shown.



- A. dime, nickel, penny, quarter
- B. penny, quarter, nickel, dime
- C. dime, penny, quarter, nickel
- D. quarter, nickel, penny, dime



- A. quarter, dime, penny, nickel
- B. nickel, dime, penny, quarter
- C. penny, nickel, quarter, dime
- D. nickel, quarter, dime, penny



- A. penny, quarter, dime, nickel
- B. dime, nickel, penny, quarter
- C. nickel, penny, dime, quarter
- D. dime, quarter, nickel, penny



- A. penny, dime, nickel, quarter
- B. quarter, dime, nickel, penny
- C. dime, nickel, quarter, penny
- D. dime, penny, quarter, nickel



- A. penny, dime, quarter, nickel
- B. nickel, dime, penny, quarter
- C. penny, nickel, dime, quarter
- D. nickel, quarter, dime, penny



- A. quarter, nickel, dime, penny
- B. dime, quarter, penny, nickel
- C. dime, nickel, penny, quarter
- D. penny, nickel, quarter, dime



- A. nickel, dime, penny, quarter
- B. nickel, quarter, penny, dime
- C. nickel, penny, quarter, dime
- D. penny, dime, quarter, nickel



- A. penny, dime, nickel, quarter
- B. quarter, penny, nickel, dime
- C. penny, quarter, dime, nickel
- D. penny, nickel, quarter, dime

Answers

1. **B**

2. **A**

3. **C**

4. **D**

5. **D**

6. **C**

7. **B**

8. **A**



Determine which choice best describes the coins in the order shown.

Answers

1)



- A. dime, nickel, quarter, penny
- B. nickel, quarter, penny, dime
- C. quarter, nickel, penny, dime
- D. penny, nickel, dime, quarter

1. _____

2)



- A. nickel, quarter, dime, penny
- B. dime, nickel, penny, quarter
- C. penny, nickel, quarter, dime
- D. penny, quarter, dime, nickel

2. _____

3. _____

3)



- A. dime, nickel, penny, quarter
- B. quarter, penny, dime, nickel
- C. quarter, nickel, penny, dime
- D. dime, penny, quarter, nickel

4. _____

5. _____

4)



- A. dime, nickel, quarter, penny
- B. dime, penny, quarter, nickel
- C. penny, dime, quarter, nickel
- D. penny, quarter, nickel, dime

6. _____

7. _____

5)



- A. penny, quarter, dime, nickel
- B. penny, nickel, quarter, dime
- C. dime, quarter, penny, nickel
- D. quarter, penny, nickel, dime

8. _____

6)



- A. nickel, penny, quarter, dime
- B. penny, quarter, dime, nickel
- C. dime, nickel, quarter, penny
- D. nickel, dime, penny, quarter

7)



- A. dime, penny, quarter, nickel
- B. quarter, penny, nickel, dime
- C. nickel, dime, penny, quarter
- D. penny, nickel, quarter, dime

8)



- A. nickel, quarter, dime, penny
- B. penny, dime, nickel, quarter
- C. dime, penny, quarter, nickel
- D. quarter, dime, nickel, penny




Determine which choice best describes the coins in the order shown.



- A. dime, nickel, quarter, penny
- B. nickel, quarter, penny, dime
- C. quarter, nickel, penny, dime
- D. penny, nickel, dime, quarter



- A. nickel, quarter, dime, penny
- B. dime, nickel, penny, quarter
- C. penny, nickel, quarter, dime
- D. penny, quarter, dime, nickel



- A. dime, nickel, penny, quarter
- B. quarter, penny, dime, nickel
- C. quarter, nickel, penny, dime
- D. dime, penny, quarter, nickel




- A. dime, nickel, quarter, penny
- B. dime, penny, quarter, nickel
- C. penny, dime, quarter, nickel
- D. penny, quarter, nickel, dime



- A. penny, quarter, dime, nickel
- B. penny, nickel, quarter, dime
- C. dime, quarter, penny, nickel
- D. quarter, penny, nickel, dime



- A. nickel, penny, quarter, dime
- B. penny, quarter, dime, nickel
- C. dime, nickel, quarter, penny
- D. nickel, dime, penny, quarter



- A. dime, penny, quarter, nickel
- B. quarter, penny, nickel, dime
- C. nickel, dime, penny, quarter
- D. penny, nickel, quarter, dime



- A. nickel, quarter, dime, penny
- B. penny, dime, nickel, quarter
- C. dime, penny, quarter, nickel
- D. quarter, dime, nickel, penny

Answers

1. **C**

2. **B**

3. **D**

4. **B**

5. **A**

6. **D**

7. **C**

8. **A**



Determine which choice best describes the coins in the order shown.

Answers



- A. penny, dime, quarter, nickel
- B. dime, nickel, quarter, penny
- C. dime, quarter, nickel, penny
- D. penny, quarter, nickel, dime

1. _____



- A. penny, nickel, quarter, dime
- B. nickel, dime, penny, quarter
- C. quarter, penny, nickel, dime
- D. penny, nickel, dime, quarter

2. _____




- A. penny, nickel, dime, quarter
- B. dime, nickel, quarter, penny
- C. quarter, penny, dime, nickel
- D. quarter, penny, nickel, dime

3. _____



- A. nickel, quarter, dime, penny
- B. nickel, penny, quarter, dime
- C. dime, penny, nickel, quarter
- D. quarter, nickel, dime, penny

4. _____



- A. quarter, penny, nickel, dime
- B. nickel, penny, dime, quarter
- C. dime, quarter, penny, nickel
- D. penny, quarter, dime, nickel

5. _____



- A. quarter, dime, nickel, penny
- B. nickel, penny, quarter, dime
- C. nickel, dime, quarter, penny
- D. dime, nickel, quarter, penny

6. _____



- A. nickel, quarter, penny, dime
- B. dime, quarter, penny, nickel
- C. nickel, dime, quarter, penny
- D. dime, nickel, quarter, penny

7. _____



- A. quarter, dime, nickel, penny
- B. nickel, quarter, dime, penny
- C. nickel, quarter, penny, dime
- D. quarter, nickel, dime, penny

8. _____



Determine which choice best describes the coins in the order shown.



- A. penny, dime, quarter, nickel
- B. dime, nickel, quarter, penny
- C. dime, quarter, nickel, penny
- D. penny, quarter, nickel, dime




- A. penny, nickel, quarter, dime
- B. nickel, dime, penny, quarter
- C. quarter, penny, nickel, dime
- D. penny, nickel, dime, quarter



- A. penny, nickel, dime, quarter
- B. dime, nickel, quarter, penny
- C. quarter, penny, dime, nickel
- D. quarter, penny, nickel, dime



- A. nickel, quarter, dime, penny
- B. nickel, penny, quarter, dime
- C. dime, penny, nickel, quarter
- D. quarter, nickel, dime, penny



- A. quarter, penny, nickel, dime
- B. nickel, penny, dime, quarter
- C. dime, quarter, penny, nickel
- D. penny, quarter, dime, nickel



- A. quarter, dime, nickel, penny
- B. nickel, penny, quarter, dime
- C. nickel, dime, quarter, penny
- D. dime, nickel, quarter, penny



- A. nickel, quarter, penny, dime
- B. dime, quarter, penny, nickel
- C. nickel, dime, quarter, penny
- D. dime, nickel, quarter, penny



- A. quarter, dime, nickel, penny
- B. nickel, quarter, dime, penny
- C. nickel, quarter, penny, dime
- D. quarter, nickel, dime, penny

Answers

1. **C**

2. **C**

3. **A**

4. **B**

5. **B**

6. **C**

7. **C**

8. **A**



Determine which choice best describes the coins in the order shown.

Answers



- A. nickel, penny, quarter, dime
- B. quarter, dime, nickel, penny
- C. penny, quarter, dime, nickel
- D. penny, nickel, dime, quarter

1. _____



- A. nickel, quarter, penny, dime
- B. dime, quarter, nickel, penny
- C. quarter, penny, dime, nickel
- D. penny, dime, quarter, nickel

2. _____



- A. quarter, nickel, penny, dime
- B. penny, nickel, quarter, dime
- C. quarter, dime, penny, nickel
- D. quarter, penny, nickel, dime

3. _____



- A. penny, nickel, quarter, dime
- B. dime, nickel, penny, quarter
- C. nickel, penny, dime, quarter
- D. penny, quarter, dime, nickel

4. _____



- A. dime, nickel, penny, quarter
- B. penny, nickel, dime, quarter
- C. nickel, dime, penny, quarter
- D. quarter, penny, dime, nickel

5. _____



- A. penny, quarter, nickel, dime
- B. nickel, quarter, dime, penny
- C. penny, dime, quarter, nickel
- D. penny, quarter, dime, nickel

6. _____



- A. quarter, nickel, dime, penny
- B. dime, quarter, nickel, penny
- C. penny, dime, quarter, nickel
- D. quarter, penny, dime, nickel

7. _____



- A. penny, quarter, dime, nickel
- B. penny, nickel, dime, quarter
- C. dime, nickel, quarter, penny
- D. dime, quarter, penny, nickel

8. _____



Determine which choice best describes the coins in the order shown.



- A. nickel, penny, quarter, dime
- B. quarter, dime, nickel, penny
- C. penny, quarter, dime, nickel
- D. penny, nickel, dime, quarter



- A. nickel, quarter, penny, dime
- B. dime, quarter, nickel, penny
- C. quarter, penny, dime, nickel
- D. penny, dime, quarter, nickel



- A. quarter, nickel, penny, dime
- B. penny, nickel, quarter, dime
- C. quarter, dime, penny, nickel
- D. quarter, penny, nickel, dime



- A. penny, nickel, quarter, dime
- B. dime, nickel, penny, quarter
- C. nickel, penny, dime, quarter
- D. penny, quarter, dime, nickel



- A. dime, nickel, penny, quarter
- B. penny, nickel, dime, quarter
- C. nickel, dime, penny, quarter
- D. quarter, penny, dime, nickel



- A. penny, quarter, nickel, dime
- B. nickel, quarter, dime, penny
- C. penny, dime, quarter, nickel
- D. penny, quarter, dime, nickel



- A. quarter, nickel, dime, penny
- B. dime, quarter, nickel, penny
- C. penny, dime, quarter, nickel
- D. quarter, penny, dime, nickel



- A. penny, quarter, dime, nickel
- B. penny, nickel, dime, quarter
- C. dime, nickel, quarter, penny
- D. dime, quarter, penny, nickel

Answers

1. **D**

2. **B**

3. **B**

4. **A**

5. **A**

6. **C**


7. **B**

8. **D**



Determine which choice best describes the coins in the order shown.

Answers



- A. quarter, nickel, penny, dime
- B. nickel, quarter, penny, dime
- C. quarter, penny, dime, nickel
- D. dime, quarter, penny, nickel

1. _____



- A. nickel, dime, penny, quarter
- B. nickel, quarter, dime, penny
- C. penny, quarter, dime, nickel
- D. quarter, dime, nickel, penny

2. _____

3. _____



- A. dime, nickel, quarter, penny
- B. penny, dime, quarter, nickel
- C. penny, dime, nickel, quarter
- D. nickel, dime, penny, quarter

4. _____

5. _____

6. _____



- A. quarter, dime, penny, nickel
- B. nickel, dime, quarter, penny
- C. dime, quarter, nickel, penny
- D. nickel, quarter, dime, penny

7. _____

8. _____




- A. nickel, dime, penny, quarter
- B. penny, nickel, quarter, dime
- C. dime, quarter, nickel, penny
- D. penny, quarter, nickel, dime



- A. dime, penny, quarter, nickel
- B. quarter, dime, penny, nickel
- C. nickel, quarter, dime, penny
- D. penny, nickel, quarter, dime




- A. quarter, penny, dime, nickel
- B. nickel, quarter, penny, dime
- C. dime, quarter, nickel, penny
- D. dime, nickel, penny, quarter



- A. dime, nickel, penny, quarter
- B. nickel, penny, dime, quarter
- C. quarter, dime, nickel, penny
- D. dime, nickel, quarter, penny



Determine which choice best describes the coins in the order shown.



- A. quarter, nickel, penny, dime
- B. nickel, quarter, penny, dime
- C. quarter, penny, dime, nickel
- D. dime, quarter, penny, nickel



- A. nickel, dime, penny, quarter
- B. nickel, quarter, dime, penny
- C. penny, quarter, dime, nickel
- D. quarter, dime, nickel, penny



- A. dime, nickel, quarter, penny
- B. penny, dime, quarter, nickel
- C. penny, dime, nickel, quarter
- D. nickel, dime, penny, quarter



- A. quarter, dime, penny, nickel
- B. nickel, dime, quarter, penny
- C. dime, quarter, nickel, penny
- D. nickel, quarter, dime, penny




- A. nickel, dime, penny, quarter
- B. penny, nickel, quarter, dime
- C. dime, quarter, nickel, penny
- D. penny, quarter, nickel, dime



- A. dime, penny, quarter, nickel
- B. quarter, dime, penny, nickel
- C. nickel, quarter, dime, penny
- D. penny, nickel, quarter, dime



- A. quarter, penny, dime, nickel
- B. nickel, quarter, penny, dime
- C. dime, quarter, nickel, penny
- D. dime, nickel, penny, quarter



- A. dime, nickel, penny, quarter
- B. nickel, penny, dime, quarter
- C. quarter, dime, nickel, penny
- D. dime, nickel, quarter, penny

Answers

1. **C**

2. **A**

3. **A**

4. **B**

5. **B**

6. **B**

7. **D**

8. **B**



Determine which choice best describes the coins in the order shown.

Answers




- A. quarter, penny, nickel, dime
- B. dime, quarter, nickel, penny
- C. nickel, penny, dime, quarter
- D. quarter, nickel, penny, dime

1. _____



- A. quarter, dime, nickel, penny
- B. quarter, nickel, dime, penny
- C. dime, quarter, penny, nickel
- D. penny, quarter, nickel, dime

2. _____



- A. nickel, quarter, penny, dime
- B. nickel, penny, dime, quarter
- C. penny, dime, nickel, quarter
- D. dime, penny, nickel, quarter

3. _____



- A. dime, quarter, penny, nickel
- B. nickel, dime, quarter, penny
- C. penny, nickel, quarter, dime
- D. penny, dime, quarter, nickel

4. _____



- A. penny, dime, quarter, nickel
- B. dime, quarter, nickel, penny
- C. dime, penny, nickel, quarter
- D. quarter, penny, dime, nickel

5. _____



- A. penny, quarter, dime, nickel
- B. quarter, nickel, penny, dime
- C. nickel, quarter, dime, penny
- D. quarter, penny, dime, nickel

6. _____



- A. nickel, penny, quarter, dime
- B. quarter, nickel, penny, dime
- C. quarter, dime, penny, nickel
- D. dime, penny, nickel, quarter

7. _____



- A. nickel, penny, quarter, dime
- B. quarter, dime, nickel, penny
- C. nickel, dime, penny, quarter
- D. penny, dime, nickel, quarter

8. _____




Determine which choice best describes the coins in the order shown.



- A. quarter, penny, nickel, dime
- B. dime, quarter, nickel, penny
- C. nickel, penny, dime, quarter
- D. quarter, nickel, penny, dime



- A. quarter, dime, nickel, penny
- B. quarter, nickel, dime, penny
- C. dime, quarter, penny, nickel
- D. penny, quarter, nickel, dime



- A. nickel, quarter, penny, dime
- B. nickel, penny, dime, quarter
- C. penny, dime, nickel, quarter
- D. dime, penny, nickel, quarter



- A. dime, quarter, penny, nickel
- B. nickel, dime, quarter, penny
- C. penny, nickel, quarter, dime
- D. penny, dime, quarter, nickel




- A. penny, dime, quarter, nickel
- B. dime, quarter, nickel, penny
- C. dime, penny, nickel, quarter
- D. quarter, penny, dime, nickel



- A. penny, quarter, dime, nickel
- B. quarter, nickel, penny, dime
- C. nickel, quarter, dime, penny
- D. quarter, penny, dime, nickel



- A. nickel, penny, quarter, dime
- B. quarter, nickel, penny, dime
- C. quarter, dime, penny, nickel
- D. dime, penny, nickel, quarter



- A. nickel, penny, quarter, dime
- B. quarter, dime, nickel, penny
- C. nickel, dime, penny, quarter
- D. penny, dime, nickel, quarter

Answers

1. **B**

2. **C**

3. **D**

4. **A**

5. **B**

6. **C**

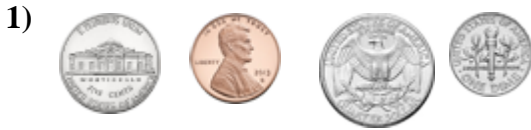
7. **D**

8. **C**



Determine which choice best describes the coins in the order shown.

Answers



- A. nickel, penny, quarter, dime
- B. penny, dime, nickel, quarter
- C. nickel, quarter, penny, dime
- D. penny, quarter, dime, nickel

1. _____



- A. nickel, dime, quarter, penny
- B. penny, quarter, nickel, dime
- C. nickel, penny, dime, quarter
- D. nickel, quarter, dime, penny

2. _____

3. _____



- A. nickel, penny, quarter, dime
- B. quarter, dime, penny, nickel
- C. dime, quarter, penny, nickel
- D. penny, nickel, quarter, dime

4. _____

5. _____



- A. quarter, nickel, dime, penny
- B. quarter, nickel, penny, dime
- C. quarter, penny, nickel, dime
- D. dime, nickel, quarter, penny

6. _____

7. _____



- A. penny, dime, nickel, quarter
- B. nickel, dime, quarter, penny
- C. nickel, dime, penny, quarter
- D. quarter, nickel, dime, penny

8. _____



- A. quarter, penny, nickel, dime
- B. nickel, penny, quarter, dime
- C. dime, penny, quarter, nickel
- D. penny, quarter, dime, nickel



- A. quarter, nickel, dime, penny
- B. nickel, quarter, dime, penny
- C. nickel, dime, penny, quarter
- D. dime, quarter, nickel, penny



- A. nickel, penny, quarter, dime
- B. nickel, penny, dime, quarter
- C. quarter, dime, penny, nickel
- D. penny, quarter, nickel, dime



Determine which choice best describes the coins in the order shown.



- A. nickel, penny, quarter, dime
- B. penny, dime, nickel, quarter
- C. nickel, quarter, penny, dime
- D. penny, quarter, dime, nickel



- A. nickel, dime, quarter, penny
- B. penny, quarter, nickel, dime
- C. nickel, penny, dime, quarter
- D. nickel, quarter, dime, penny



- A. nickel, penny, quarter, dime
- B. quarter, dime, penny, nickel
- C. dime, quarter, penny, nickel
- D. penny, nickel, quarter, dime



- A. quarter, nickel, dime, penny
- B. quarter, nickel, penny, dime
- C. quarter, penny, nickel, dime
- D. dime, nickel, quarter, penny



- A. penny, dime, nickel, quarter
- B. nickel, dime, quarter, penny
- C. nickel, dime, penny, quarter
- D. quarter, nickel, dime, penny



- A. quarter, penny, nickel, dime
- B. nickel, penny, quarter, dime
- C. dime, penny, quarter, nickel
- D. penny, quarter, dime, nickel



- A. quarter, nickel, dime, penny
- B. nickel, quarter, dime, penny
- C. nickel, dime, penny, quarter
- D. dime, quarter, nickel, penny



- A. nickel, penny, quarter, dime
- B. nickel, penny, dime, quarter
- C. quarter, dime, penny, nickel
- D. penny, quarter, nickel, dime

Answers

1. **A**

2. **C**

3. **C**

4. **A**

5. **A**

6. **A**

7. **A**

8. **D**



Determine which choice best describes the coins in the order shown.

Answers



- A. penny, dime, nickel, quarter
- B. quarter, nickel, penny, dime
- C. penny, quarter, nickel, dime
- D. nickel, penny, dime, quarter

1. _____



- A. nickel, penny, quarter, dime
- B. penny, quarter, nickel, dime
- C. penny, nickel, quarter, dime
- D. dime, penny, quarter, nickel

2. _____

3. _____



- A. dime, quarter, penny, nickel
- B. nickel, penny, dime, quarter
- C. penny, dime, quarter, nickel
- D. quarter, dime, nickel, penny

4. _____

5. _____

6. _____



- A. dime, nickel, quarter, penny
- B. dime, quarter, penny, nickel
- C. dime, quarter, nickel, penny
- D. nickel, penny, dime, quarter

7. _____

8. _____



- A. quarter, dime, penny, nickel
- B. quarter, dime, nickel, penny
- C. nickel, dime, quarter, penny
- D. penny, nickel, dime, quarter



- A. nickel, quarter, dime, penny
- B. dime, penny, quarter, nickel
- C. dime, quarter, nickel, penny
- D. dime, nickel, penny, quarter



- A. quarter, nickel, dime, penny
- B. quarter, nickel, penny, dime
- C. nickel, dime, quarter, penny
- D. dime, quarter, nickel, penny



- A. quarter, dime, penny, nickel
- B. nickel, quarter, dime, penny
- C. penny, dime, nickel, quarter
- D. nickel, penny, dime, quarter



Determine which choice best describes the coins in the order shown.



- A. penny, dime, nickel, quarter
- B. quarter, nickel, penny, dime
- C. penny, quarter, nickel, dime
- D. nickel, penny, dime, quarter



- A. nickel, penny, quarter, dime
- B. penny, quarter, nickel, dime
- C. penny, nickel, quarter, dime
- D. dime, penny, quarter, nickel



- A. dime, quarter, penny, nickel
- B. nickel, penny, dime, quarter
- C. penny, dime, quarter, nickel
- D. quarter, dime, nickel, penny



- A. dime, nickel, quarter, penny
- B. dime, quarter, penny, nickel
- C. dime, quarter, nickel, penny
- D. nickel, penny, dime, quarter



- A. quarter, dime, penny, nickel
- B. quarter, dime, nickel, penny
- C. nickel, dime, quarter, penny
- D. penny, nickel, dime, quarter



- A. nickel, quarter, dime, penny
- B. dime, penny, quarter, nickel
- C. dime, quarter, nickel, penny
- D. dime, nickel, penny, quarter



- A. quarter, nickel, dime, penny
- B. quarter, nickel, penny, dime
- C. nickel, dime, quarter, penny
- D. dime, quarter, nickel, penny



- A. quarter, dime, penny, nickel
- B. nickel, quarter, dime, penny
- C. penny, dime, nickel, quarter
- D. nickel, penny, dime, quarter

Answers

1. **D**

2. **A**

3. **C**

4. **B**

5. **A**

6. **D**

7. **A**

8. **B**