
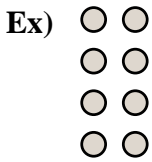




Write each array as an addition problem and solve.

Answers



Ex.  $2+2+2+2=8$

1. \_\_\_\_\_

2. \_\_\_\_\_

3. \_\_\_\_\_

4. \_\_\_\_\_

5. \_\_\_\_\_

6. \_\_\_\_\_

7. \_\_\_\_\_

8. \_\_\_\_\_

9. \_\_\_\_\_




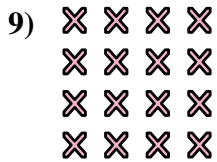

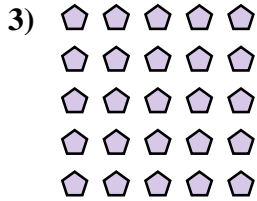
10. \_\_\_\_\_

11. \_\_\_\_\_

12. \_\_\_\_\_


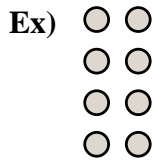
13. \_\_\_\_\_

14. \_\_\_\_\_





Write each array as an addition problem and solve.



Answers

Ex. 2+2+2+2=8

1. 5+5=10

2. 3+3+3=9

3. 5+5+5+5+5=25

4. 2+2+2=6

5. 4+4=8

6. 2+2=4

7. 2+2+2+2+2=10

8. 5+5+5+5=20

9. 4+4+4+4=16

10. 5+5+5=15

11. 3+3=6

12. 3+3+3+3+3=15

13. 3+3+3+3=12

14. 4+4+4=12

