



Use lattice multiplication to solve each problem.

1)  $27 \times 78 =$



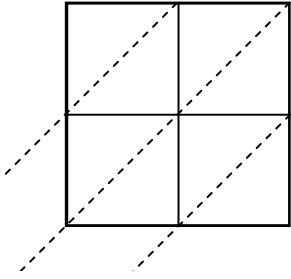
2)  $39 \times 51 =$



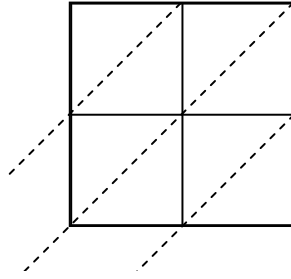
3)  $54 \times 95 =$



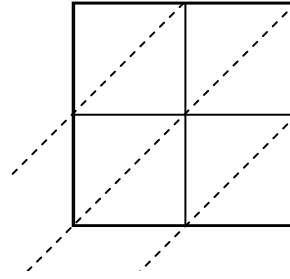
4)  $79 \times 28 =$



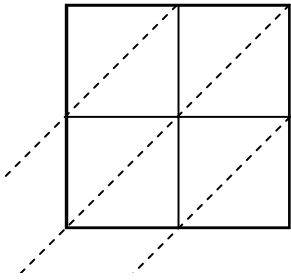
5)  $56 \times 14 =$



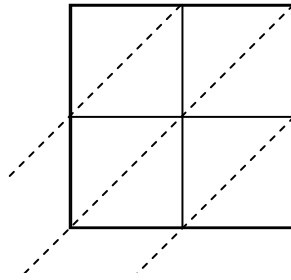
6)  $23 \times 46 =$



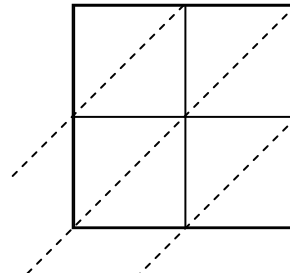
7)  $49 \times 10 =$



8)  $49 \times 15 =$



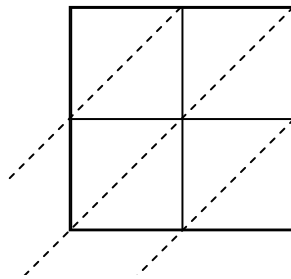
9)  $22 \times 85 =$



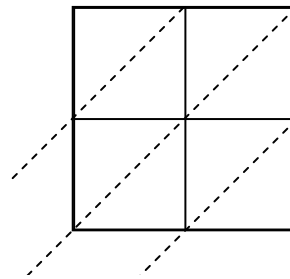
10)  $62 \times 17 =$



11)  $92 \times 41 =$



12)  $85 \times 63 =$



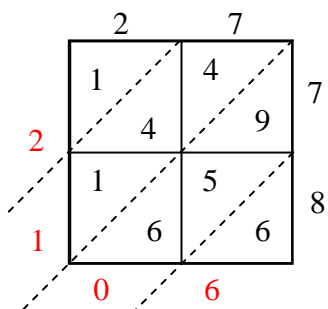
**Answers**

1. \_\_\_\_\_
2. \_\_\_\_\_
3. \_\_\_\_\_
4. \_\_\_\_\_
5. \_\_\_\_\_
6. \_\_\_\_\_
7. \_\_\_\_\_
8. \_\_\_\_\_
9. \_\_\_\_\_
10. \_\_\_\_\_
11. \_\_\_\_\_
12. \_\_\_\_\_

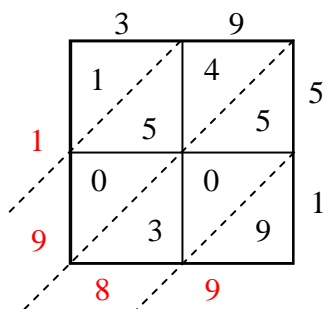


Use lattice multiplication to solve each problem.

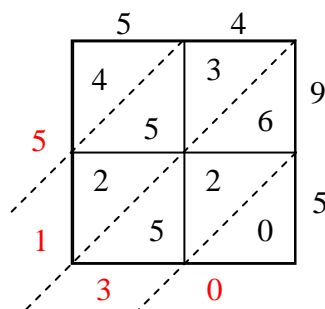
1)  $27 \times 78 =$



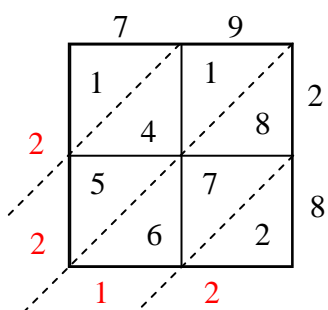
2)  $39 \times 51 =$



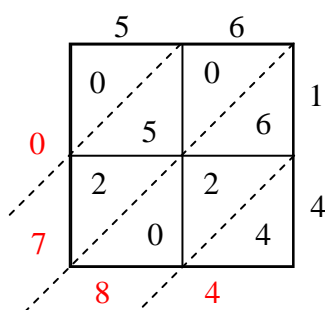
3)  $54 \times 95 =$



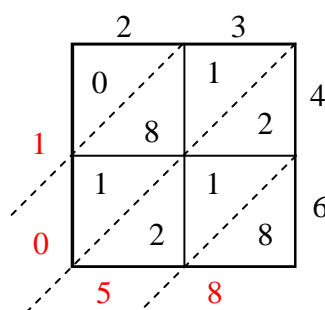
4)  $79 \times 28 =$



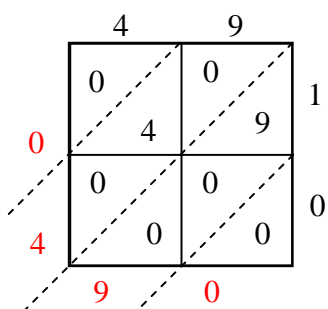
5)  $56 \times 14 =$



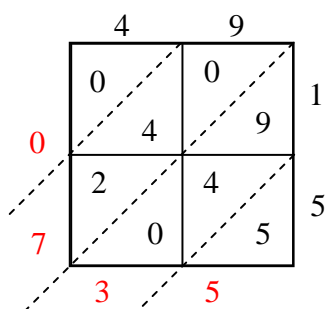
6)  $23 \times 46 =$



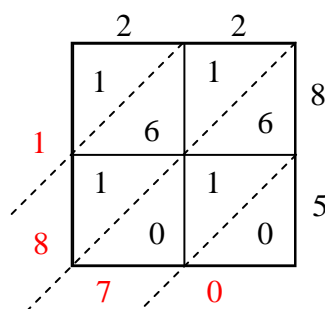
7)  $49 \times 10 =$



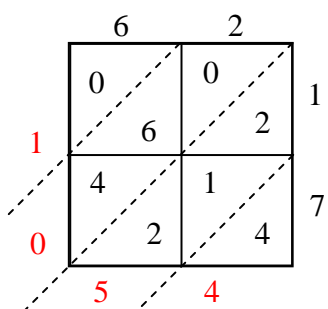
8)  $49 \times 15 =$



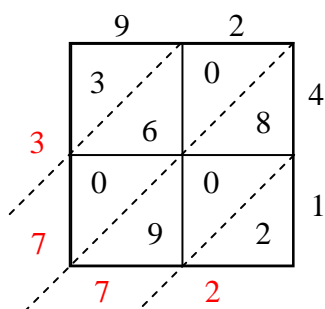
9)  $22 \times 85 =$



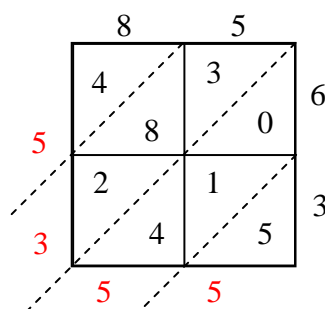
10)  $62 \times 17 =$



11)  $92 \times 41 =$



12)  $85 \times 63 =$



Answers

1. 2,106
2. 1,989
3. 5,130
4. 2,212
5. 784
6. 1,058
7. 490
8. 735
9. 1,870
10. 1,054
11. 3,772
12. 5,355