



Use lattice multiplication to solve each problem.

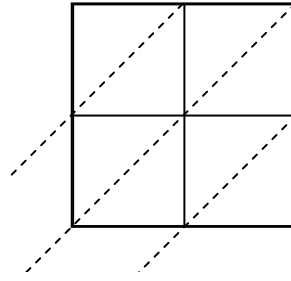
1)  $96 \times 32 =$



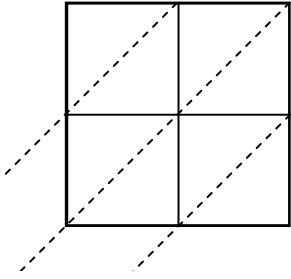
2)  $69 \times 54 =$



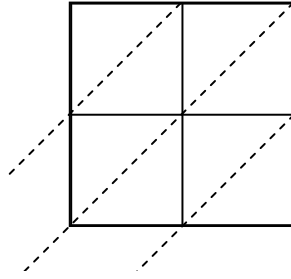
3)  $97 \times 28 =$



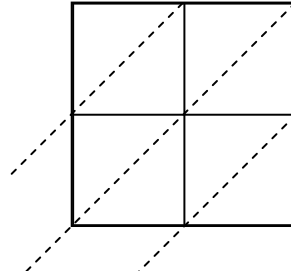
4)  $75 \times 91 =$



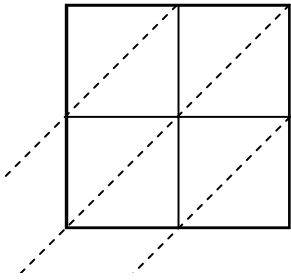
5)  $48 \times 79 =$



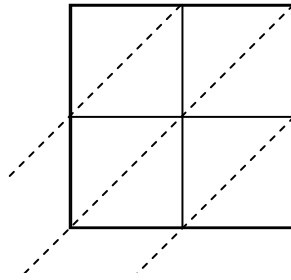
6)  $56 \times 73 =$



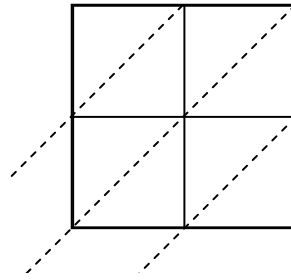
7)  $45 \times 69 =$



8)  $84 \times 45 =$



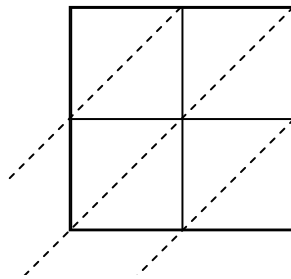
9)  $29 \times 41 =$



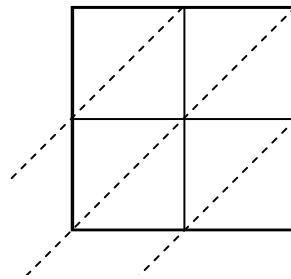
10)  $45 \times 24 =$



11)  $93 \times 59 =$



12)  $57 \times 39 =$



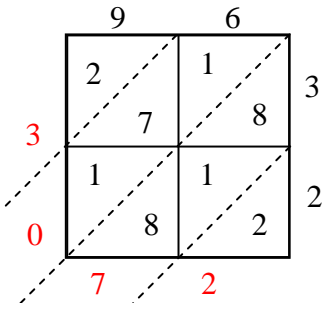
**Answers**

1. \_\_\_\_\_
2. \_\_\_\_\_
3. \_\_\_\_\_
4. \_\_\_\_\_
5. \_\_\_\_\_
6. \_\_\_\_\_
7. \_\_\_\_\_
8. \_\_\_\_\_
9. \_\_\_\_\_
10. \_\_\_\_\_
11. \_\_\_\_\_
12. \_\_\_\_\_

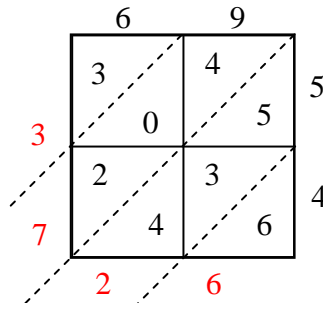


Use lattice multiplication to solve each problem.

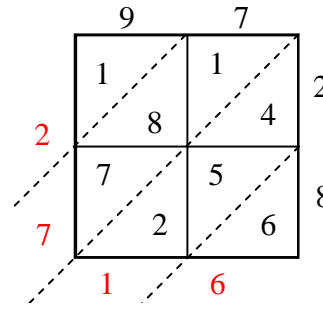
1)  $96 \times 32 =$



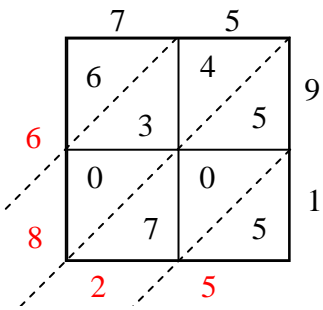
2)  $69 \times 54 =$



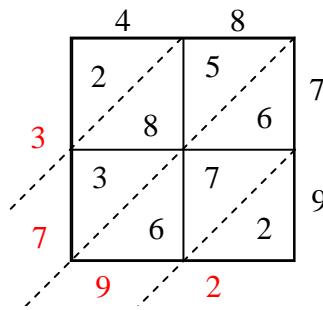
3)  $97 \times 28 =$



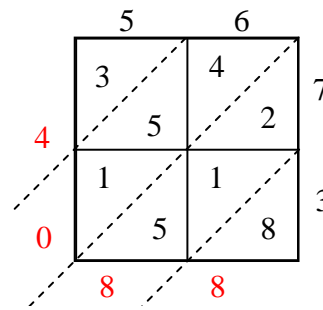
4)  $75 \times 91 =$



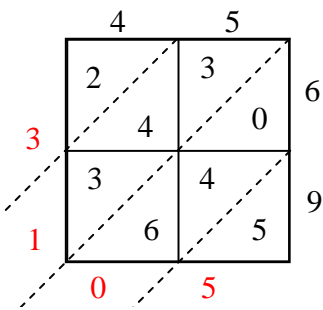
5)  $48 \times 79 =$



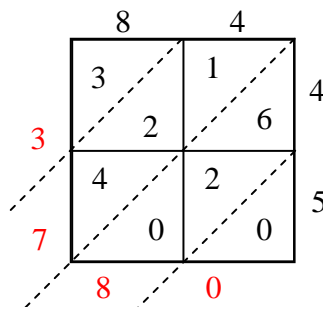
6)  $56 \times 73 =$



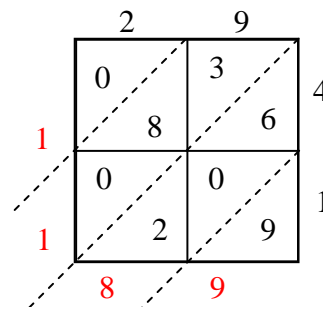
7)  $45 \times 69 =$



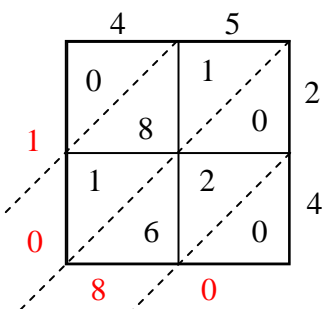
8)  $84 \times 45 =$



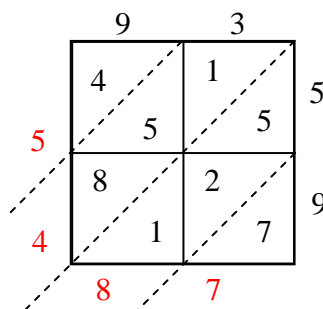
9)  $29 \times 41 =$



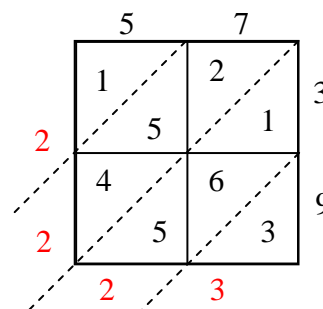
10)  $45 \times 24 =$



11)  $93 \times 59 =$



12)  $57 \times 39 =$



Answers

1. **3,072**

2. **3,726**

3. **2,716**

4. **6,825**

5. **3,792**

6. **4,088**

7. **3,105**

8. **3,780**

9. **1,189**

10. **1,080**

11. **5,487**

12. **2,223**