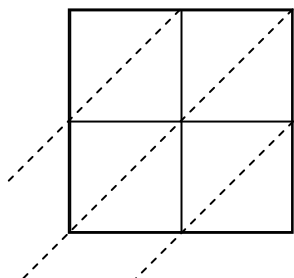


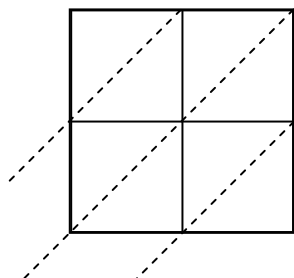


Use lattice multiplication to solve each problem.

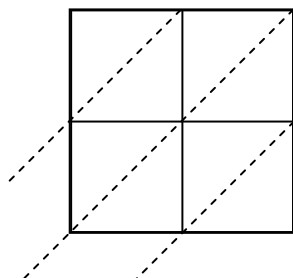
1) $27 \times 68 =$



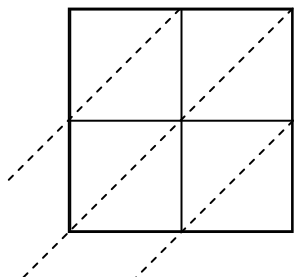
2) $46 \times 16 =$



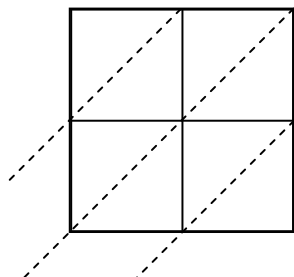
3) $47 \times 53 =$



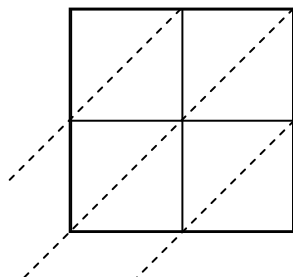
4) $39 \times 66 =$



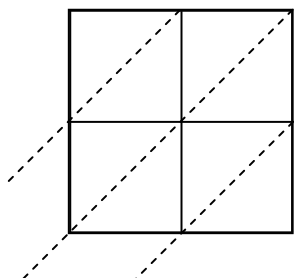
5) $23 \times 77 =$



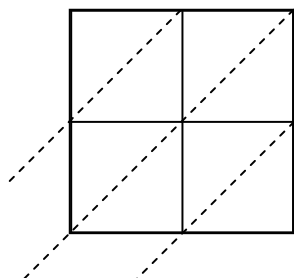
6) $25 \times 55 =$



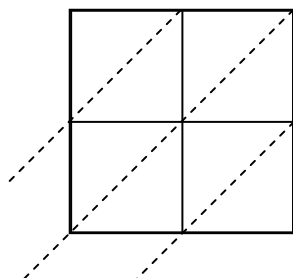
7) $58 \times 40 =$



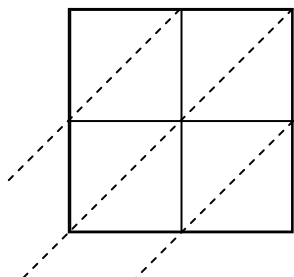
8) $63 \times 29 =$



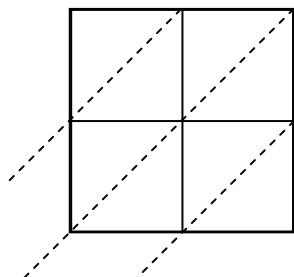
9) $77 \times 62 =$



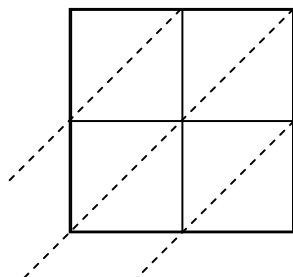
10) $84 \times 66 =$



11) $54 \times 95 =$



12) $77 \times 65 =$



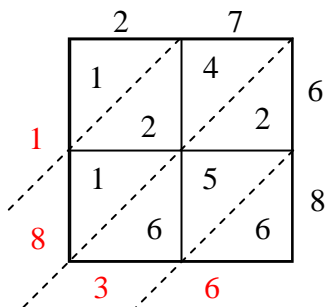
Answers

1. _____
2. _____
3. _____
4. _____
5. _____
6. _____
7. _____
8. _____
9. _____
10. _____
11. _____
12. _____

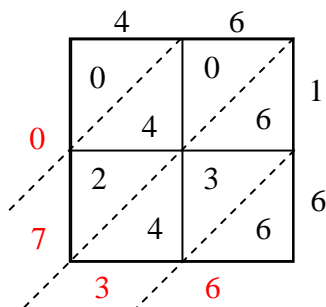


Use lattice multiplication to solve each problem.

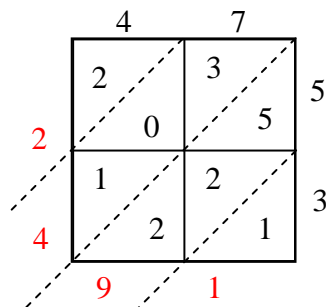
1) $27 \times 68 =$



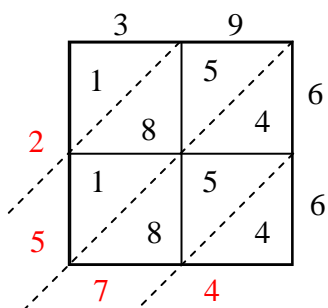
2) $46 \times 16 =$



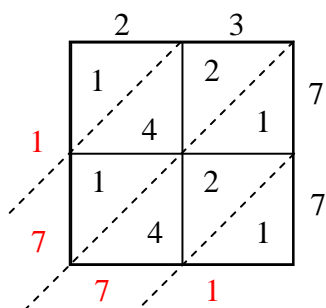
3) $47 \times 53 =$



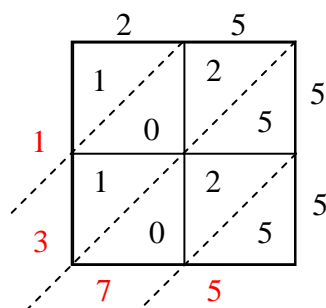
4) $39 \times 66 =$



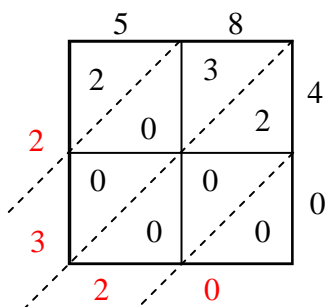
5) $23 \times 77 =$



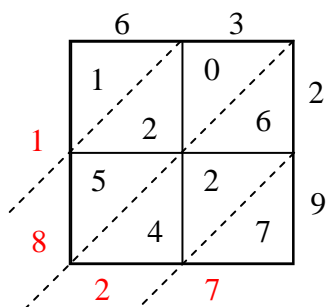
6) $25 \times 55 =$



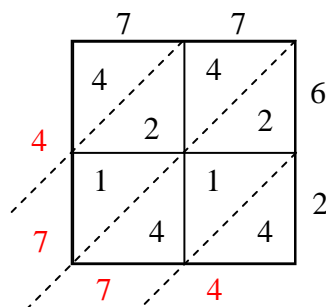
7) $58 \times 40 =$



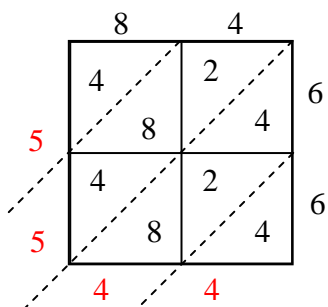
8) $63 \times 29 =$



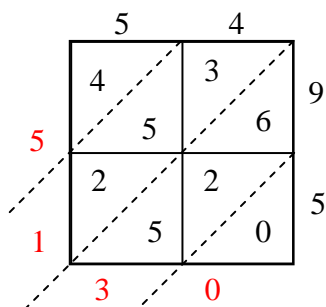
9) $77 \times 62 =$



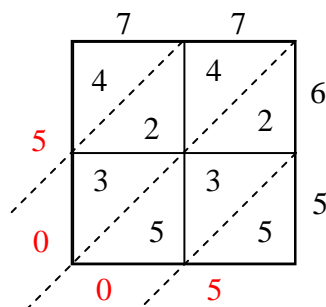
10) $84 \times 66 =$



11) $54 \times 95 =$



12) $77 \times 65 =$



Answers

1. 1,836
2. 736
3. 2,491
4. 2,574
5. 1,771
6. 1,375
7. 2,320
8. 1,827
9. 4,774
10. 5,544
11. 5,130
12. 5,005