



Use lattice multiplication to solve each problem.

1)  $189 \times 31 =$



2)  $633 \times 58 =$



3)  $856 \times 16 =$



4)  $254 \times 35 =$



5)  $186 \times 28 =$



6)  $390 \times 84 =$



7)  $325 \times 37 =$



8)  $493 \times 91 =$



9)  $348 \times 20 =$



10)  $894 \times 10 =$



11)  $961 \times 10 =$



12)  $317 \times 15 =$



**Answers**

1. \_\_\_\_\_

2. \_\_\_\_\_

3. \_\_\_\_\_

4. \_\_\_\_\_

5. \_\_\_\_\_

6. \_\_\_\_\_

7. \_\_\_\_\_

8. \_\_\_\_\_

9. \_\_\_\_\_

10. \_\_\_\_\_

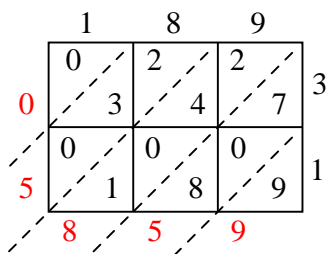
11. \_\_\_\_\_

12. \_\_\_\_\_

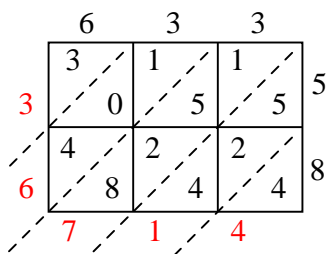


Use lattice multiplication to solve each problem.

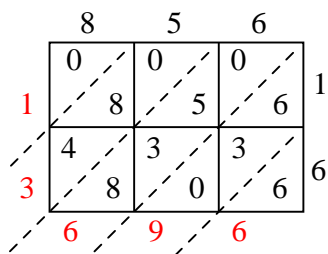
1)  $189 \times 31 =$



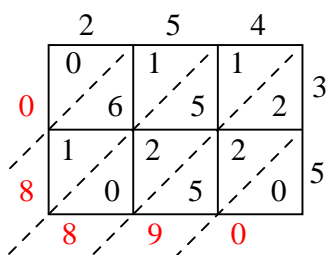
2)  $633 \times 58 =$



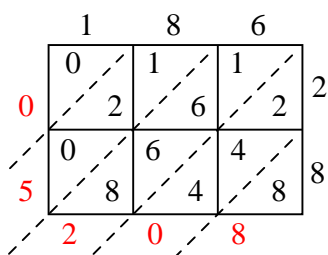
3)  $856 \times 16 =$



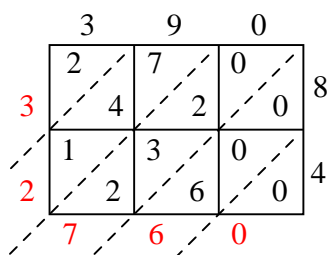
4)  $254 \times 35 =$



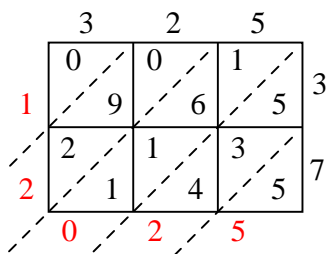
5)  $186 \times 28 =$



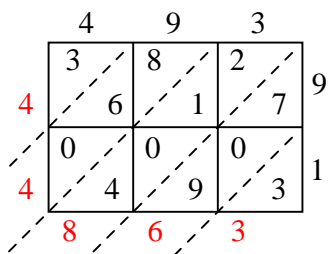
6)  $390 \times 84 =$



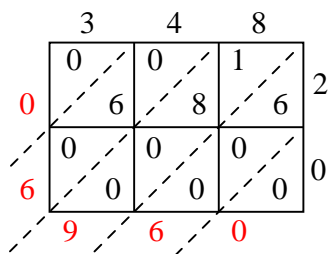
7)  $325 \times 37 =$



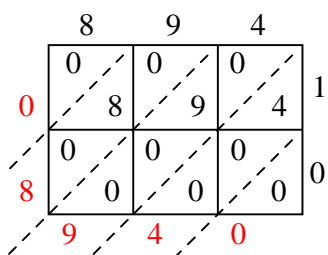
8)  $493 \times 91 =$



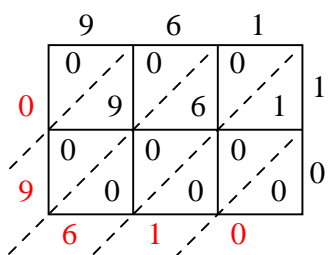
9)  $348 \times 20 =$



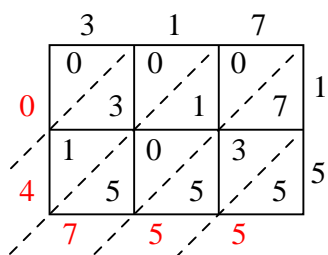
10)  $894 \times 10 =$



11)  $961 \times 10 =$



12)  $317 \times 15 =$



Answers

1. 5,859
2. 36,714
3. 13,696
4. 8,890
5. 5,208
6. 32,760
7. 12,025
8. 44,863
9. 6,960
10. 8,940
11. 9,610
12. 4,755