



Use lattice multiplication to solve each problem.

1)  $636 \times 32 =$



2)  $339 \times 54 =$



3)  $637 \times 28 =$



4)  $525 \times 91 =$



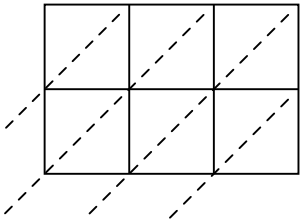
5)  $768 \times 79 =$



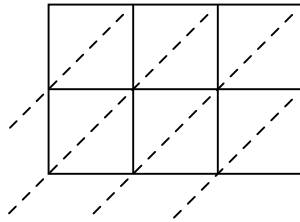
6)  $686 \times 73 =$



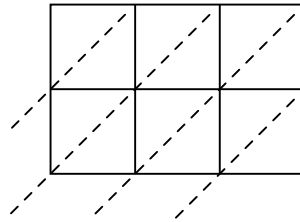
7)  $675 \times 69 =$



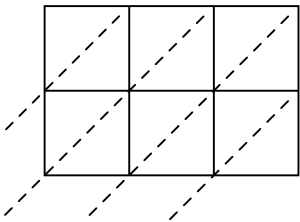
8)  $714 \times 45 =$



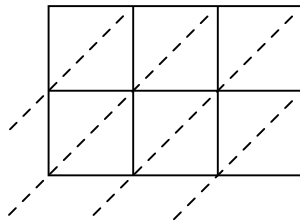
9)  $389 \times 41 =$



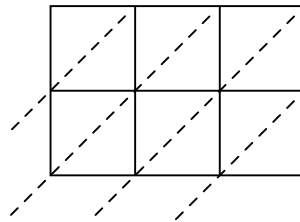
10)  $135 \times 24 =$



11)  $363 \times 59 =$



12)  $417 \times 39 =$



**Answers**

1. \_\_\_\_\_

2. \_\_\_\_\_

3. \_\_\_\_\_

4. \_\_\_\_\_

5. \_\_\_\_\_

6. \_\_\_\_\_

7. \_\_\_\_\_

8. \_\_\_\_\_

9. \_\_\_\_\_

10. \_\_\_\_\_

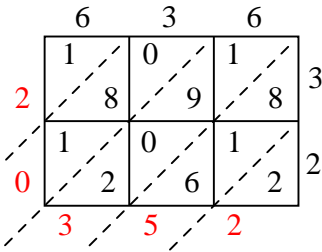
11. \_\_\_\_\_

12. \_\_\_\_\_

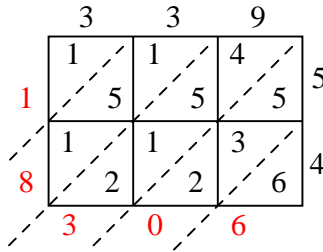


Use lattice multiplication to solve each problem.

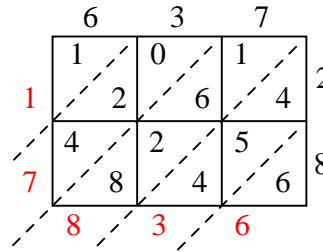
1)  $636 \times 32 =$



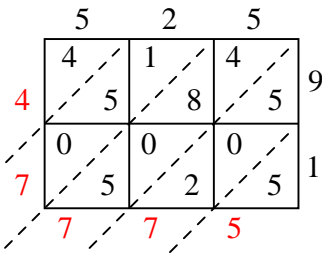
2)  $339 \times 54 =$



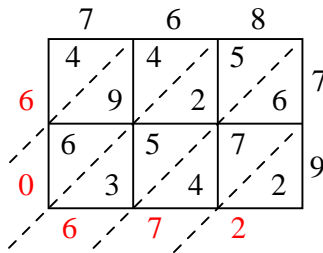
3)  $637 \times 28 =$



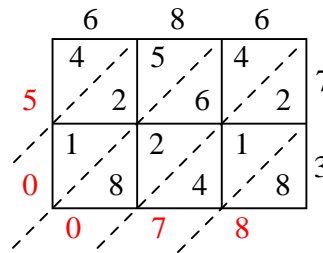
4)  $525 \times 91 =$



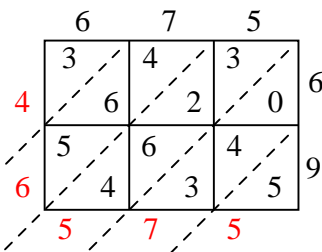
5)  $768 \times 79 =$



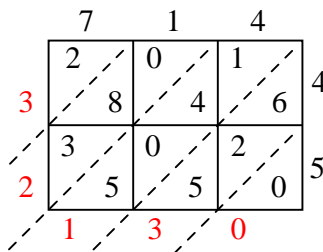
6)  $686 \times 73 =$



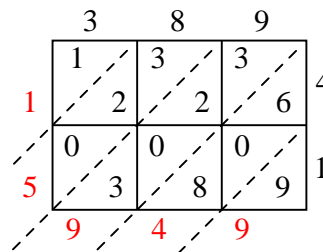
7)  $675 \times 69 =$



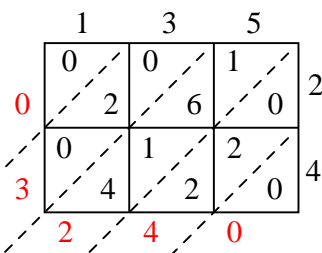
8)  $714 \times 45 =$



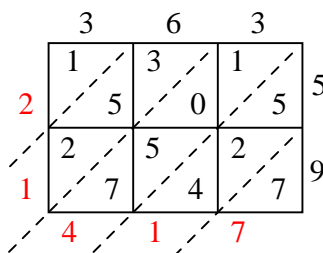
9)  $389 \times 41 =$



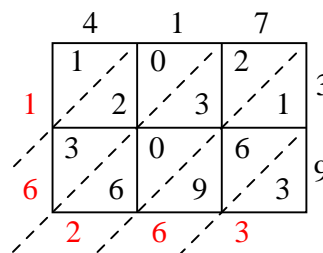
10)  $135 \times 24 =$



11)  $363 \times 59 =$



12)  $417 \times 39 =$



Answers

1. 20,352
2. 18,306
3. 17,836
4. 47,775
5. 60,672
6. 50,078
7. 46,575
8. 32,130
9. 15,949
10. 3,240
11. 21,417
12. 16,263