





Use the array provided to solve each problem.


1)  $20 \times 22 =$




2)  $10 \times 13 =$




3)  $15 \times 10 =$




4)  $16 \times 10 =$



5)  $12 \times 10 =$



6)  $10 \times 11 =$



Answers

1. \_\_\_\_\_

2. \_\_\_\_\_

3. \_\_\_\_\_

4. \_\_\_\_\_

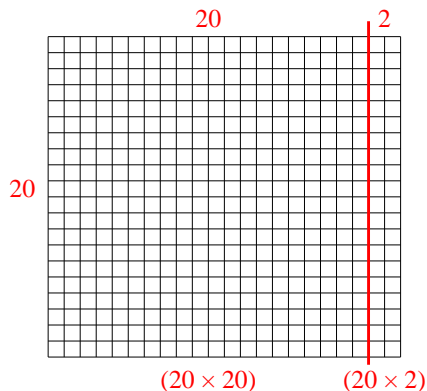
5. \_\_\_\_\_

6. \_\_\_\_\_

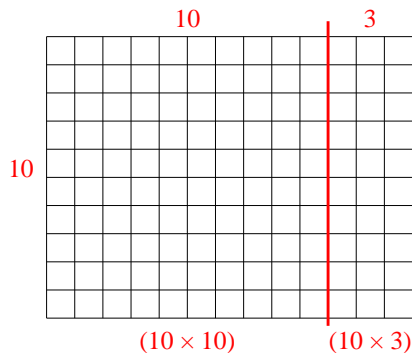


Use the array provided to solve each problem.

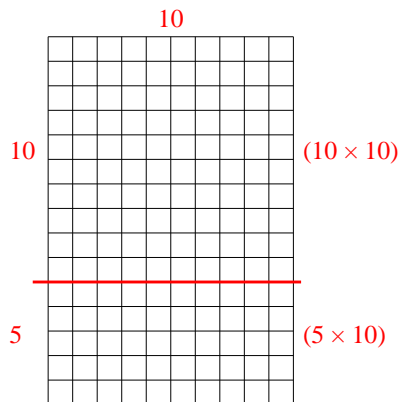
1)  $20 \times 22 =$



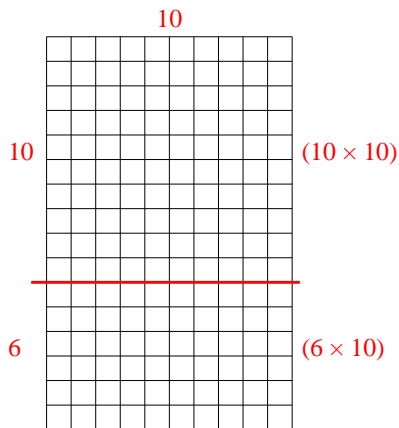
2)  $10 \times 13 =$



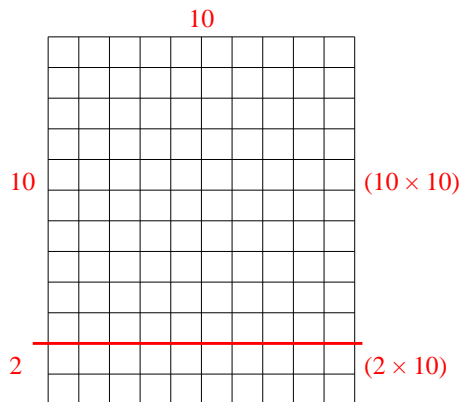
3)  $15 \times 10 =$



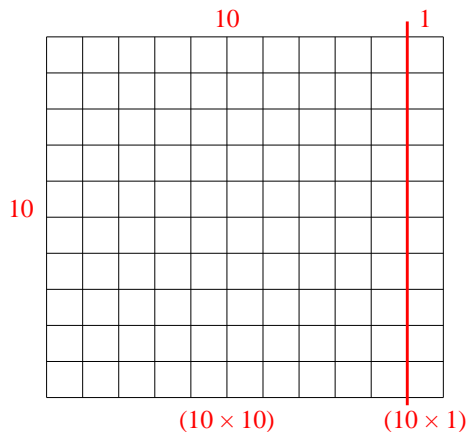
4)  $16 \times 10 =$



5)  $12 \times 10 =$



6)  $10 \times 11 =$



Answers

1. **440**

2. **130**

3. **150**

4. **160**

5. **120**

6. **110**