





Use the array provided to solve each problem.


1) $20 \times 14 =$




2) $19 \times 10 =$




3) $10 \times 17 =$




4) $10 \times 18 =$



5) $17 \times 10 =$



6) $18 \times 10 =$



Answers

1. _____

2. _____

3. _____

4. _____

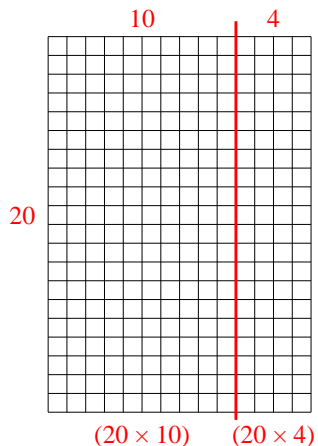
5. _____

6. _____

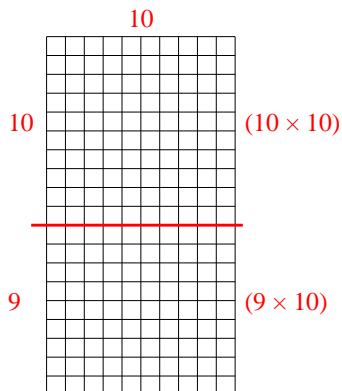


Use the array provided to solve each problem.

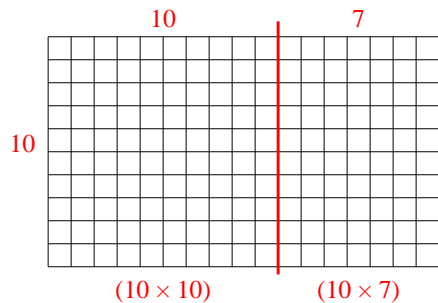
1) $20 \times 14 =$



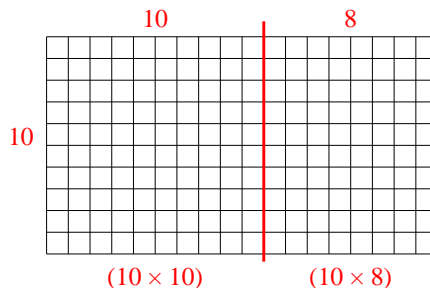
2) $19 \times 10 =$



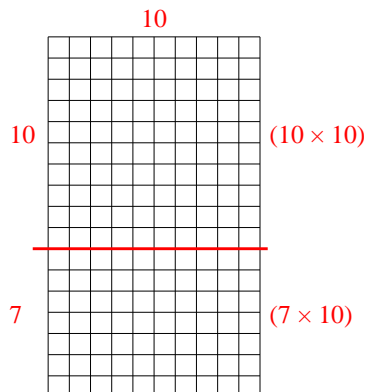
3) $10 \times 17 =$



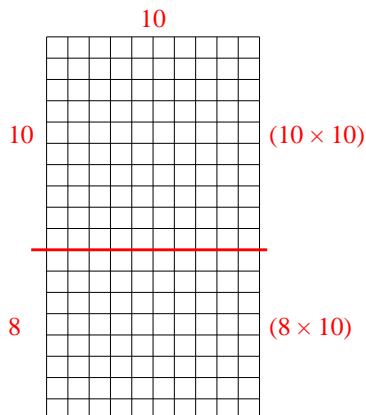
4) $10 \times 18 =$



5) $17 \times 10 =$



6) $18 \times 10 =$



Answers

1. 280

2. 190

3. 170

4. 180

5. 170

6. 180