





Use the array provided to solve each problem.


1) $59 \times 68 =$




2) $67 \times 75 =$




3) $53 \times 36 =$




4) $42 \times 55 =$



5) $43 \times 66 =$



6) $44 \times 28 =$



Answers

1. _____

2. _____

3. _____

4. _____

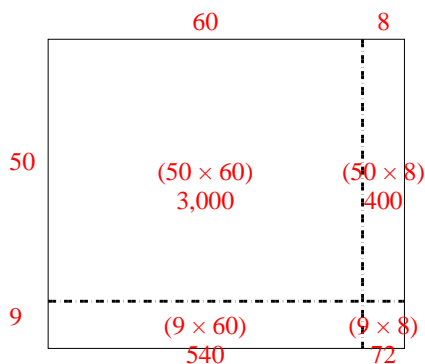
5. _____

6. _____

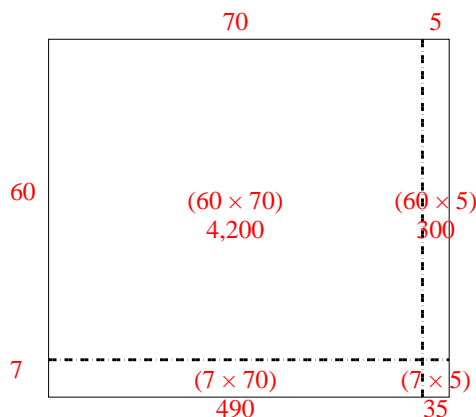


Use the array provided to solve each problem.

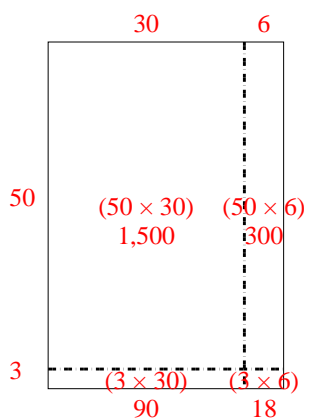
1) $59 \times 68 =$



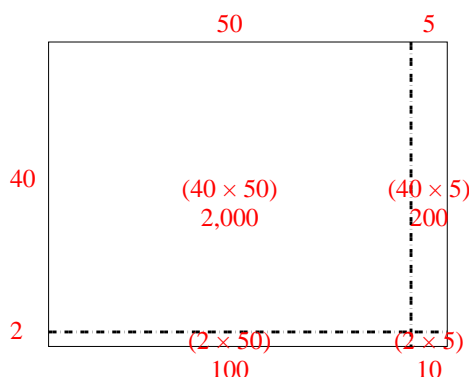
2) $67 \times 75 =$



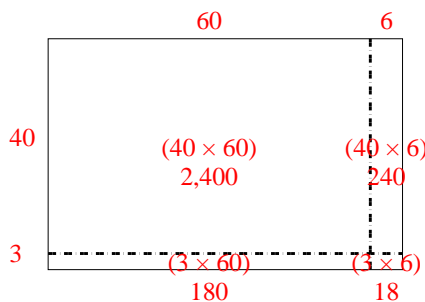
3) $53 \times 36 =$



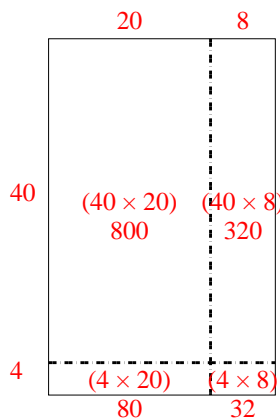
4) $42 \times 55 =$



5) $43 \times 66 =$



6) $44 \times 28 =$



Answers

1. **4,012**

2. **5,025**

3. **1,908**

4. **2,310**

5. **2,838**

6. **1,232**