


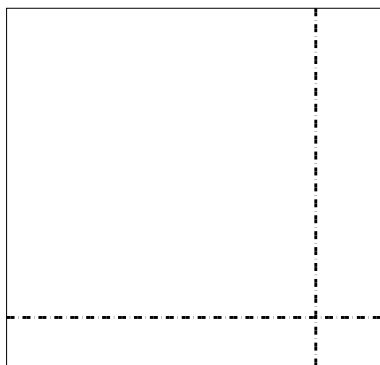


Use the array provided to solve each problem.


1) $62 \times 77 =$



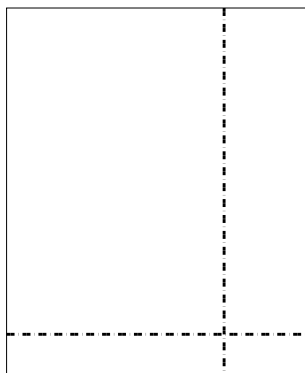
2) $35 \times 37 =$




3) $36 \times 23 =$




4) $34 \times 28 =$



5) $32 \times 28 =$



6) $35 \times 18 =$



Answers

1. _____

2. _____

3. _____

4. _____

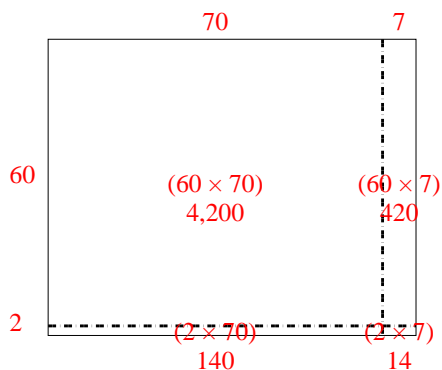
5. _____

6. _____

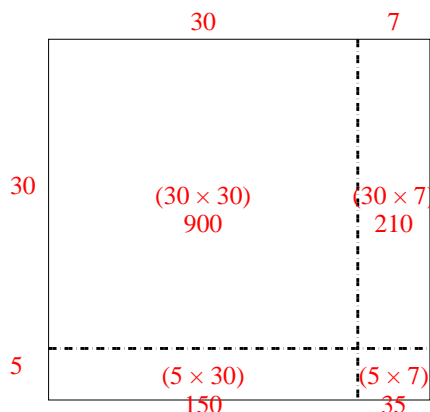


Use the array provided to solve each problem.

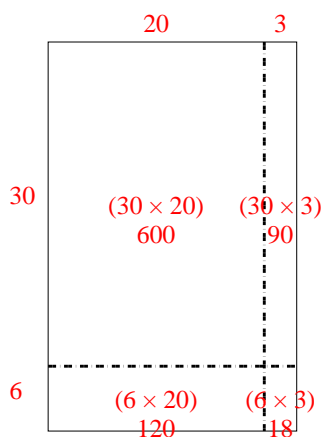
1) $62 \times 77 =$



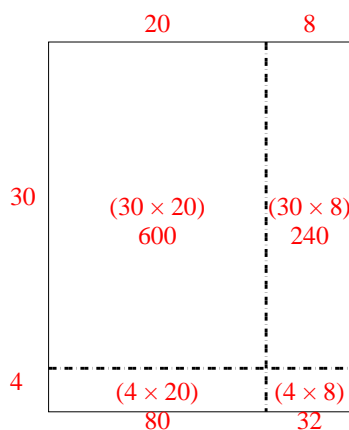
2) $35 \times 37 =$



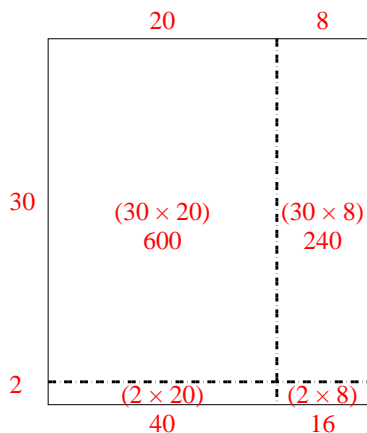
3) $36 \times 23 =$



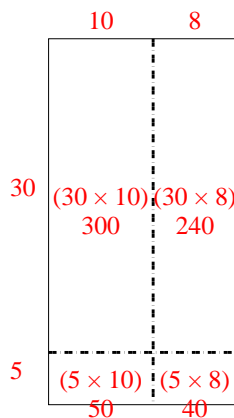
4) $34 \times 28 =$



5) $32 \times 28 =$



6) $35 \times 18 =$



Answers

1. **4,774**

2. **1,295**

3. **828**

4. **952**

5. **896**

6. **630**