





Use the array provided to solve each problem.


1)  $33 \times 30 =$




2)  $20 \times 23 =$




3)  $20 \times 21 =$




4)  $20 \times 27 =$



5)  $20 \times 26 =$



6)  $29 \times 20 =$



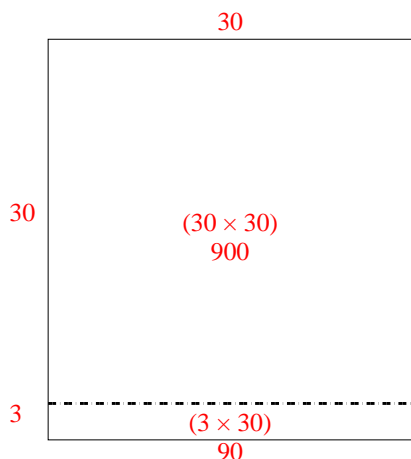
Answers

- 1. \_\_\_\_\_
- 2. \_\_\_\_\_
- 3. \_\_\_\_\_
- 4. \_\_\_\_\_
- 5. \_\_\_\_\_
- 6. \_\_\_\_\_

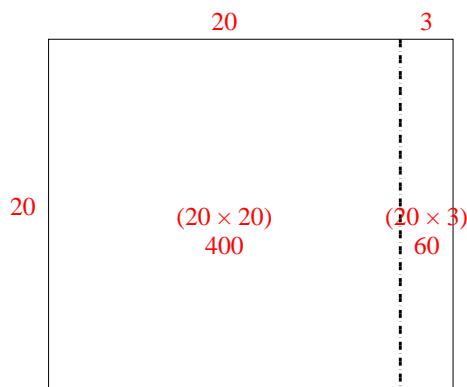


Use the array provided to solve each problem.

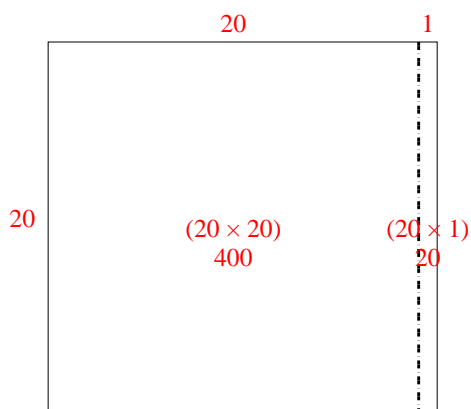
1)  $33 \times 30 =$



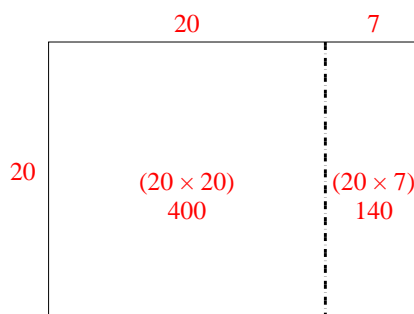
2)  $20 \times 23 =$



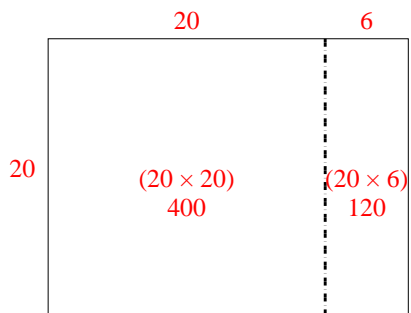
3)  $20 \times 21 =$



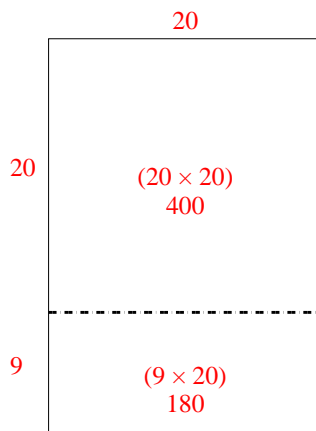
4)  $20 \times 27 =$



5)  $20 \times 26 =$



6)  $29 \times 20 =$



Answers

1. **990**

2. **460**

3. **420**

4. **540**

5. **520**

6. **580**