




Use the array provided to solve each problem.


1) $20 \times 34 =$




2) $30 \times 25 =$




3) $20 \times 22 =$




4) $20 \times 26 =$



5) $20 \times 29 =$



6) $22 \times 20 =$



Answers

1. _____

2. _____

3. _____

4. _____

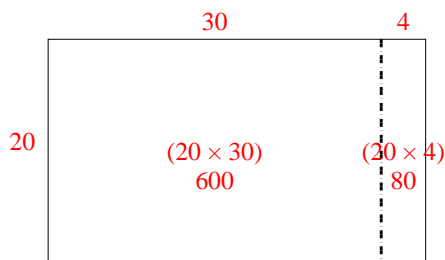
5. _____

6. _____

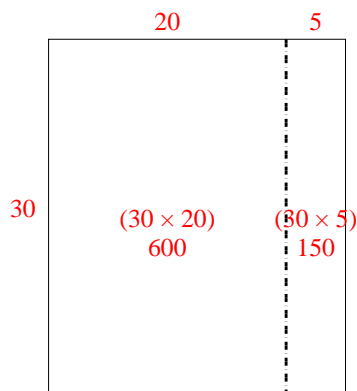


Use the array provided to solve each problem.

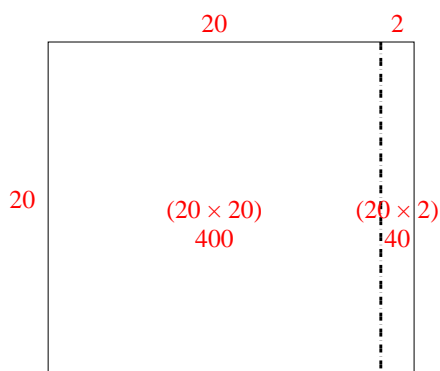
1) $20 \times 34 =$



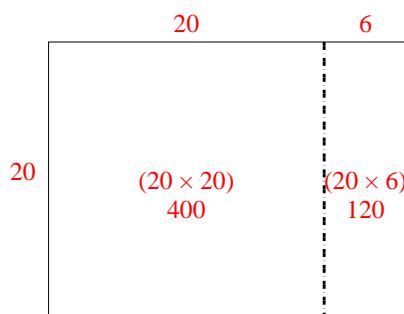
2) $30 \times 25 =$



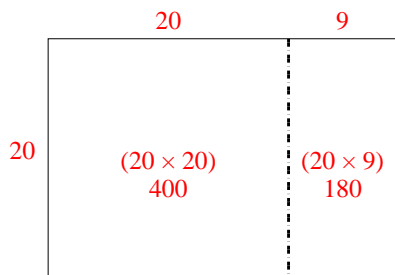
3) $20 \times 22 =$



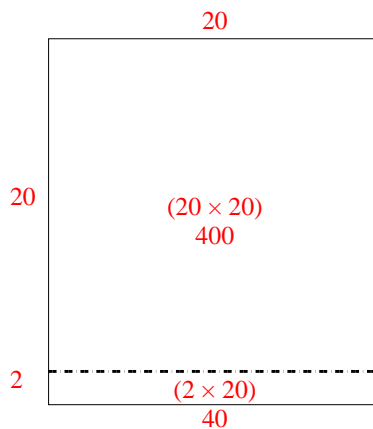
4) $20 \times 26 =$



5) $20 \times 29 =$



6) $22 \times 20 =$



Answers

1. 680

2. 750

3. 440

4. 520

5. 580

6. 440