



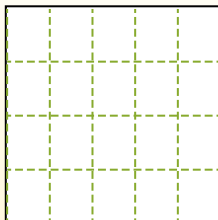
Partition the shape as described and then count to find the number of boxes.

Answers

Rows go left to right.

Columns go up and down.

This has 4 rows and 5 columns.
There are 20 boxes total.



1. _____
2. _____
3. _____
4. _____
5. _____
6. _____
7. _____
8. _____
9. _____


1) 3 rows
3 columns



2) 3 rows
2 columns



3) 2 rows
2 columns



4) 4 rows
3 columns



5) 4 rows
2 columns



6) 4 rows
4 columns



7) 3 rows
5 columns



8) 2 rows
5 columns



9) 2 rows
4 columns



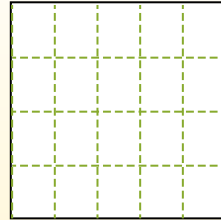
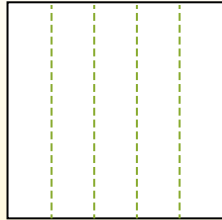
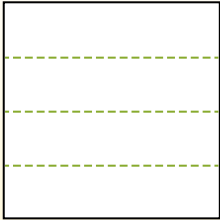


Partition the shape as described and then count to find the number of boxes.

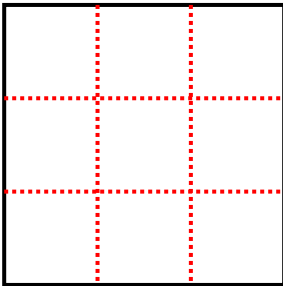
Rows go left to right.

Columns go up and down.

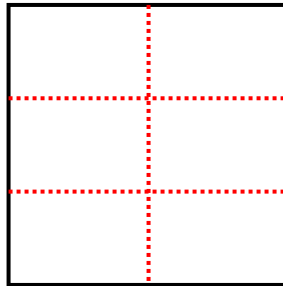
This has 4 rows and 5 columns.
There are 20 boxes total.



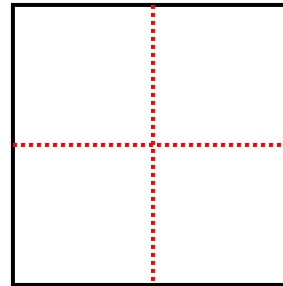
1) 3 rows
3 columns



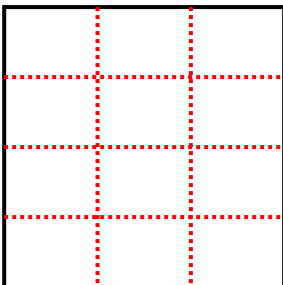
2) 3 rows
2 columns



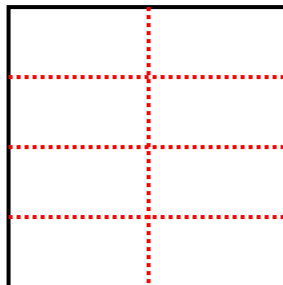
3) 2 rows
2 columns



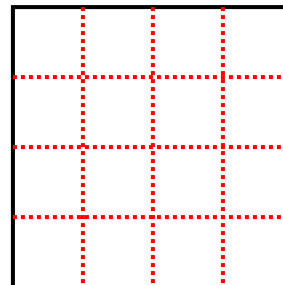
4) 4 rows
3 columns



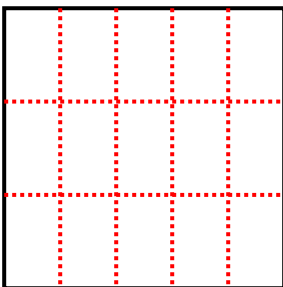
5) 4 rows
2 columns




6) 4 rows
4 columns



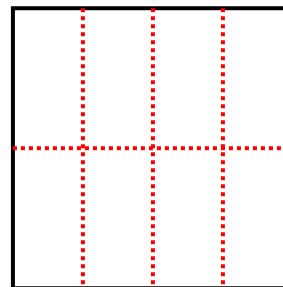
7) 3 rows
5 columns



8) 2 rows
5 columns



9) 2 rows
4 columns



Answers

1. 9

2. 6

3. 4

4. 12

5. 8

6. 16

7. 15

8. 10

9. 8