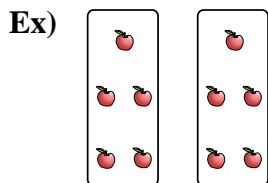


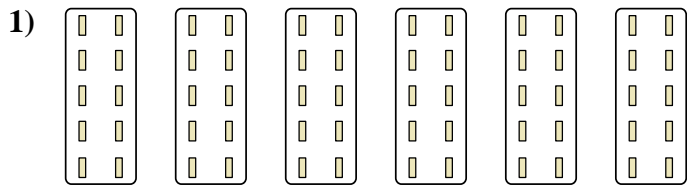


Express each set as a multiplication problem.

Answers



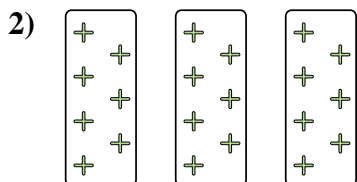
Ex.  $2 \times 5 = 10$



1. \_\_\_\_\_


2. \_\_\_\_\_

3. \_\_\_\_\_



4. \_\_\_\_\_



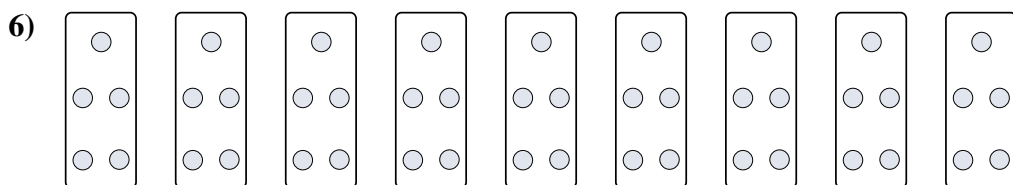
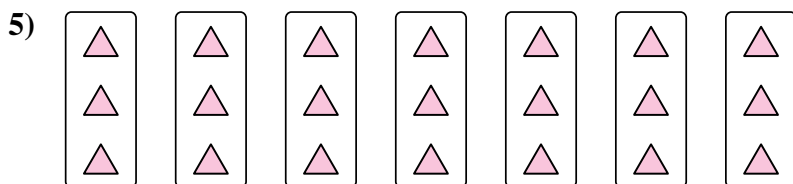
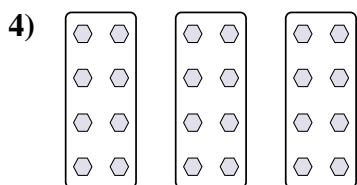
5. \_\_\_\_\_



6. \_\_\_\_\_

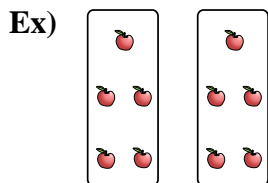
7. \_\_\_\_\_

8. \_\_\_\_\_



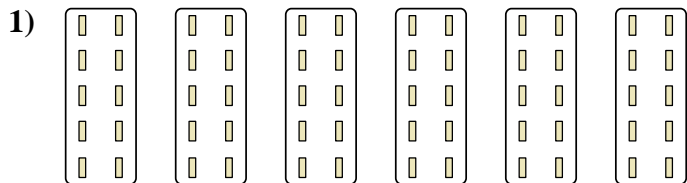


Express each set as a multiplication problem.

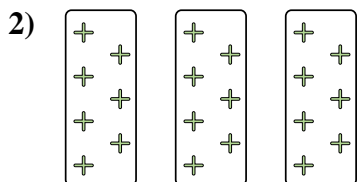


Answers

Ex.  $2 \times 5 = 10$




1.  $6 \times 10 = 60$



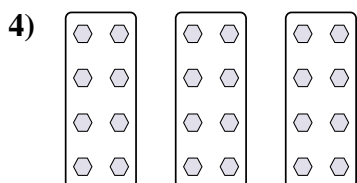
2.  $3 \times 7 = 21$

3.  $10 \times 3 = 30$



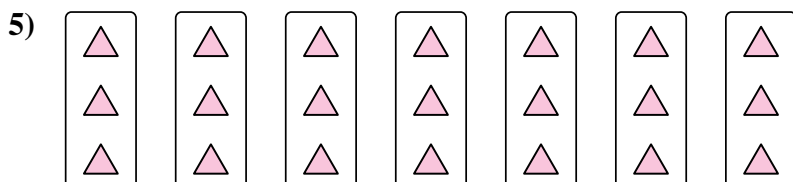
4.  $3 \times 8 = 24$

5.  $7 \times 3 = 21$



6.  $9 \times 5 = 45$

7.  $9 \times 6 = 54$



8.  $4 \times 10 = 40$

