




Express each set as a multiplication problem.

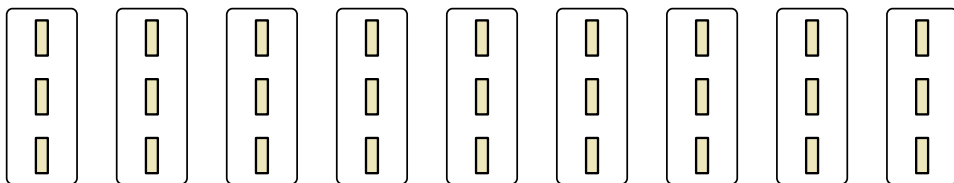
**Answers**

Ex)



Ex.  $8 \times 5 = 40$

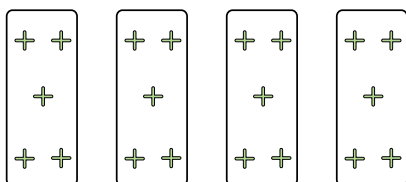
1)



1. \_\_\_\_\_

2. \_\_\_\_\_

2)




3. \_\_\_\_\_

4. \_\_\_\_\_

5. \_\_\_\_\_

3)

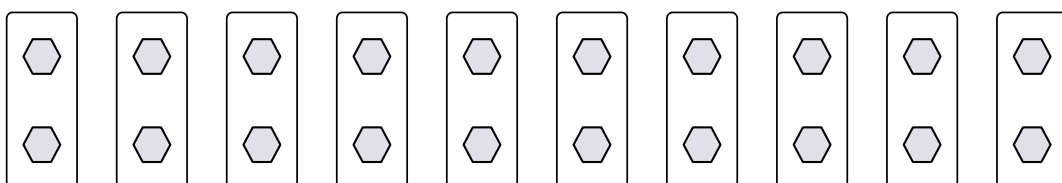


6. \_\_\_\_\_

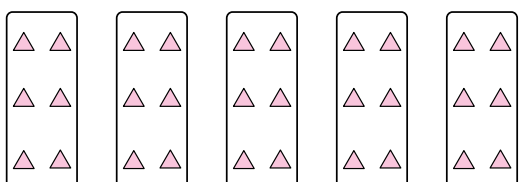
7. \_\_\_\_\_

8. \_\_\_\_\_

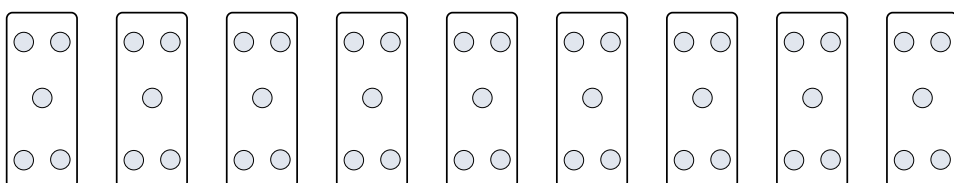
4)




5)




6)



7)



8)





Express each set as a multiplication problem.

Ex)

Ex. 8×5=40

1)

1. 9×3=27

2. 4×5=20

2)

3. 5×8=40

4. 10×2=20

3)

5. 5×6=30

6. 9×5=45

4)

7. 8×2=16

8. 7×8=56

5)

6)

7)

8)