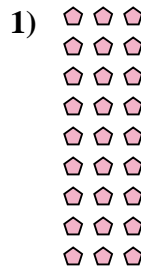
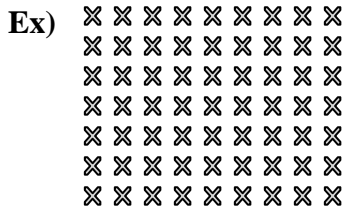




Write each array as a multiplication problem and solve.



Answers

Ex. 7 × 9 = 63

1. _____

2. _____

3. _____

4. _____

5. _____

6. _____





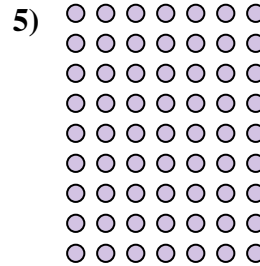


7. _____

8. _____

9. _____

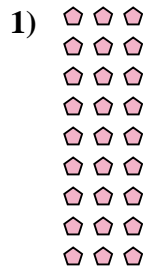
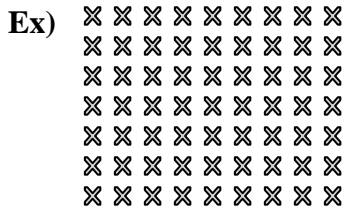
10. _____

11. _____





Write each array as a multiplication problem and solve.



Answers

Ex. $7 \times 9 = 63$

1. $9 \times 3 = 27$

2. $6 \times 2 = 12$

3. $9 \times 4 = 36$

4. $6 \times 5 = 30$

5. $9 \times 7 = 63$

6. $6 \times 10 = 60$

7. $7 \times 6 = 42$

8. $4 \times 10 = 40$

9. $5 \times 6 = 30$

10. $2 \times 3 = 6$

11. $6 \times 6 = 36$

