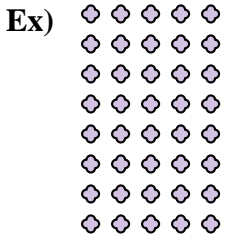




Write each array as a multiplication problem and solve.

Answers




Ex. $8 \times 5 = 40$

1. _____

2. _____

3. _____

4. _____





5. _____

6. _____

7. _____

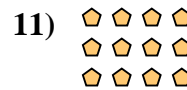

8. _____

9. _____




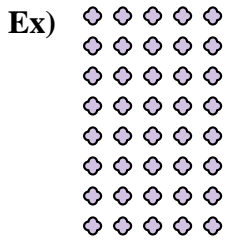
10. _____

11. _____





Write each array as a multiplication problem and solve.



Answers

Ex. 8 × 5 = 40

1. 9 × 3 = 27

2. 4 × 5 = 20

3. 5 × 8 = 40

4. 10 × 2 = 20

5. 5 × 6 = 30

6. 9 × 5 = 45

7. 8 × 2 = 16

8. 7 × 8 = 56

9. 2 × 4 = 8

10. 10 × 4 = 40

11. 3 × 4 = 12

