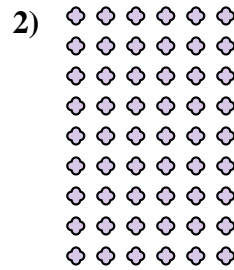
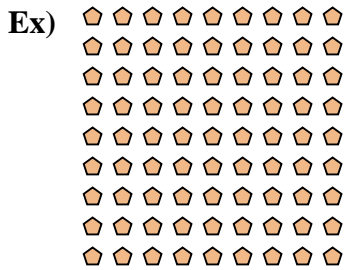






Write each array as a multiplication problem and solve.



Answers


Ex. 9 × 9 = 81

1. 5 × 6 = 30

2. 9 × 6 = 54

3. 9 × 5 = 45

4. 7 × 9 = 63





5. 3 × 5 = 15

6. 6 × 4 = 24

7. 10 × 6 = 60

8. 4 × 10 = 40



9. 7 × 3 = 21

10. 6 × 3 = 18

11. 8 × 4 = 32

