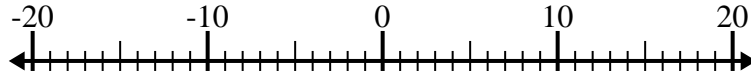




Solve each problem. Use the numberline if needed.

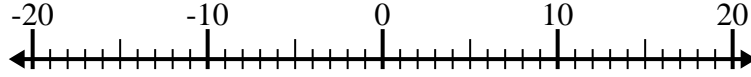
Answers

1) $12 + (-15) =$ _____



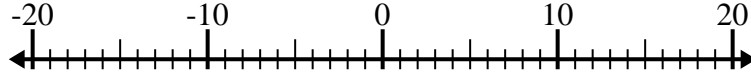
1. _____

2) $(-8) - (-6) =$ _____



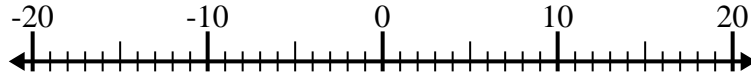
2. _____

3) $5 - (-9) =$ _____



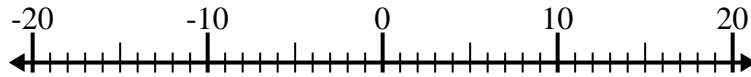
3. _____

4) $(-10) + (-6) =$ _____



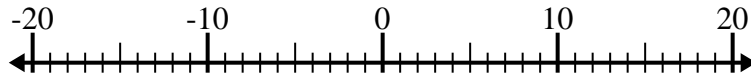
4. _____

5) $3 + (-15) =$ _____



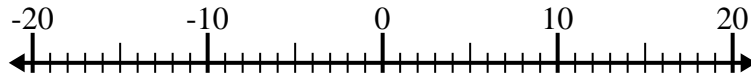
5. _____

6) $(-12) - (-14) =$ _____



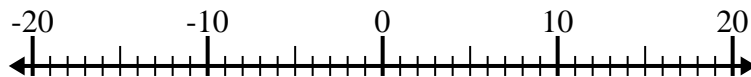
6. _____

7) $(-11) - 7 =$ _____



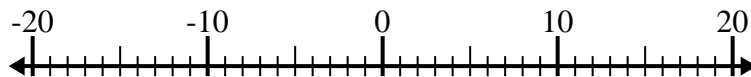
7. _____

8) $(-4) + 10 =$ _____



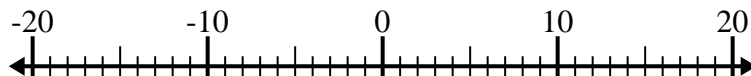
8. _____

9) $(-13) - 2 =$ _____



9. _____

10) $(-13) + (-7) =$ _____

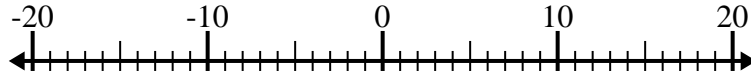


10. _____

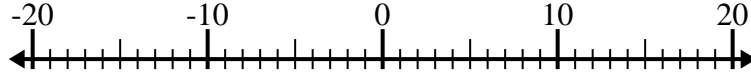


Solve each problem. Use the numberline if needed.

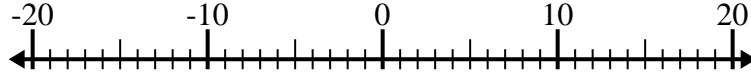
1) $12 + (-15) = \underline{-3}$



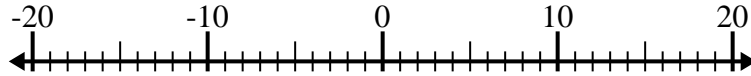
2) $(-8) - (-6) = \underline{-2}$



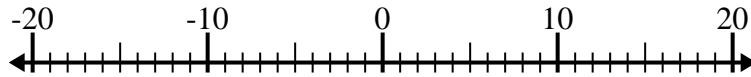
3) $5 - (-9) = \underline{14}$



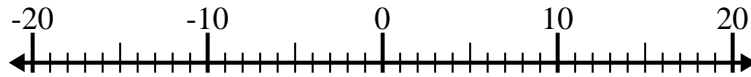
4) $(-10) + (-6) = \underline{-16}$



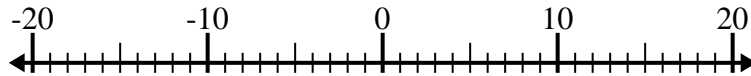
5) $3 + (-15) = \underline{-12}$



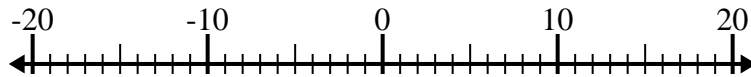
6) $(-12) - (-14) = \underline{2}$



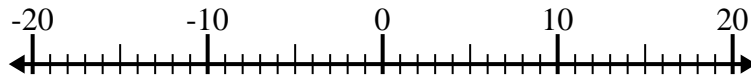
7) $(-11) - 7 = \underline{-18}$



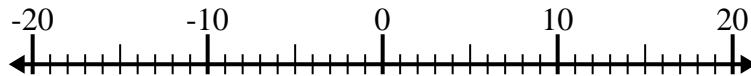
8) $(-4) + 10 = \underline{6}$



9) $(-13) - 2 = \underline{-15}$



10) $(-13) + (-7) = \underline{-20}$



Answers

1. **-3**

2. **-2**

3. **14**

4. **-16**

5. **-12**

6. **2**

7. **-18**

8. **6**

9. **-15**

10. **-20**